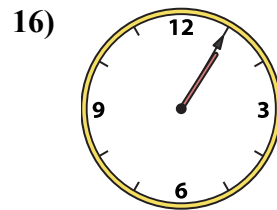
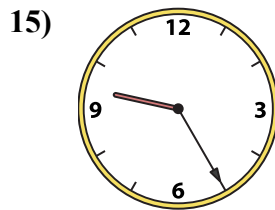
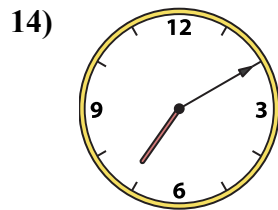
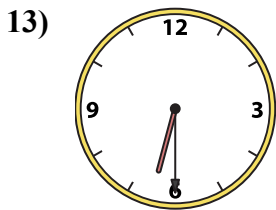
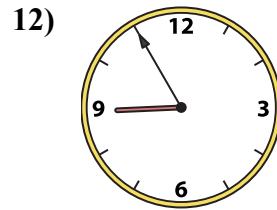
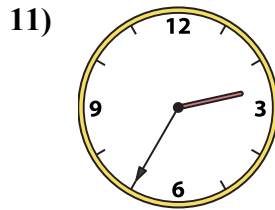
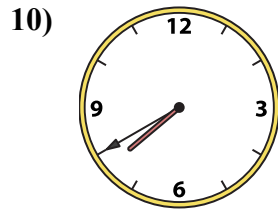
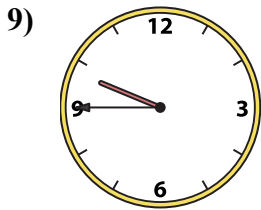
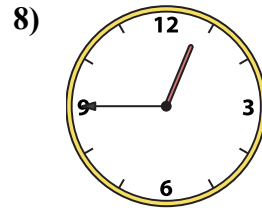
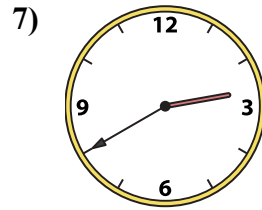
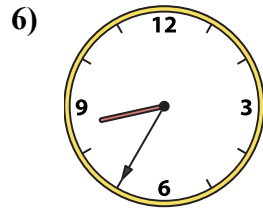
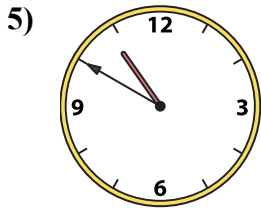
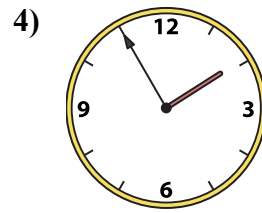
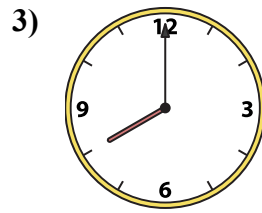
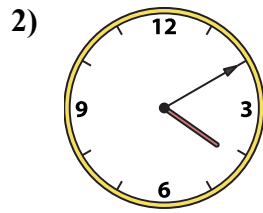
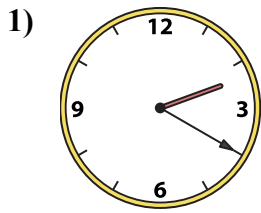




Ghép đồng hồ kim với đồng hồ kỹ thuật số.

Câu trả lời



1. _____

2. _____

3. _____

4. _____

5. _____

6. _____

7. _____

8. _____

9. _____

10. _____

11. _____

12. _____

13. _____

14. _____

15. _____

16. _____

A. 9:25

B. 9:45

C. 2:35

D. 4:10

E. 8:55

F. 1:55

G. 7:40

H. 8:00

I. 2:40

J. 1:05

K. 12:45

L. 8:35

M. 7:10

N. 6:30

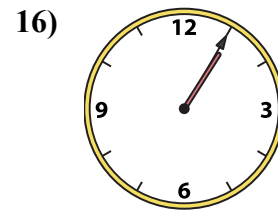
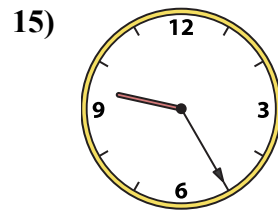
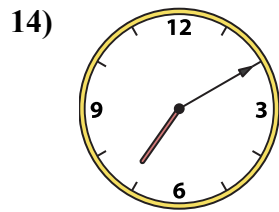
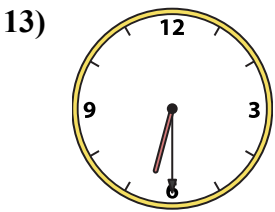
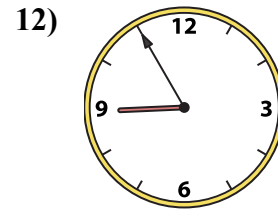
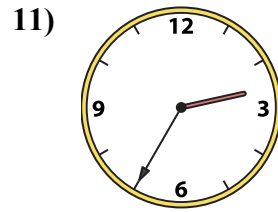
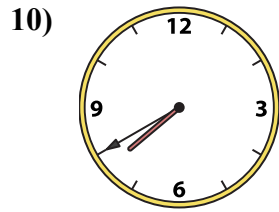
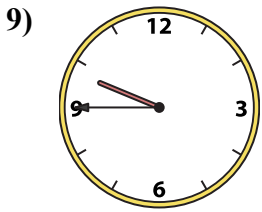
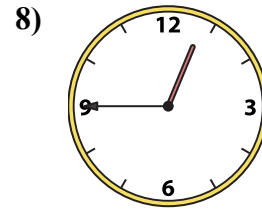
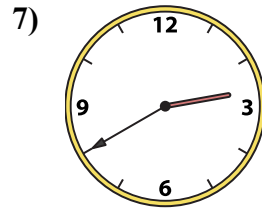
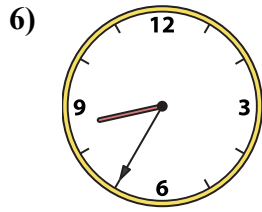
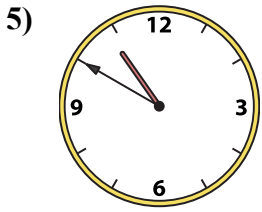
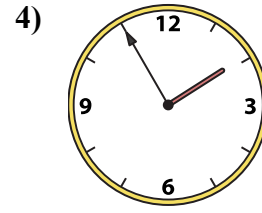
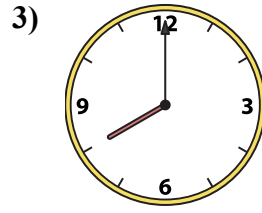
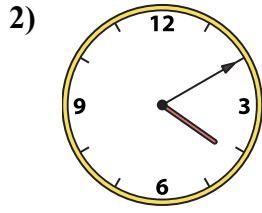
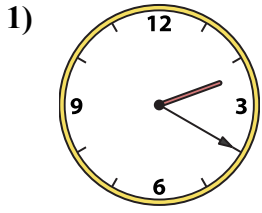
O. 2:20

P. 10:50



Ghép đồng hồ kim với đồng hồ kỹ thuật số.

Câu trả lời



A. 9:25

B. 9:45

C. 2:35

D. 4:10

E. 8:55

F. 1:55

G. 7:40

H. 8:00

I. 2:40

J. 1:05

K. 12:45

L. 8:35

M. 7:10

N. 6:30

O. 2:20

P. 10:50

1. **O**

2. **D**

3. **H**

4. **F**

5. **P**

6. **L**

7. **I**

8. **K**

9. **B**

10. **G**

11. **C**

12. **E**

13. **N**

14. **M**

15. **A**

16. **J**