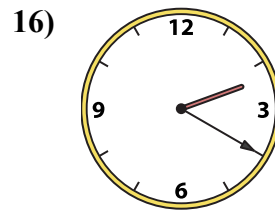
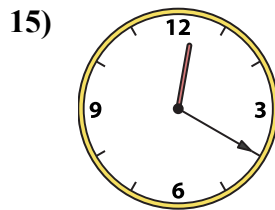
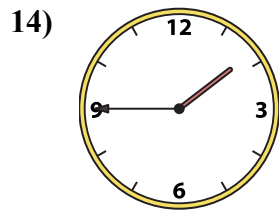
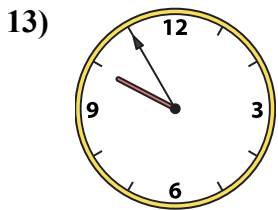
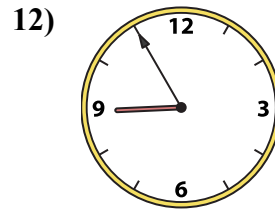
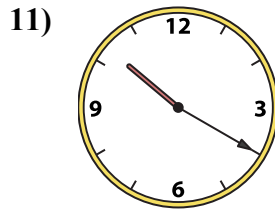
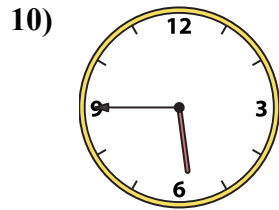
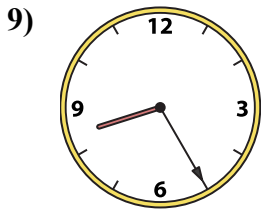
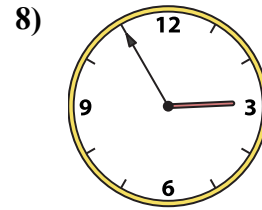
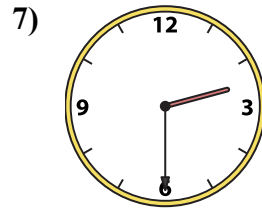
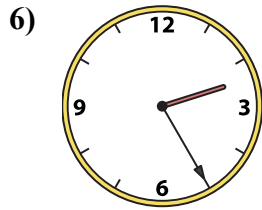
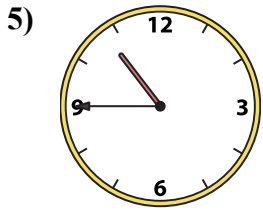
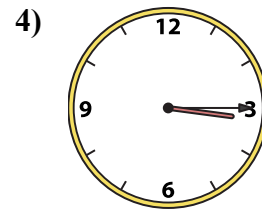
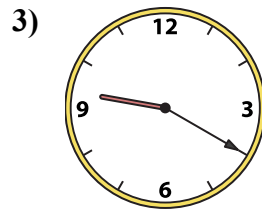
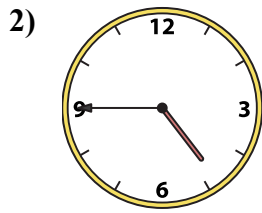
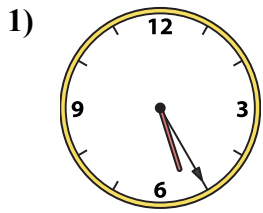




Ghép đồng hồ kim với đồng hồ kỹ thuật số.

Câu trả lời



1. _____

2. _____

3. _____

4. _____

5. _____

6. _____

7. _____

8. _____

9. _____

10. _____

11. _____

12. _____

13. _____

14. _____

15. _____

16. _____

A. 12:20

B. 8:25

C. 1:45

D. 3:15

E. 2:55

F. 4:45

G. 2:20

H. 2:25

I. 10:45

J. 9:20

K. 10:20

L. 5:45

M. 2:30

N. 9:55

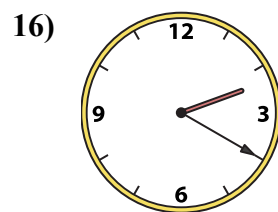
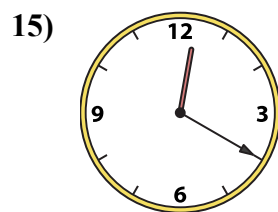
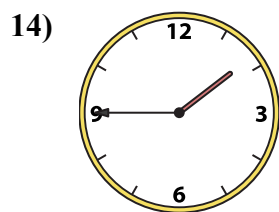
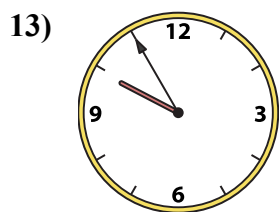
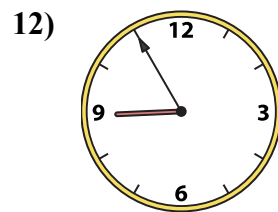
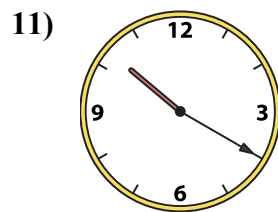
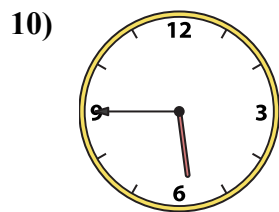
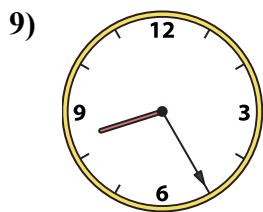
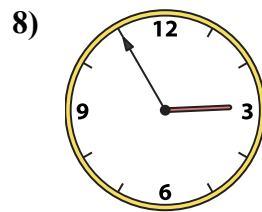
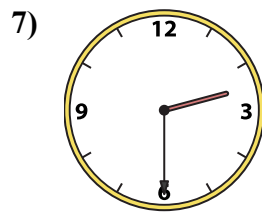
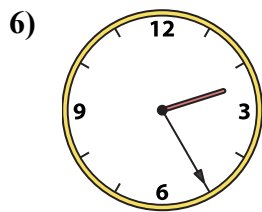
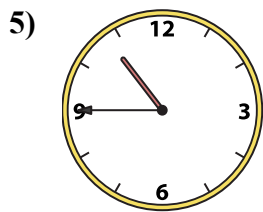
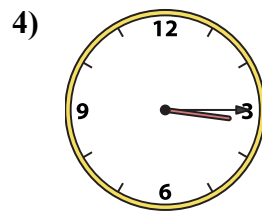
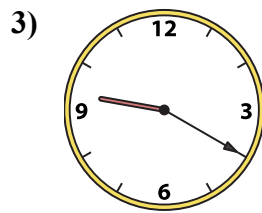
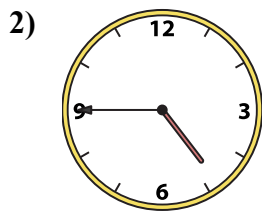
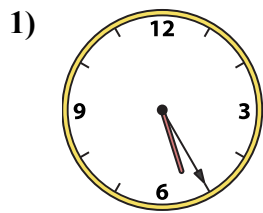
O. 8:55

P. 5:25



Ghép đồng hồ kim với đồng hồ kỹ thuật số.

Câu trả lời



- 1. **P**
- 2. **F**
- 3. **J**
- 4. **D**
- 5. **I**
- 6. **H**
- 7. **M**
- 8. **E**
- 9. **B**
- 10. **L**
- 11. **K**
- 12. **O**
- 13. **N**
- 14. **C**
- 15. **A**
- 16. **G**

A. **12:20**

B. **8:25**

C. **1:45**

D. **3:15**

E. **2:55**

F. **4:45**

G. **2:20**

H. **2:25**

I. **10:45**

J. **9:20**

K. **10:20**

L. **5:45**

M. **2:30**

N. **9:55**

O. **8:55**

P. **5:25**