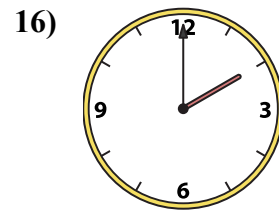
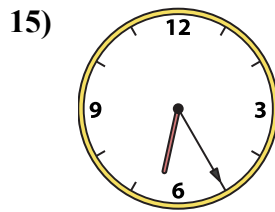
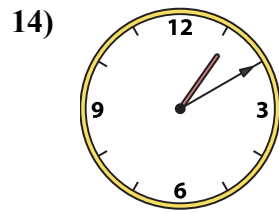
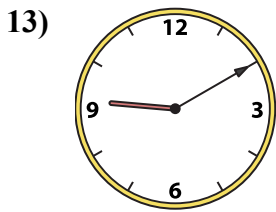
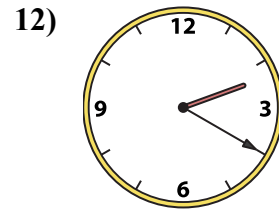
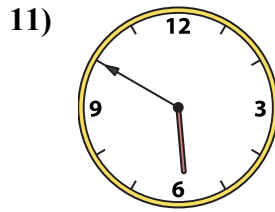
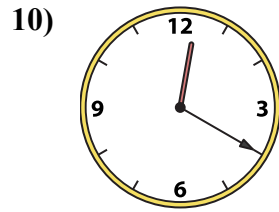
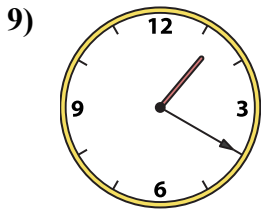
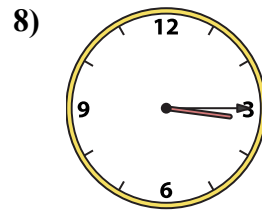
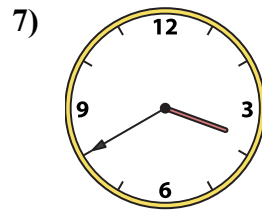
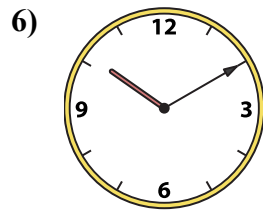
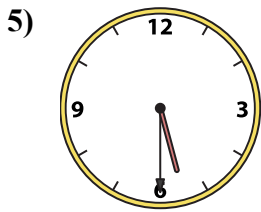
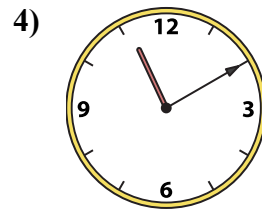
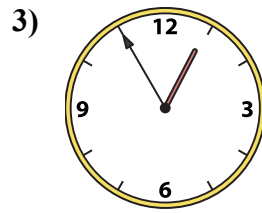
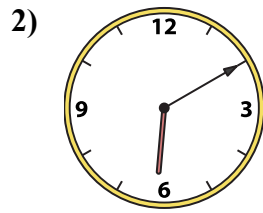
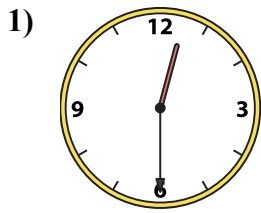




Ghép đồng hồ kim với đồng hồ kỹ thuật số.

Câu trả lời



1. _____
2. _____
3. _____
4. _____
5. _____
6. _____
7. _____
8. _____
9. _____
10. _____
11. _____
12. _____
13. _____
14. _____
15. _____
16. _____

A. 10:10

B. 3:40

C. 1:20

D. 12:30

E. 12:20

F. 3:15

G. 1:10

H. 6:10

I. 5:50

J. 2:00

K. 5:30

L. 6:25

M. 12:55

N. 11:10

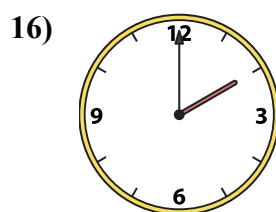
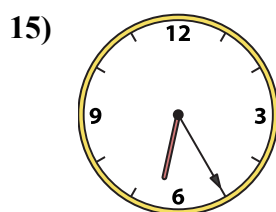
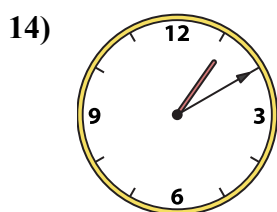
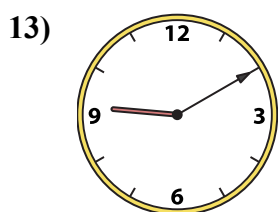
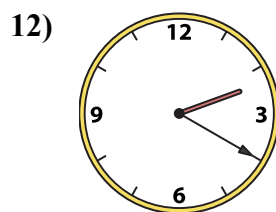
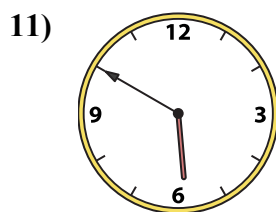
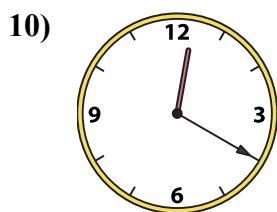
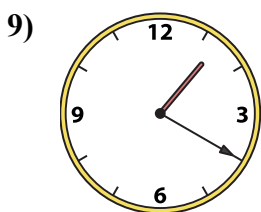
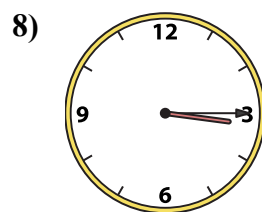
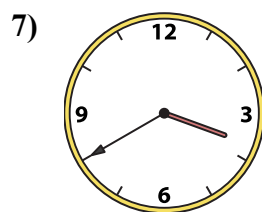
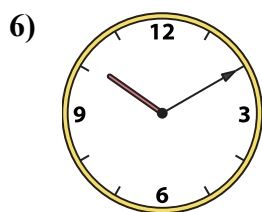
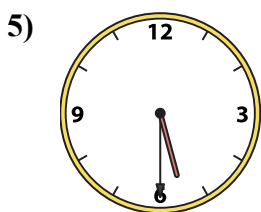
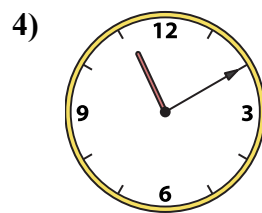
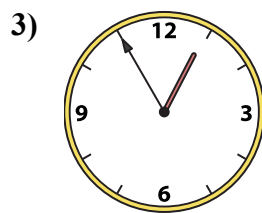
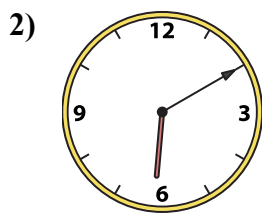
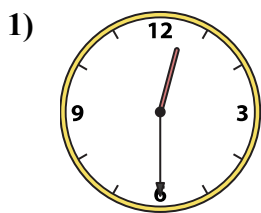
O. 9:10

P. 2:20



Ghép đồng hồ kim với đồng hồ kỹ thuật số.

Câu trả lời



1. **D**

2. **H**

3. **M**

4. **N**

5. **K**

6. **A**

7. **B**

8. **F**

9. **C**

10. **E**

11. **I**

12. **P**

13. **O**

14. **G**

15. **L**

16. **J**

A. **10:10**

B. **3:40**

C. **1:20**

D. **12:30**

E. **12:20**

F. **3:15**

G. **1:10**

H. **6:10**

I. **5:50**

J. **2:00**

K. **5:30**

L. **6:25**

M. **12:55**

N. **11:10**

O. **9:10**

P. **2:20**