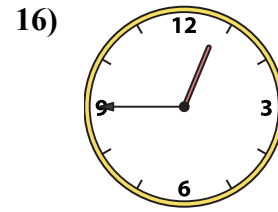
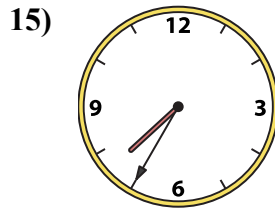
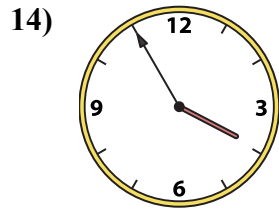
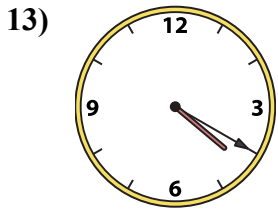
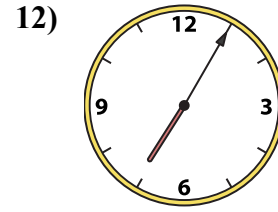
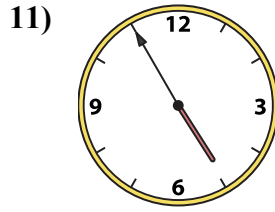
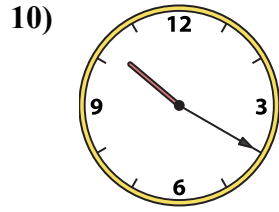
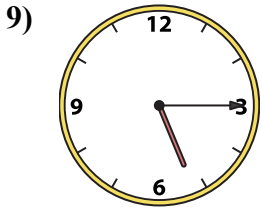
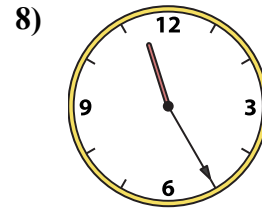
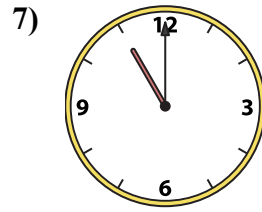
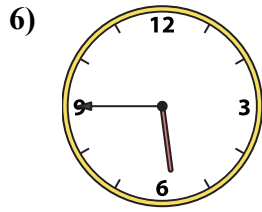
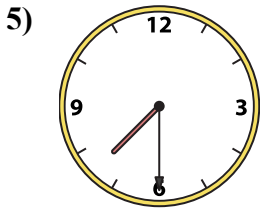
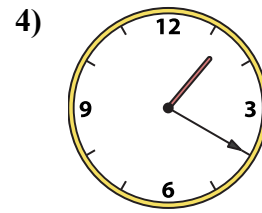
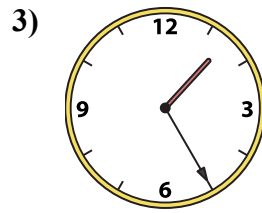
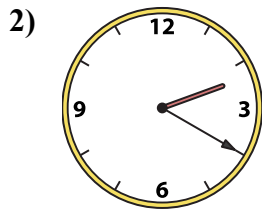
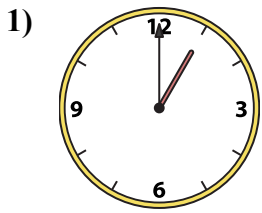




Ghép đồng hồ kim với đồng hồ kỹ thuật số.

Câu trả lời



A. 11:00

B. 1:20

C. 11:25

D. 5:15

E. 4:55

F. 4:20

G. 3:55

H. 5:45

I. 7:30

J. 1:00

K. 1:25

L. 12:45

M. 7:35

N. 2:20

O. 10:20

P. 7:05

1. _____

2. _____

3. _____

4. _____

5. _____

6. _____

7. _____

8. _____

9. _____

10. _____

11. _____

12. _____

13. _____

14. _____

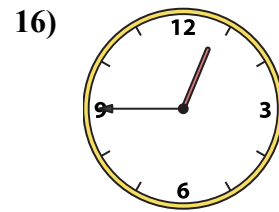
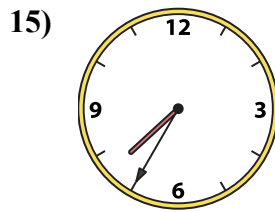
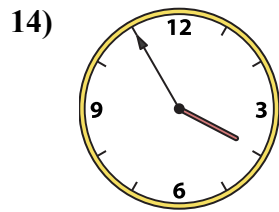
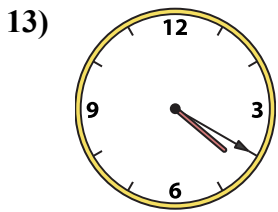
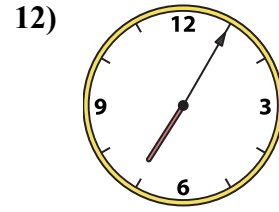
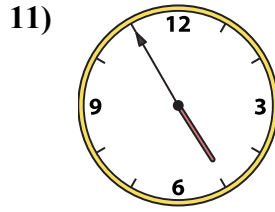
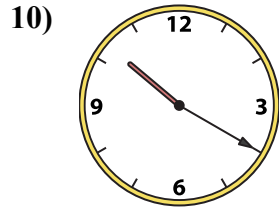
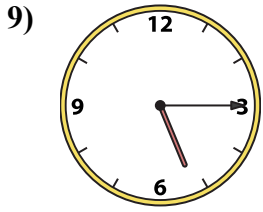
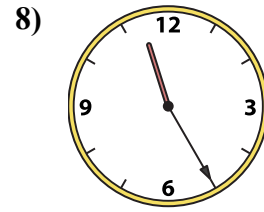
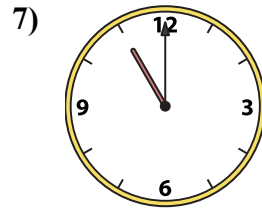
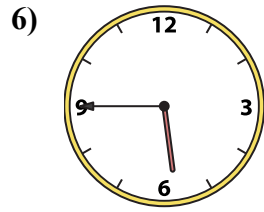
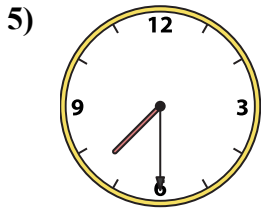
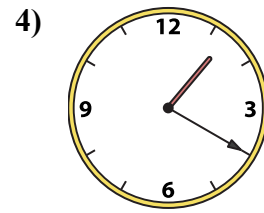
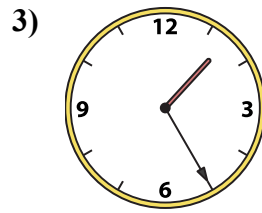
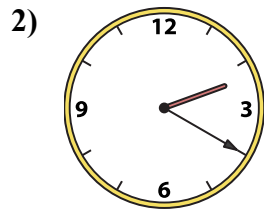
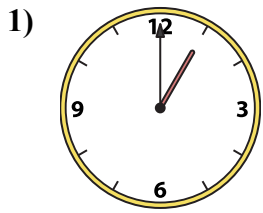
15. _____

16. _____



Ghép đồng hồ kim với đồng hồ kỹ thuật số.

Câu trả lời



1. **J**
2. **N**
3. **K**
4. **B**
5. **I**
6. **H**
7. **A**
8. **C**
9. **D**
10. **O**
11. **E**
12. **P**
13. **F**
14. **G**
15. **M**
16. **L**

A. 11:00

B. 1:20

C. 11:25

D. 5:15

E. 4:55

F. 4:20

G. 3:55

H. 5:45

I. 7:30

J. 1:00

K. 1:25

L. 12:45

M. 7:35

N. 2:20

O. 10:20

P. 7:05