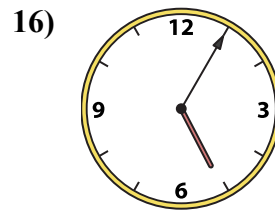
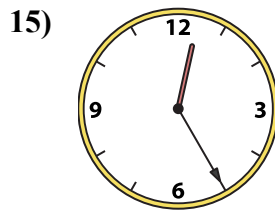
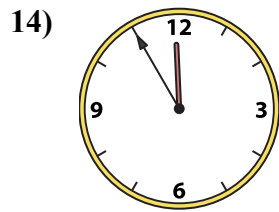
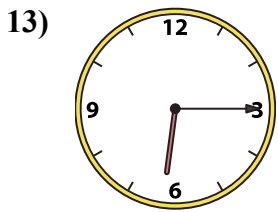
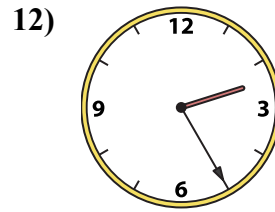
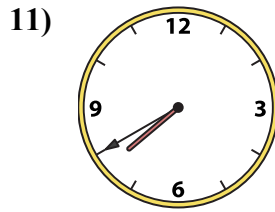
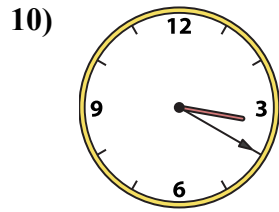
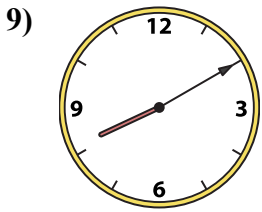
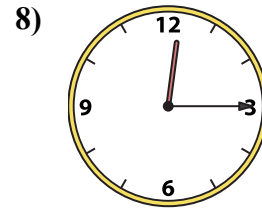
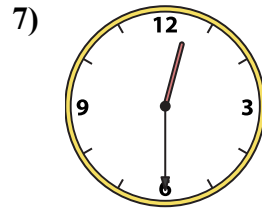
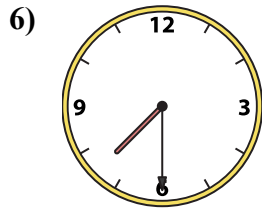
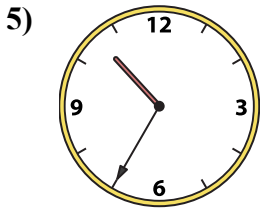
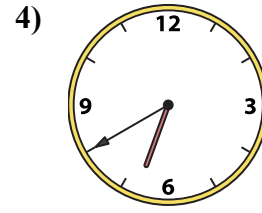
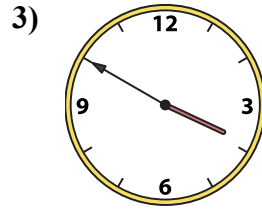
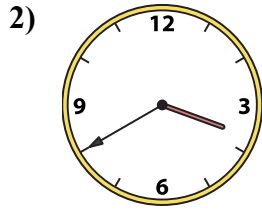
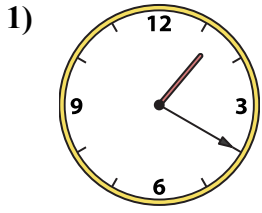




Ghép đồng hồ kim với đồng hồ kỹ thuật số.

Câu trả lời



1. _____

2. _____

3. _____

4. _____

5. _____

6. _____

7. _____

8. _____

9. _____

10. _____

11. _____

12. _____

13. _____

14. _____

15. _____

16. _____

A. 10:35

B. 2:25

C. 7:40

D. 12:30

E. 6:40

F. 1:20

G. 12:25

H. 6:15

I. 3:50

J. 3:20

K. 11:55

L. 5:05

M. 7:30

N. 3:40

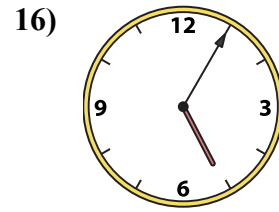
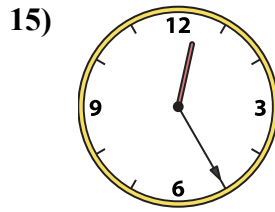
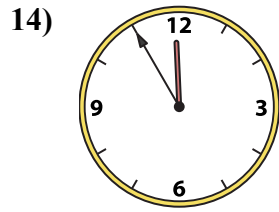
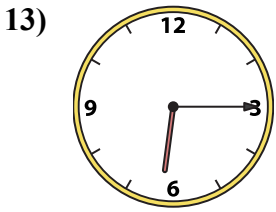
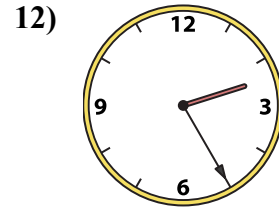
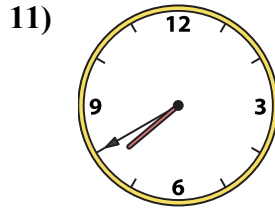
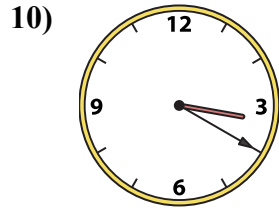
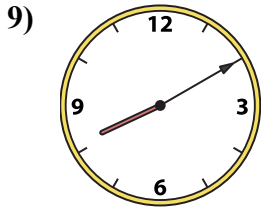
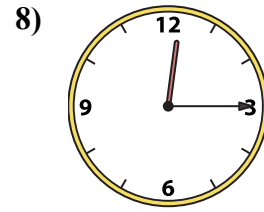
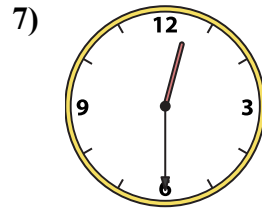
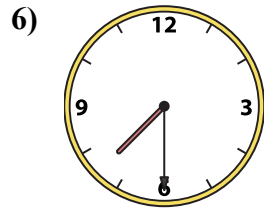
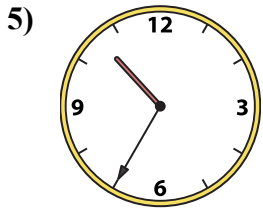
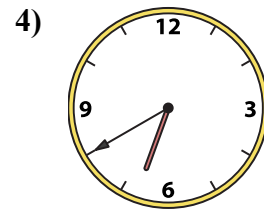
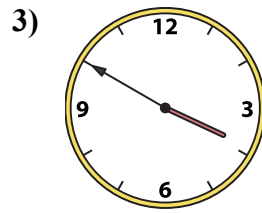
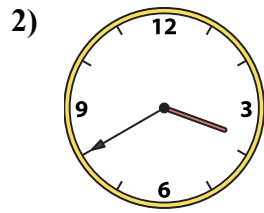
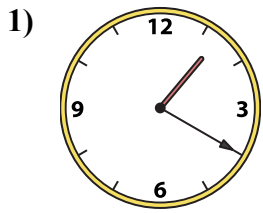
O. 8:10

P. 12:15



Ghép đồng hồ kim với đồng hồ kỹ thuật số.

Câu trả lời



A. 10:35

B. 2:25

C. 7:40

D. 12:30

E. 6:40

F. 1:20

G. 12:25

H. 6:15

I. 3:50

J. 3:20

K. 11:55

L. 5:05

M. 7:30

N. 3:40

O. 8:10

P. 12:15

1. **F**
2. **N**
3. **I**
4. **E**
5. **A**
6. **M**
7. **D**
8. **P**
9. **O**
10. **J**
11. **C**
12. **B**
13. **H**
14. **K**
15. **G**
16. **L**