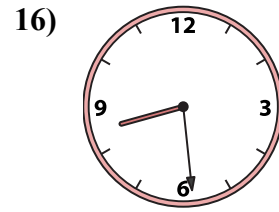
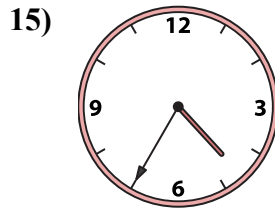
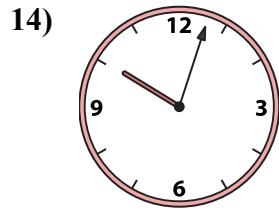
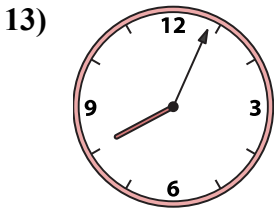
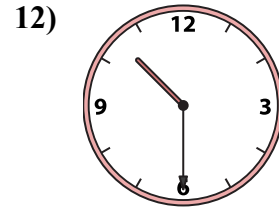
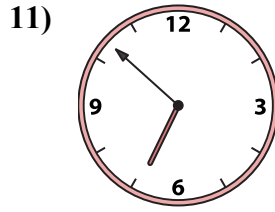
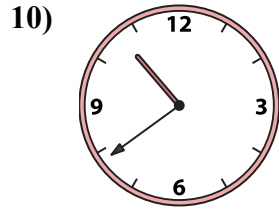
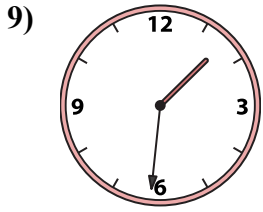
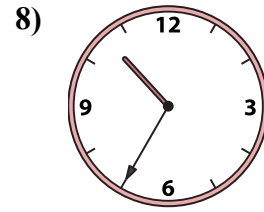
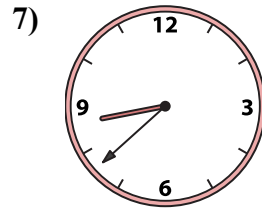
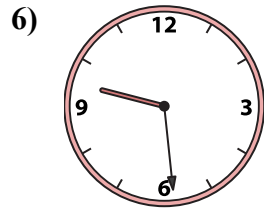
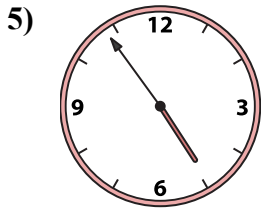
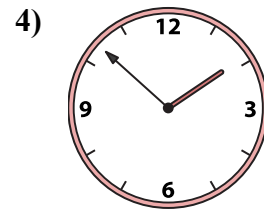
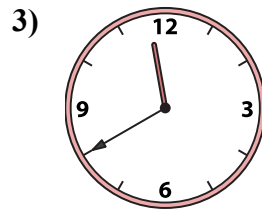
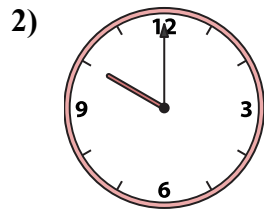
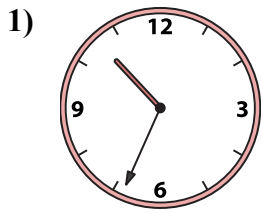




Ghép đồng hồ kim với đồng hồ kỹ thuật số.

Câu trả lời



1. _____

2. _____

3. _____

4. _____

5. _____

6. _____

7. _____

8. _____

9. _____

10. _____

11. _____

12. _____

13. _____

14. _____

15. _____

16. _____

A. 11:40

B. 8:04

C. 9:29

D. 10:35

E. 10:30

F. 8:38

G. 4:35

H. 4:54

I. 10:03

J. 10:00

K. 6:52

L. 8:29

M. 10:34

N. 1:31

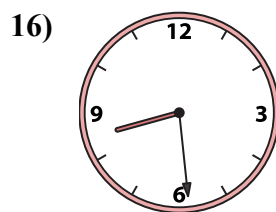
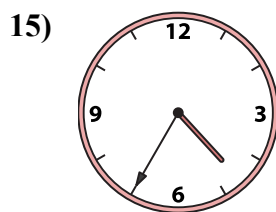


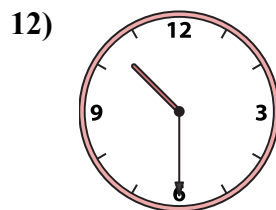
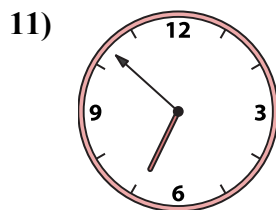
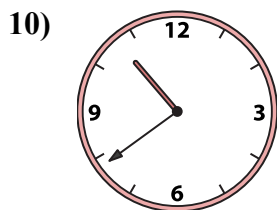
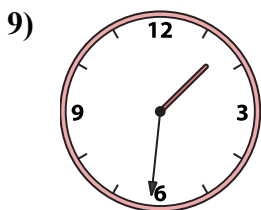

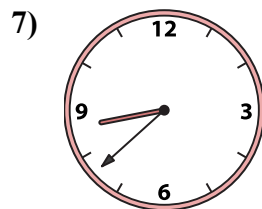
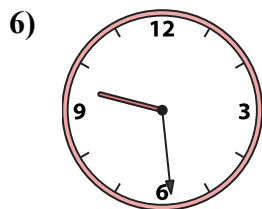
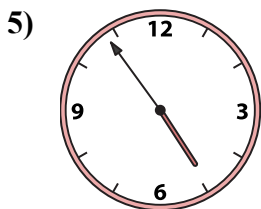
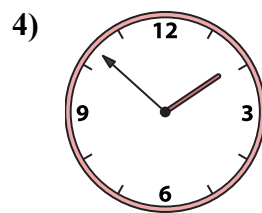
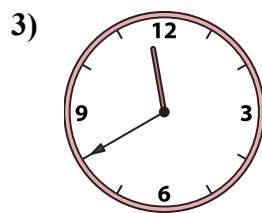
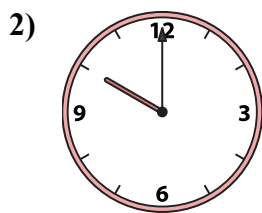

O. 1:52

P. 10:39



Ghép đồng hồ kim với đồng hồ kỹ thuật số.

Câu trả lời



A. 11:40

B. 8:04

C. 9:29

D. 10:35

E. 10:30

F. 8:38

G. 4:35

H. 4:54

I. 10:03

J. 10:00

K. 6:52

L. 8:29

M. 10:34

N. 1:31

O. 1:52

P. 10:39

1. **M**

2. **J**

3. **A**

4. **O**

5. **H**

6. **C**

7. **F**

8. **D**

9. **N**

10. **P**

11. **K**

12. **E**

13. **B**

14. **I**

15. **G**

16. **L**