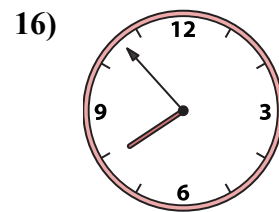
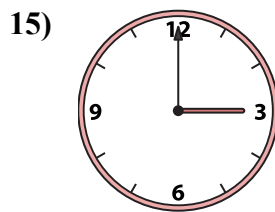
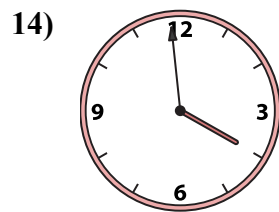
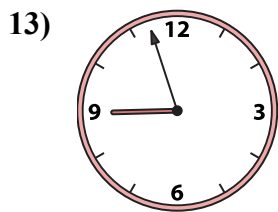
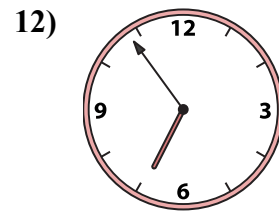
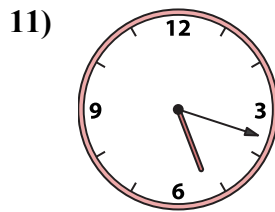
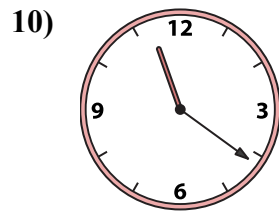
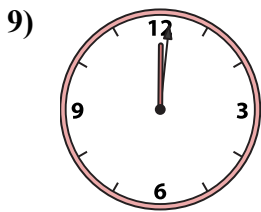
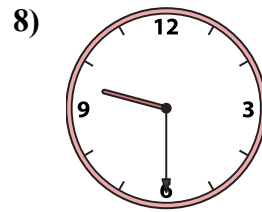
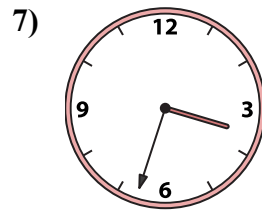
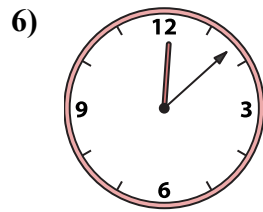
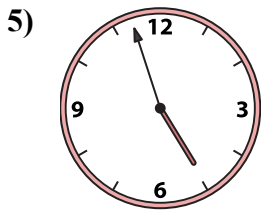
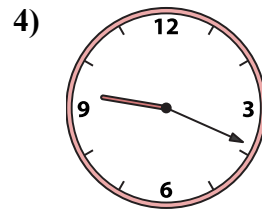
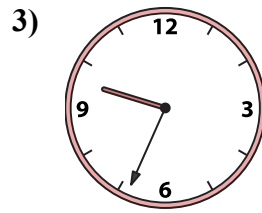
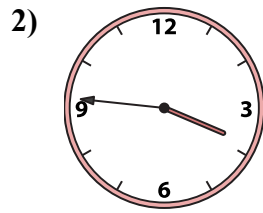
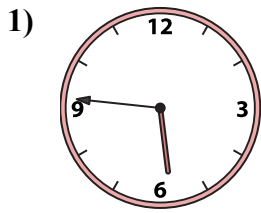




Ghép đồng hồ kim với đồng hồ kỹ thuật số.

Câu trả lời



1. \_\_\_\_\_

2. \_\_\_\_\_

3. \_\_\_\_\_

4. \_\_\_\_\_

5. \_\_\_\_\_

6. \_\_\_\_\_

7. \_\_\_\_\_

8. \_\_\_\_\_

9. \_\_\_\_\_

10. \_\_\_\_\_

11. \_\_\_\_\_

12. \_\_\_\_\_

13. \_\_\_\_\_

14. \_\_\_\_\_

15. \_\_\_\_\_

16. \_\_\_\_\_

A. 5:46

B. 3:00

C. 3:46

D. 12:08

E. 3:33

F. 6:54

G. 7:53

H. 12:01

I. 9:30

J. 3:59

K. 4:57

L. 8:57

M. 5:18

N. 9:34

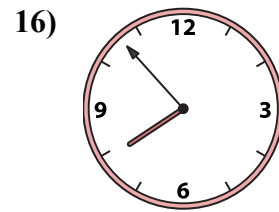
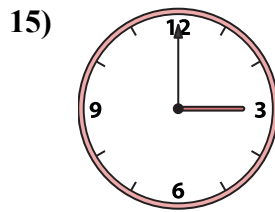
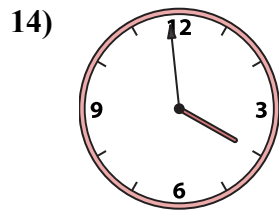
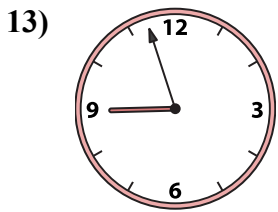
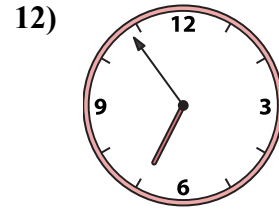
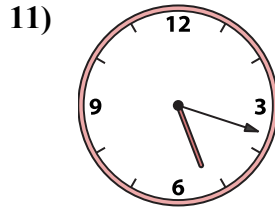
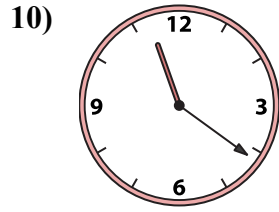

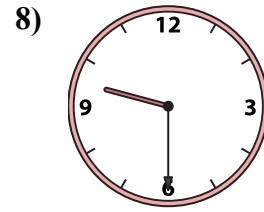
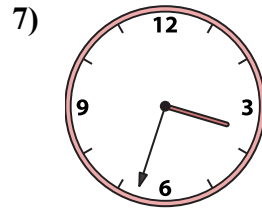
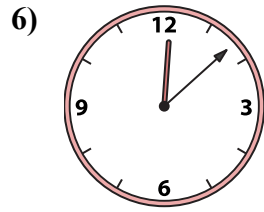
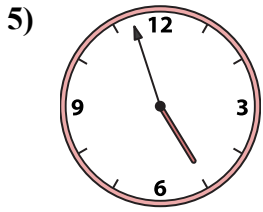
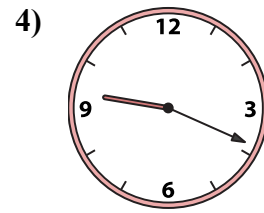
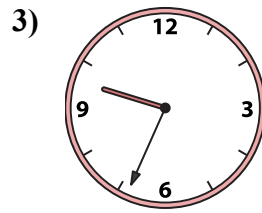
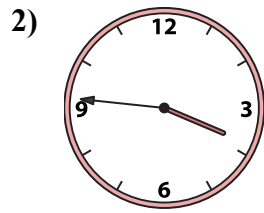
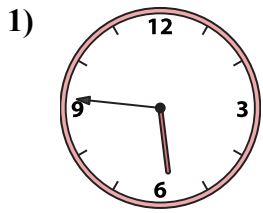
O. 9:19

P. 11:21



Ghép đồng hồ kim với đồng hồ kỹ thuật số.

Câu trả lời



- 1. **A**
- 2. **C**
- 3. **N**
- 4. **O**
- 5. **K**
- 6. **D**
- 7. **E**
- 8. **I**
- 9. **H**
- 10. **P**
- 11. **M**
- 12. **F**
- 13. **L**
- 14. **J**
- 15. **B**
- 16. **G**

A. **5:46**

B. **3:00**

C. **3:46**

D. **12:08**

E. **3:33**

F. **6:54**

G. **7:53**

H. **12:01**

I. **9:30**

J. **3:59**

K. **4:57**

L. **8:57**

M. **5:18**

N. **9:34**

O. **9:19**

P. **11:21**