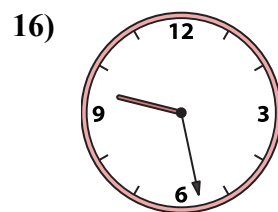
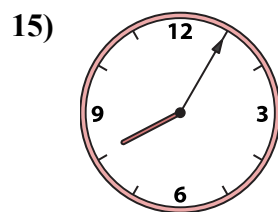
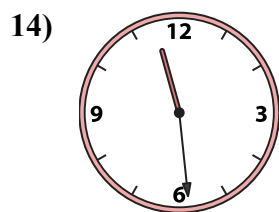
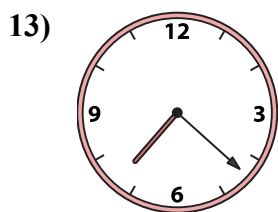
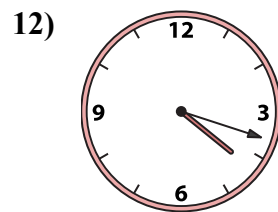
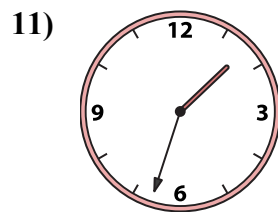
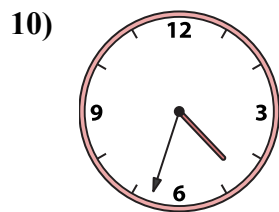
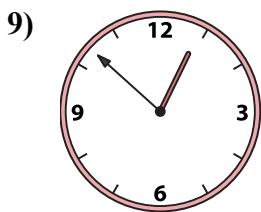
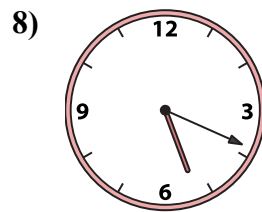
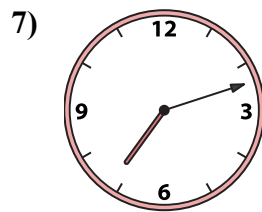
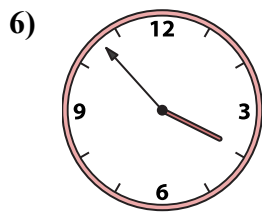

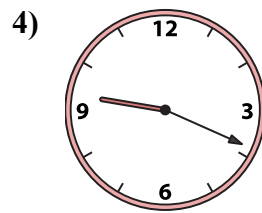
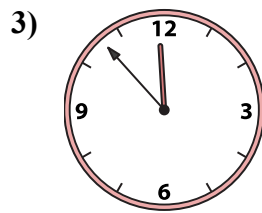
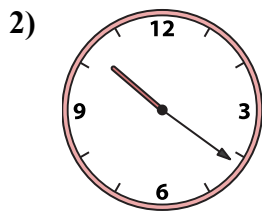
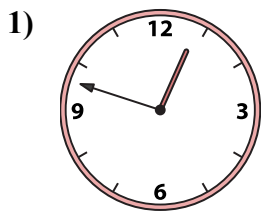




Ghép đồng hồ kim với đồng hồ kỹ thuật số.

Câu trả lời



1. _____
2. _____
3. _____
4. _____
5. _____
6. _____
7. _____
8. _____
9. _____
10. _____
11. _____
12. _____
13. _____
14. _____
15. _____
16. _____

A. 11:56

B. 9:28

C. 11:53

D. 3:53

E. 12:48

F. 1:33

G. 11:29

H. 7:12

I. 4:33

J. 5:19

K. 7:22

L. 10:21

M. 9:19

N. 12:52

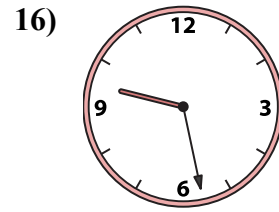
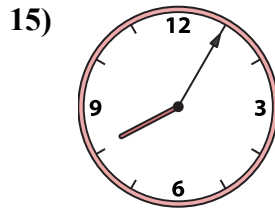
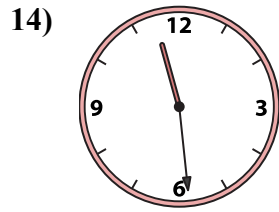
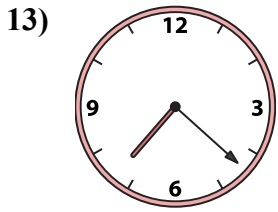
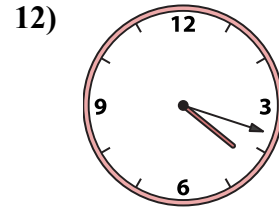
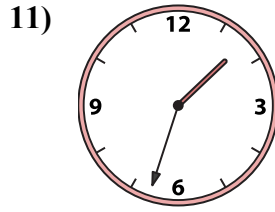
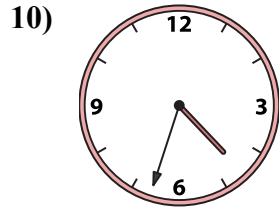
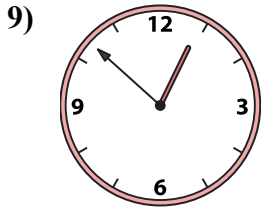
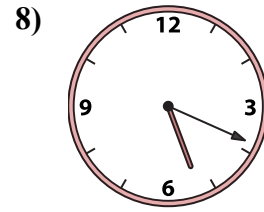
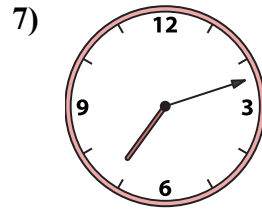
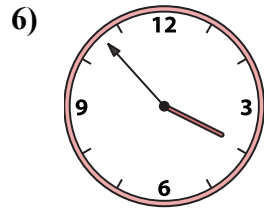

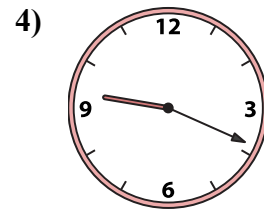
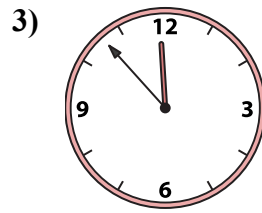
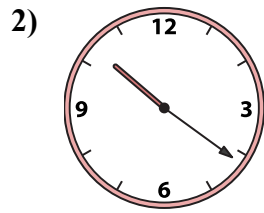
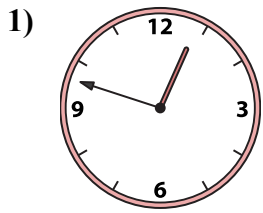
O. 4:18

P. 8:05



Ghép đồng hồ kim với đồng hồ kỹ thuật số.

Câu trả lời



A. **11:56**

B. **9:28**

C. **11:53**

D. **3:53**

E. **12:48**

F. **1:33**

G. **11:29**

H. **7:12**

I. **4:33**

J. **5:19**

K. **7:22**

L. **10:21**

M. **9:19**

N. **12:52**

O. **4:18**

P. **8:05**

1. **E**
2. **L**
3. **C**
4. **M**
5. **A**
6. **D**
7. **H**
8. **J**
9. **N**
10. **I**
11. **F**
12. **O**
13. **K**
14. **G**
15. **P**
16. **B**