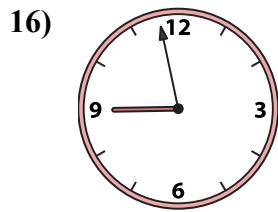
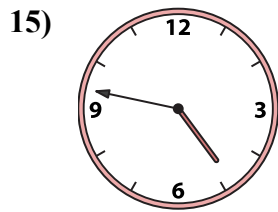
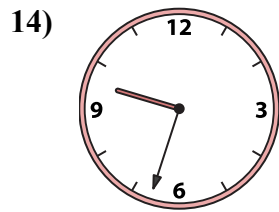
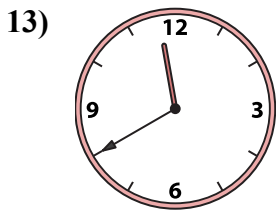
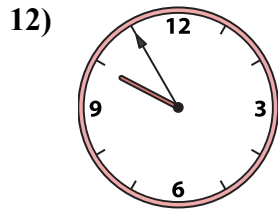
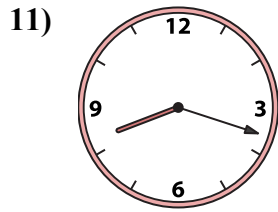
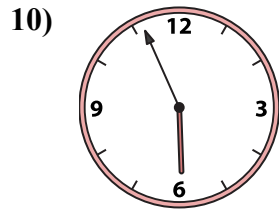
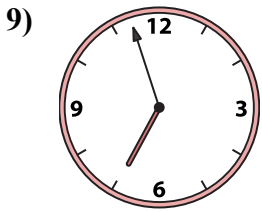
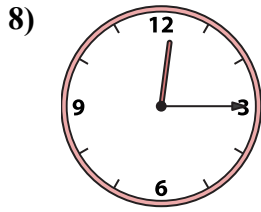
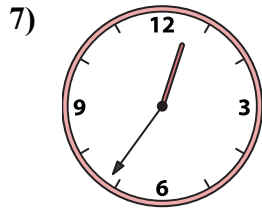
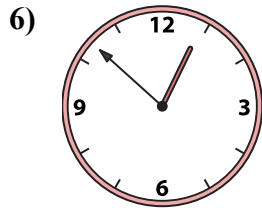
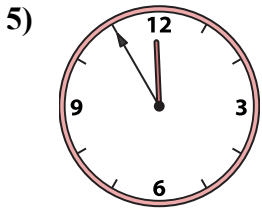
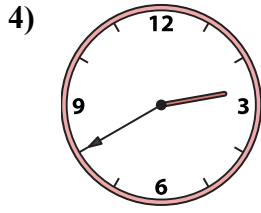
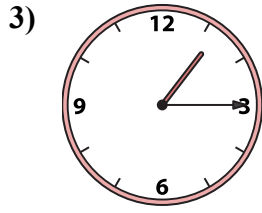
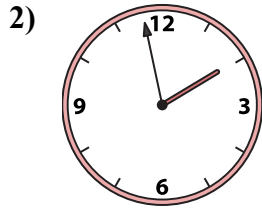
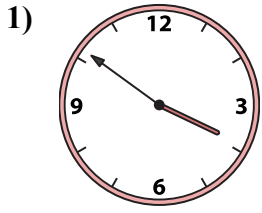




Ghép đồng hồ kim với đồng hồ kỹ thuật số.

Câu trả lời



A. 9:55

B. 5:56

C. 4:47

D. 11:40

E. 3:51

F. 1:58

G. 8:18

H. 1:15

I. 6:57

J. 8:58

K. 9:33

L. 12:52

M. 11:55

N. 12:15

O. 12:36

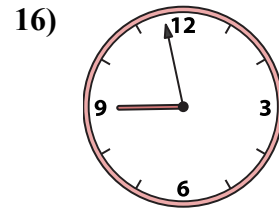
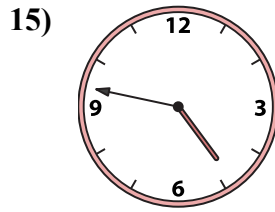
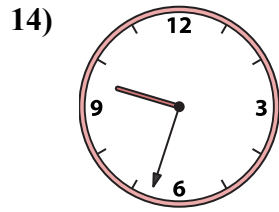
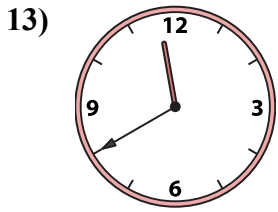
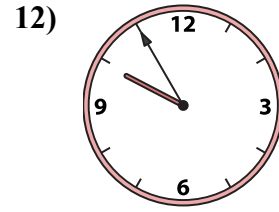
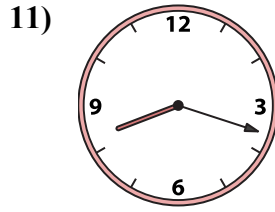
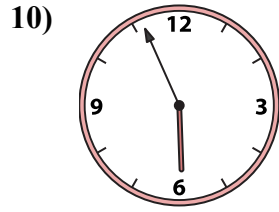
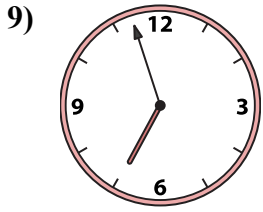
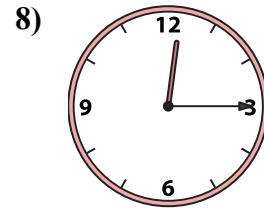
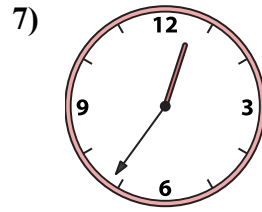
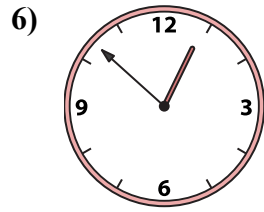
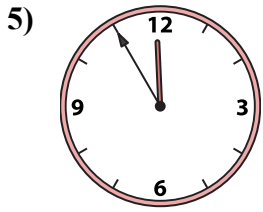
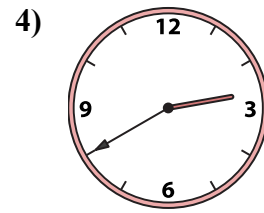
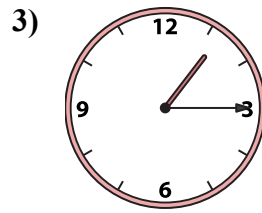
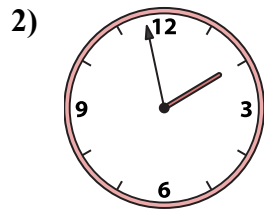
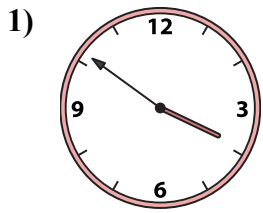
P. 2:40

1. _____
2. _____
3. _____
4. _____
5. _____
6. _____
7. _____
8. _____
9. _____
10. _____
11. _____
12. _____
13. _____
14. _____
15. _____
16. _____



Ghép đồng hồ kim với đồng hồ kỹ thuật số.

Câu trả lời



A. 9:55

B. 5:56

C. 4:47

D. 11:40

E. 3:51

F. 1:58

G. 8:18

H. 1:15

I. 6:57

J. 8:58

K. 9:33

L. 12:52

M. 11:55

N. 12:15

O. 12:36

P. 2:40

1. **E**
2. **F**
3. **H**
4. **P**
5. **M**
6. **L**
7. **O**
8. **N**
9. **I**
10. **B**
11. **G**
12. **A**
13. **D**
14. **K**
15. **C**
16. **J**