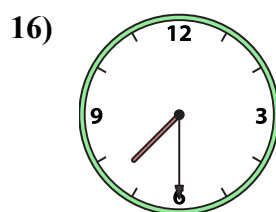
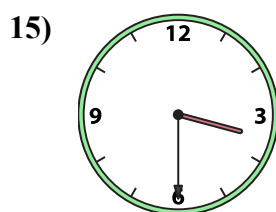
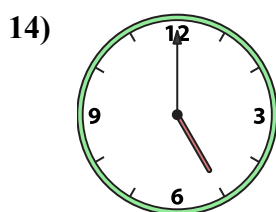
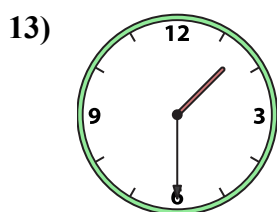
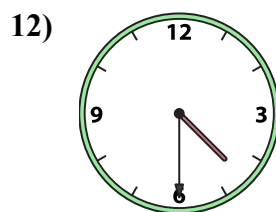
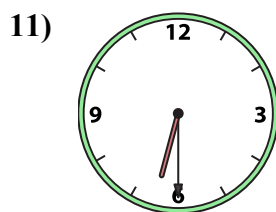
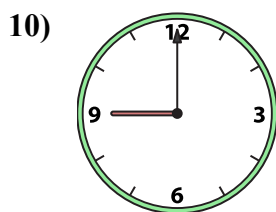
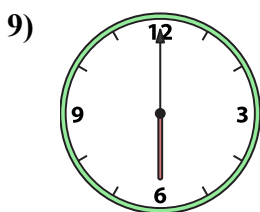
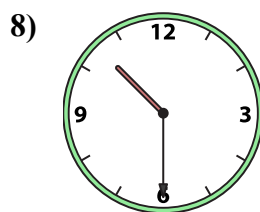
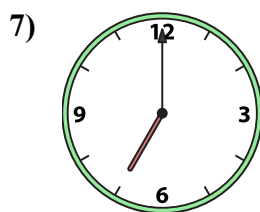
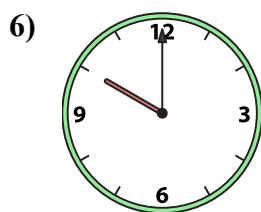
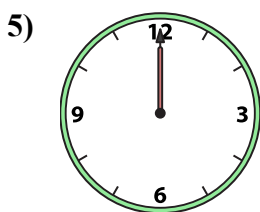
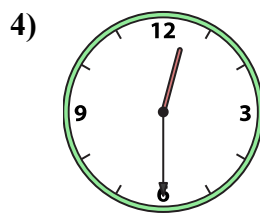
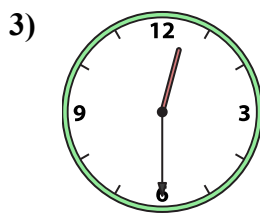
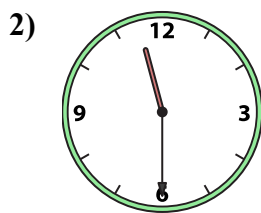
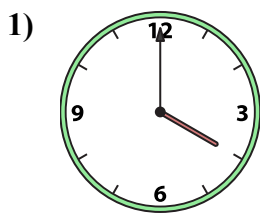




Ghép đồng hồ kim với đồng hồ kỹ thuật số.

Câu trả lời



A. 5:00

B. 4:00

C. 6:00

D. 3:30

E. 4:30

F. 12:30

G. 12:30

H. 10:00

I. 1:30

J. 12:00

K. 7:30

L. 11:30

M. 7:00

N. 10:30

O. 9:00

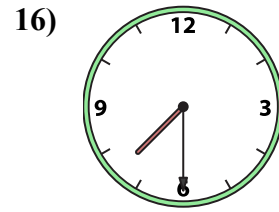
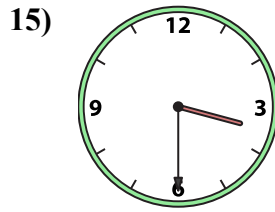
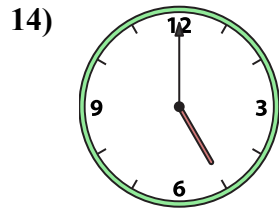
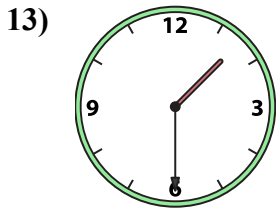
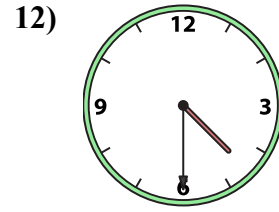
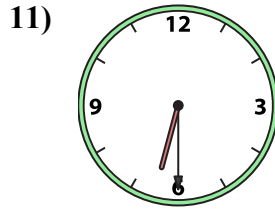
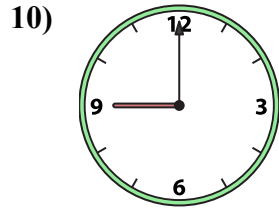
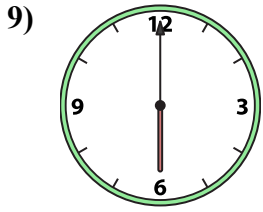
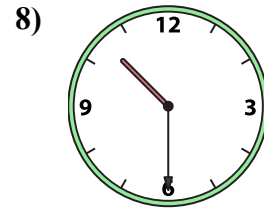
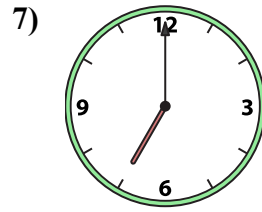
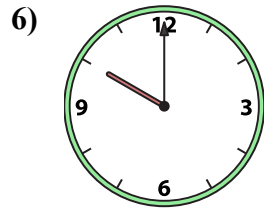
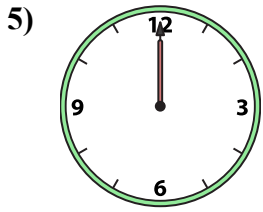
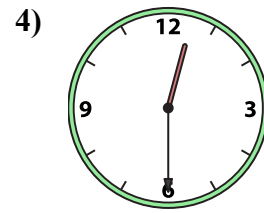
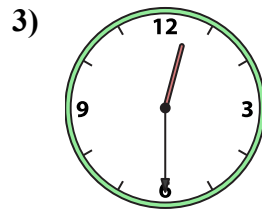
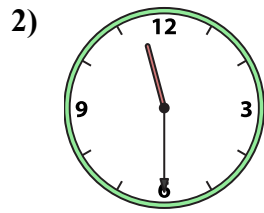
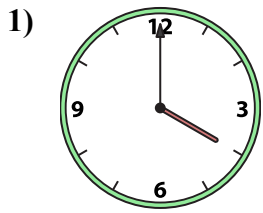
P. 6:30

1. _____
2. _____
3. _____
4. _____
5. _____
6. _____
7. _____
8. _____
9. _____
10. _____
11. _____
12. _____
13. _____
14. _____
15. _____
16. _____



Ghép đồng hồ kim với đồng hồ kỹ thuật số.

Câu trả lời



A. 5:00

B. 4:00

C. 6:00

D. 3:30

E. 4:30

F. 12:30

G. 12:30

H. 10:00

I. 1:30

J. 12:00

K. 7:30

L. 11:30

M. 7:00

N. 10:30

O. 9:00

P. 6:30

1. **B**

2. **L**

3. **G**

4. **F**

5. **J**

6. **H**

7. **M**

8. **N**

9. **C**

10. **O**

11. **P**

12. **E**

13. **I**

14. **A**

15. **D**

16. **K**