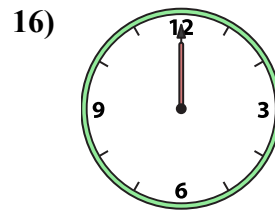
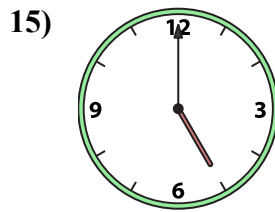
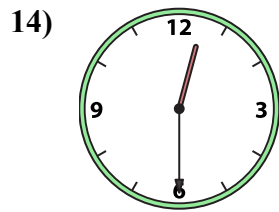
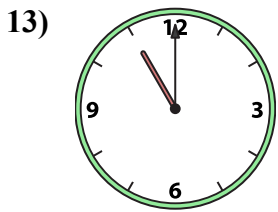
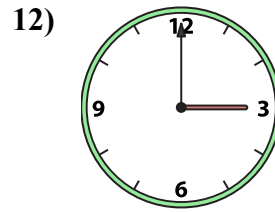
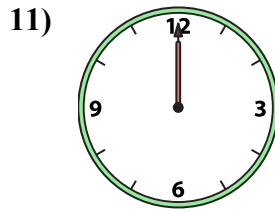
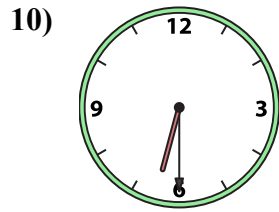
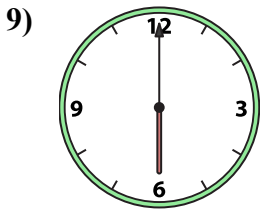
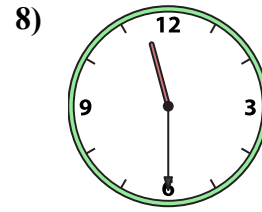
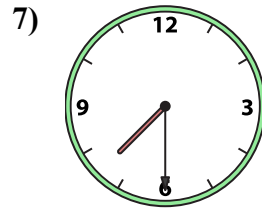
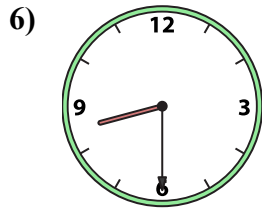
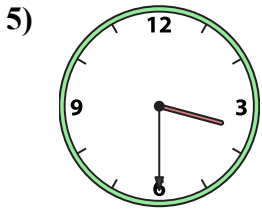
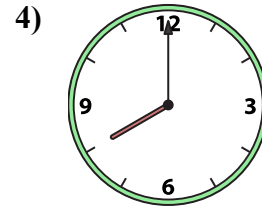
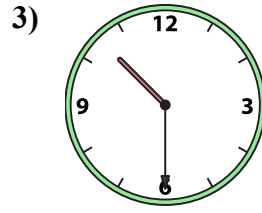
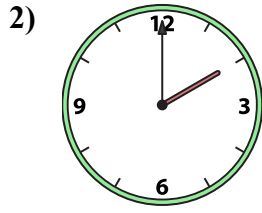
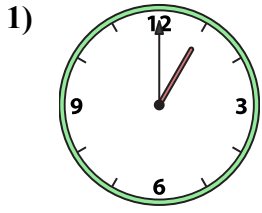




Ghép đồng hồ kim với đồng hồ kỹ thuật số.

Câu trả lời



A. 10:30

B. 2:00

C. 7:30

D. 12:30

E. 6:30

F. 1:00

G. 12:00

H. 6:00

I. 3:30

J. 3:00

K. 11:30

L. 5:00

M. 8:00

N. 12:00

O. 11:00

P. 8:30

1. _____
2. _____
3. _____
4. _____
5. _____
6. _____
7. _____
8. _____
9. _____
10. _____
11. _____
12. _____
13. _____
14. _____
15. _____
16. _____



Ghép đồng hồ kim với đồng hồ kỹ thuật số.

Câu trả lời

1)

2)

3)

4)

5)

6)

7)

8)

9)

10)

11)

12)

13)

14)

15)

16)

1. **F**
2. **B**
3. **A**
4. **M**
5. **I**
6. **P**
7. **C**
8. **K**
9. **H**
10. **E**
11. **N**
12. **J**
13. **O**
14. **D**
15. **L**
16. **G**

A.

B.

C.

D.

E.

F.

G.

H.

I.

J.

K.

L.

M.

N.

O.

P.