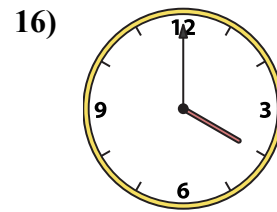
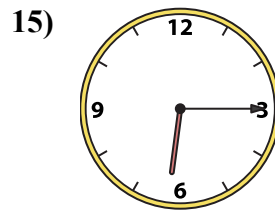
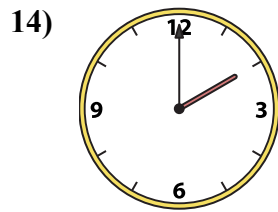
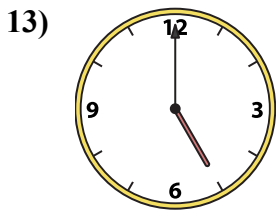
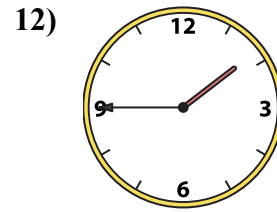
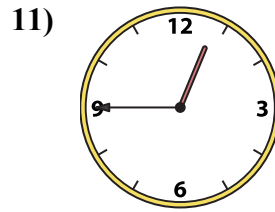
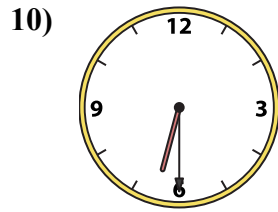
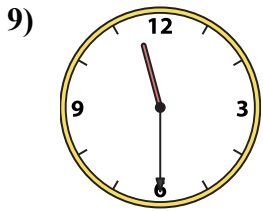
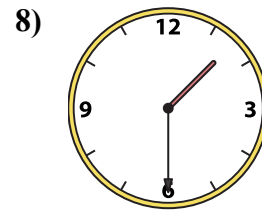
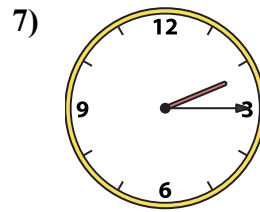
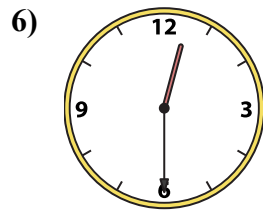
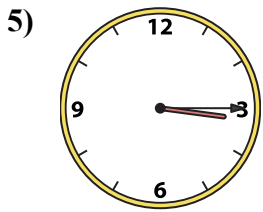
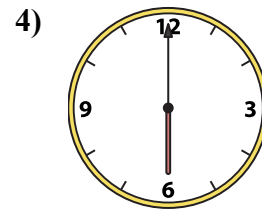
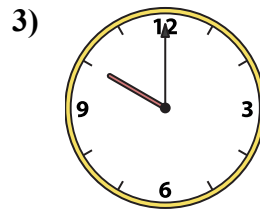
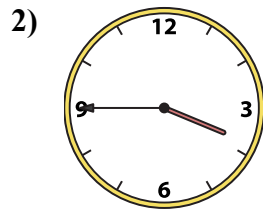
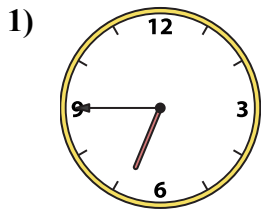




Ghép đồng hồ kim với đồng hồ kỹ thuật số.

Câu trả lời



1. _____

2. _____

3. _____

4. _____

5. _____

6. _____

7. _____

8. _____

9. _____

10. _____

11. _____

12. _____

13. _____

14. _____

15. _____

16. _____

A. 6:30

B. 6:15

C. 1:30

D. 5:00

E. 6:00

F. 6:45

G. 2:15

H. 12:45

I. 11:30

J. 2:00

K. 3:45

L. 12:30

M. 4:00

N. 10:00

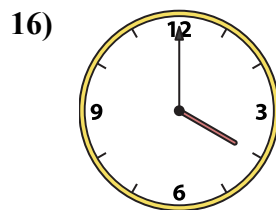
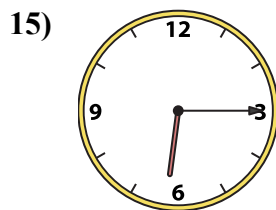
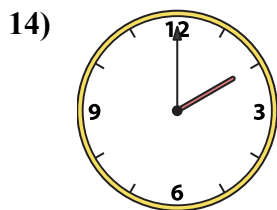
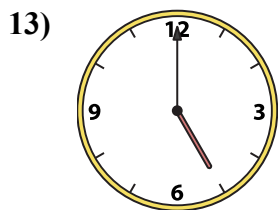
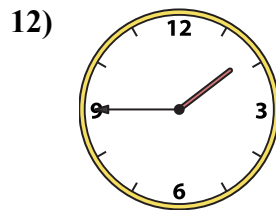
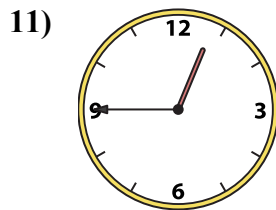
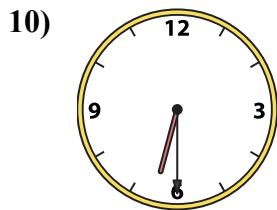
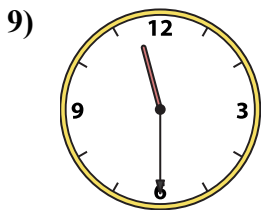
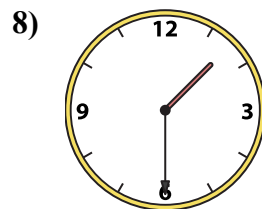
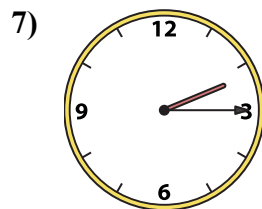
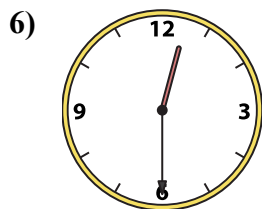
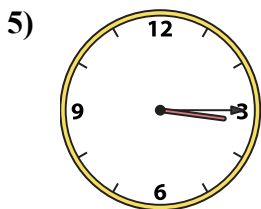
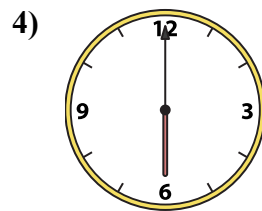
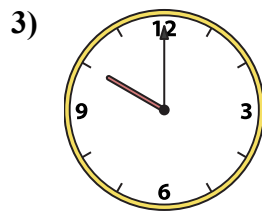
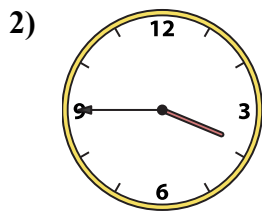
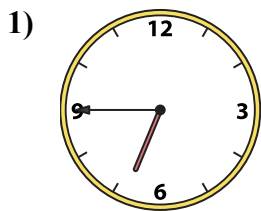
O. 3:15

P. 1:45



Ghép đồng hồ kim với đồng hồ kỹ thuật số.

Câu trả lời



A. **6:30**

B. **6:15**

C. **1:30**

D. **5:00**

E. **6:00**

F. **6:45**

G. **2:15**

H. **12:45**

I. **11:30**

J. **2:00**

K. **3:45**

L. **12:30**

M. **4:00**

N. **10:00**

O. **3:15**

P. **1:45**

- 1. **F**
- 2. **K**
- 3. **N**
- 4. **E**
- 5. **O**
- 6. **L**
- 7. **G**
- 8. **C**
- 9. **I**
- 10. **A**
- 11. **H**
- 12. **P**
- 13. **D**
- 14. **J**
- 15. **B**
- 16. **M**