
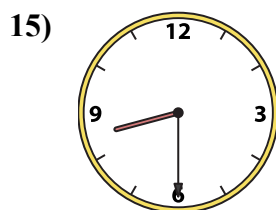
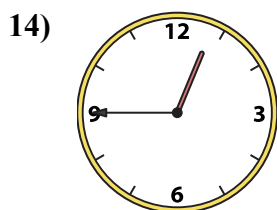
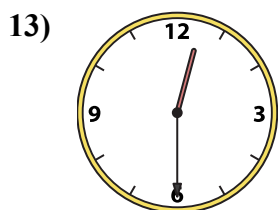
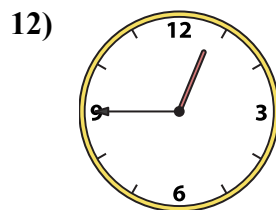
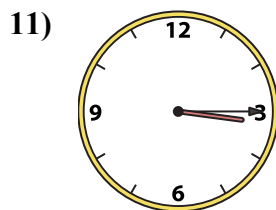
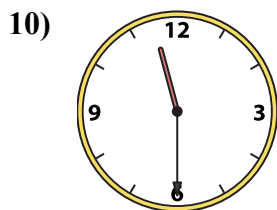
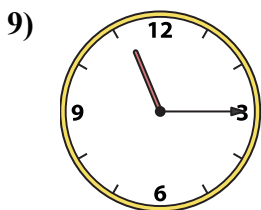
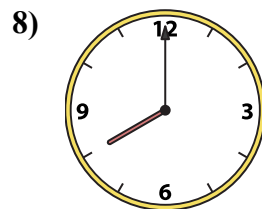
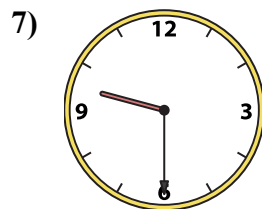
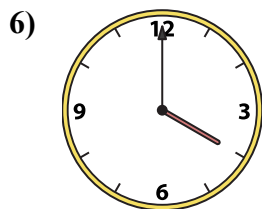
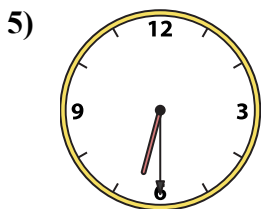
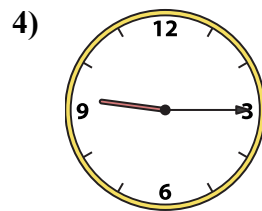
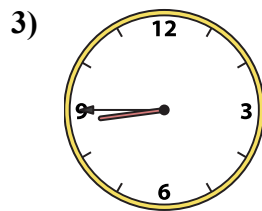
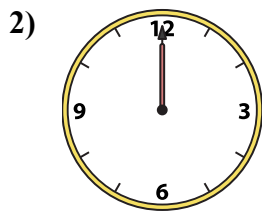
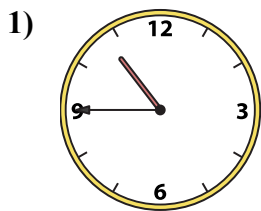




Ghép đồng hồ kim với đồng hồ kỹ thuật số.

Câu trả lời



1. _____
2. _____
3. _____
4. _____
5. _____
6. _____
7. _____
8. _____
9. _____
10. _____
11. _____
12. _____
13. _____
14. _____
15. _____
16. _____

A. 3:15

B. 12:45

C. 9:15

D. 1:00

E. 8:45

F. 12:00

G. 4:00

H. 12:30

I. 6:30

J. 10:45

K. 12:45

L. 8:00

M. 8:30

N. 9:30

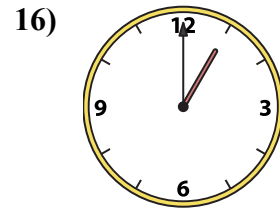
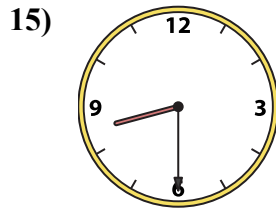
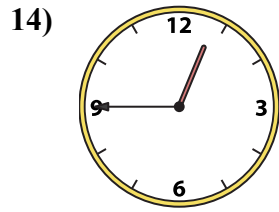
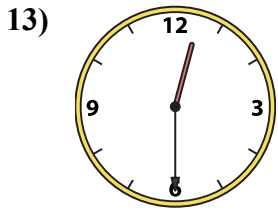
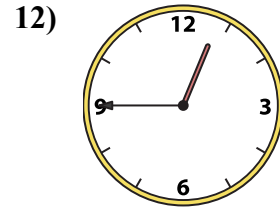
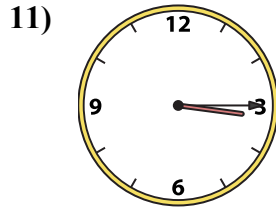
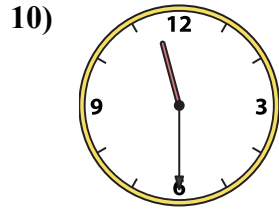
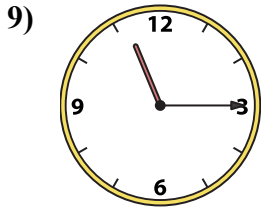
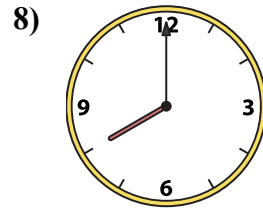
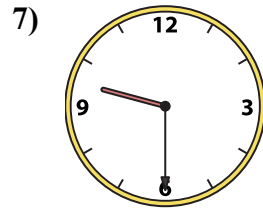
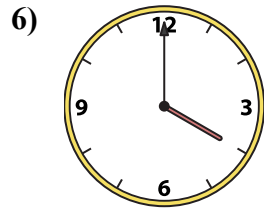
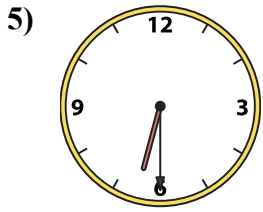
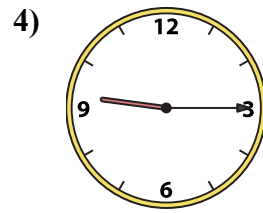
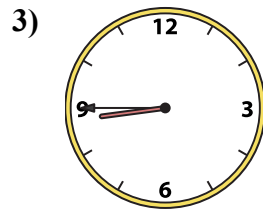
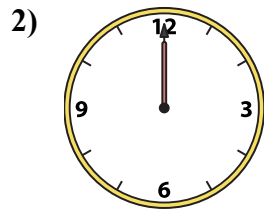
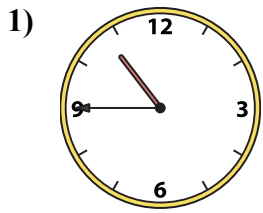
O. 11:30

P. 11:15



Ghép đồng hồ kim với đồng hồ kỹ thuật số.

Câu trả lời



A. 3:15

B. 12:45

C. 9:15

D. 1:00

E. 8:45

F. 12:00

G. 4:00

H. 12:30

I. 6:30

J. 10:45

K. 12:45

L. 8:00

M. 8:30

N. 9:30

O. 11:30

P. 11:15

- 1. **J**
- 2. **F**
- 3. **E**
- 4. **C**
- 5. **I**
- 6. **G**
- 7. **N**
- 8. **L**
- 9. **P**
- 10. **O**
- 11. **A**
- 12. **B**
- 13. **H**
- 14. **K**
- 15. **M**
- 16. **D**