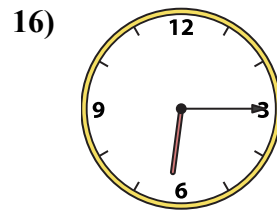
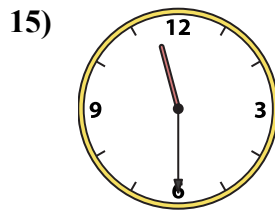
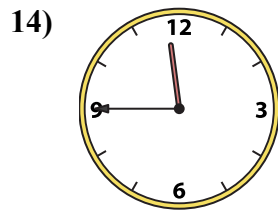
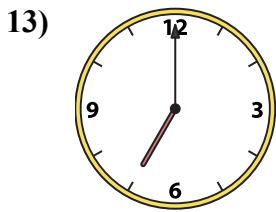
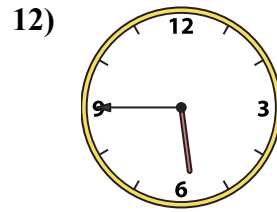
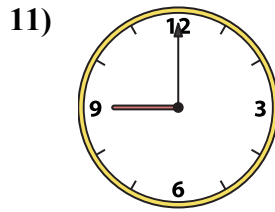
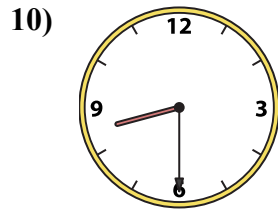
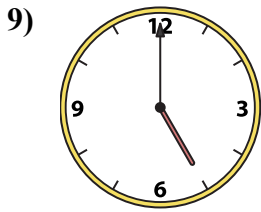
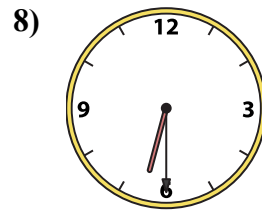
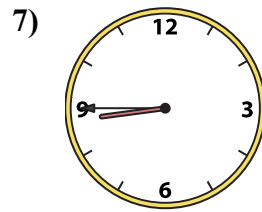
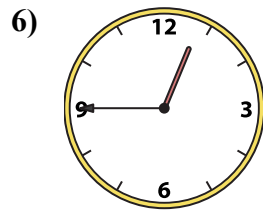
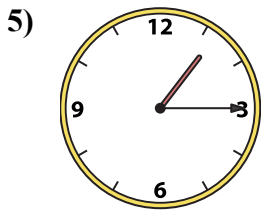
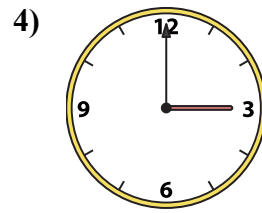
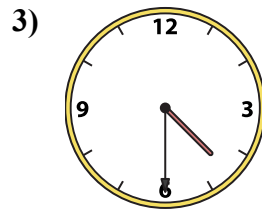
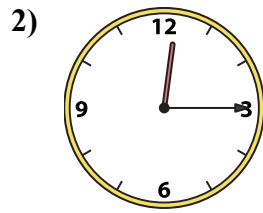
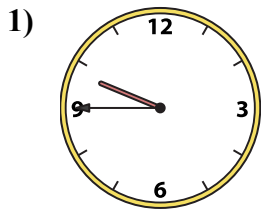




Ghép đồng hồ kim với đồng hồ kỹ thuật số.

Câu trả lời



A. 9:45

B. 11:30

C. 5:45

D. 5:00

E. 4:30

F. 7:00

G. 11:45

H. 3:00

I. 8:30

J. 1:15

K. 12:15

L. 8:45

M. 6:15

N. 6:30

O. 12:45

P. 9:00

1. _____

2. _____

3. _____

4. _____

5. _____

6. _____

7. _____

8. _____

9. _____

10. _____

11. _____

12. _____

13. _____

14. _____

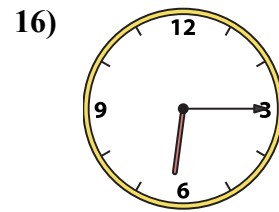
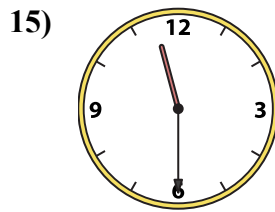
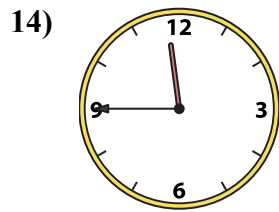
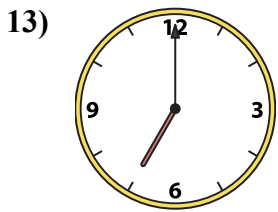
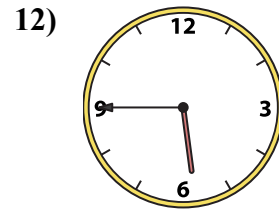
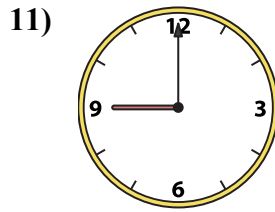
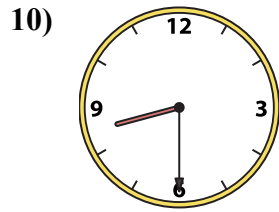
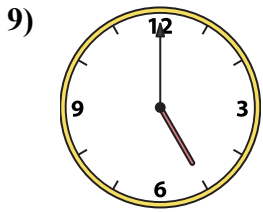
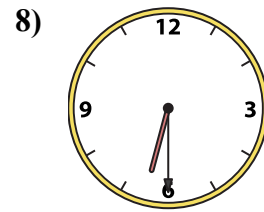
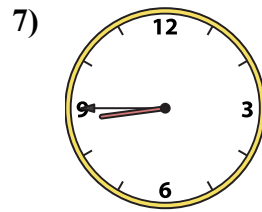
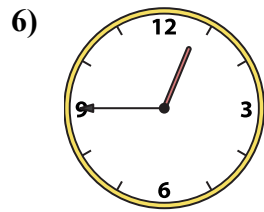
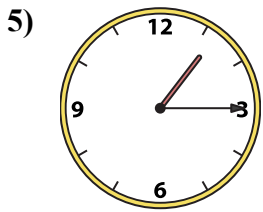
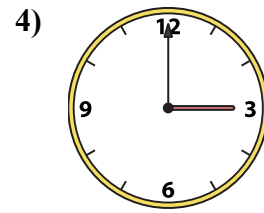
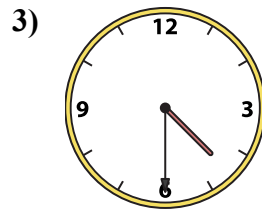
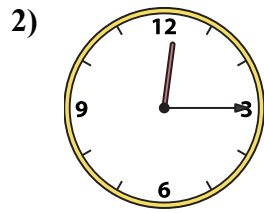
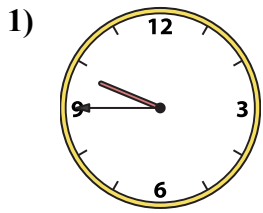
15. _____

16. _____



Ghép đồng hồ kim với đồng hồ kỹ thuật số.

Câu trả lời



A. 9:45

B. 11:30

C. 5:45

D. 5:00

E. 4:30

F. 7:00

G. 11:45

H. 3:00

I. 8:30

J. 1:15

K. 12:15

L. 8:45

M. 6:15

N. 6:30

O. 12:45

P. 9:00

1. **A**

2. **K**

3. **E**

4. **H**

5. **J**

6. **O**

7. **L**

8. **N**

9. **D**

10. **I**

11. **P**

12. **C**

13. **F**

14. **G**

15. **B**

16. **M**