



Xác định xem mỗi tam giác là nhọn (A), tù (O) hay vuông (R) và nếu nó là tam giác đều (E), cân (I) hay vô hướng (S).

Câu trả lời

Acute Triangle:

All angles are less than 90° .

Obtuse Triangle:

One angle is greater than 90° .

Right Triangle:

One angle is 90° .

Equilateral Triangle:

3 equal sides. 3 equal angles.

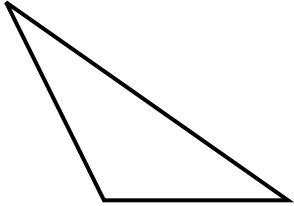
Isosceles Triangle:

2 equal sides. 2 equal angles.

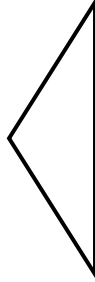
Scalene Triangle:

No equal sides. No equal angles.

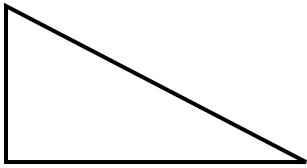
1)



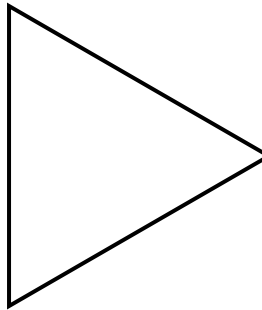
2)



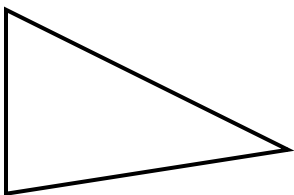
3)




4)



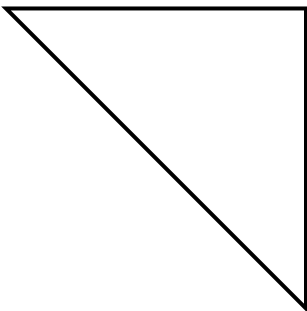
5)



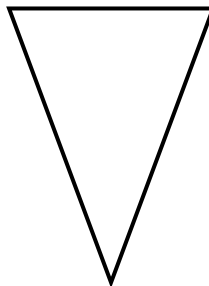
6)



7)



8)



1. _____
2. _____
3. _____
4. _____
5. _____
6. _____
7. _____
8. _____



Xác định xem mỗi tam giác là nhọn (A), tù (O) hay vuông (R) và nếu nó là tam giác đều (E), cân (I) hay vô hướng (S).

Câu trả lời

Acute Triangle:

All angles are less than 90° .

Obtuse Triangle:

One angle is greater than 90° .

Right Triangle:

One angle is 90° .

Equilateral Triangle:

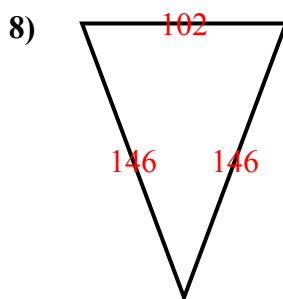
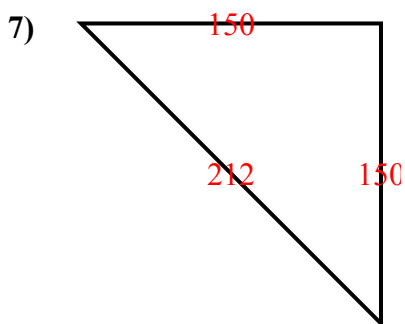
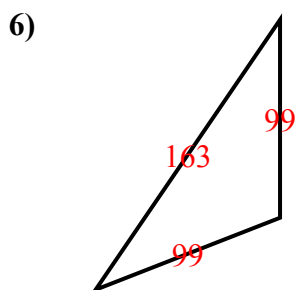
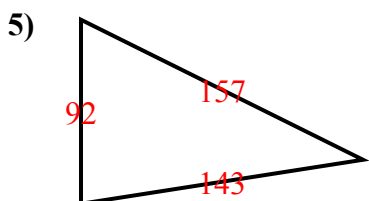
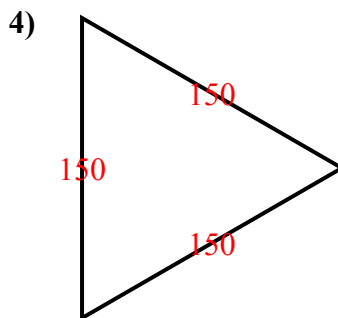
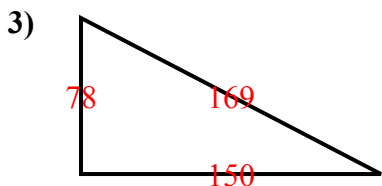
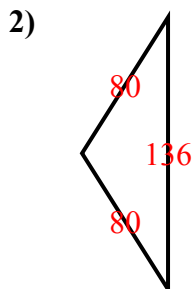
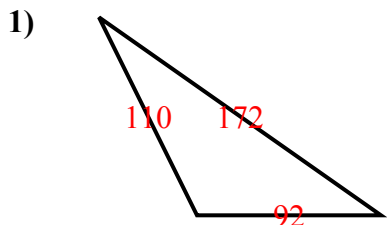
3 equal sides. 3 equal angles.

Isosceles Triangle:

2 equal sides. 2 equal angles.

Scalene Triangle:

No equal sides. No equal angles.



1. OS
2. OI
3. RS
4. AE
5. AS
6. OI
7. RI
8. AI