



Xác định xem các hình được hiển thị là 'tương tự', 'đồng dạng' hay 'không'.

Câu trả lời

1)



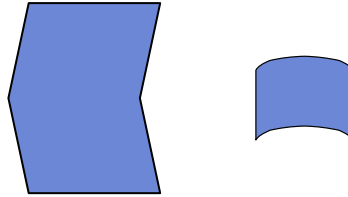
2)



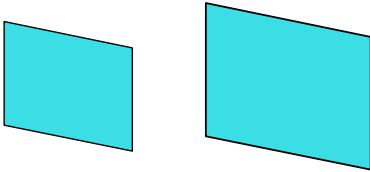
3)



4)



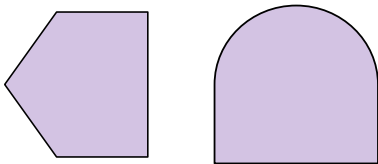
5)



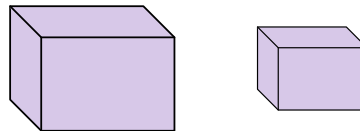
6)



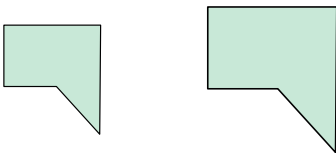
7)



8)



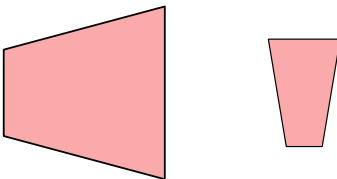
9)




10)



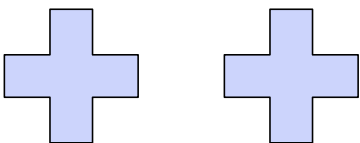
11)



12)



13)



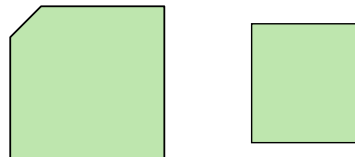
14)



15)



16)



1. _____

2. _____

3. _____

4. _____

5. _____

6. _____

7. _____

8. _____

9. _____

10. _____

11. _____

12. _____

13. _____

14. _____

15. _____

16. _____



Xác định xem các hình được hiển thị là 'tương tự', 'đồng dạng' hay 'không'.

Câu trả lời

1)



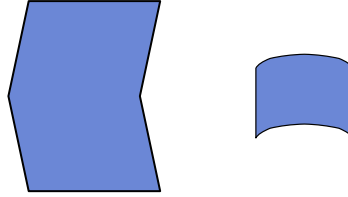
2)



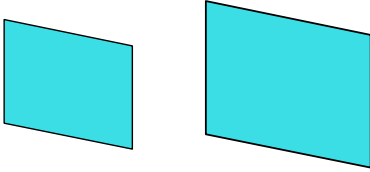
3)



4)



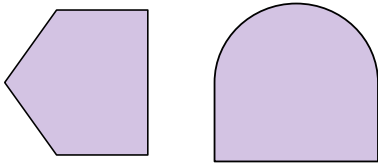
5)



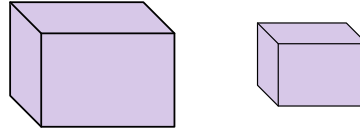
6)



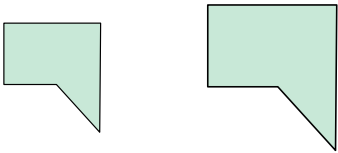
7)



8)



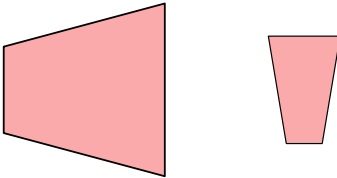
9)




10)



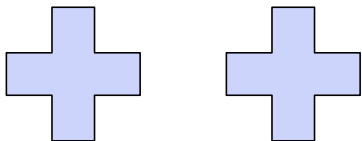
11)



12)



13)



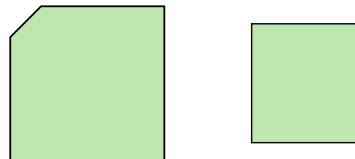
14)



15)



16)



1. tương tự

2. đồng dư

3. đồng dư

4. không

5. tương tự

6. đồng dư

7. không

8. tương tự

9. tương tự

10. đồng dư

11. không

12. không

13. đồng dư

14. đồng dư

15. tương tự

16. không