



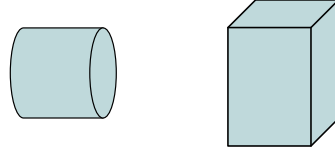
Xác định xem các hình được hiển thị là 'tương tự', 'đồng dạng' hay 'không'.

Câu trả lời

1)



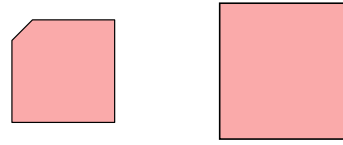
2)



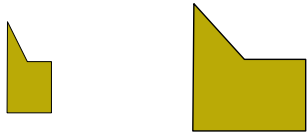
3)



4)



5)



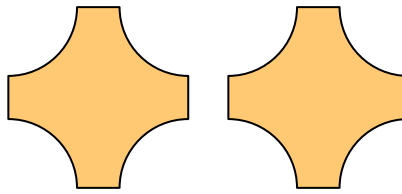
6)



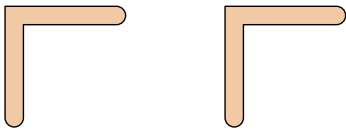
7)



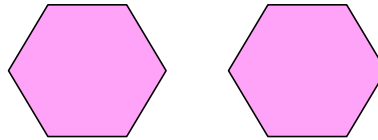
8)



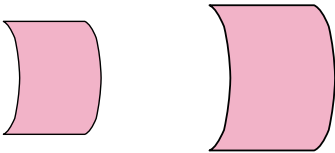
9)



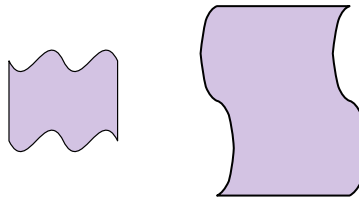
10)



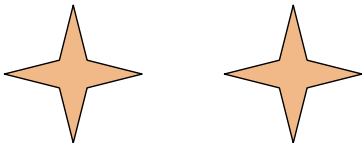
11)



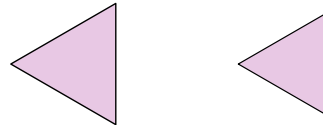
12)



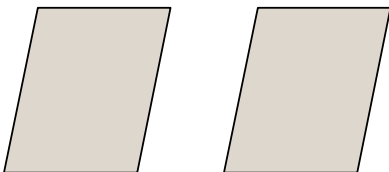
13)



14)



15)



16)



1. _____

2. _____

3. _____

4. _____

5. _____

6. _____

7. _____

8. _____

9. _____

10. _____

11. _____

12. _____

13. _____

14. _____

15. _____

16. _____



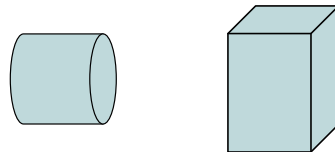
Xác định xem các hình được hiển thị là 'tương tự', 'đồng dạng' hay 'không'.

Câu trả lời

1)



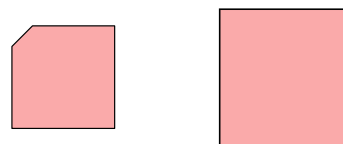
2)




3)



4)



5)



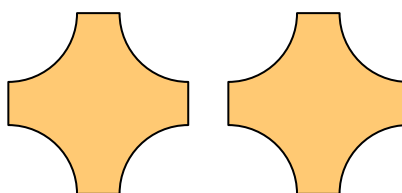
6)



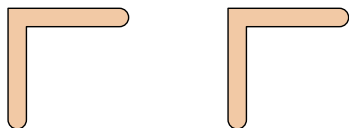
7)



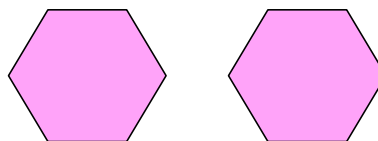
8)



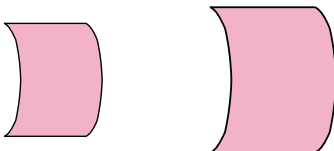
9)



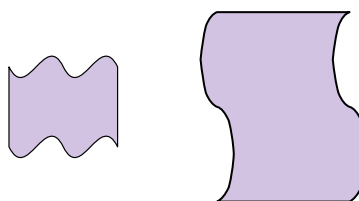
10)



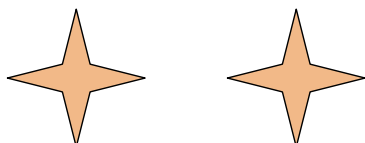
11)



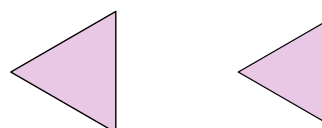
12)



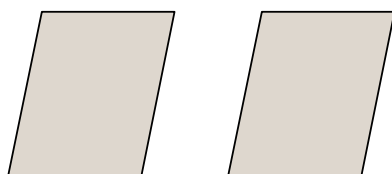
13)



14)



15)



16)



1. tương tự

2. không

3. tương tự

4. không

5. không

6. đồng dư

7. tương tự

8. đồng dư

9. đồng dư

10. đồng dư

11. tương tự

12. không

13. đồng dư

14. tương tự

15. đồng dư

16. không