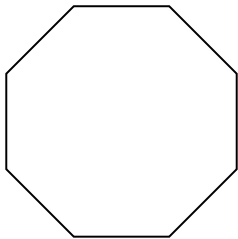


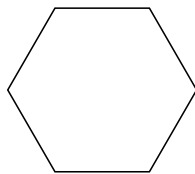


Xác định loại hình được hiển thị.


1)



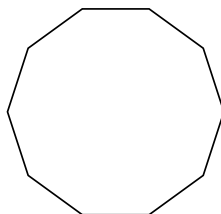
2)



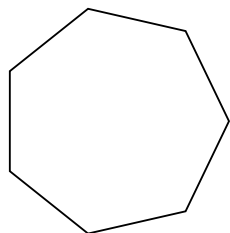
3)



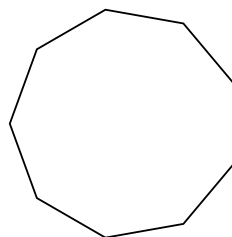
4)



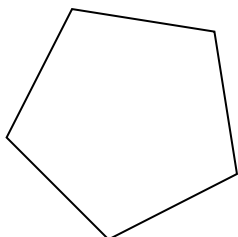
5)



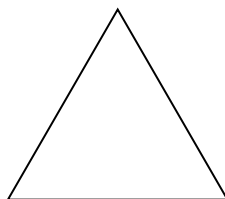
6)



7)



8)



Câu trả lời

1. _____

2. _____

3. _____

4. _____

5. _____

6. _____

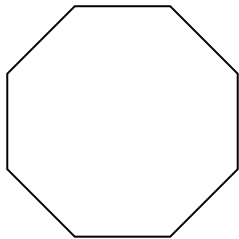
7. _____

8. _____

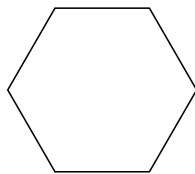


Xác định loại hình được hiển thị.


1)



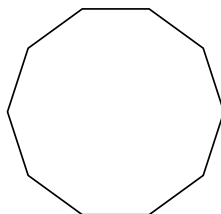
2)



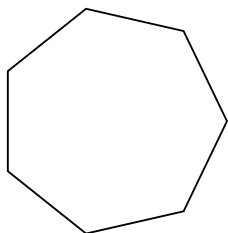
3)



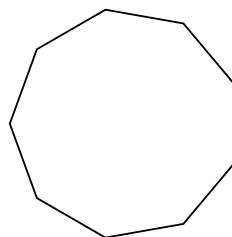
4)



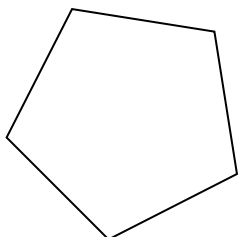
5)



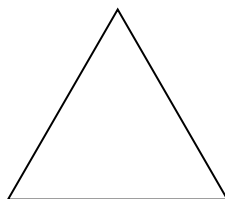
6)



7)



8)



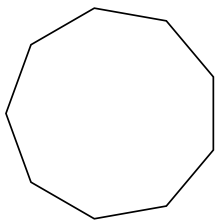
Câu trả lời

1. **Bát giác**
2. **Lục giác**
3. **Tứ giác**
4. **Thập giác**
5. **Thất giác**
6. **Cửu giác**
7. **Ngũ giác**
8. **triangle**

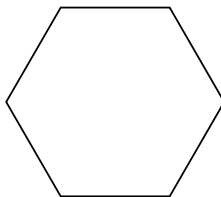


Xác định loại hình được hiển thị.

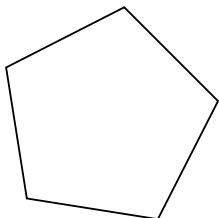
1)



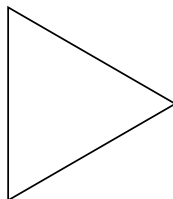
2)




3)



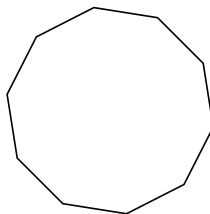
4)



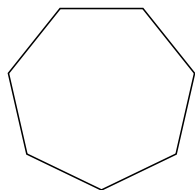
5)



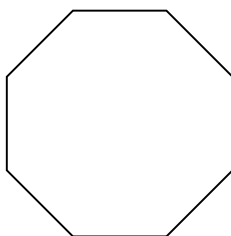
6)



7)



8)



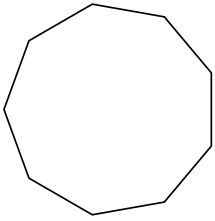
Câu trả lời

- 1. _____
- 2. _____
- 3. _____
- 4. _____
- 5. _____
- 6. _____
- 7. _____
- 8. _____

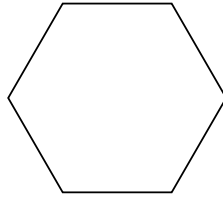


Xác định loại hình được hiển thị.

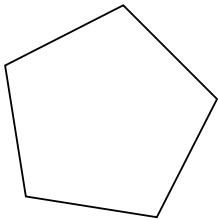
1)



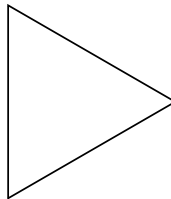
2)




3)



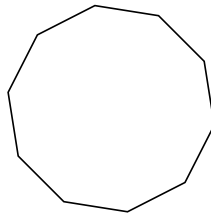
4)



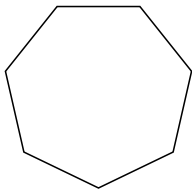
5)



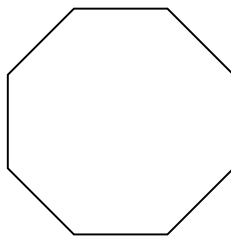
6)



7)



8)



Câu trả lời

1. **Cửu giác**

2. **Lục giác**

3. **Ngũ giác**

4. **triangle**

5. **Tứ giác**

6. **Thập giác**

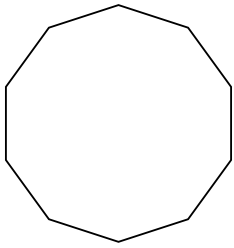
7. **Thất giác**

8. **Bát giác**

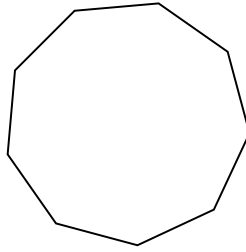


Xác định loại hình được hiển thị.

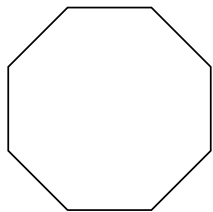
1)



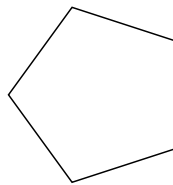
2)



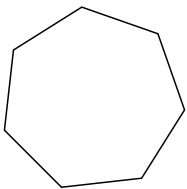
3)



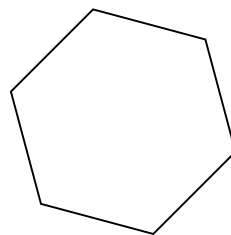
4)




5)




6)



7)



8)



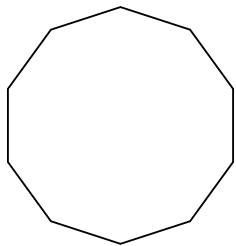
Câu trả lời

- 1. _____
- 2. _____
- 3. _____
- 4. _____
- 5. _____
- 6. _____
- 7. _____
- 8. _____

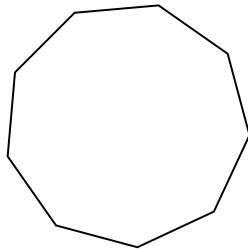


Xác định loại hình được hiển thị.

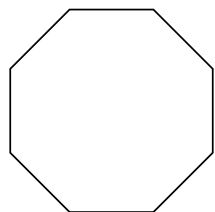
1)



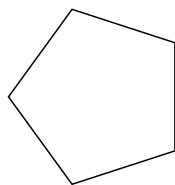
2)



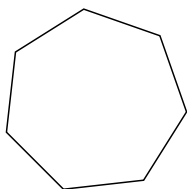
3)



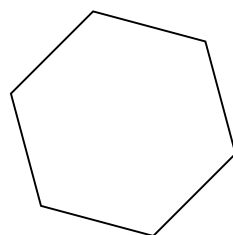
4)




5)




6)



7)



8)



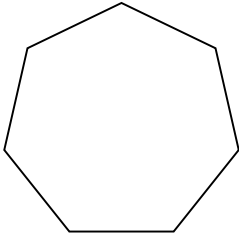
Câu trả lời

1. Thập giác
2. Cửu giác
3. Bát giác
4. Ngũ giác
5. Thất giác
6. Lục giác
7. triangle
8. Tứ giác

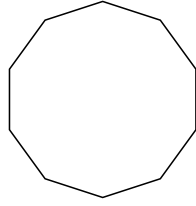


Xác định loại hình được hiển thị.

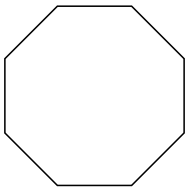
1)



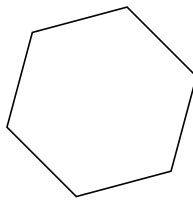
2)



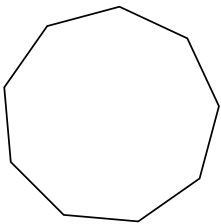
3)



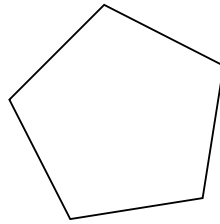
4)



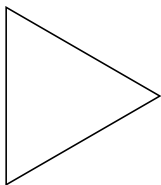
5)




6)



7)



8)



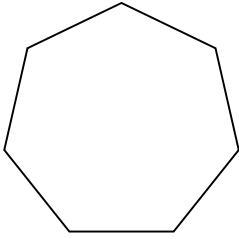
Câu trả lời

- 1. _____
- 2. _____
- 3. _____
- 4. _____
- 5. _____
- 6. _____
- 7. _____
- 8. _____

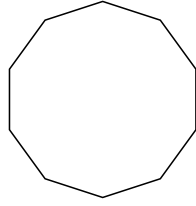


Xác định loại hình được hiển thị.

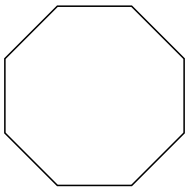
1)



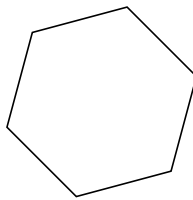
2)



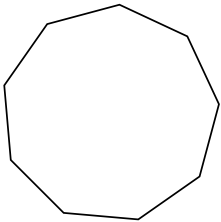
3)



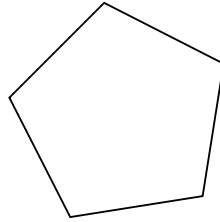
4)



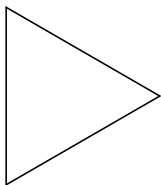
5)




6)



7)



8)



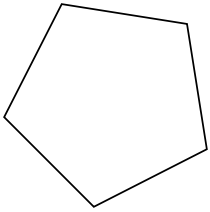
Câu trả lời

1. **Thất giác**
2. **Thập giác**
3. **Bát giác**
4. **Lục giác**
5. **Cửu giác**
6. **Ngũ giác**
7. **triangle**
8. **Tứ giác**

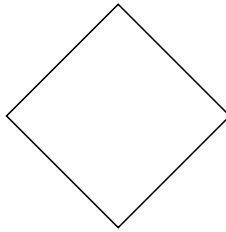


Xác định loại hình được hiển thị.

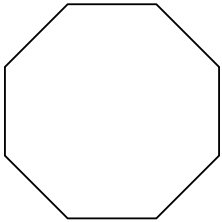
1)



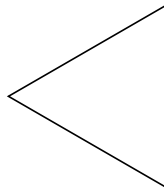
2)



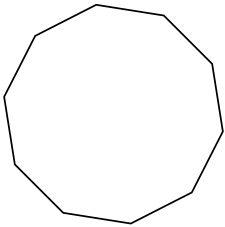
3)



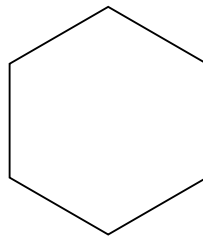
4)



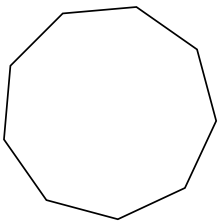
5)



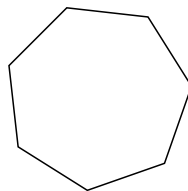
6)



7)



8)



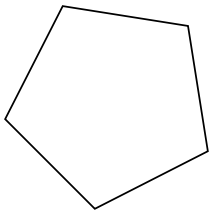
Câu trả lời

- 1. _____
- 2. _____
- 3. _____
- 4. _____
- 5. _____
- 6. _____
- 7. _____
- 8. _____

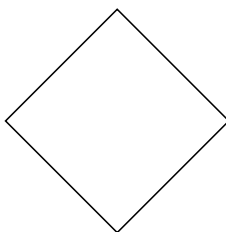


Xác định loại hình được hiển thị.

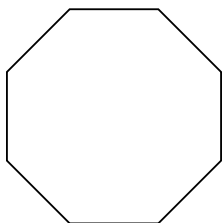
1)



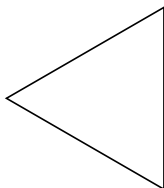
2)



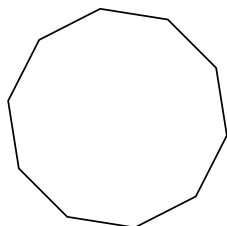
3)



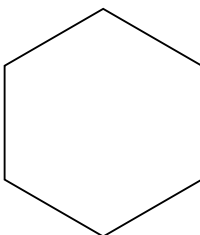
4)



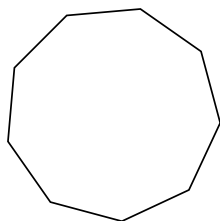
5)



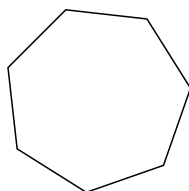
6)



7)



8)



Câu trả lời

1. **Ngũ giác**

2. **Tứ giác**

3. **Bát giác**

4. **triangle**

5. **Thập giác**

6. **Lục giác**

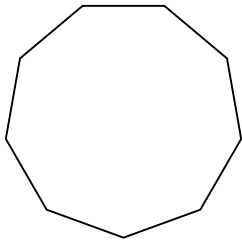
7. **Cửu giác**

8. **Thất giác**

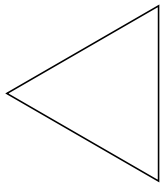


Xác định loại hình được hiển thị.

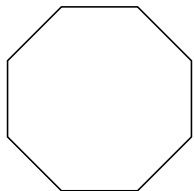
1)



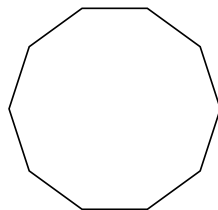
2)




3)



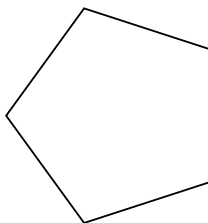
4)



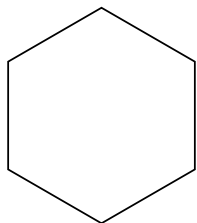
5)



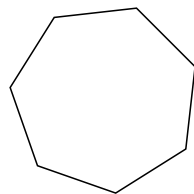
6)



7)



8)



Câu trả lời

1. _____

2. _____

3. _____

4. _____

5. _____

6. _____

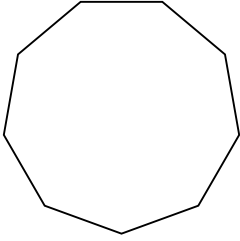
7. _____

8. _____

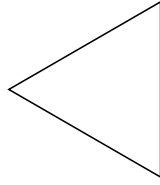


Xác định loại hình được hiển thị.

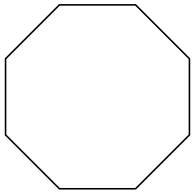
1)



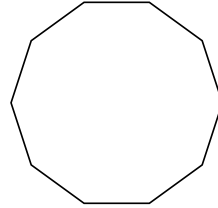
2)




3)



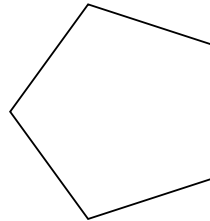
4)



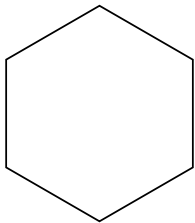
5)



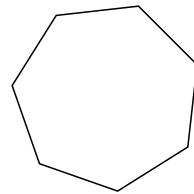
6)



7)



8)



Câu trả lời

1. **Cửu giác**

2. **triangle**

3. **Bát giác**

4. **Thập giác**

5. **Tứ giác**

6. **Ngũ giác**

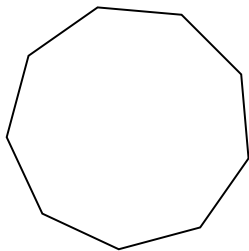
7. **Lục giác**

8. **Thất giác**

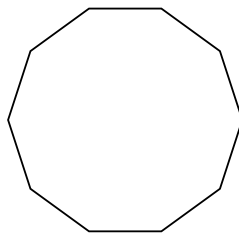


Xác định loại hình được hiển thị.

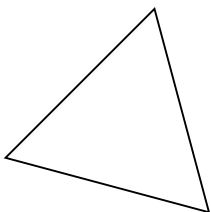
1)



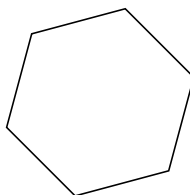
2)



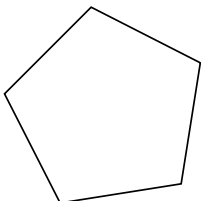
3)



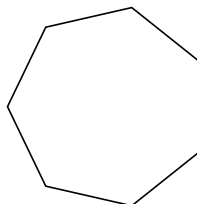
4)



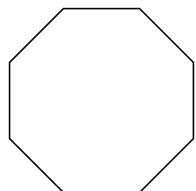
5)



6)



7)



8)



Câu trả lời

1. _____

2. _____

3. _____

4. _____

5. _____

6. _____

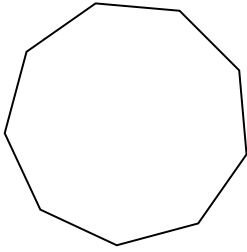
7. _____

8. _____

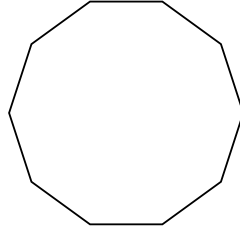


Xác định loại hình được hiển thị.


1)



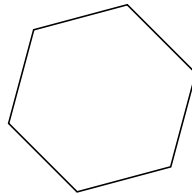
2)



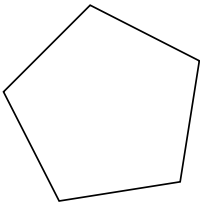
3)



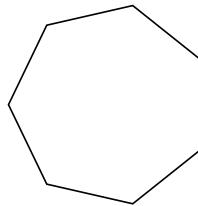
4)



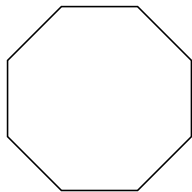
5)




6)



7)



8)



Câu trả lời

1. **Cửu giác**

2. **Thập giác**

3. **triangle**

4. **Lục giác**

5. **Ngũ giác**

6. **Thất giác**

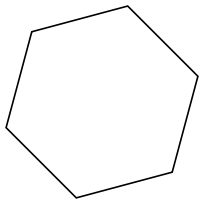
7. **Bát giác**

8. **Tứ giác**

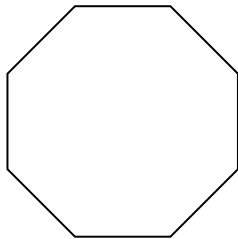


Xác định loại hình được hiển thị.

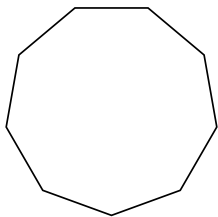
1)



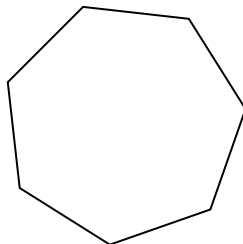
2)




3)



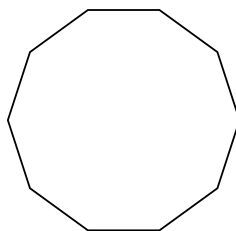
4)



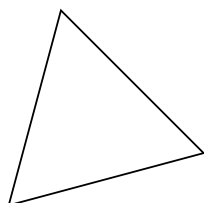
5)



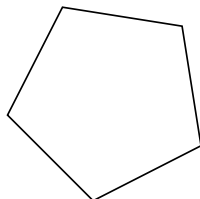
6)



7)



8)



Câu trả lời

1. _____

2. _____

3. _____

4. _____

5. _____

6. _____

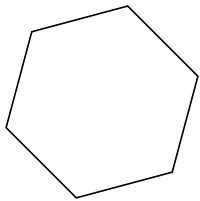
7. _____

8. _____

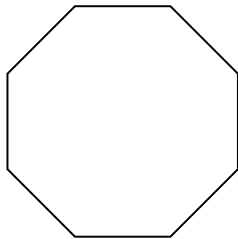


Xác định loại hình được hiển thị.

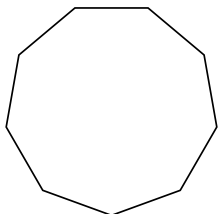
1)



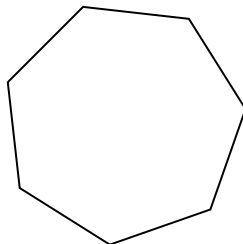
2)




3)



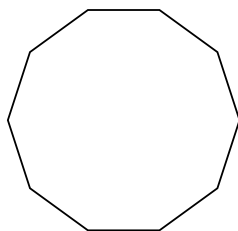
4)



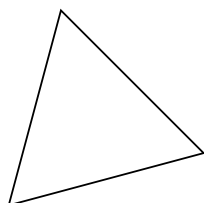
5)



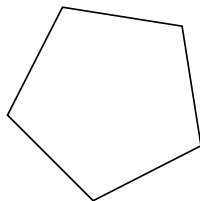
6)



7)



8)



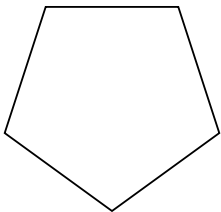
Câu trả lời

- 1. Lục giác
- 2. Bát giác
- 3. Cửu giác
- 4. Thất giác
- 5. Tứ giác
- 6. Thập giác
- 7. triangle
- 8. Ngũ giác

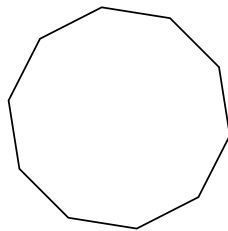


Xác định loại hình được hiển thị.

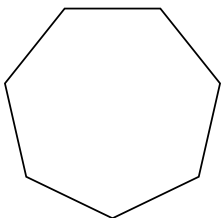
1)



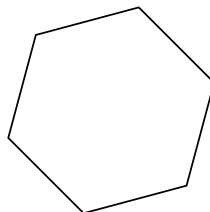
2)




3)



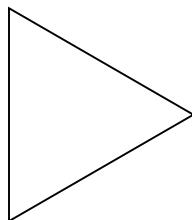
4)



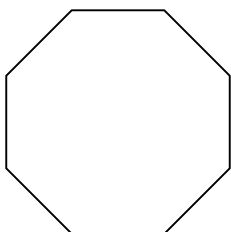
5)



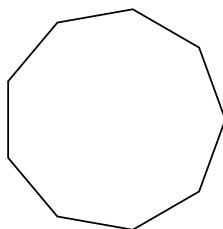
6)



7)



8)



Câu trả lời

1. _____

2. _____

3. _____

4. _____

5. _____

6. _____

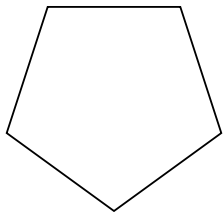
7. _____

8. _____

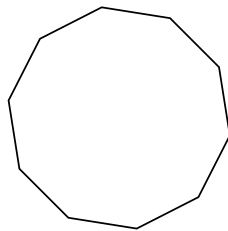


Xác định loại hình được hiển thị.

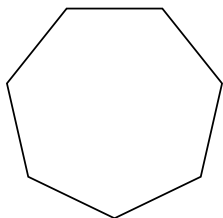
1)



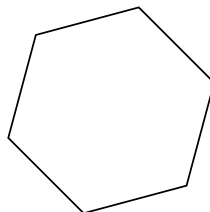
2)




3)



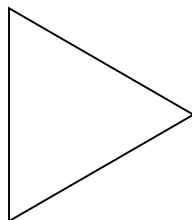
4)



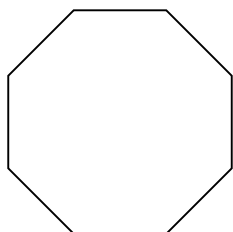
5)



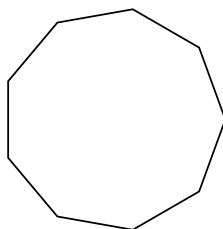
6)



7)



8)



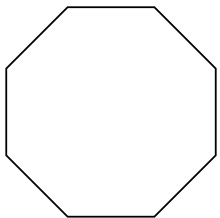
Câu trả lời

- 1. Ngũ giác
- 2. Thập giác
- 3. Thất giác
- 4. Lục giác
- 5. Tứ giác
- 6. triangle
- 7. Bát giác
- 8. Cửu giác

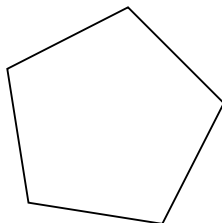


Xác định loại hình được hiển thị.

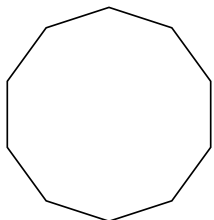
1)



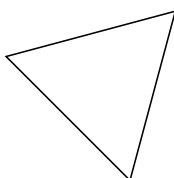
2)



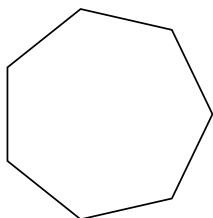
3)



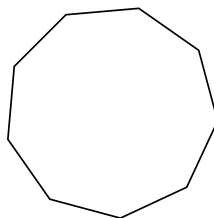
4)



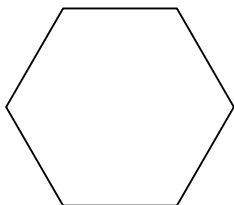
5)



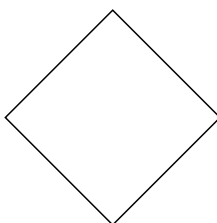
6)



7)



8)



Câu trả lời

1. _____

2. _____

3. _____

4. _____

5. _____

6. _____

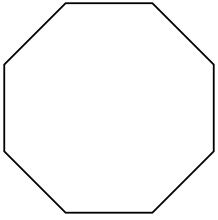
7. _____

8. _____

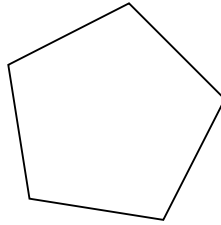


Xác định loại hình được hiển thị.

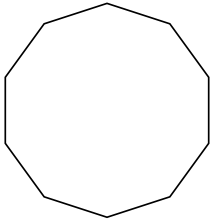
1)




2)



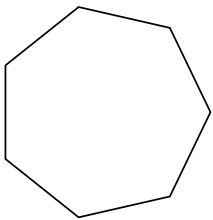
3)



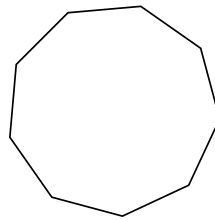
4)



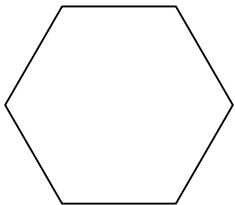
5)



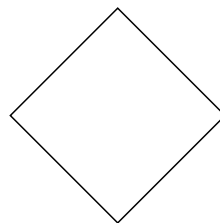
6)



7)



8)



Câu trả lời

1. **Bát giác**

2. **Ngũ giác**

3. **Thập giác**

4. **triangle**

5. **Thất giác**

6. **Cửu giác**

7. **Lục giác**

8. **Tứ giác**