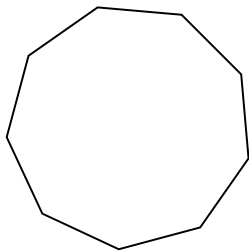


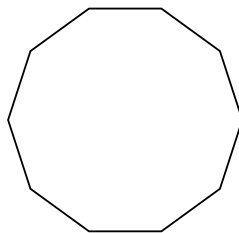


Xác định loại hình được hiển thị.

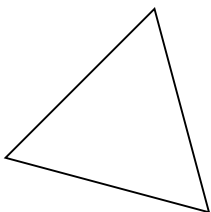
1)



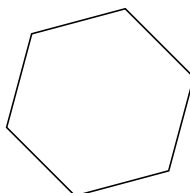
2)



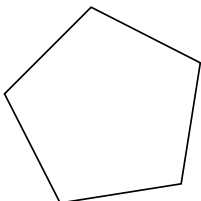
3)



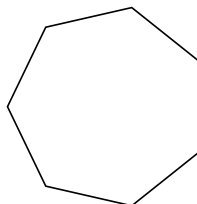
4)



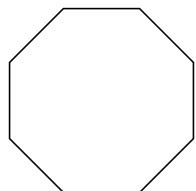
5)



6)



7)



8)



Câu trả lời

1. _____

2. _____

3. _____

4. _____

5. _____

6. _____

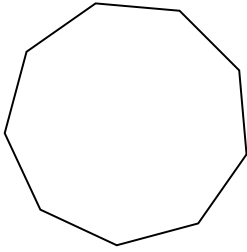
7. _____

8. _____

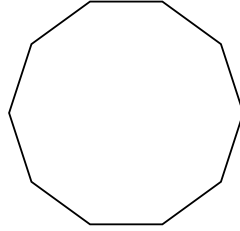


Xác định loại hình được hiển thị.

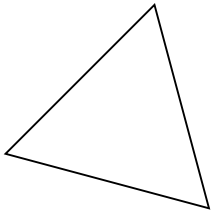
1)



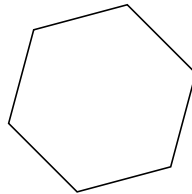
2)



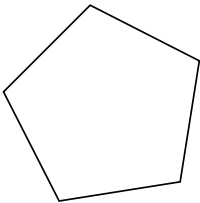
3)



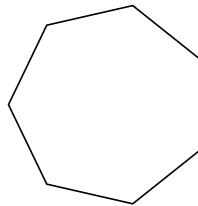
4)



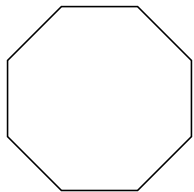
5)




6)



7)



8)



Câu trả lời

1. **Cửu giác**

2. **Thập giác**

3. **triangle**

4. **Lục giác**

5. **Ngũ giác**

6. **Thất giác**

7. **Bát giác**

8. **Tứ giác**