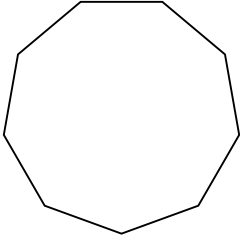


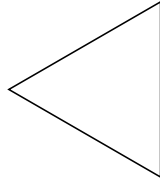


Xác định loại hình được hiển thị.

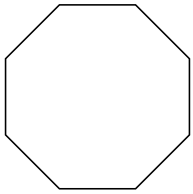
1)



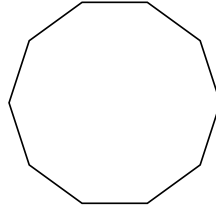
2)




3)



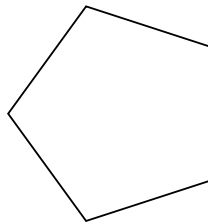
4)



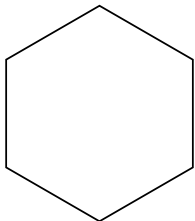
5)



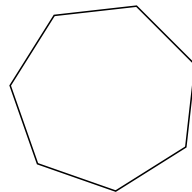
6)



7)



8)



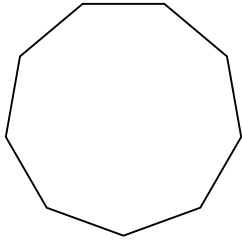
Câu trả lời

- 1. _____
- 2. _____
- 3. _____
- 4. _____
- 5. _____
- 6. _____
- 7. _____
- 8. _____

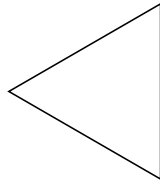


Xác định loại hình được hiển thị.

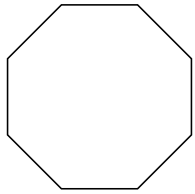
1)



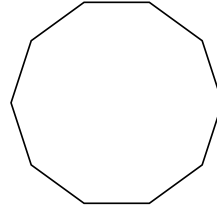
2)




3)



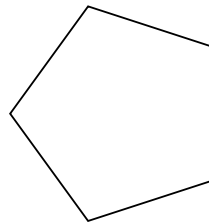
4)



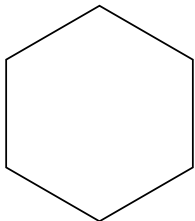
5)



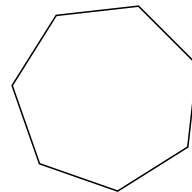
6)



7)



8)



Câu trả lời

1. Cửu giác

2. triangle

3. Bát giác

4. Thập giác

5. Tứ giác

6. Ngũ giác

7. Lục giác

8. Thất giác