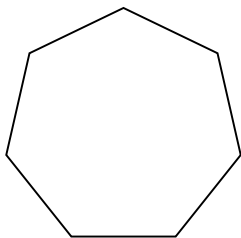


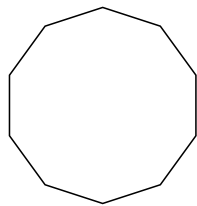


Xác định loại hình được hiển thị.

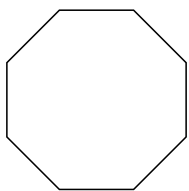
1)



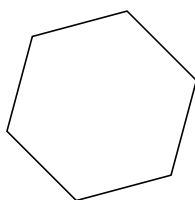
2)



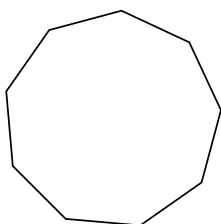
3)



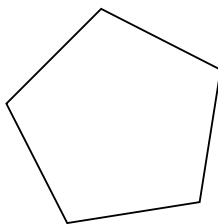
4)



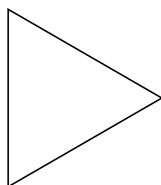
5)




6)



7)



8)



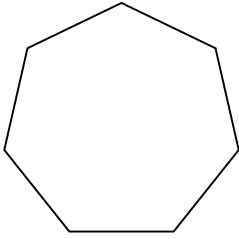
Câu trả lời

- 1. _____
- 2. _____
- 3. _____
- 4. _____
- 5. _____
- 6. _____
- 7. _____
- 8. _____

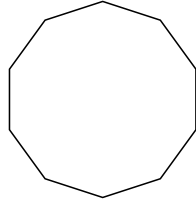


Xác định loại hình được hiển thị.

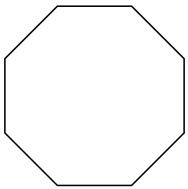
1)



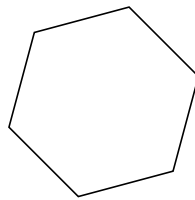
2)



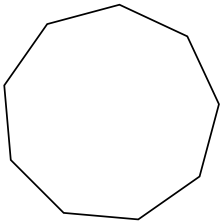
3)



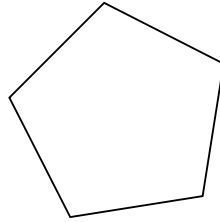
4)



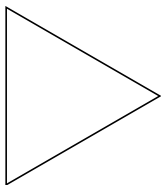
5)




6)



7)



8)



Câu trả lời

1. Thất giác
2. Thập giác
3. Bát giác
4. Lục giác
5. Cửu giác
6. Ngũ giác
7. triangle
8. Tứ giác