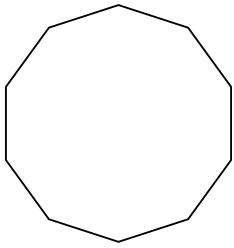


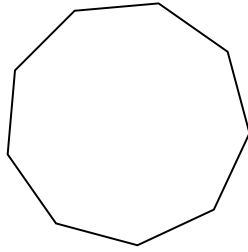


Xác định loại hình được hiển thị.

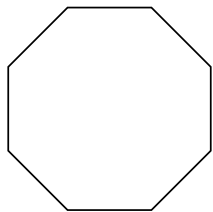
1)



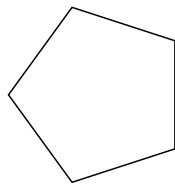
2)



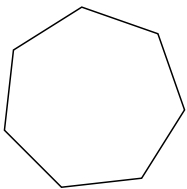
3)



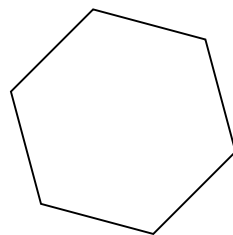
4)




5)




6)



7)



8)



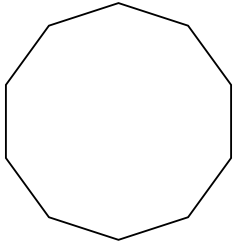
Câu trả lời

- 1. _____
- 2. _____
- 3. _____
- 4. _____
- 5. _____
- 6. _____
- 7. _____
- 8. _____

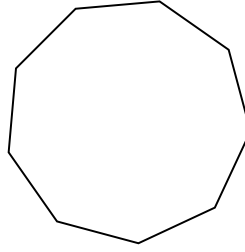


Xác định loại hình được hiển thị.

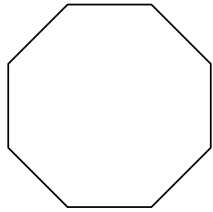
1)



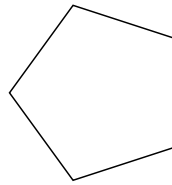
2)



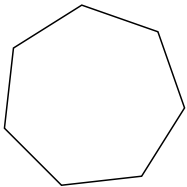
3)



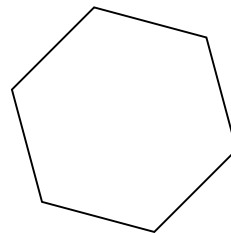
4)




5)




6)



7)



8)



Câu trả lời

1. **Thập giác**

2. **Cửu giác**

3. **Bát giác**

4. **Ngũ giác**

5. **Thất giác**

6. **Lục giác**

7. **triangle**

8. **Tứ giác**