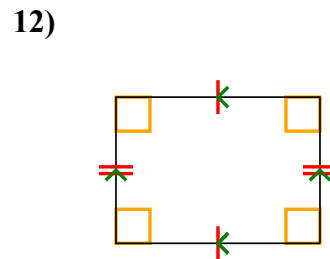
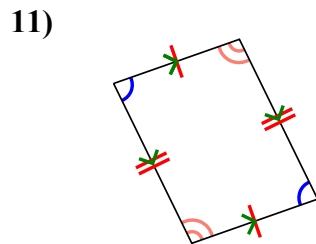
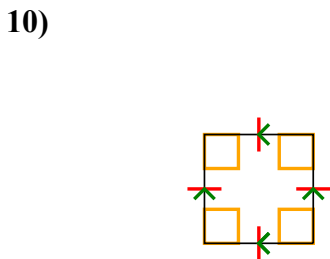
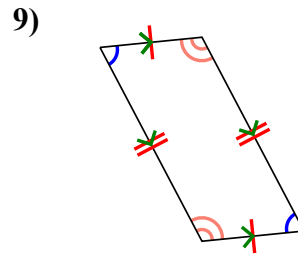
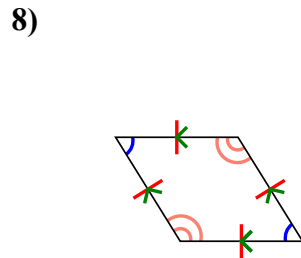
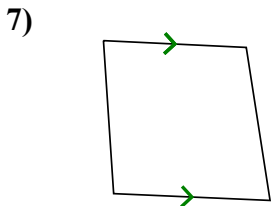
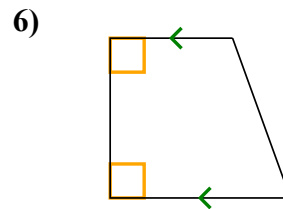
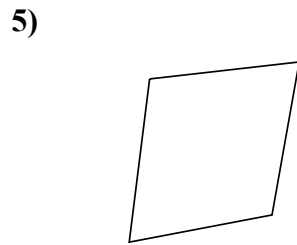
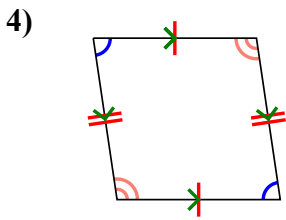
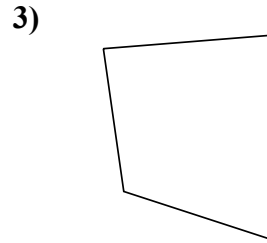
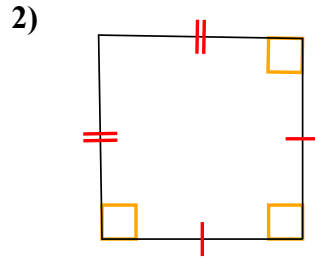
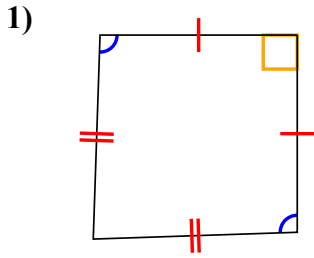




Xác định xem hình thể hiện có phải là hình tam giác Q, hình chữ nhật K, hình tam giác T, hình bình hành P, hình thoi R h, hình chữ nhật R hay hình chữ nhật S (có thể nhiều hơn một).

**Câu trả lời**

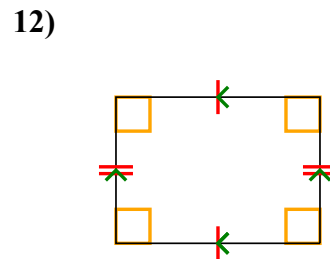
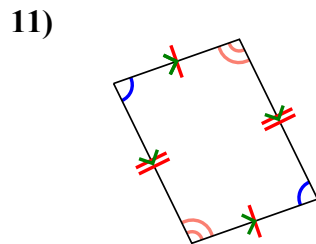
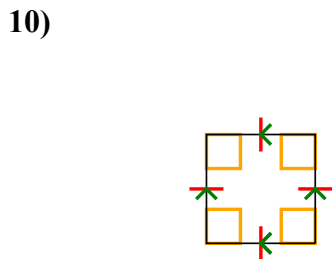
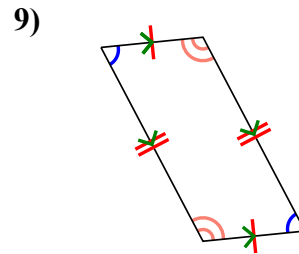
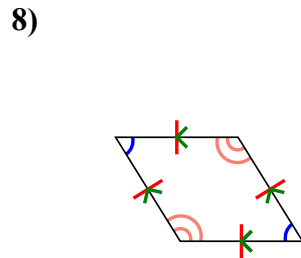
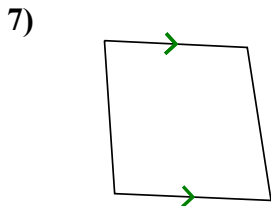
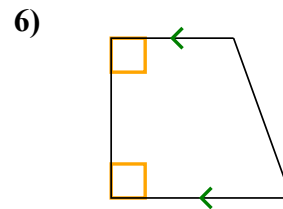
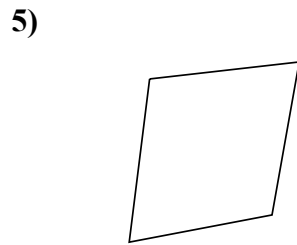
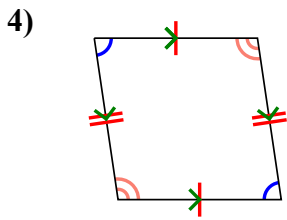
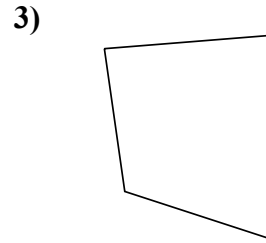
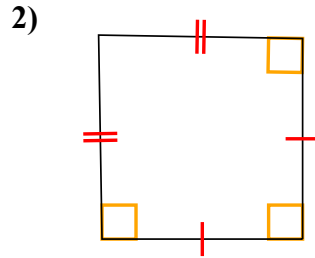
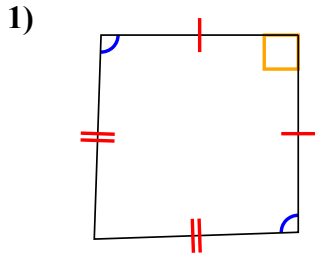


1. \_\_\_\_\_
2. \_\_\_\_\_
3. \_\_\_\_\_
4. \_\_\_\_\_
5. \_\_\_\_\_
6. \_\_\_\_\_
7. \_\_\_\_\_
8. \_\_\_\_\_
9. \_\_\_\_\_
10. \_\_\_\_\_
11. \_\_\_\_\_
12. \_\_\_\_\_



Xác định xem hình thể hiện có phải là hình tam giác Q, hình chữ nhật K, hình tam giác T, hình bình hành P, hình thoi R h, hình chữ nhật R hay hình chữ nhật S (có thể nhiều hơn một).

**Câu trả lời**



1. Q,K

2. Q,K

3. Q

4. Q,P

5. Q

6. Q,T

7. Q,T

8. Q,P,H

9. Q,P

10. Q,P,H,R,S

11. Q,P

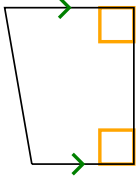
12. Q,P,R



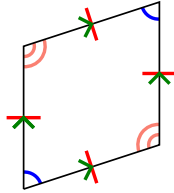
Xác định xem hình thể hiện có phải là hình tam giác Q, hình chữ nhật K, hình tam giác T, hình bình hành P, hình thoi R h, hình chữ nhật R hay hình chữ nhật S (có thể nhiều hơn một).

**Câu trả lời**


1)



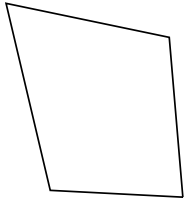
2)



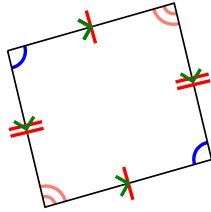
3)



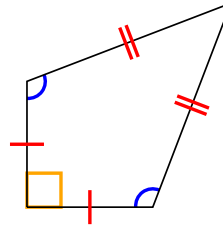
4)



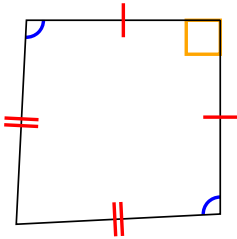
5)



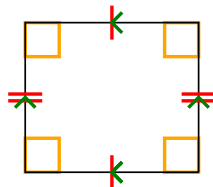
6)



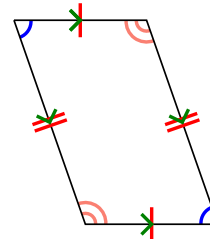
7)



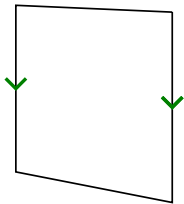
8)



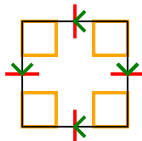
9)




10)



11)



12)

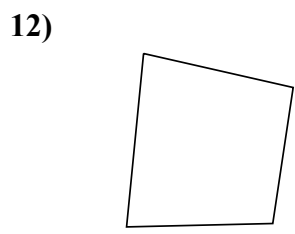
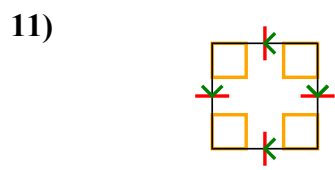
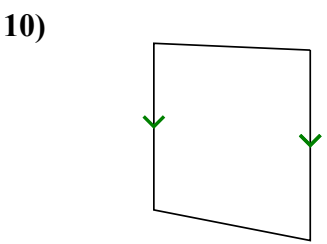
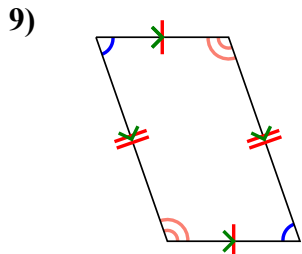
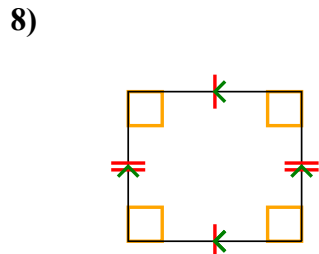
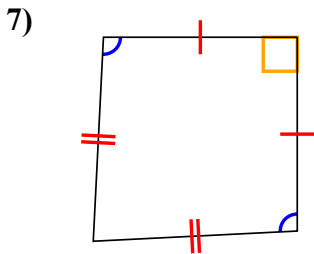
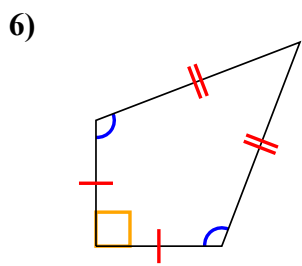
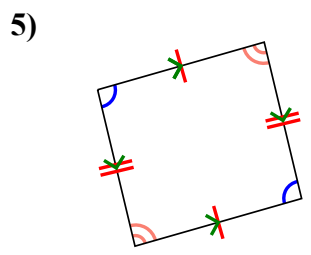
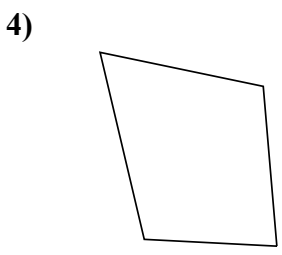
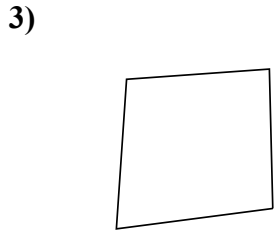
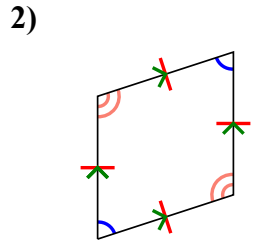
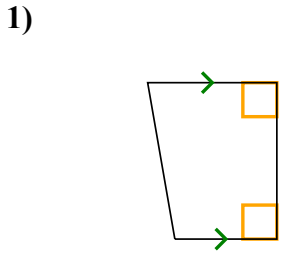


1. \_\_\_\_\_
2. \_\_\_\_\_
3. \_\_\_\_\_
4. \_\_\_\_\_
5. \_\_\_\_\_
6. \_\_\_\_\_
7. \_\_\_\_\_
8. \_\_\_\_\_
9. \_\_\_\_\_
10. \_\_\_\_\_
11. \_\_\_\_\_
12. \_\_\_\_\_



Xác định xem hình thể hiện có phải là hình tam giác Q , hình chữ nhật K , hình tam giác T , hình bình hành P , hình thoi R h , hình chữ nhật R hay hình chữ nhật S (có thể nhiều hơn một).

**Câu trả lời**



1. Q,T

2. Q,P,H

3. Q

4. Q

5. Q,P

6. Q,K

7. Q,K

8. Q,P,R

9. Q,P

10. Q,T

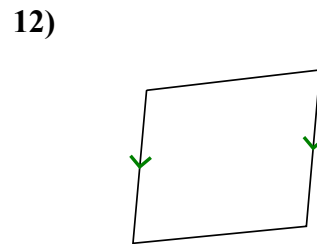
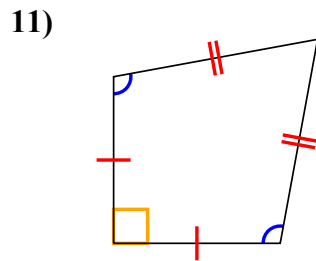
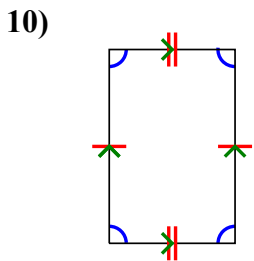
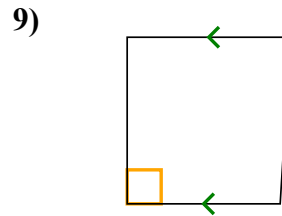
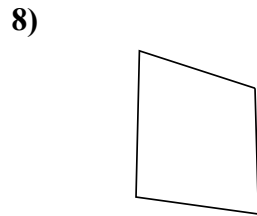
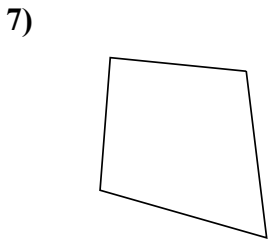
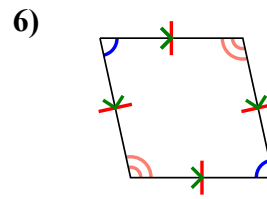
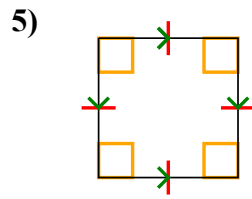
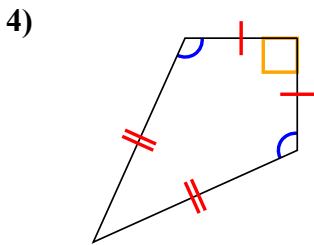
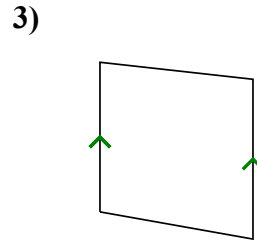
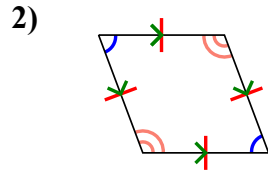
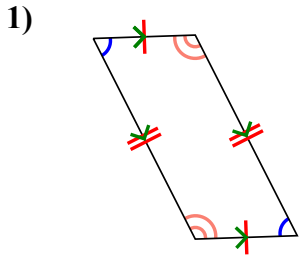
11. Q,P,H,R,S

12. Q



Xác định xem hình thể hiện có phải là hình tam giác Q, hình chữ nhật K, hình tam giác T, hình bình hành P, hình thoi R h, hình chữ nhật R hay hình chữ nhật S (có thể nhiều hơn một).

**Câu trả lời**

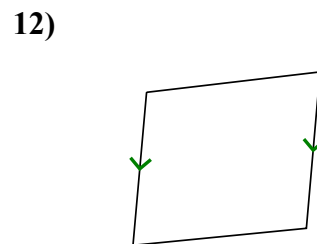
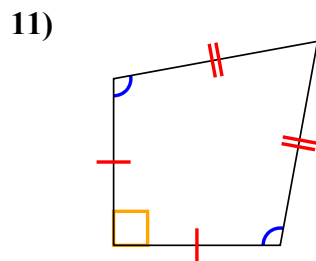
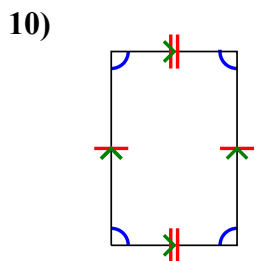
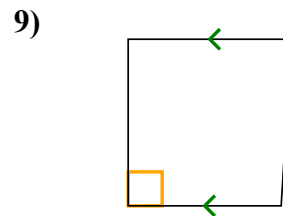
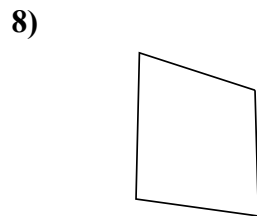
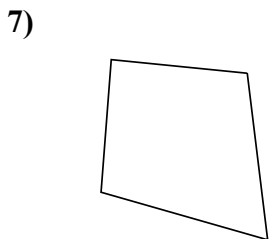
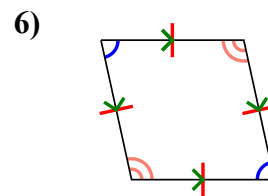
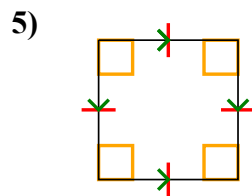
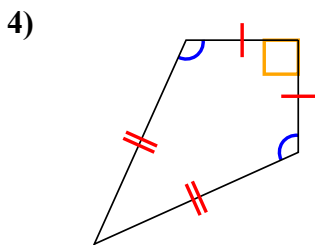
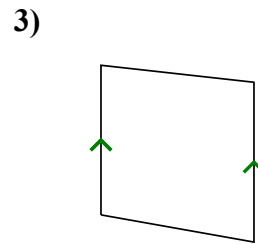
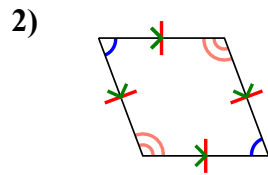
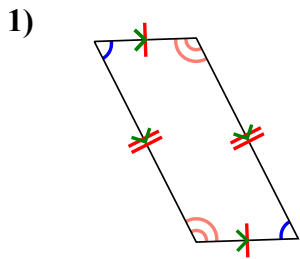


1. \_\_\_\_\_
2. \_\_\_\_\_
3. \_\_\_\_\_
4. \_\_\_\_\_
5. \_\_\_\_\_
6. \_\_\_\_\_
7. \_\_\_\_\_
8. \_\_\_\_\_
9. \_\_\_\_\_
10. \_\_\_\_\_
11. \_\_\_\_\_
12. \_\_\_\_\_



Xác định xem hình thể hiện có phải là hình tam giác Q , hình chữ nhật K , hình tam giác T , hình bình hành P , hình thoi R h , hình chữ nhật R hay hình chữ nhật S (có thể nhiều hơn một).

**Câu trả lời**



1. Q,P

2. Q,P,H

3. Q,T

4. Q,K

5. Q,P,H,R,S

6. Q,P,H

7. Q

8. Q

9. Q,T

10. Q,P

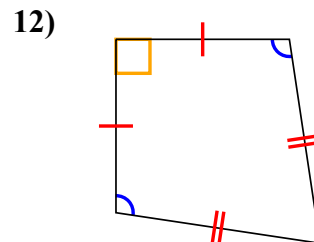
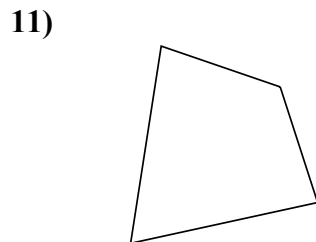
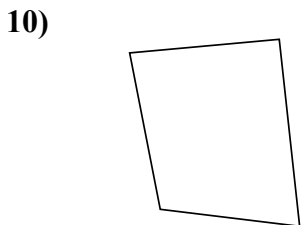
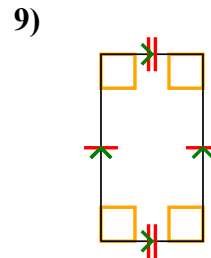
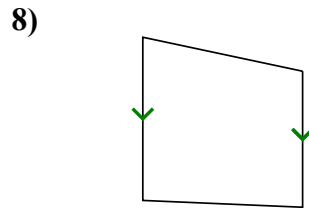
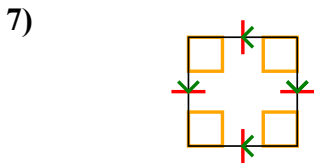
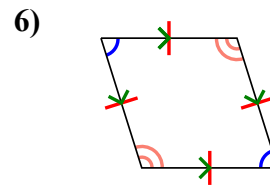
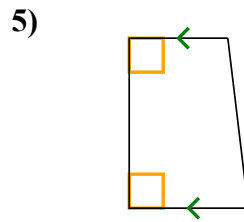
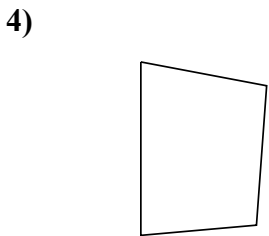
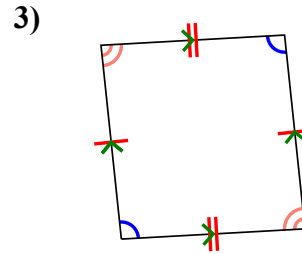
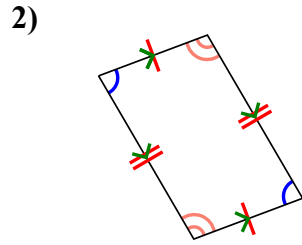
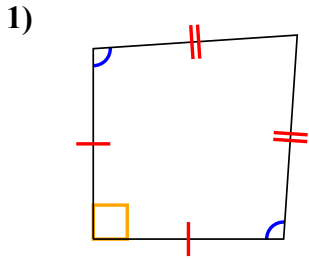
11. Q,K

12. Q,T



Xác định xem hình thể hiện có phải là hình tam giác Q, hình chữ nhật K, hình tam giác T, hình bình hành P, hình thoi R h, hình chữ nhật R hay hình chữ nhật S (có thể nhiều hơn một).

**Câu trả lời**

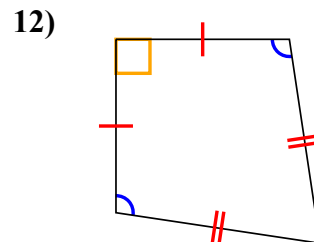
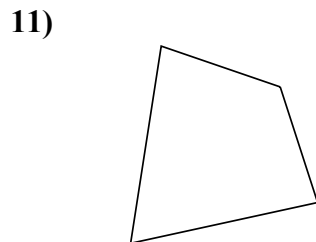
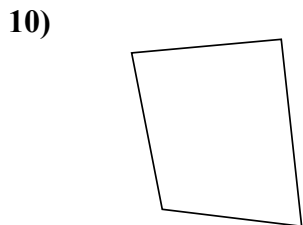
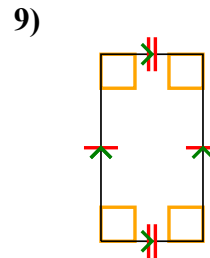
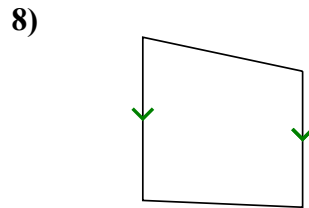
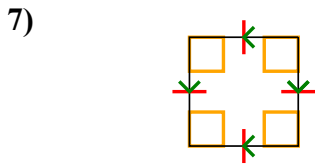
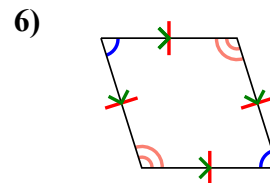
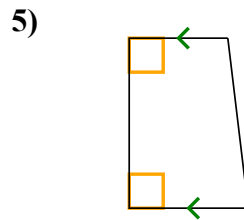
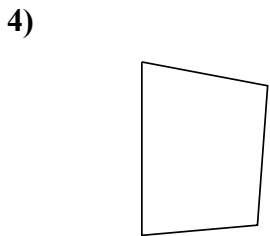
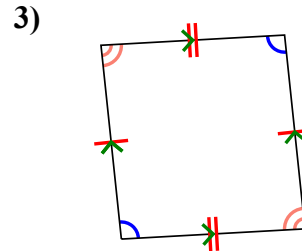
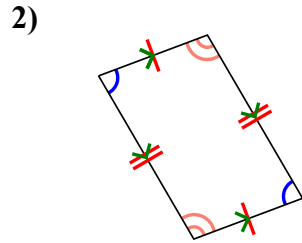
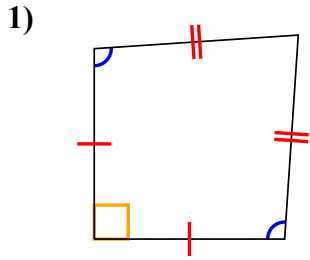


1. \_\_\_\_\_
2. \_\_\_\_\_
3. \_\_\_\_\_
4. \_\_\_\_\_
5. \_\_\_\_\_
6. \_\_\_\_\_
7. \_\_\_\_\_
8. \_\_\_\_\_
9. \_\_\_\_\_
10. \_\_\_\_\_
11. \_\_\_\_\_
12. \_\_\_\_\_



Xác định xem hình thể hiện có phải là hình tam giác Q , hình chữ nhật K , hình tam giác T , hình bình hành P , hình thoi R h , hình chữ nhật R hay hình chữ nhật S (có thể nhiều hơn một).

**Câu trả lời**



1. Q,K

2. Q,P

3. Q,P

4. Q

5. Q,T

6. Q,P,H

7. Q,P,H,R,S

8. Q,T

9. Q,P,R

10. Q

11. Q

12. Q,K

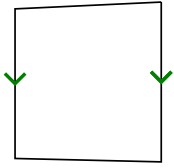




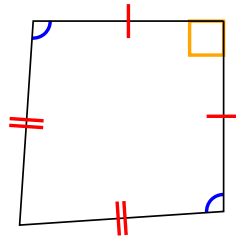
Xác định xem hình thể hiện có phải là hình tam giác Q, hình chữ nhật K, hình tam giác T, hình bình hành P, hình thoi R h, hình chữ nhật R hay hình chữ nhật S (có thể nhiều hơn một).

**Câu trả lời**

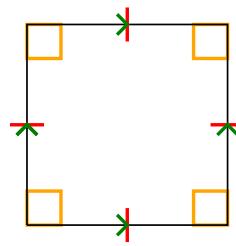
1)



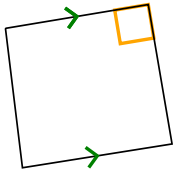
2)



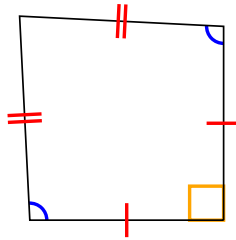
3)



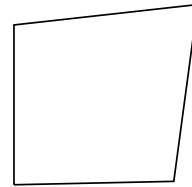
4)



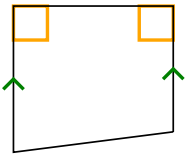
5)



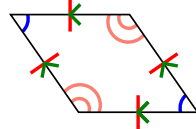
6)



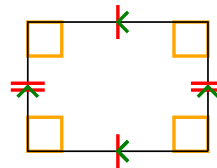
7)



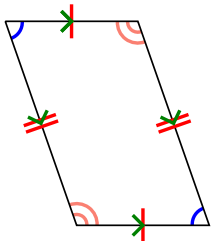
8)



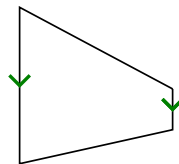
9)



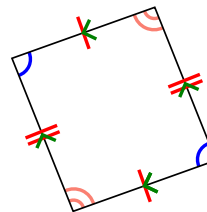
10)



11)



12)



1. \_\_\_\_\_

2. \_\_\_\_\_

3. \_\_\_\_\_

4. \_\_\_\_\_

5. \_\_\_\_\_

6. \_\_\_\_\_

7. \_\_\_\_\_

8. \_\_\_\_\_

9. \_\_\_\_\_

10. \_\_\_\_\_

11. \_\_\_\_\_

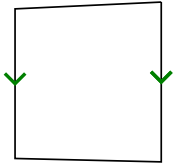
12. \_\_\_\_\_



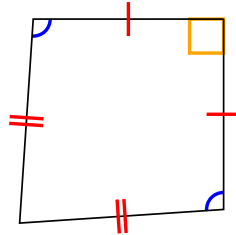
Xác định xem hình thể hiện có phải là hình tam giác Q , hình chữ nhật K , hình tam giác T , hình bình hành P , hình thoi R h , hình chữ nhật R hay hình chữ nhật S (có thể nhiều hơn một).

**Câu trả lời**

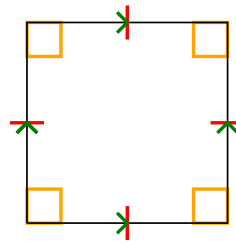
1)



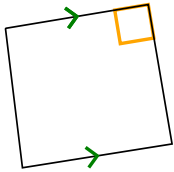
2)



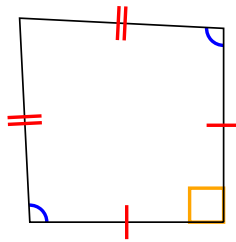
3)



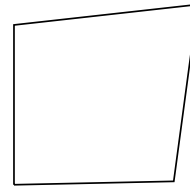
4)



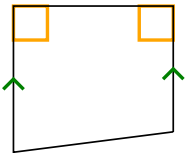
5)



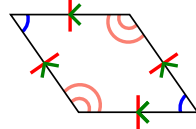
6)



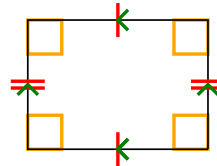
7)



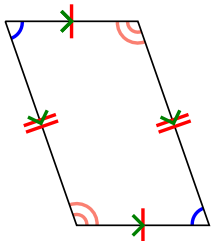
8)



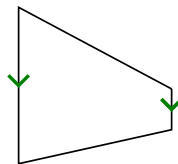
9)



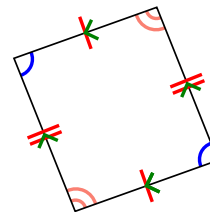
10)



11)



12)



1. Q,T

2. Q,K

3. Q,P,H,R,S

4. Q,T

5. Q,K

6. Q

7. Q,T

8. Q,P,H

9. Q,P,R

10. Q,P

11. Q,T

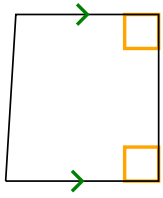
12. Q,P



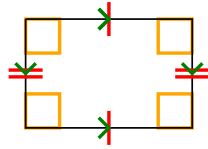
Xác định xem hình thể hiện có phải là hình tam giác Q, hình chữ nhật K, hình tam giác T, hình bình hành P, hình thoi R h, hình chữ nhật R hay hình chữ nhật S (có thể nhiều hơn một).

**Câu trả lời**


1)



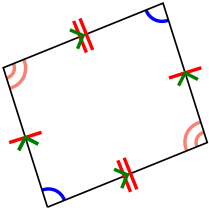
2)



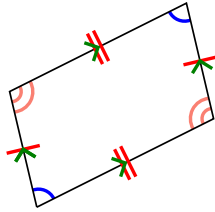
3)



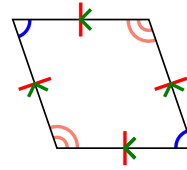
4)



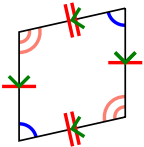
5)



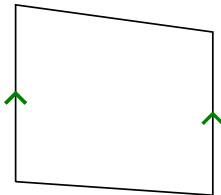
6)



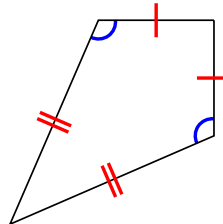
7)



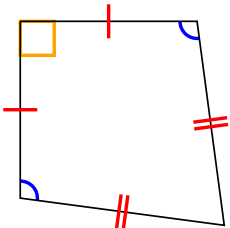
8)




9)




10)



11)



12)



1. \_\_\_\_\_

2. \_\_\_\_\_

3. \_\_\_\_\_

4. \_\_\_\_\_

5. \_\_\_\_\_

6. \_\_\_\_\_

7. \_\_\_\_\_

8. \_\_\_\_\_

9. \_\_\_\_\_

10. \_\_\_\_\_

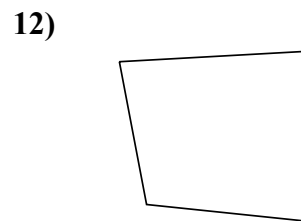
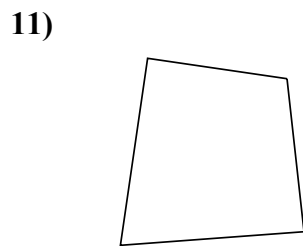
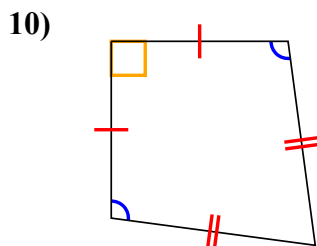
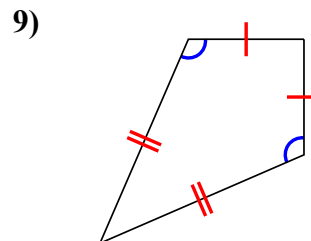
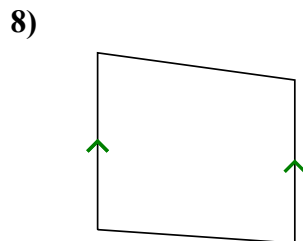
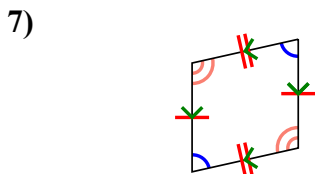
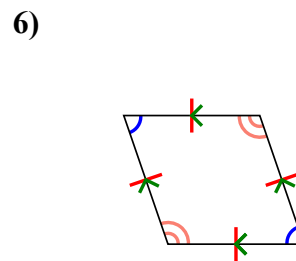
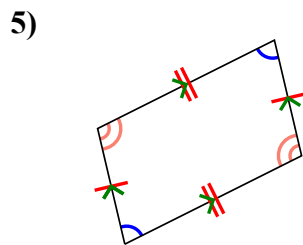
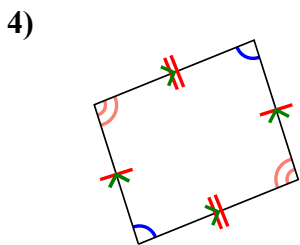
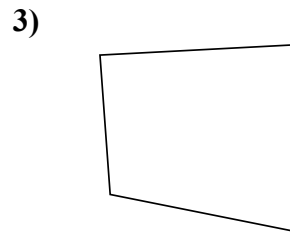
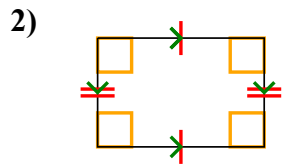
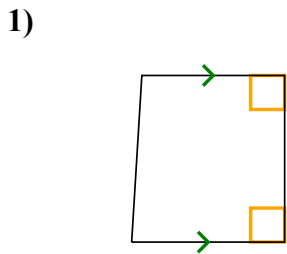
11. \_\_\_\_\_

12. \_\_\_\_\_



Xác định xem hình thể hiện có phải là hình tam giác Q , hình chữ nhật K , hình tam giác T , hình bình hành P , hình thoi R h , hình chữ nhật R hay hình chữ nhật S (có thể nhiều hơn một).

**Câu trả lời**



1. Q,T

2. Q,P,R

3. Q

4. Q,P

5. Q,P

6. Q,P,H

7. Q,P

8. Q,T

9. Q,K

10. Q,K

11. Q

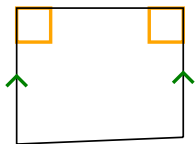
12. Q



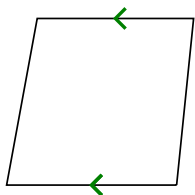
Xác định xem hình thể hiện có phải là hình tam giác Q, hình chữ nhật K, hình tam giác T, hình bình hành P, hình thoi R h, hình chữ nhật R hay hình chữ nhật S (có thể nhiều hơn một).

**Câu trả lời**


1)



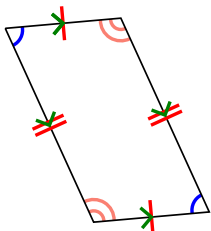
2)



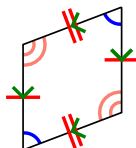
3)



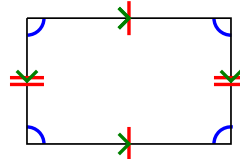
4)



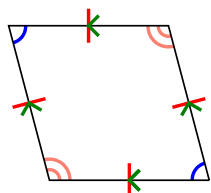
5)



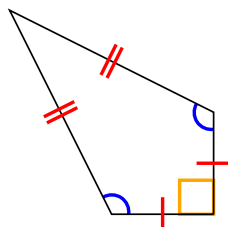
6)



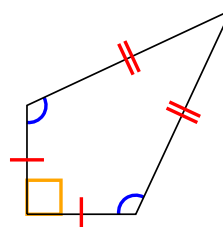
7)



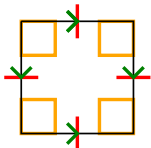
8)



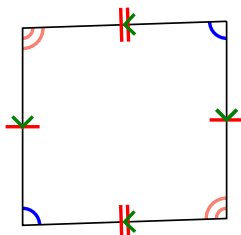
9)




10)



11)



12)

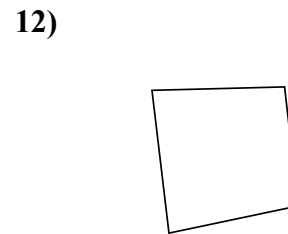
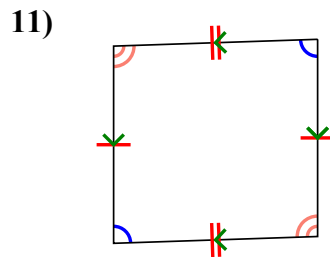
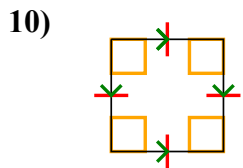
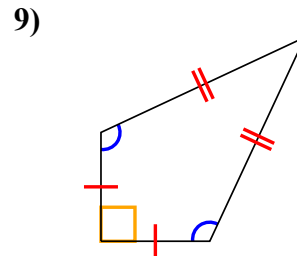
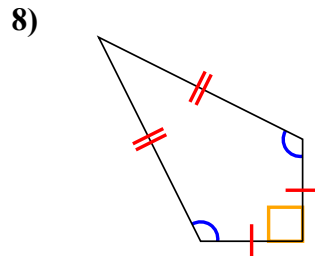
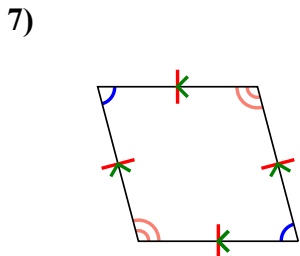
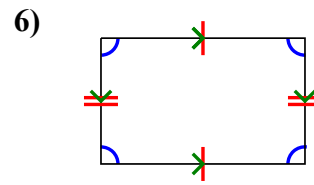
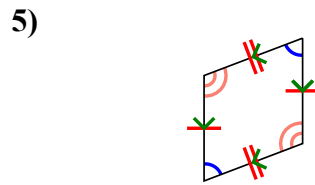
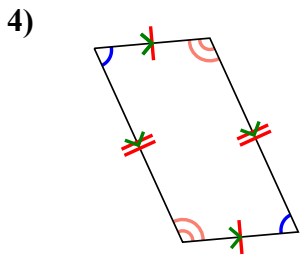
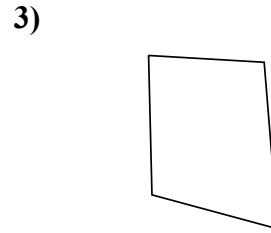
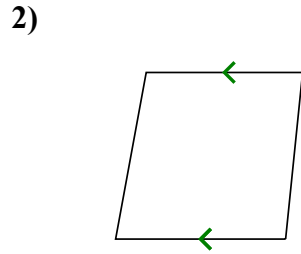
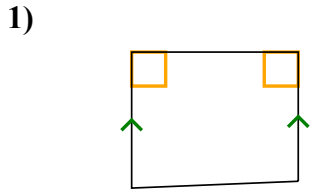


1. \_\_\_\_\_
2. \_\_\_\_\_
3. \_\_\_\_\_
4. \_\_\_\_\_
5. \_\_\_\_\_
6. \_\_\_\_\_
7. \_\_\_\_\_
8. \_\_\_\_\_
9. \_\_\_\_\_
10. \_\_\_\_\_
11. \_\_\_\_\_
12. \_\_\_\_\_



Xác định xem hình thể hiện có phải là hình tam giác Q , hình chữ nhật K , hình tam giác T , hình bình hành P , hình thoi R h , hình chữ nhật R hay hình chữ nhật S (có thể nhiều hơn một).

**Câu trả lời**



1. Q,T

2. Q,T

3. Q

4. Q,P

5. Q,P

6. Q,P

7. Q,P,H

8. Q,K

9. Q,K

10. Q,P,H,R,S

11. Q,P

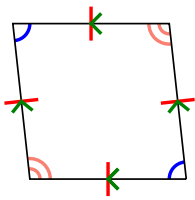
12. Q



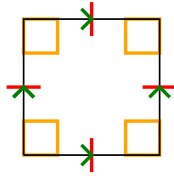
Xác định xem hình thể hiện có phải là hình tam giác Q, hình chữ nhật K, hình tam giác T, hình bình hành P, hình thoi R h, hình chữ nhật R hay hình chữ nhật S (có thể nhiều hơn một).

**Câu trả lời**

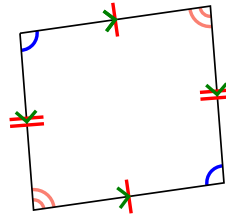
1)



2)



3)



1. \_\_\_\_\_


2. \_\_\_\_\_

3. \_\_\_\_\_

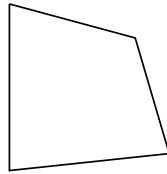
4. \_\_\_\_\_

5. \_\_\_\_\_

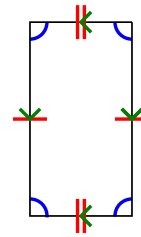
4)



5)



6)



6. \_\_\_\_\_

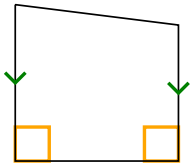
7. \_\_\_\_\_

8. \_\_\_\_\_

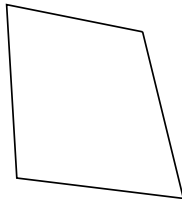
9. \_\_\_\_\_

10. \_\_\_\_\_

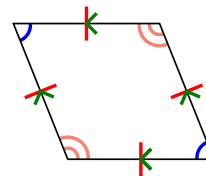
7)



8)



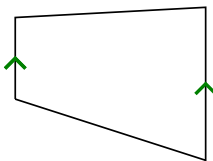
9)



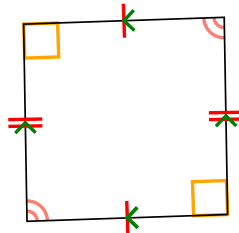
11. \_\_\_\_\_

12. \_\_\_\_\_

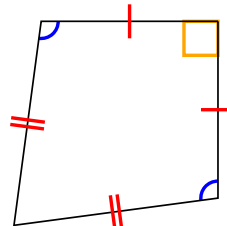
10)



11)



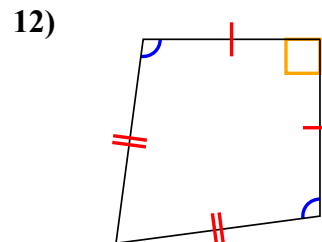
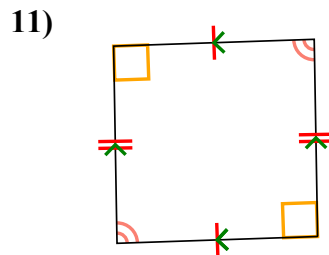
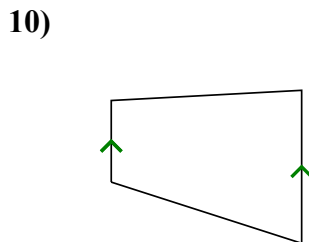
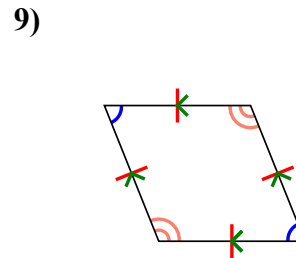
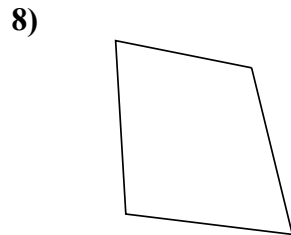
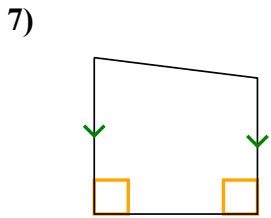
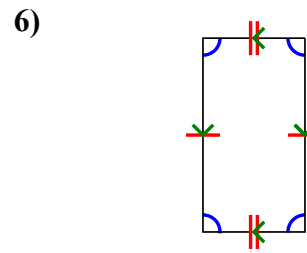
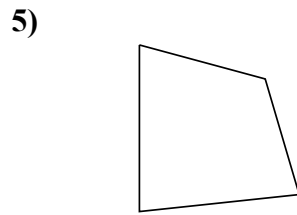
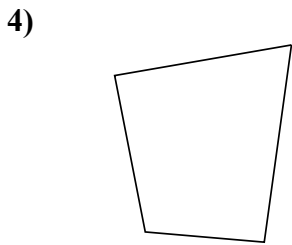
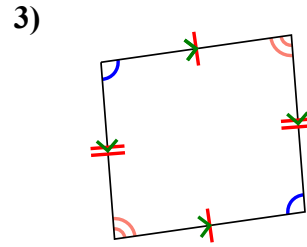
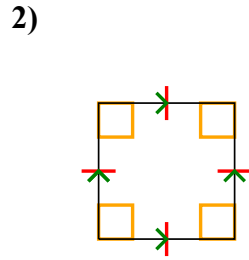
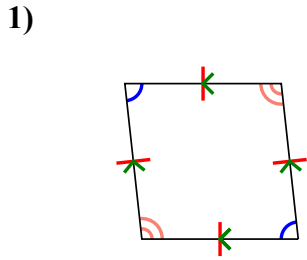
12)





Xác định xem hình thể hiện có phải là hình tam giác Q, hình chữ nhật K, hình tam giác T, hình bình hành P, hình thoi R h, hình chữ nhật R hay hình chữ nhật S (có thể nhiều hơn một).

**Câu trả lời**



1. Q,P,H

2. Q,P,H,R,S

3. Q,P

4. Q

5. Q

6. Q,P

7. Q,T

8. Q

9. Q,P,H

10. Q,T

11. Q,P

12. Q,K

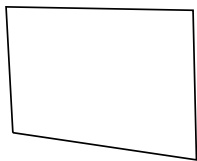




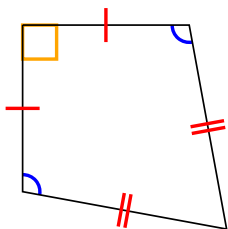
Xác định xem hình thể hiện có phải là hình tam giác Q, hình chữ nhật K, hình tam giác T, hình bình hành P, hình thoi R h, hình chữ nhật R hay hình chữ nhật S (có thể nhiều hơn một).

**Câu trả lời**

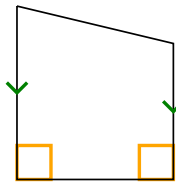
1)



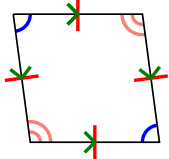
2)



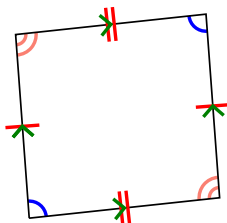
3)



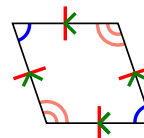
4)



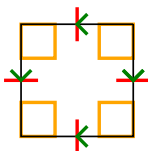
5)



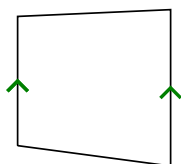
6)



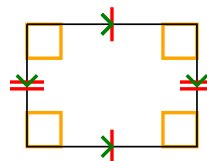
7)



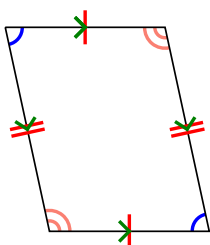
8)



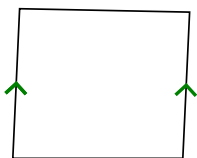
9)



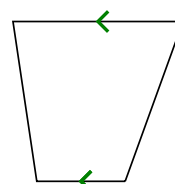
10)



11)



12)

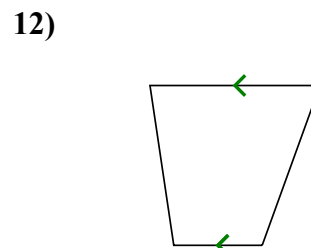
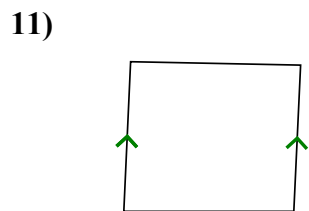
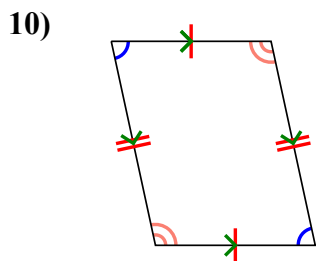
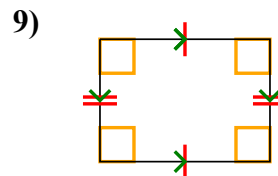
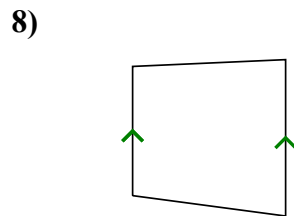
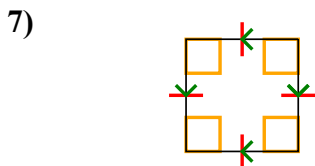
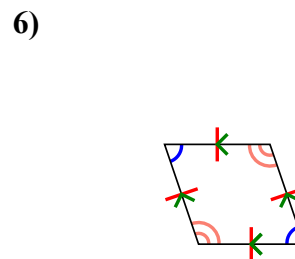
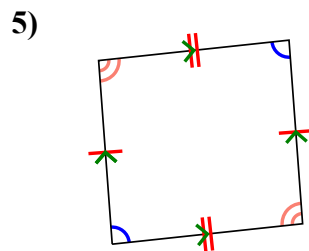
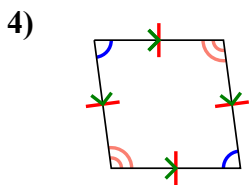
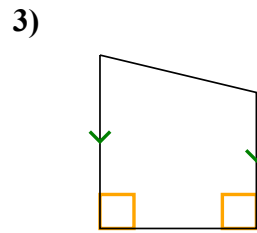
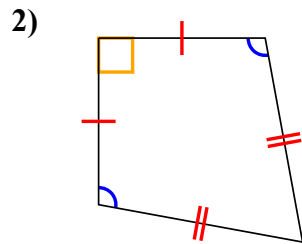



1. \_\_\_\_\_
2. \_\_\_\_\_
3. \_\_\_\_\_
4. \_\_\_\_\_
5. \_\_\_\_\_
6. \_\_\_\_\_
7. \_\_\_\_\_
8. \_\_\_\_\_
9. \_\_\_\_\_
10. \_\_\_\_\_
11. \_\_\_\_\_
12. \_\_\_\_\_



Xác định xem hình thể hiện có phải là hình tam giác Q, hình chữ nhật K, hình tam giác T, hình bình hành P, hình thoi R h, hình chữ nhật R hay hình chữ nhật S (có thể nhiều hơn một).

**Câu trả lời**



1. Q

2. Q,K

3. Q,T

4. Q,P,H

5. Q,P

6. Q,P,H

7. Q,P,H,R,S

8. Q,T

9. Q,P,R

10. Q,P

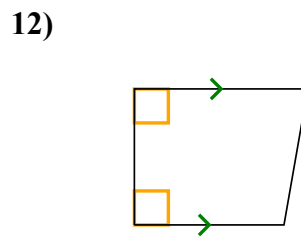
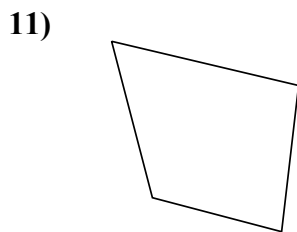
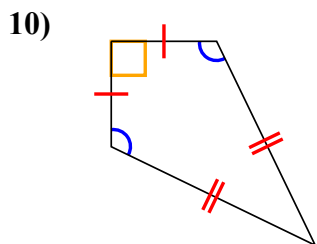
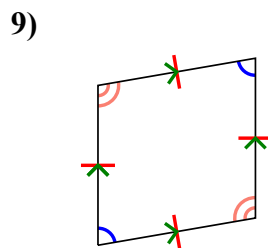
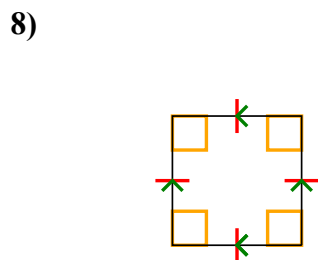
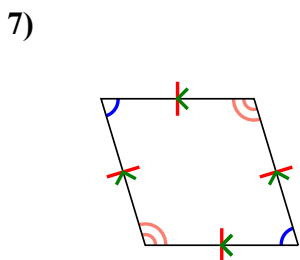
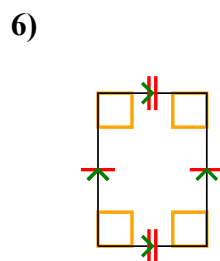
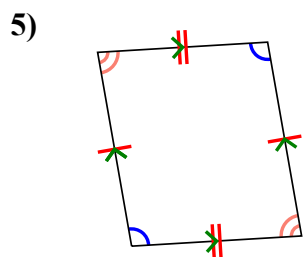
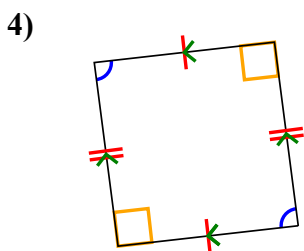
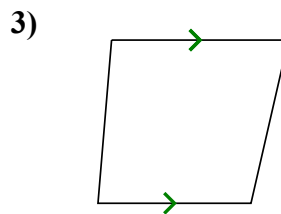
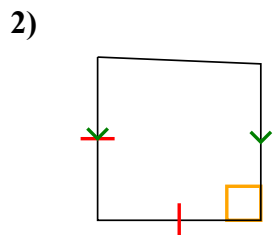
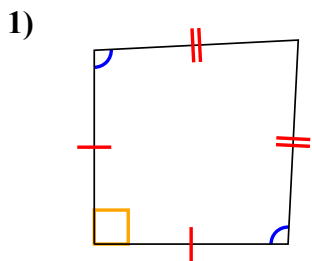
11. Q,T

12. Q,T



Xác định xem hình thể hiện có phải là hình tam giác Q, hình chữ nhật K, hình tam giác T, hình bình hành P, hình thoi R h, hình chữ nhật R hay hình chữ nhật S (có thể nhiều hơn một).

**Câu trả lời**

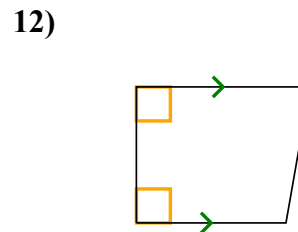
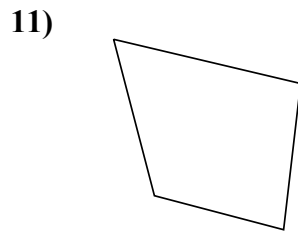
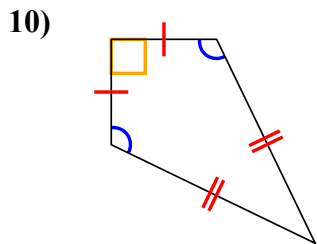
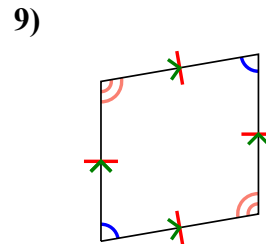
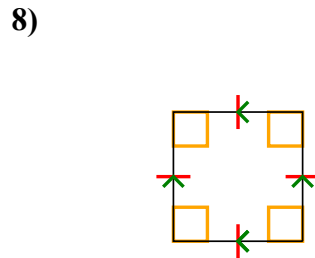
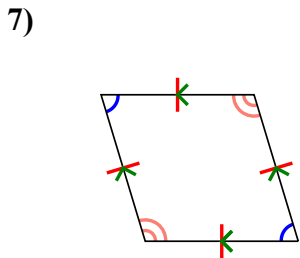
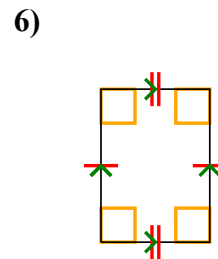
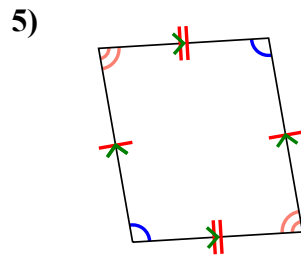
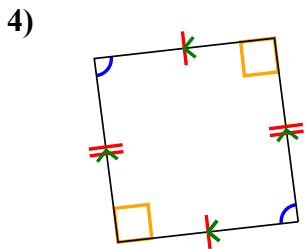
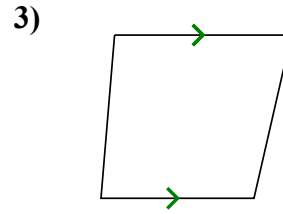
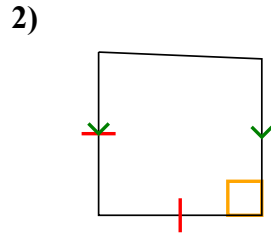
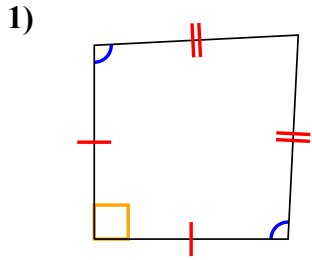


1. \_\_\_\_\_
2. \_\_\_\_\_
3. \_\_\_\_\_
4. \_\_\_\_\_
5. \_\_\_\_\_
6. \_\_\_\_\_
7. \_\_\_\_\_
8. \_\_\_\_\_
9. \_\_\_\_\_
10. \_\_\_\_\_
11. \_\_\_\_\_
12. \_\_\_\_\_



Xác định xem hình thể hiện có phải là hình tam giác Q , hình chữ nhật K , hình tam giác T , hình bình hành P , hình thoi R h , hình chữ nhật R hay hình chữ nhật S (có thể nhiều hơn một).

**Câu trả lời**



1. **Q,K**

2. **Q,T**

3. **Q,T**

4. **Q,P**

5. **Q,P**

6. **Q,P,R**

7. **Q,P,H**

8. **Q,P,H,R,S**

9. **Q,P,H**

10. **Q,K**

11. **Q**

12. **Q,T**