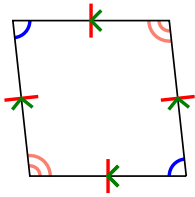




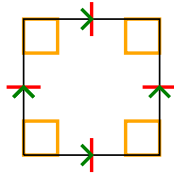
Xác định xem hình thể hiện có phải là hình tam giác Q, hình chữ nhật K, hình tam giác T, hình bình hành P, hình thoi R h, hình chữ nhật R hay hình chữ nhật S (có thể nhiều hơn một).

Câu trả lời

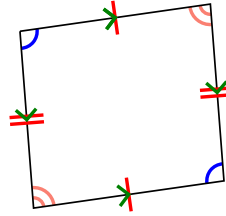
1)



2)



3)



1. _____


2. _____

3. _____

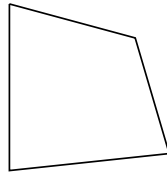
4. _____

5. _____

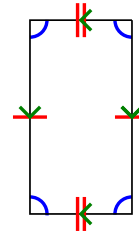
4)



5)



6)



6. _____

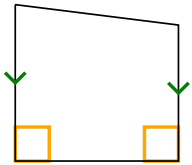
7. _____

8. _____

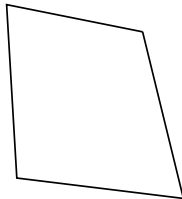
9. _____

10. _____

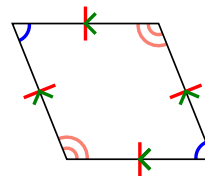
7)



8)



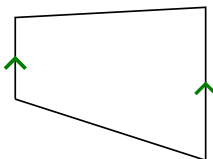
9)



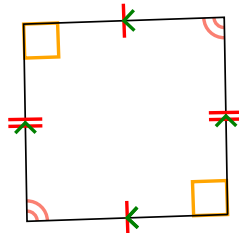
11. _____

12. _____

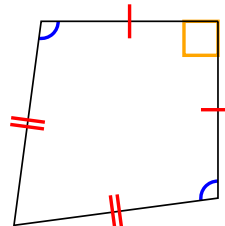
10)



11)



12)

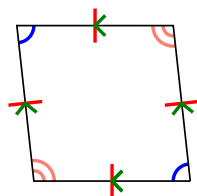




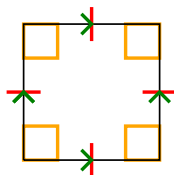
Xác định xem hình thể hiện có phải là hình tam giác Q , hình chữ nhật K , hình tam giác T , hình bình hành P , hình thoi R h , hình chữ nhật R hay hình chữ nhật S (có thể nhiều hơn một).

Câu trả lời

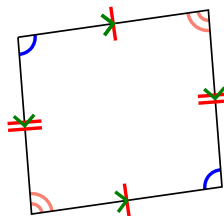
1)



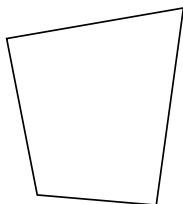
2)



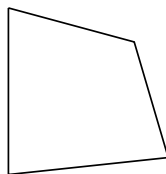
3)



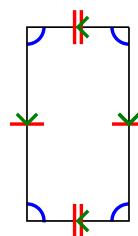
4)



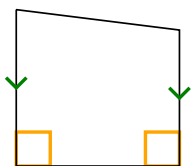
5)



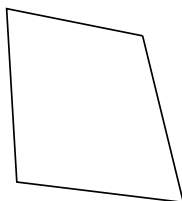
6)



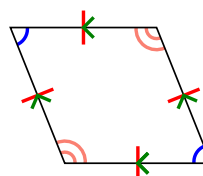
7)



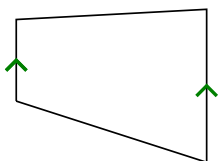
8)



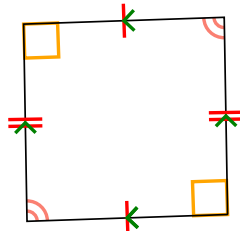
9)



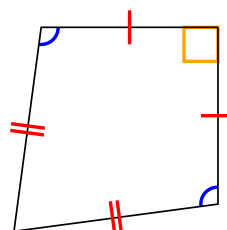
10)



11)



12)



1. **Q,P,H**

2. **Q,P,H,R,S**

3. **Q,P**

4. **Q**

5. **Q**

6. **Q,P**

7. **Q,T**

8. **Q**

9. **Q,P,H**

10. **Q,T**

11. **Q,P**

12. **Q,K**