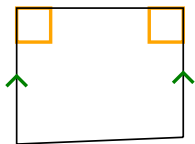




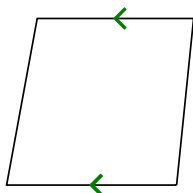
Xác định xem hình thể hiện có phải là hình tam giác Q, hình chữ nhật K, hình tam giác T, hình bình hành P, hình thoi R h, hình chữ nhật R hay hình chữ nhật S (có thể nhiều hơn một).

Câu trả lời


1)



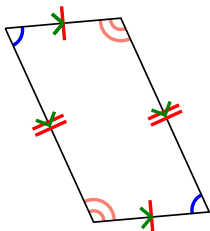
2)



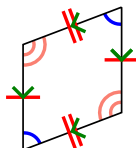
3)



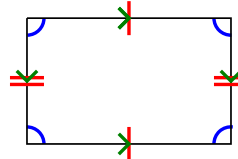
4)



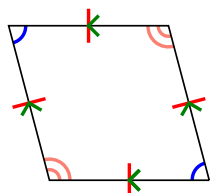
5)



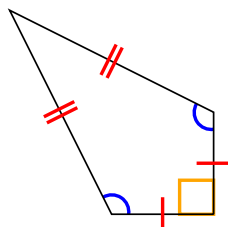
6)



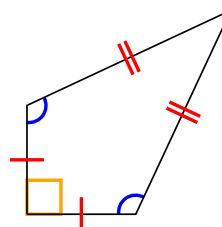
7)



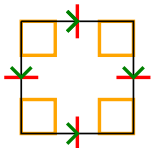
8)



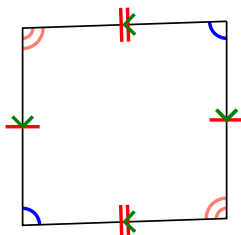
9)




10)



11)



12)

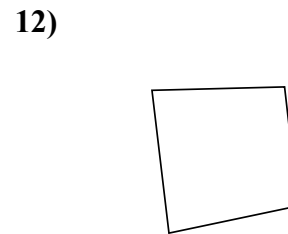
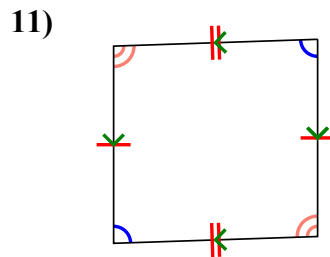
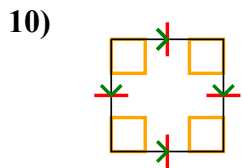
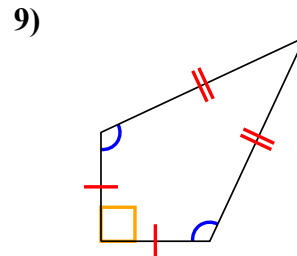
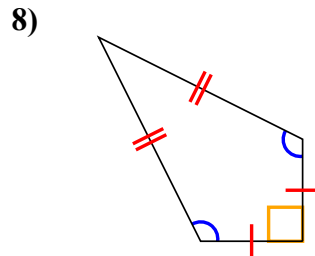
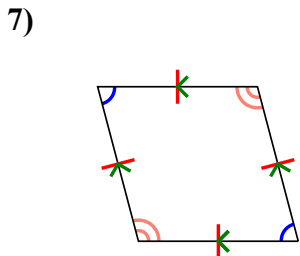
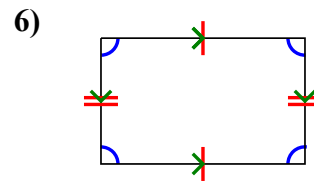
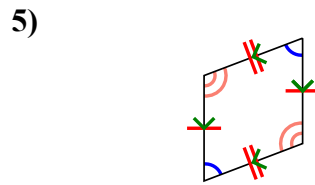
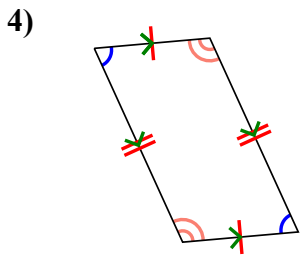
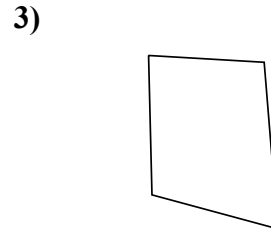
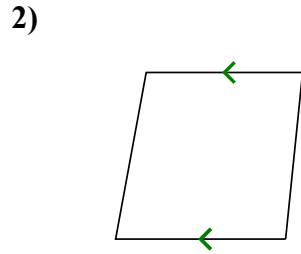
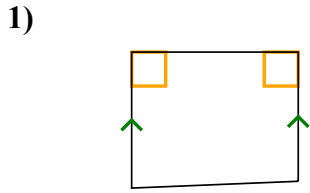


1. _____
2. _____
3. _____
4. _____
5. _____
6. _____
7. _____
8. _____
9. _____
10. _____
11. _____
12. _____



Xác định xem hình thể hiện có phải là hình tam giác Q , hình chữ nhật K , hình tam giác T , hình bình hành P , hình thoi R h , hình chữ nhật R hay hình chữ nhật S (có thể nhiều hơn một).

Câu trả lời



1. Q,T

2. Q,T

3. Q

4. Q,P

5. Q,P

6. Q,P

7. Q,P,H

8. Q,K

9. Q,K

10. Q,P,H,R,S

11. Q,P

12. Q