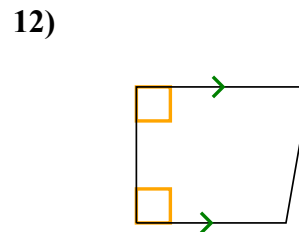
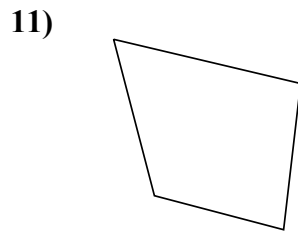
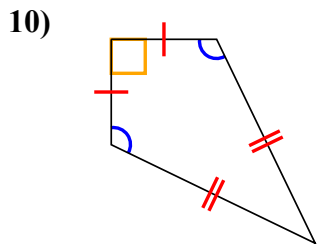
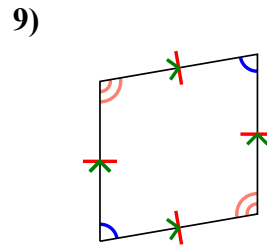
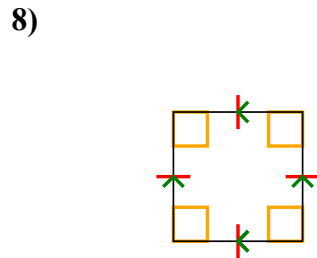
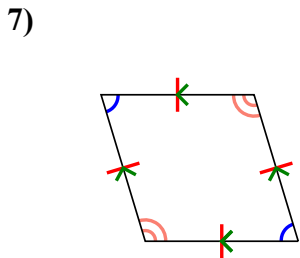
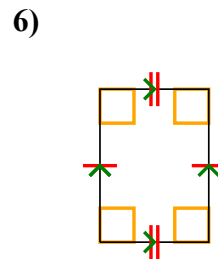
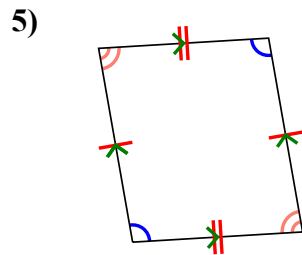
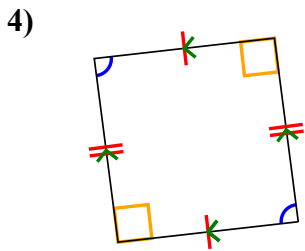
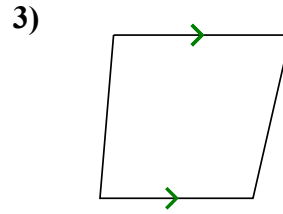
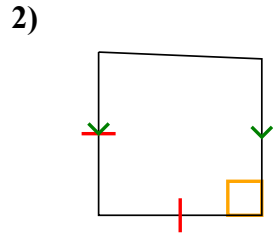
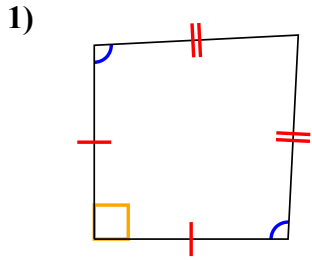




Xác định xem hình thể hiện có phải là hình tam giác Q, hình chữ nhật K, hình tam giác T, hình bình hành P, hình thoi R h, hình chữ nhật R hay hình chữ nhật S (có thể nhiều hơn một).

**Câu trả lời**

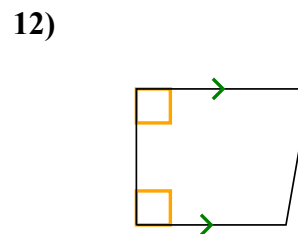
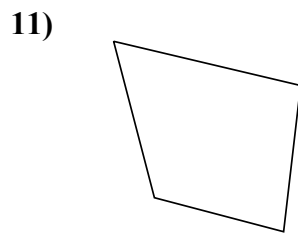
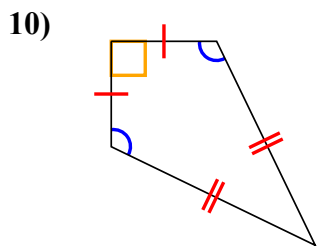
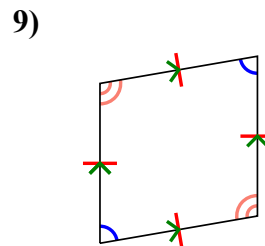
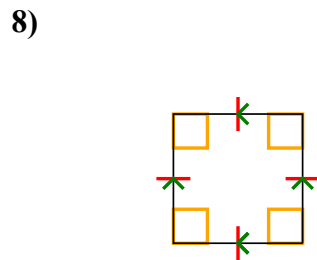
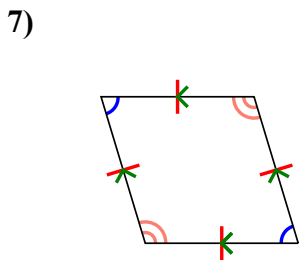
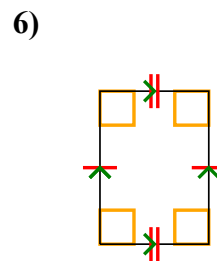
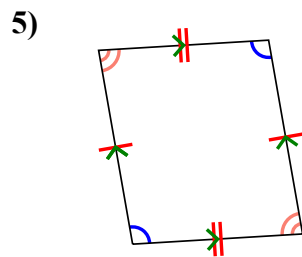
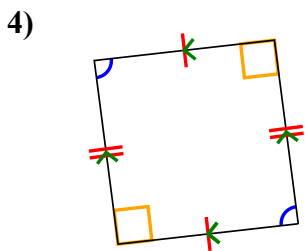
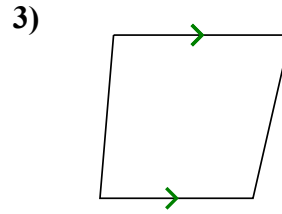
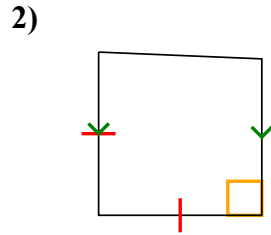
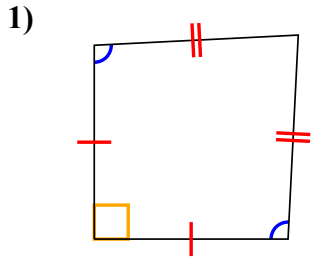


1. \_\_\_\_\_
2. \_\_\_\_\_
3. \_\_\_\_\_
4. \_\_\_\_\_
5. \_\_\_\_\_
6. \_\_\_\_\_
7. \_\_\_\_\_
8. \_\_\_\_\_
9. \_\_\_\_\_
10. \_\_\_\_\_
11. \_\_\_\_\_
12. \_\_\_\_\_



Xác định xem hình thể hiện có phải là hình tam giác Q , hình chữ nhật K , hình tam giác T , hình bình hành P , hình thoi R h , hình chữ nhật R hay hình chữ nhật S (có thể nhiều hơn một).

**Câu trả lời**



1. Q,K

2. Q,T

3. Q,T

4. Q,P

5. Q,P

6. Q,P,R

7. Q,P,H

8. Q,P,H,R,S

9. Q,P,H

10. Q,K

11. Q

12. Q,T