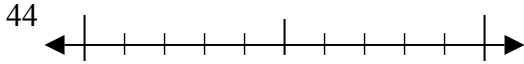




Sử dụng các trực số để làm tròn mỗi số tới số chẵn chục gần nhất.

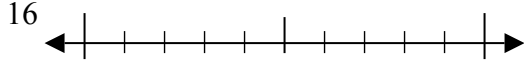
**Câu trả lời**

Vd)



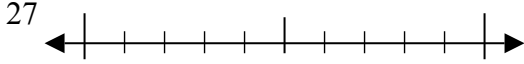
Vd. **40**

1)



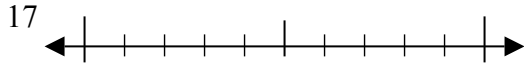
1. \_\_\_\_\_

2)



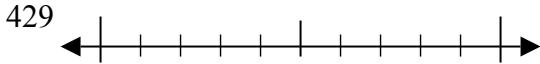
2. \_\_\_\_\_

3)



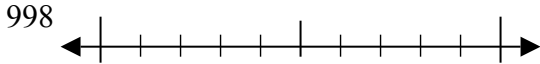
3. \_\_\_\_\_

4)



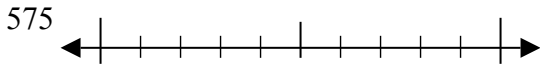
4. \_\_\_\_\_

5)



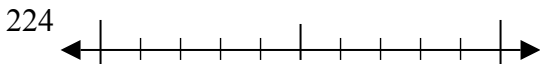
5. \_\_\_\_\_

6)



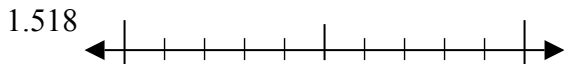
6. \_\_\_\_\_

7)



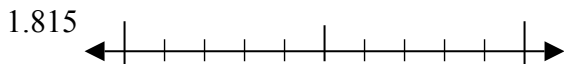
7. \_\_\_\_\_

8)



8. \_\_\_\_\_

9)



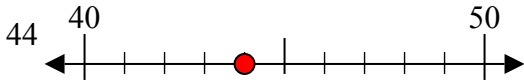
9. \_\_\_\_\_



Sử dụng các trực số để làm tròn mỗi số tới số chẵn chục gần nhất.

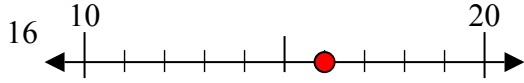
**Câu trả lời**

Vd)



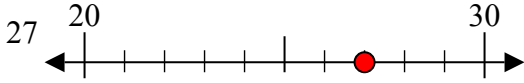
Vd. 40

1)



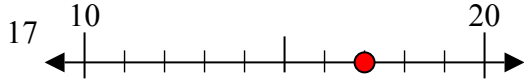
1. 20

2)



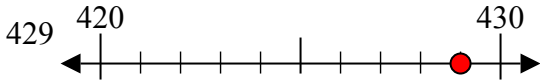
2. 30

3)



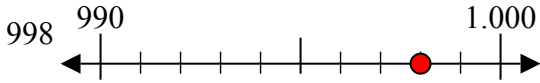
3. 20

4)



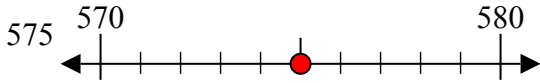
4. 430

5)



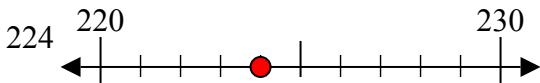
5. 1000

6)



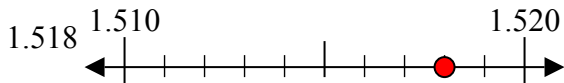
6. 580

7)



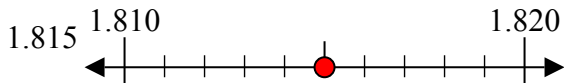
7. 220

8)



8. 1520

9)



9. 1820