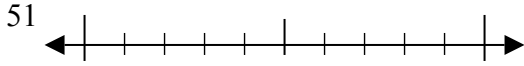




Sử dụng các trực số để làm tròn mỗi số tới số chẵn chục gần nhất.

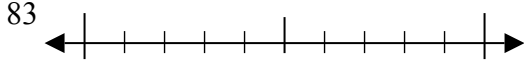
**Câu trả lời**

Vd)



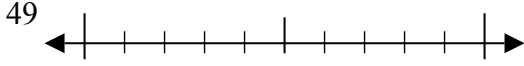
Vd. **50**

1)



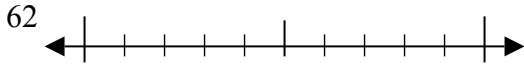
1. \_\_\_\_\_

2)



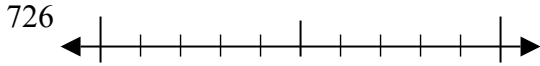
2. \_\_\_\_\_

3)



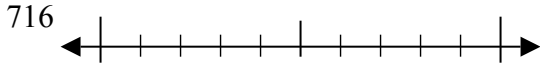
3. \_\_\_\_\_

4)



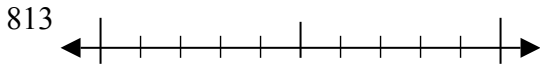
4. \_\_\_\_\_

5)



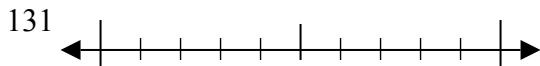
5. \_\_\_\_\_

6)



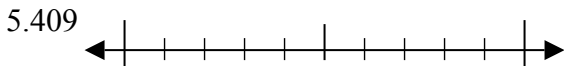
6. \_\_\_\_\_

7)



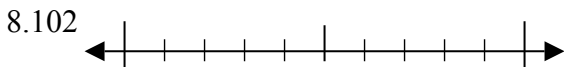
7. \_\_\_\_\_

8)



8. \_\_\_\_\_

9)



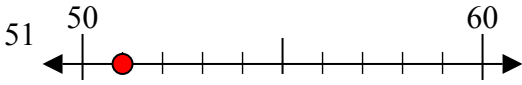
9. \_\_\_\_\_



Sử dụng các trực số để làm tròn mỗi số tới số chẵn chục gần nhất.

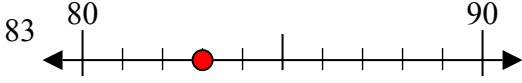
**Câu trả lời**

Vd)



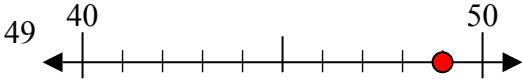
Vd. 50

1)



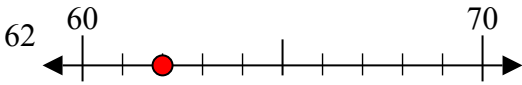
1. 80

2)



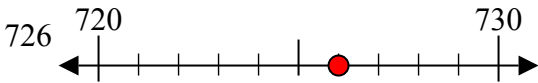
2. 50

3)



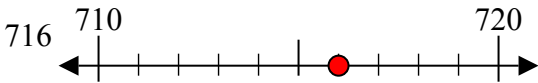
3. 60

4)



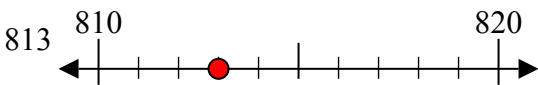
4. 730

5)



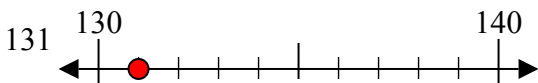
5. 720

6)



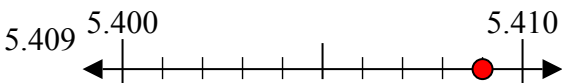
6. 810

7)



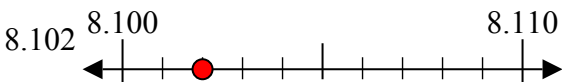
7. 130

8)



8. 5410

9)



9. 8100