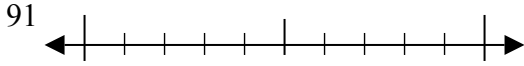




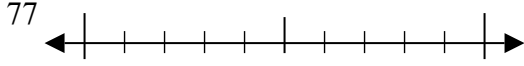
Sử dụng các trục số để làm tròn mỗi số tới số chẵn chục gần nhất.

**Câu trả lời**

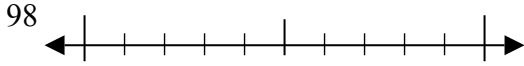
Vd)



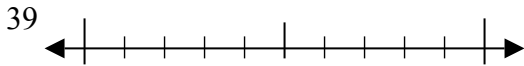
1)



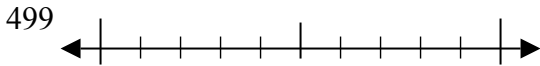
2)



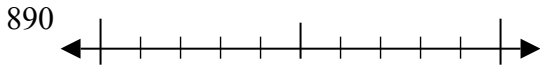
3)



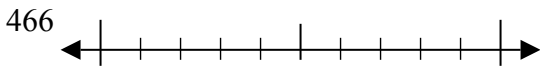
4)



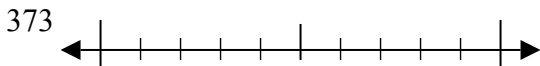
5)



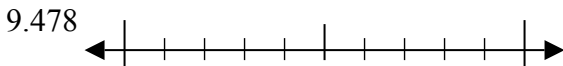
6)



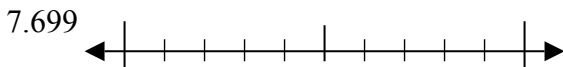
7)



8)



9)



Vd. **90**

1. \_\_\_\_\_

2. \_\_\_\_\_

3. \_\_\_\_\_

4. \_\_\_\_\_

5. \_\_\_\_\_

6. \_\_\_\_\_

7. \_\_\_\_\_

8. \_\_\_\_\_

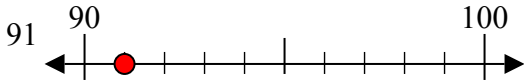
9. \_\_\_\_\_



Sử dụng các trực số để làm tròn mỗi số tới số chẵn chục gần nhất.

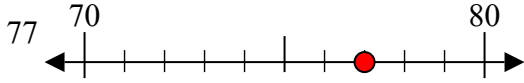
**Câu trả lời**

Vd)



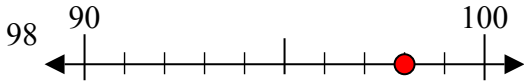
Vd. 90

1)



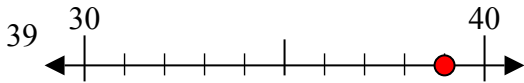
1. 80

2)



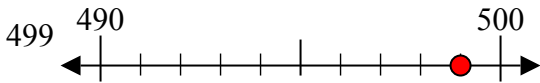
2. 100

3)



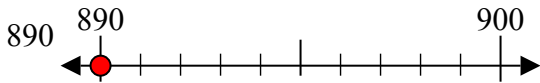
3. 40

4)



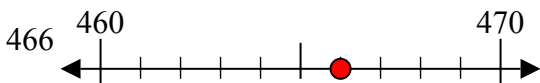
4. 500

5)



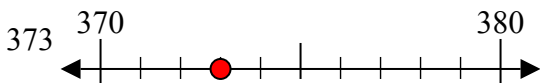
5. 890

6)



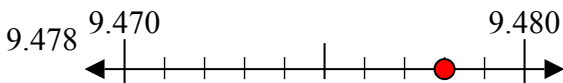
6. 470

7)



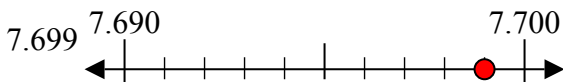
7. 370

8)



8. 9480

9)



9. 7700