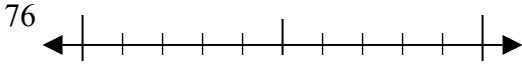




Sử dụng các trực số để làm tròn mỗi số tới số chẵn chục gần nhất.

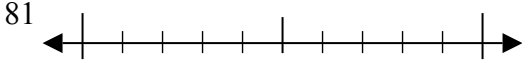
Câu trả lời

Vd)



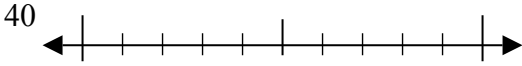
Vd. **80**

1)



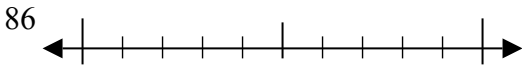
1. _____

2)



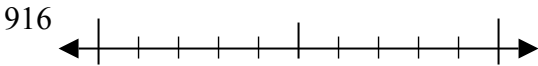
2. _____

3)



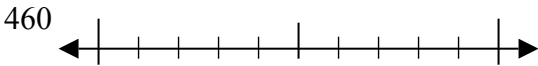
3. _____

4)



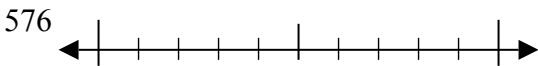
4. _____

5)



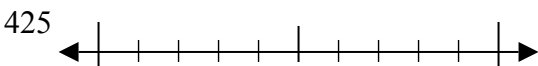
5. _____

6)



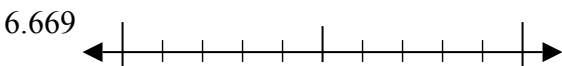
6. _____

7)



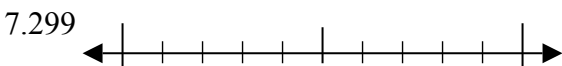
7. _____

8)



8. _____

9)



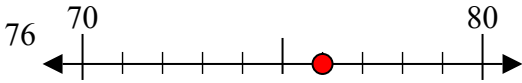
9. _____



Sử dụng các trực số để làm tròn mỗi số tới số chẵn chục gần nhất.

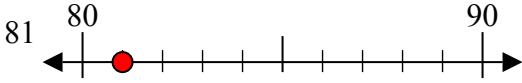
Câu trả lời

Vd)



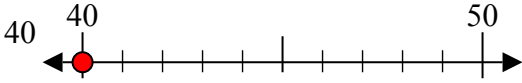
Vd. 80

1)



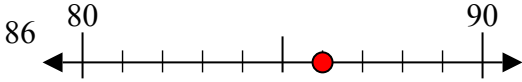
1. 80

2)



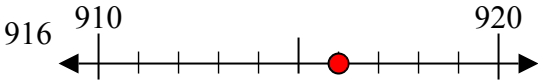
2. 40

3)



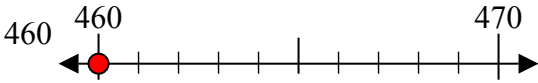
3. 90

4)



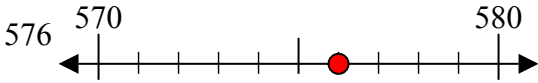
4. 920

5)



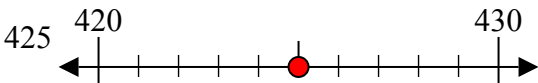
5. 460

6)



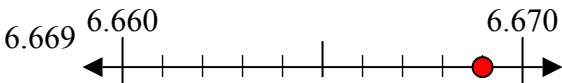
6. 580

7)



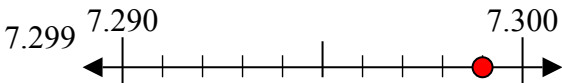
7. 430

8)



8. 6670

9)



9. 7300