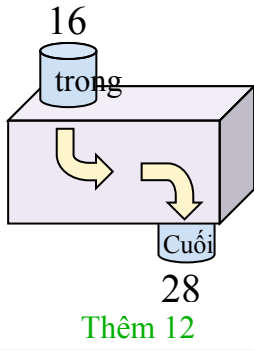




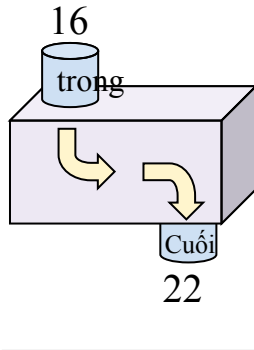
Xác định quy tắc của hàm số.

Câu trả lời

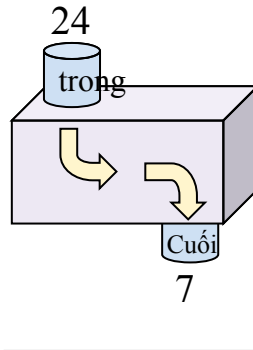
Vd)



1)



2)



Vd.

Thêm 12

1.

2.

3.

4.

5.

6.

7.

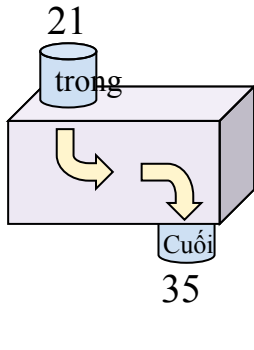
8.

9.

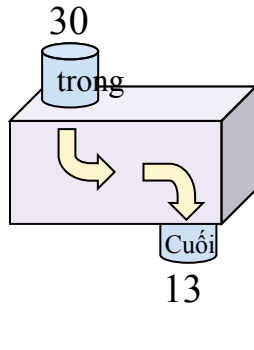
10.

11.

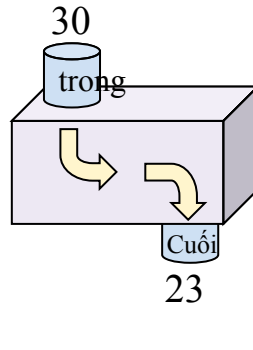
3)



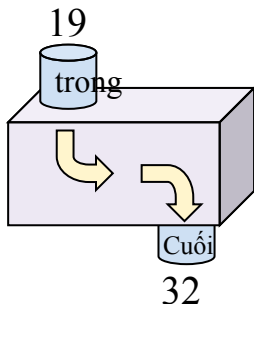
4)



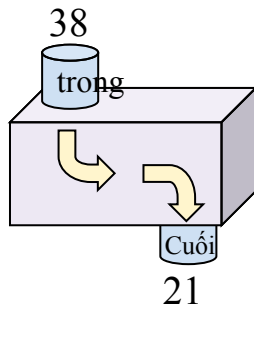
5)



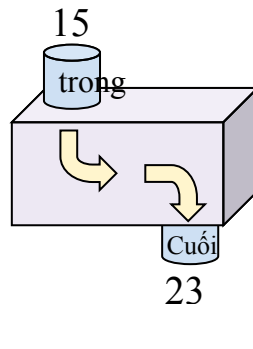
6)



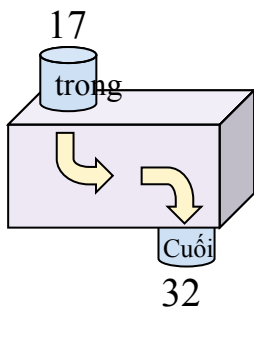
7)



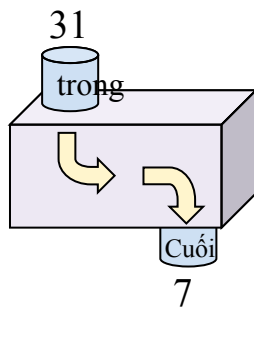
8)



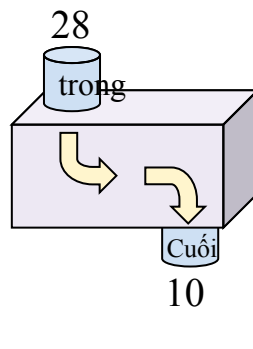
9)



10)



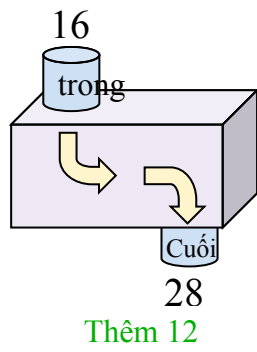
11)



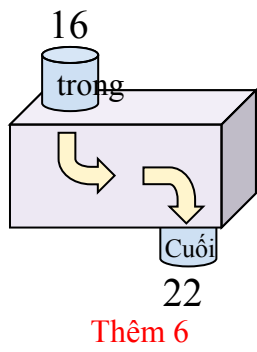


Xác định quy tắc của hàm số.

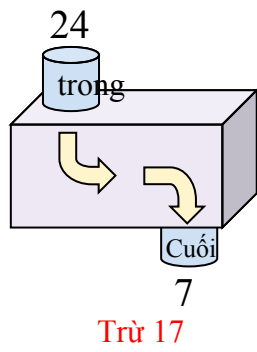
Vd)



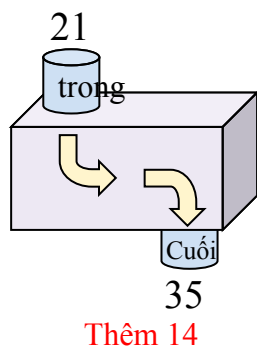
1)



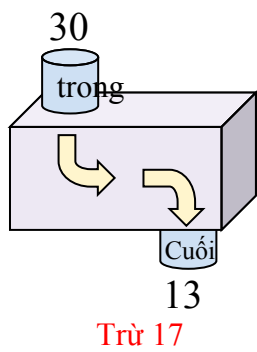
2)



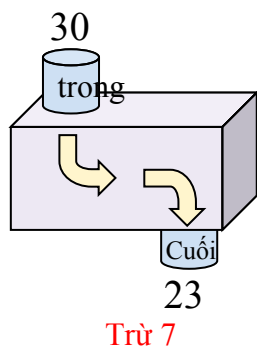
3)



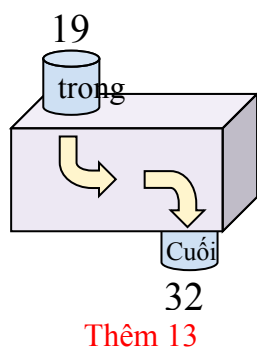
4)



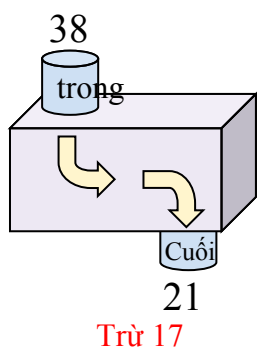
5)



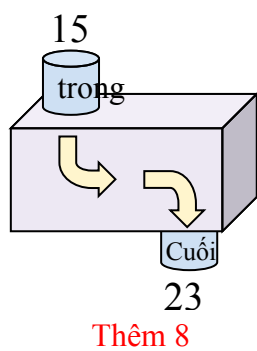
6)



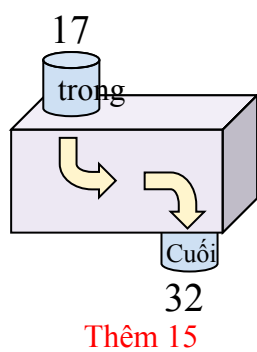
7)



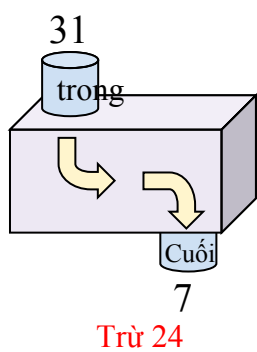
8)



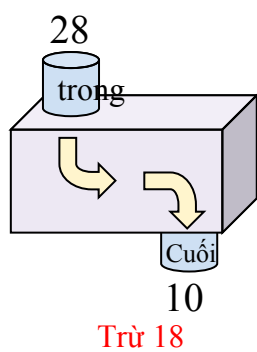
9)



10)



11)



Câu trả lời

Vd.

Thêm 12

1.

Thêm 6

2.

Trừ 17

3.

Thêm 14

4.

Trừ 17

5.

Trừ 7

6.

Thêm 13

7.

Trừ 17

8.

Thêm 8

9.

Thêm 15

10.

Trừ 24

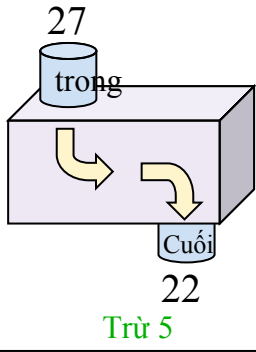
11.

Trừ 18

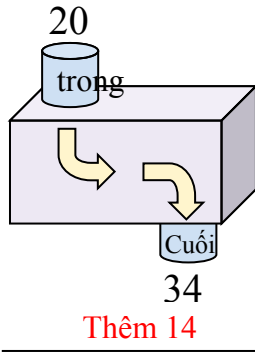


Xác định quy tắc của hàm số.

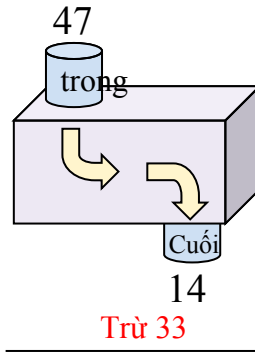
Vd)



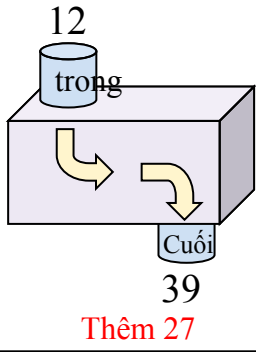
1)



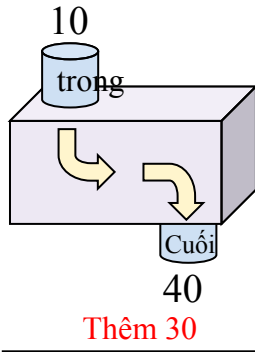
2)



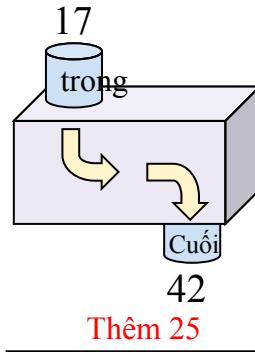
3)



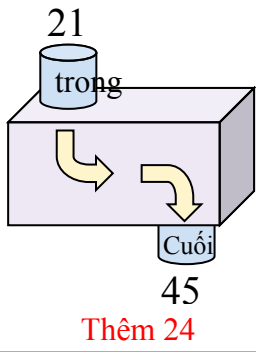
4)



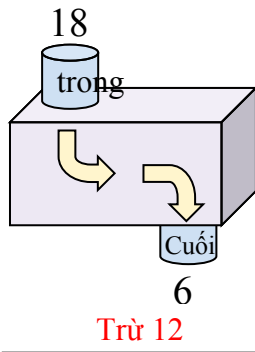
5)



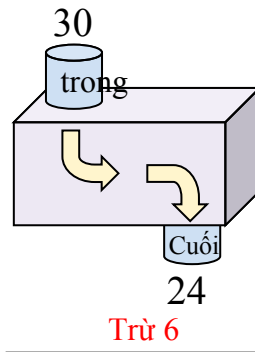
6)



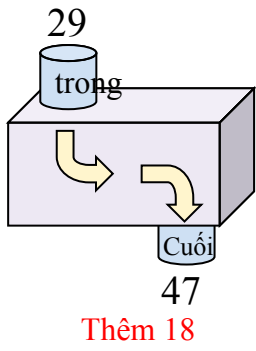
7)



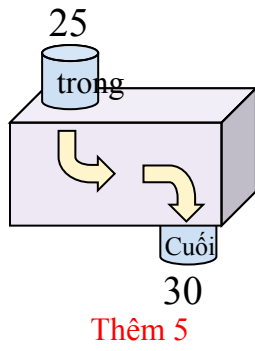
8)



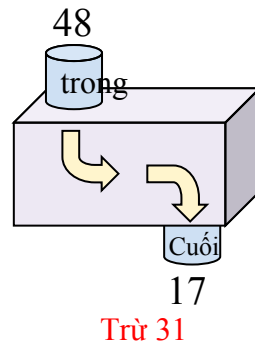
9)



10)



11)



Câu trả lời

Vd. **Trừ 5**

1. **Thêm 14**

2. **Trừ 33**

3. **Thêm 27**

4. **Thêm 30**

5. **Thêm 25**

6. **Thêm 24**

7. **Trừ 12**

8. **Trừ 6**

9. **Thêm 18**

10. **Thêm 5**

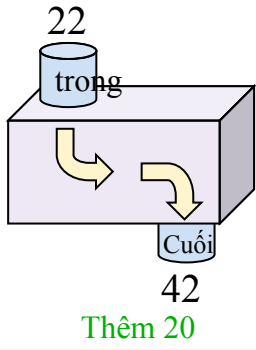
11. **Trừ 31**



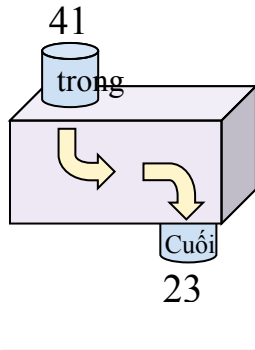
Xác định quy tắc của hàm số.

Câu trả lời

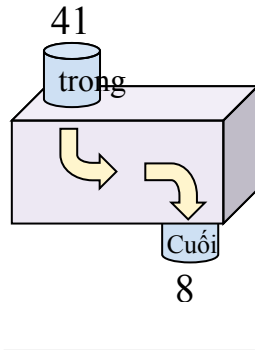
Vd)



1)



2)



Vd.

Thêm 20

1.

2.

3.

4.

5.

6.

7.

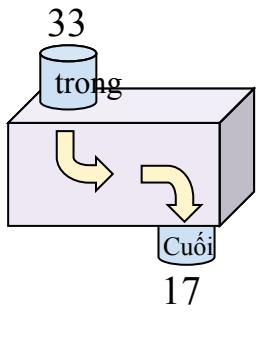
8.

9.

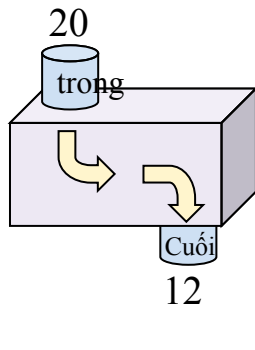
10.

11.

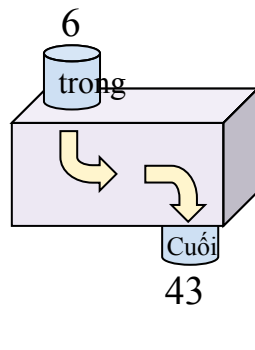
3)



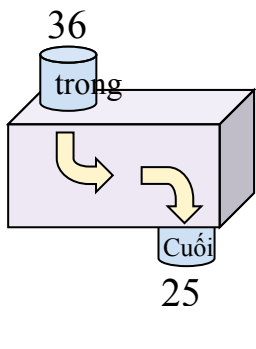
4)



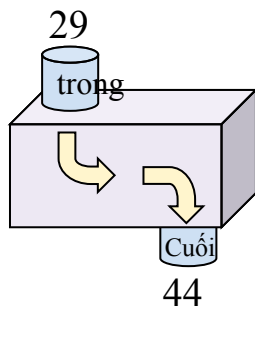
5)



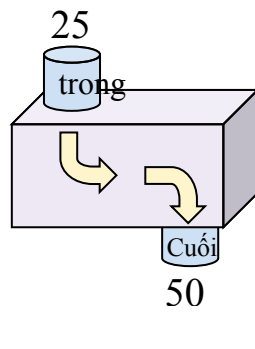
6)



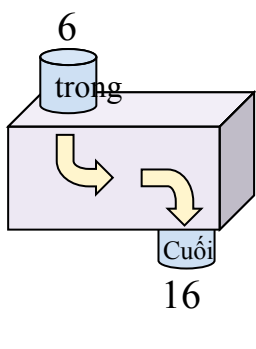
7)



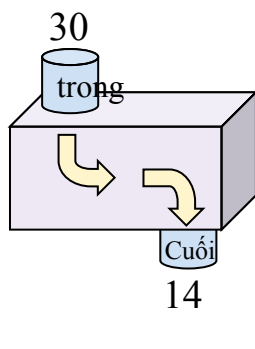
8)



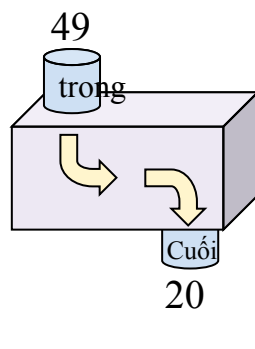
9)



10)



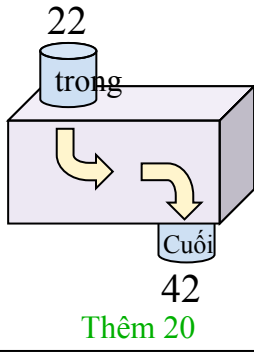
11)



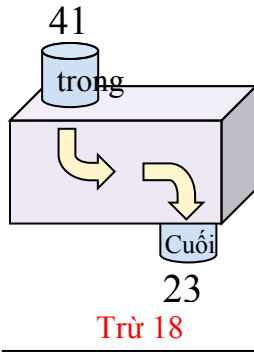


Xác định quy tắc của hàm số.

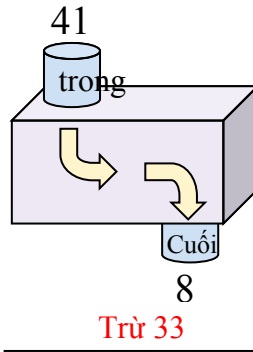
Vd)



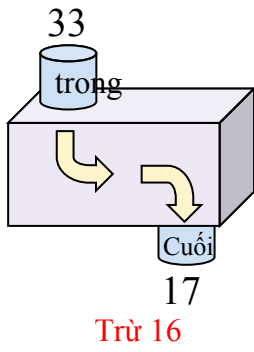
1)



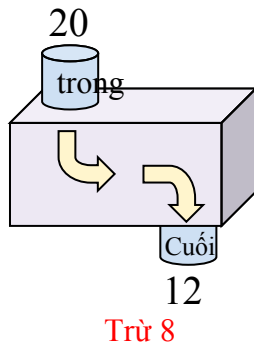
2)



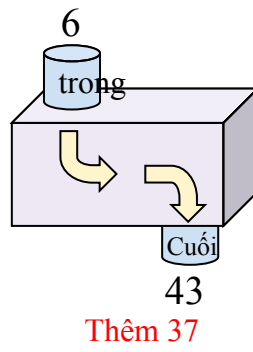
3)



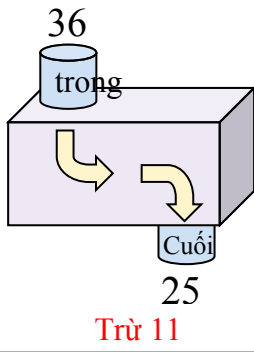
4)



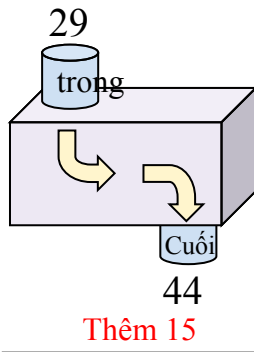
5)



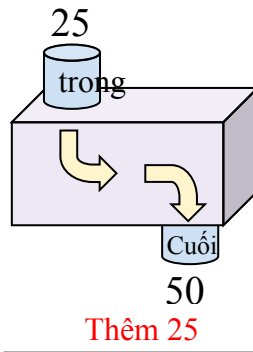
6)



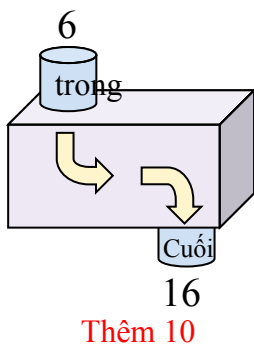
7)



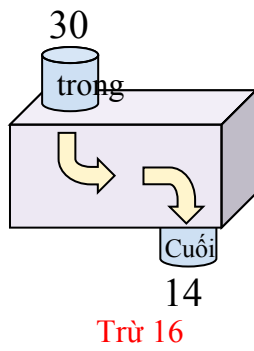
8)



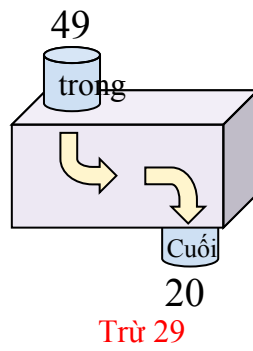
9)



10)



11)



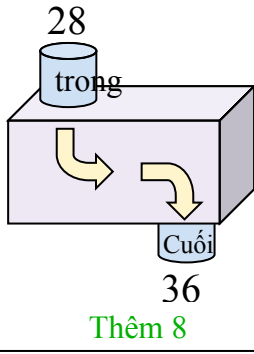
Câu trả lời

- Vd. **Thêm 20**
1. **Trừ 18**
2. **Trừ 33**
3. **Trừ 16**
4. **Trừ 8**
5. **Thêm 37**
6. **Trừ 11**
7. **Thêm 15**
8. **Thêm 25**
9. **Thêm 10**
10. **Trừ 16**
11. **Trừ 29**

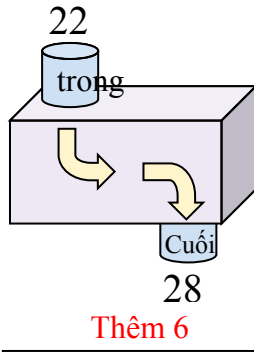


Xác định quy tắc của hàm số.

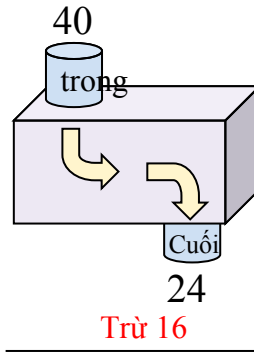
Vd)



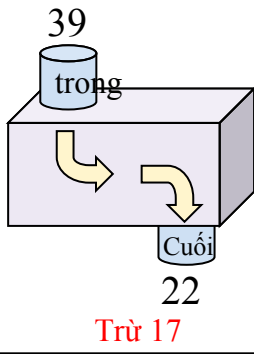
1)



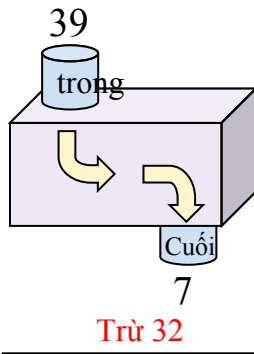
2)



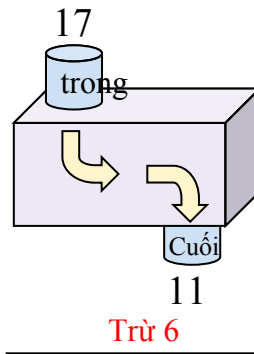
3)



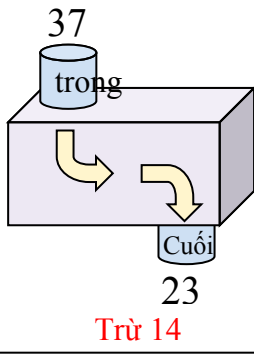
4)



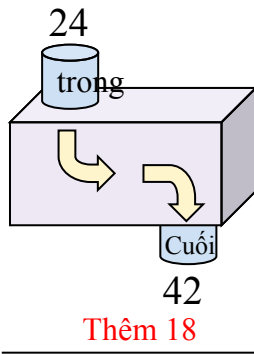
5)



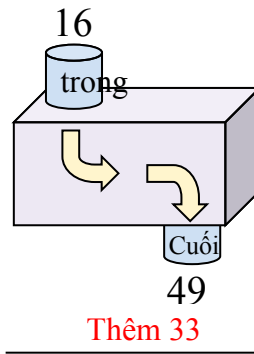
6)



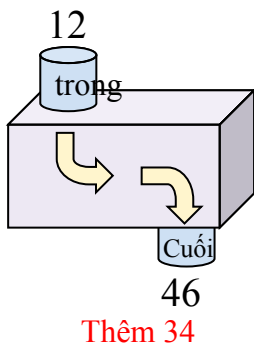
7)



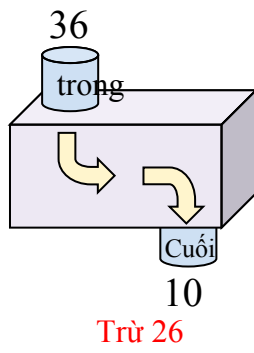
8)



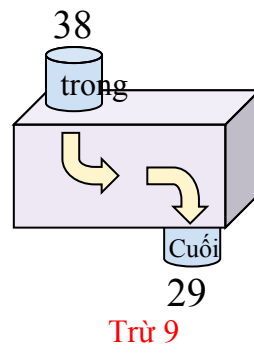
9)



10)



11)



Câu trả lời

Vd. **Thêm 8**

1. **Thêm 6**

2. **Trừ 16**

3. **Trừ 17**

4. **Trừ 32**

5. **Trừ 6**

6. **Trừ 14**

7. **Thêm 18**

8. **Thêm 33**

9. **Thêm 34**

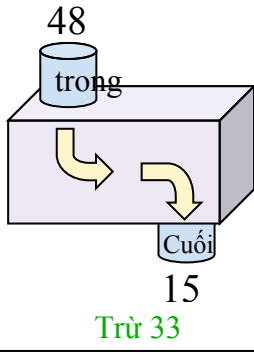
10. **Trừ 26**

11. **Trừ 9**

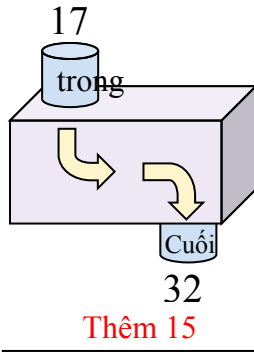


Xác định quy tắc của hàm số.

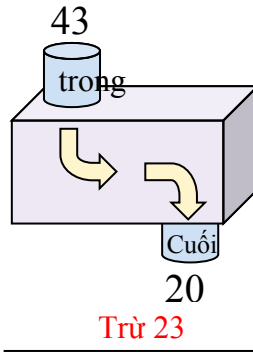
Vd)



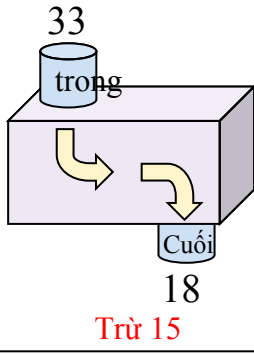
1)



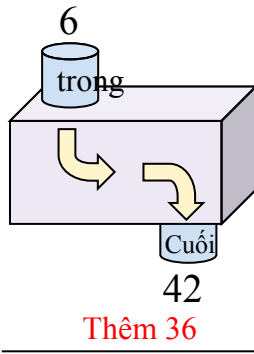
2)



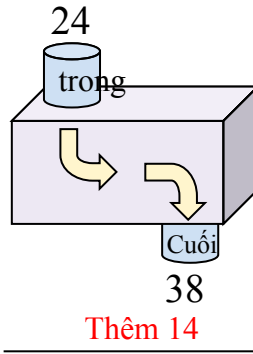
3)



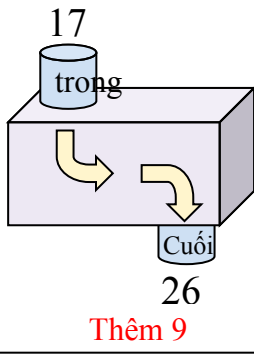
4)



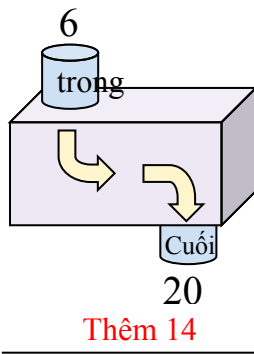
5)



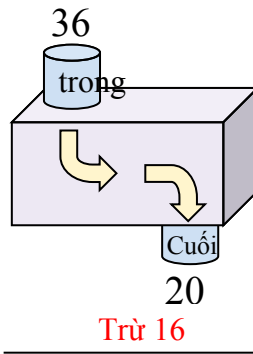
6)



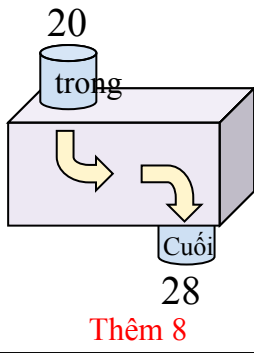
7)



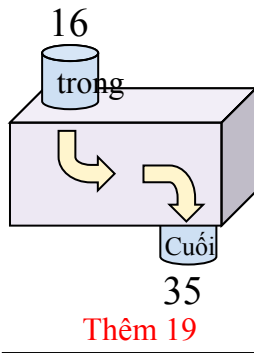
8)



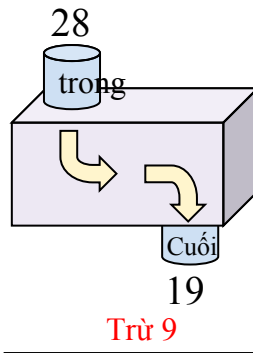
9)



10)



11)



Câu trả lời

Vd. **Trừ 33**

1. **Thêm 15**

2. **Trừ 23**

3. **Trừ 15**

4. **Thêm 36**

5. **Thêm 14**

6. **Thêm 9**

7. **Thêm 14**

8. **Trừ 16**

9. **Thêm 8**

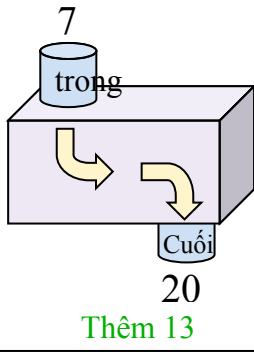
10. **Thêm 19**

11. **Trừ 9**

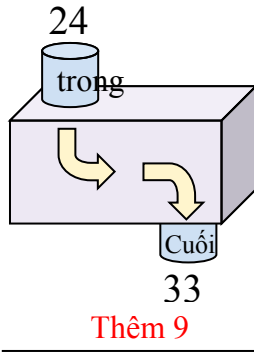


Xác định quy tắc của hàm số.

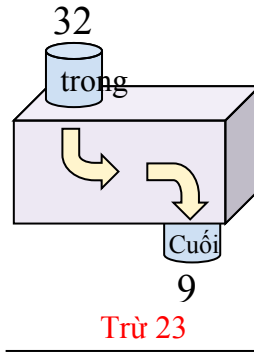
Vd)



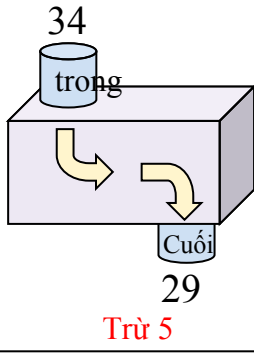
1)



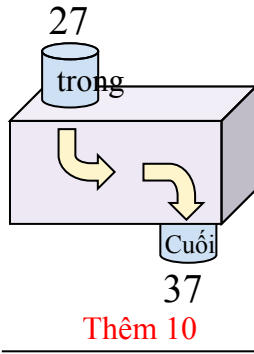
2)



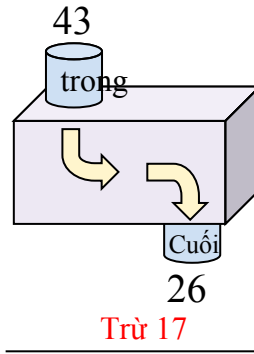
3)



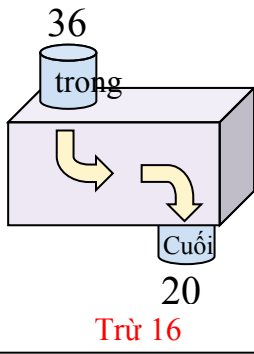
4)



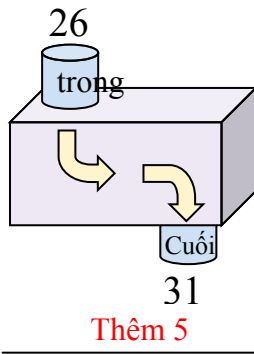
5)



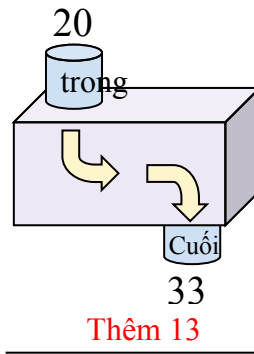
6)



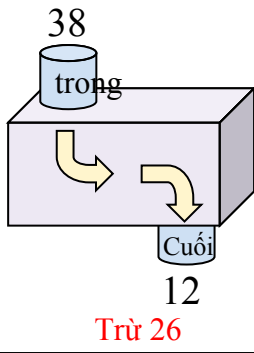
7)



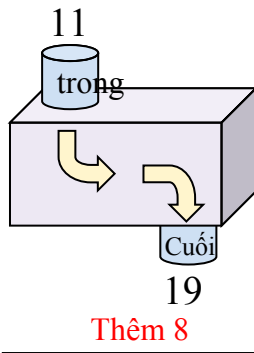
8)



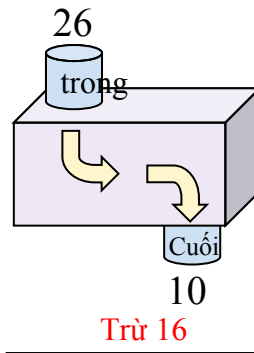
9)



10)



11)



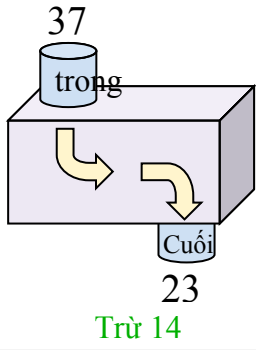
Câu trả lời

- Vd. **Thêm 13**
1. **Thêm 9**
2. **Trừ 23**
3. **Trừ 5**
4. **Thêm 10**
5. **Trừ 17**
6. **Trừ 16**
7. **Thêm 5**
8. **Thêm 13**
9. **Trừ 26**
10. **Thêm 8**
11. **Trừ 16**

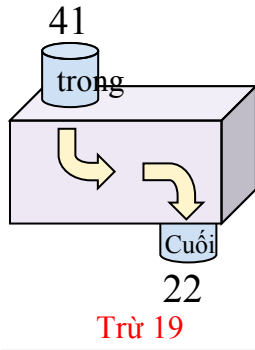


Xác định quy tắc của hàm số.

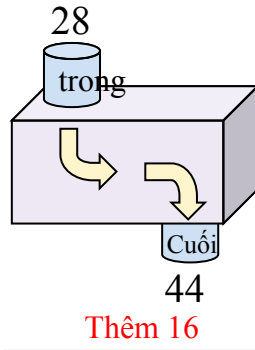
Vd)



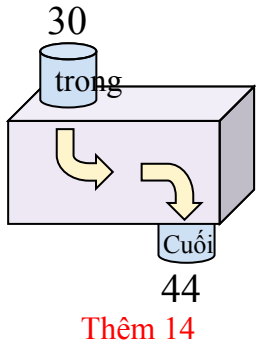
1)



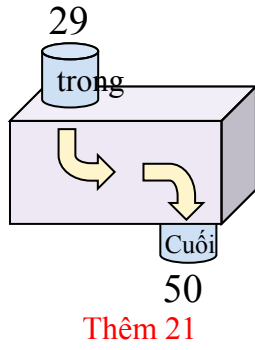
2)



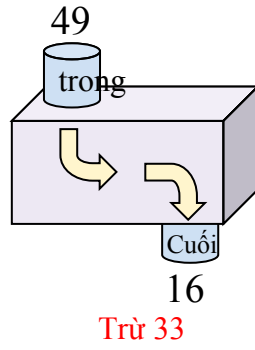
3)



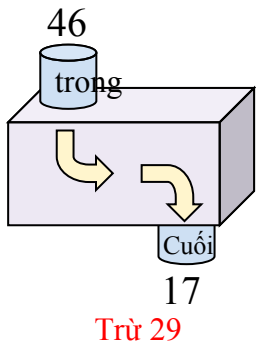
4)



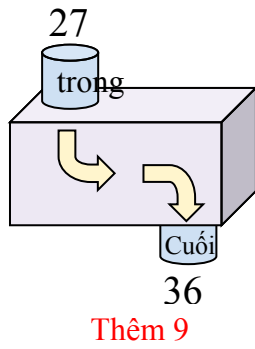
5)



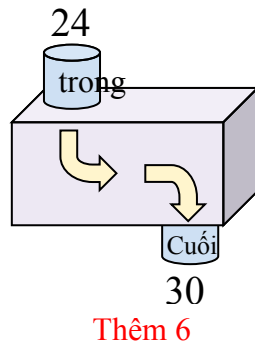
6)



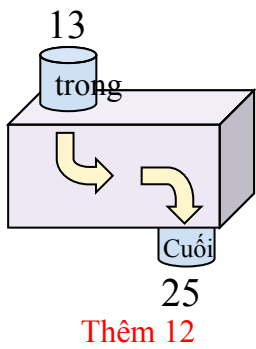
7)



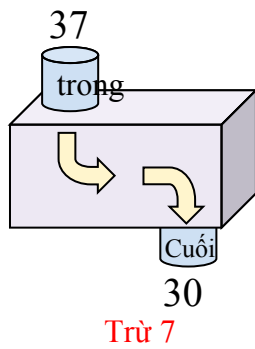
8)



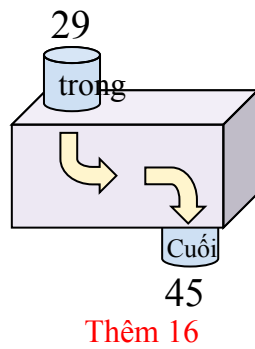
9)



10)



11)



Câu trả lời

Vd. **Trừ 14**

1. **Trừ 19**

2. **Thêm 16**

3. **Thêm 14**

4. **Thêm 21**

5. **Trừ 33**

6. **Trừ 29**

7. **Thêm 9**

8. **Thêm 6**

9. **Thêm 12**

10. **Trừ 7**

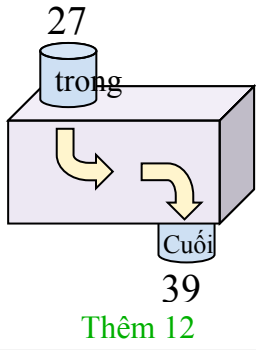
11. **Thêm 16**



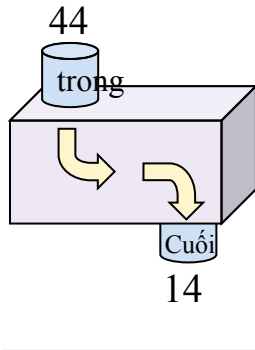
Xác định quy tắc của hàm số.

Câu trả lời

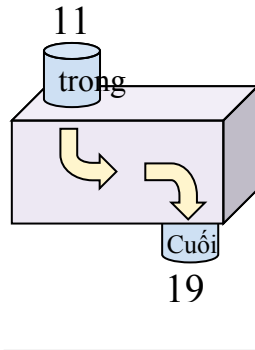
Vd)



1)



2)



Vd.

Thêm 12

1.

2.

3.

4.

5.

6.

7.

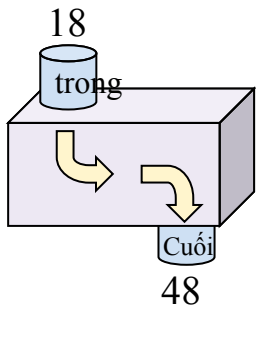
8.

9.

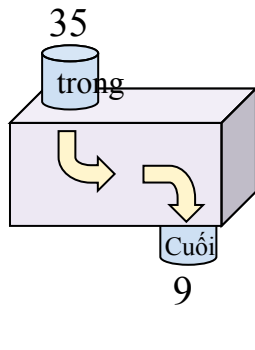
10.

11.

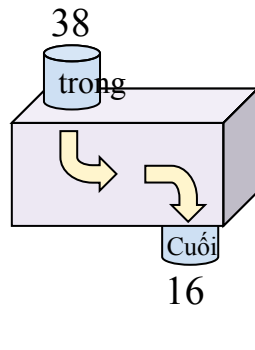
3)



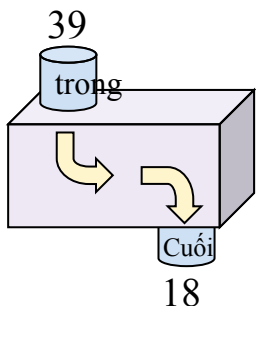
4)



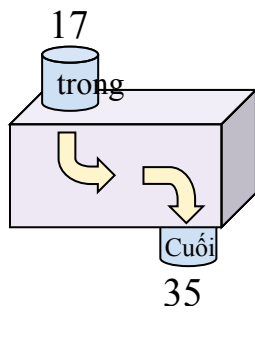
5)



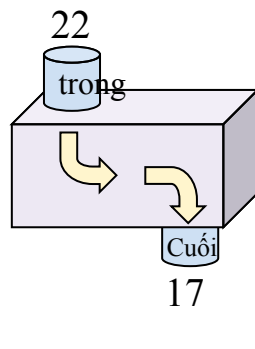
6)



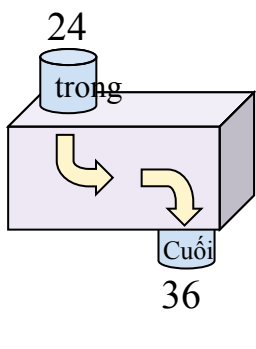
7)



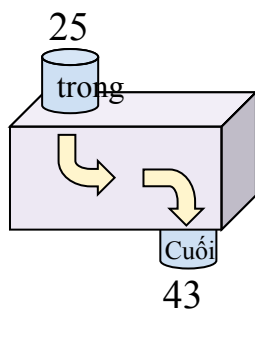
8)



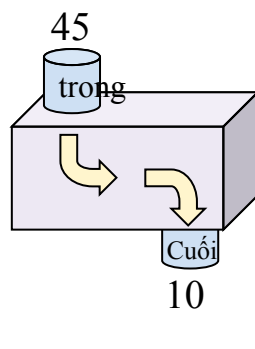
9)



10)



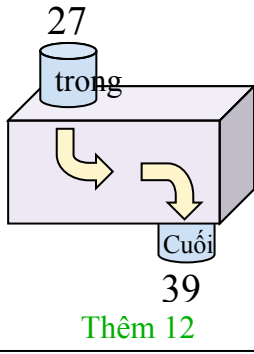
11)



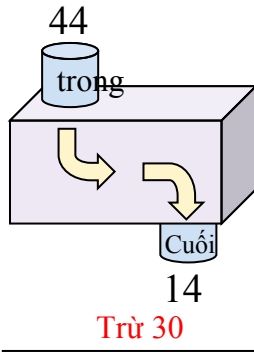


Xác định quy tắc của hàm số.

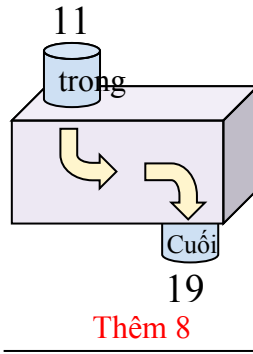
Vd)



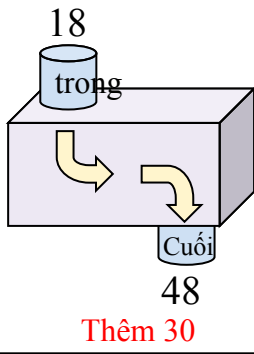
1)



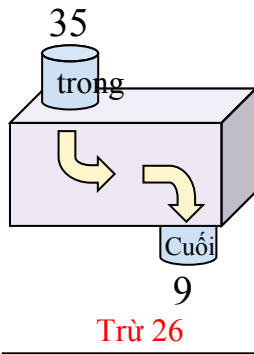
2)



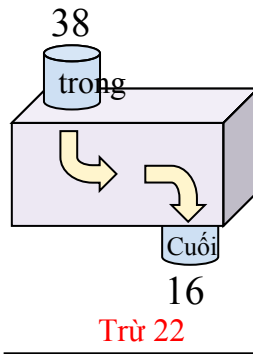
3)



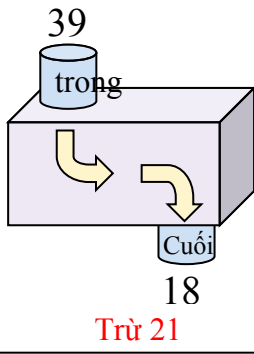
4)



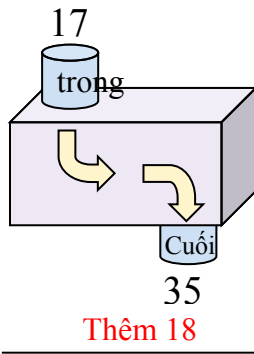
5)



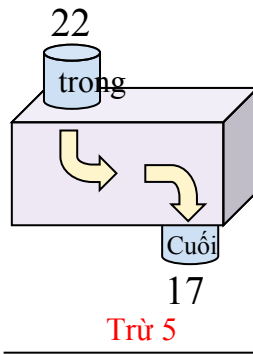
6)



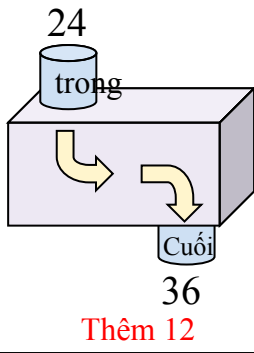
7)



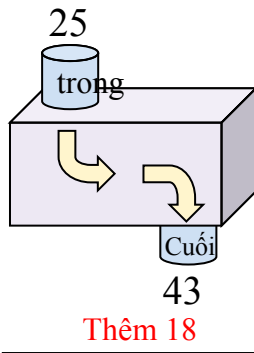
8)



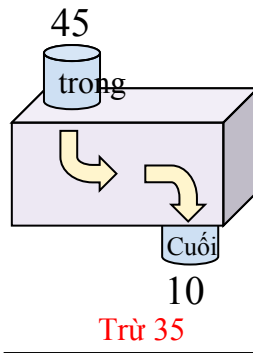
9)



10)



11)



Câu trả lời

Vd. **Thêm 12**

1. **Trừ 30**

2. **Thêm 8**

3. **Thêm 30**

4. **Trừ 26**

5. **Trừ 22**

6. **Trừ 21**

7. **Thêm 18**

8. **Trừ 5**

9. **Thêm 12**

10. **Thêm 18**

11. **Trừ 35**

