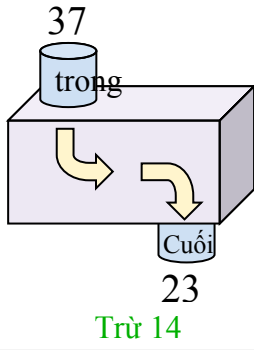


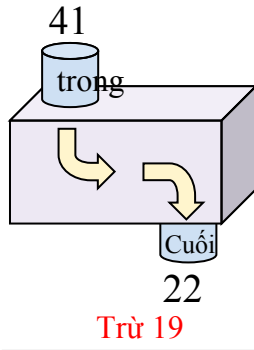


Xác định quy tắc của hàm số.

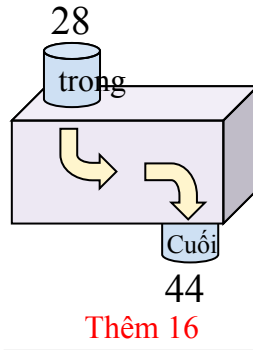
Vd)



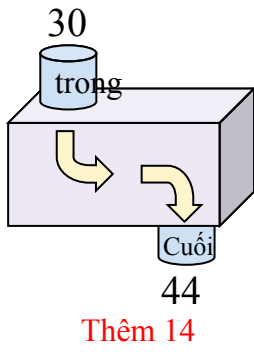
1)



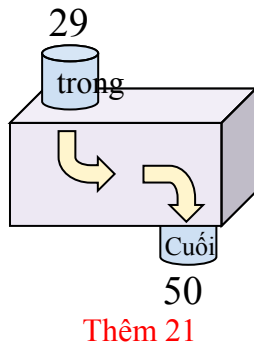
2)



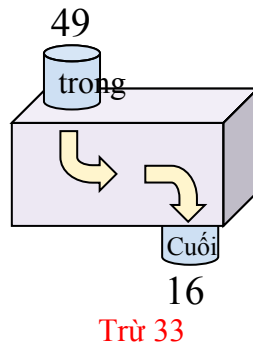
3)



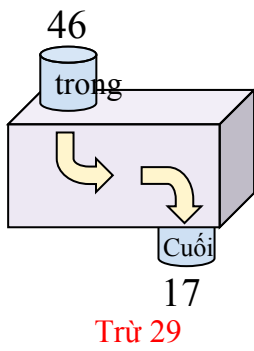
4)



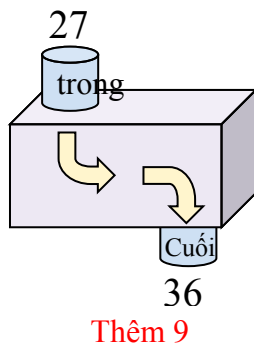
5)



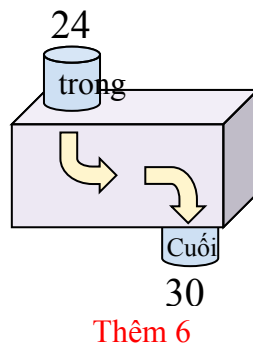
6)



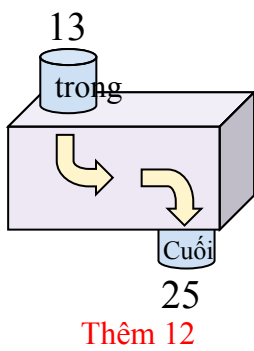
7)



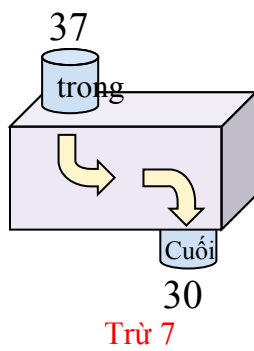
8)



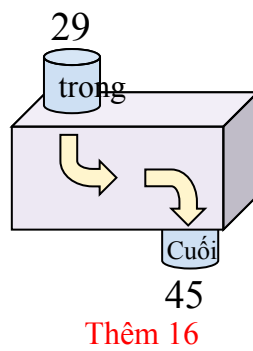
9)



10)



11)



Câu trả lời

Vd. **Trừ 14**

1. **Trừ 19**

2. **Thêm 16**

3. **Thêm 14**

4. **Thêm 21**

5. **Trừ 33**

6. **Trừ 29**

7. **Thêm 9**

8. **Thêm 6**

9. **Thêm 12**

10. **Trừ 7**

11. **Thêm 16**