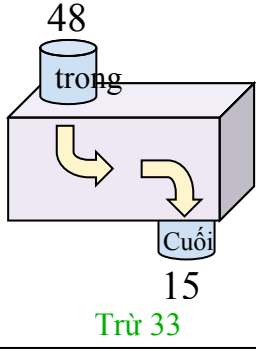




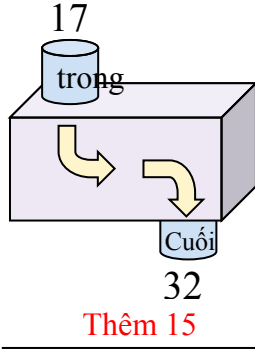


Xác định quy tắc của hàm số.

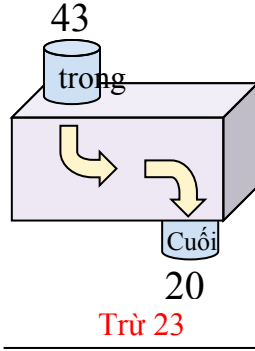
Vd)



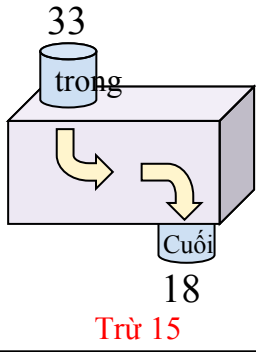
1)



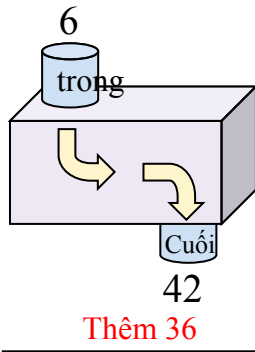
2)



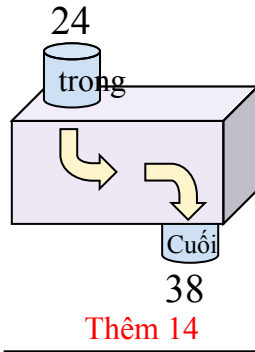
3)



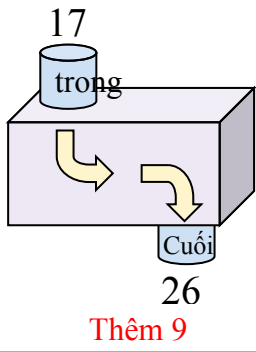
4)



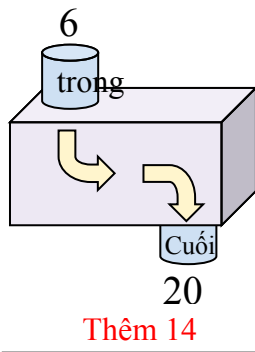
5)



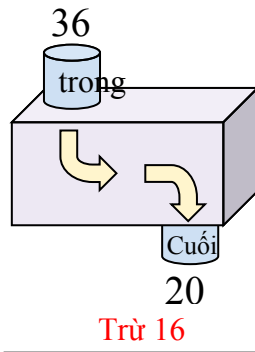
6)



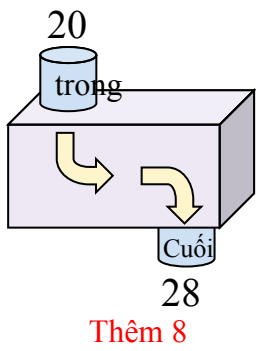
7)



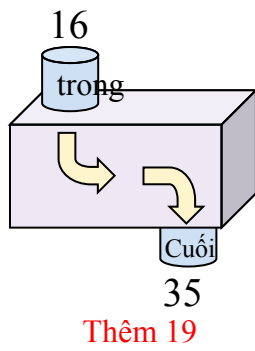
8)



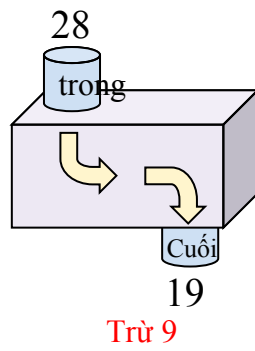
9)



10)



11)



**Câu trả lời**

Vd. **Trừ 33**

1. **Thêm 15**

2. **Trừ 23**

3. **Trừ 15**

4. **Thêm 36**

5. **Thêm 14**

6. **Thêm 9**

7. **Thêm 14**

8. **Trừ 16**

9. **Thêm 8**

10. **Thêm 19**

11. **Trừ 9**