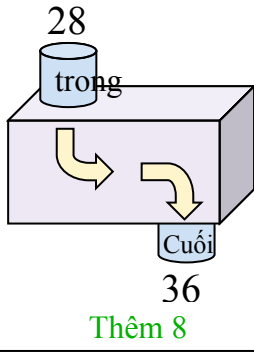


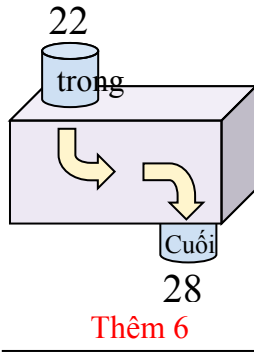


Xác định quy tắc của hàm số.

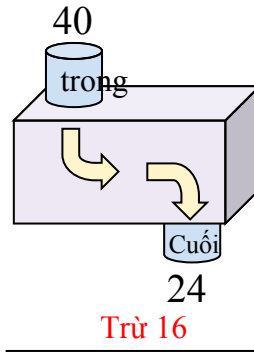
Vd)



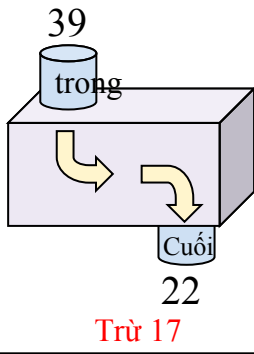
1)



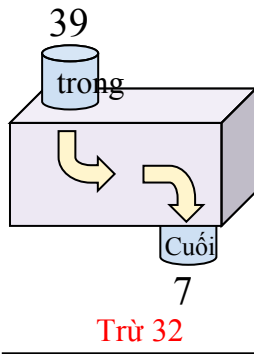
2)



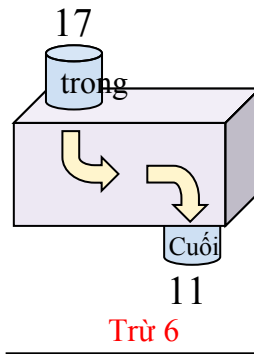
3)



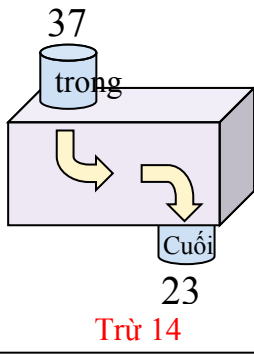
4)



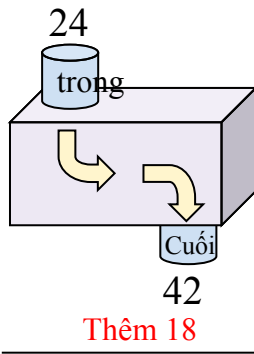
5)



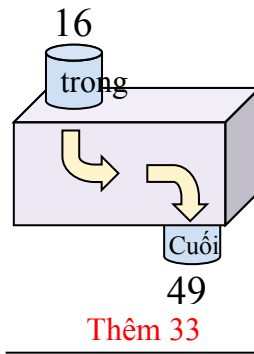
6)



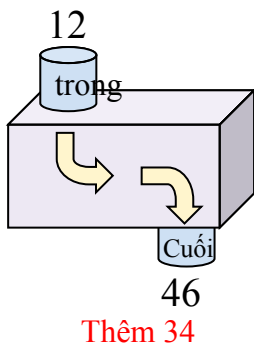
7)



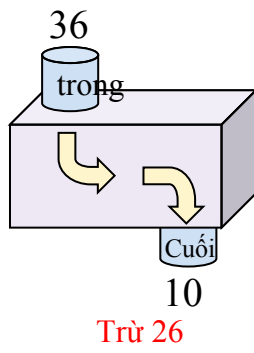
8)



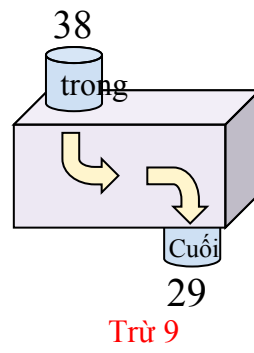
9)



10)



11)



Câu trả lời

Vd. **Thêm 8**

1. **Thêm 6**

2. **Trừ 16**

3. **Trừ 17**

4. **Trừ 32**

5. **Trừ 6**

6. **Trừ 14**

7. **Thêm 18**

8. **Thêm 33**

9. **Thêm 34**

10. **Trừ 26**

11. **Trừ 9**