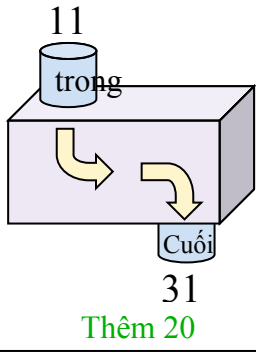


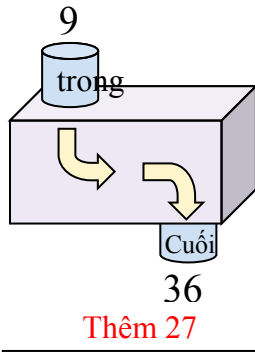


Xác định quy tắc của hàm số.

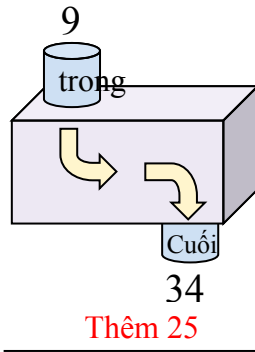
Vd)



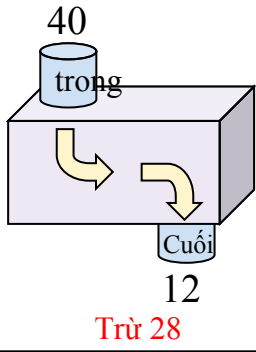
1)



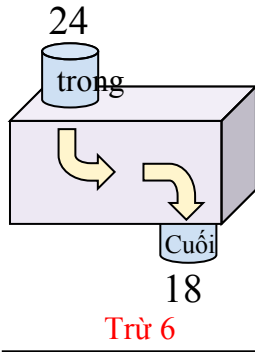
2)



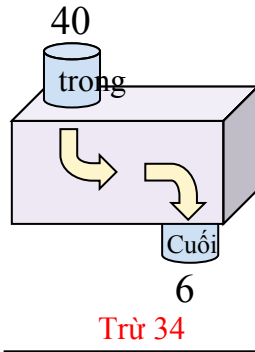
3)



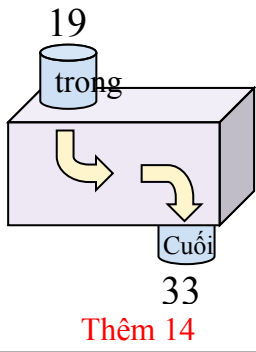
4)



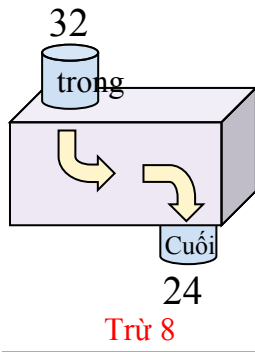
5)



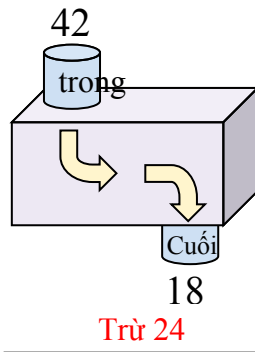
6)



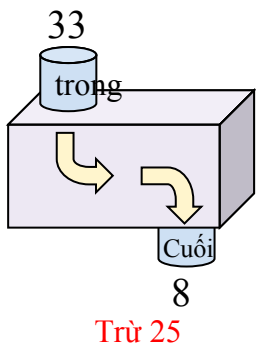
7)



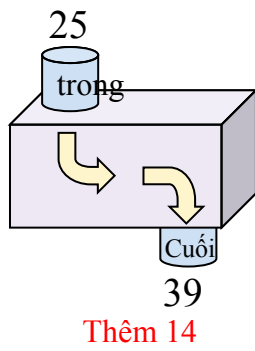
8)



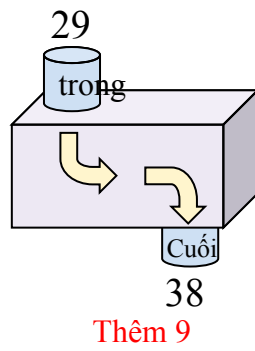
9)



10)



11)



Câu trả lời

Vd. **Thêm 20**

1. **Thêm 27**

2. **Thêm 25**

3. **Trừ 28**

4. **Trừ 6**

5. **Trừ 34**

6. **Thêm 14**

7. **Trừ 8**

8. **Trừ 24**

9. **Trừ 25**

10. **Thêm 14**

11. **Thêm 9**