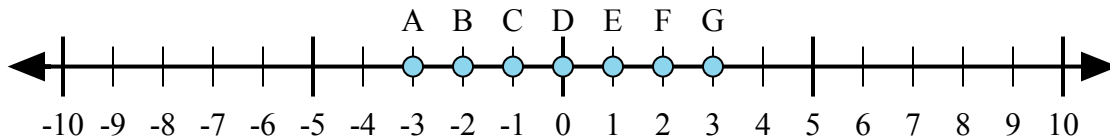




Xác định chữ cái nào trong dãy số thể hiện tốt nhất câu trả lời cho mỗi vấn đề.

**Câu trả lời**



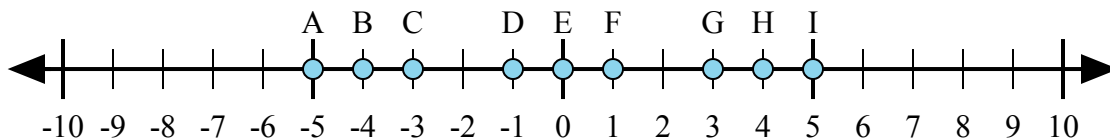
1)  $1 + 2 =$

2)  $(-1) + (-2) =$

3)  $(-2) + 1 =$

4)  $2 + (-1) =$

5)  $1 + (-2) =$



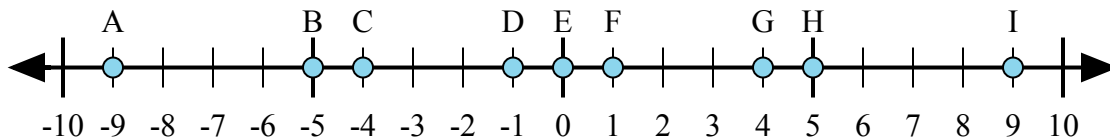
6)  $4 + (-1) =$

7)  $(-4) + (-1) =$

8)  $(-4) + 1 =$

9)  $(-1) + 4 =$

10)  $1 + (-4) =$



11)  $5 + (-4) =$

12)  $4 + (-5) =$

13)  $(-5) + 4 =$

14)  $5 + 4 =$

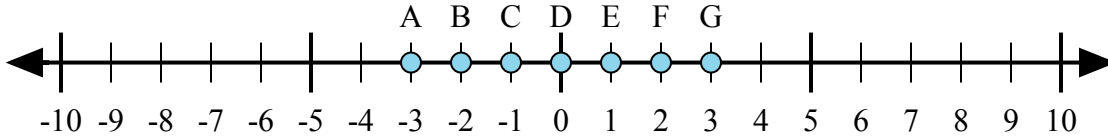
15)  $(-4) + 5 =$

1. \_\_\_\_\_
2. \_\_\_\_\_
3. \_\_\_\_\_
4. \_\_\_\_\_
5. \_\_\_\_\_
6. \_\_\_\_\_
7. \_\_\_\_\_
8. \_\_\_\_\_
9. \_\_\_\_\_
10. \_\_\_\_\_
11. \_\_\_\_\_
12. \_\_\_\_\_
13. \_\_\_\_\_
14. \_\_\_\_\_
15. \_\_\_\_\_

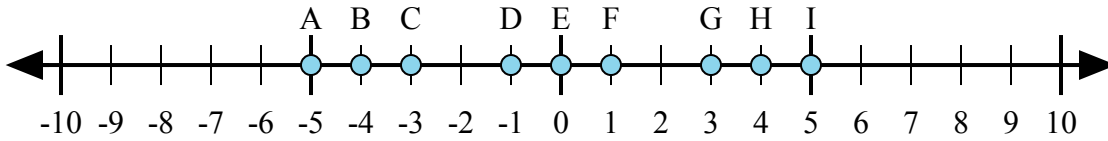


Xác định chữ cái nào trong dãy số thể hiện tốt nhất câu trả lời cho mỗi vấn đề.

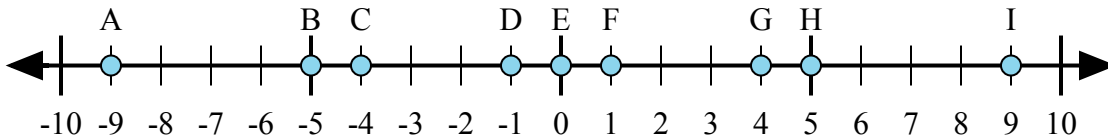
**Câu trả lời**



- 1)  $1 + 2 =$
- 2)  $(-1) + (-2) =$
- 3)  $(-2) + 1 =$
- 4)  $2 + (-1) =$
- 5)  $1 + (-2) =$



- 6)  $4 + (-1) =$
- 7)  $(-4) + (-1) =$
- 8)  $(-4) + 1 =$
- 9)  $(-1) + 4 =$
- 10)  $1 + (-4) =$



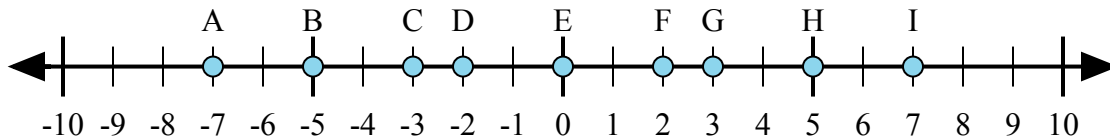
- 11)  $5 + (-4) =$
- 12)  $4 + (-5) =$
- 13)  $(-5) + 4 =$
- 14)  $5 + 4 =$
- 15)  $(-4) + 5 =$

1.           **G**
2.           **A**
3.           **C**
4.           **E**
5.           **C**
6.           **G**
7.           **A**
8.           **C**
9.           **G**
10.          **C**
11.           **F**
12.           **D**
13.           **D**
14.           **I**
15.           **F**



Xác định chữ cái nào trong dãy số thể hiện tốt nhất câu trả lời cho mỗi vấn đề.

**Câu trả lời**



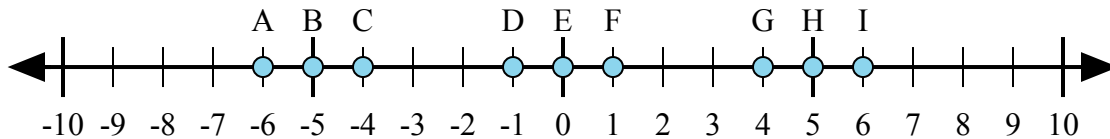
1)  $2 + (-5) =$

2)  $(-5) + (-2) =$

3)  $(-5) + 2 =$

4)  $5 + (-2) =$

5)  $(-2) + 5 =$



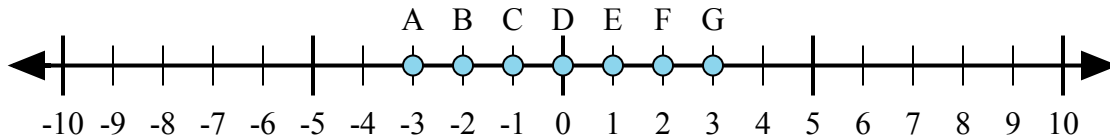
6)  $1 + 5 =$

7)  $(-1) + 5 =$

8)  $5 + (-1) =$

9)  $(-1) + (-5) =$

10)  $(-5) + 1 =$



11)  $(-1) + 2 =$

12)  $1 + (-2) =$

13)  $2 + 1 =$

14)  $2 + (-1) =$

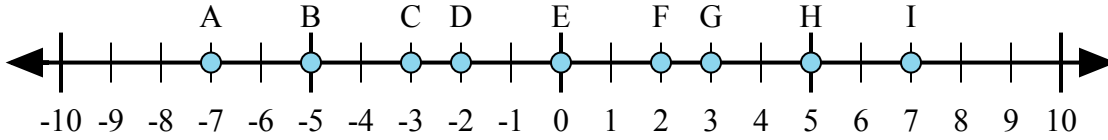
15)  $(-2) + 1 =$

1. \_\_\_\_\_
2. \_\_\_\_\_
3. \_\_\_\_\_
4. \_\_\_\_\_
5. \_\_\_\_\_
6. \_\_\_\_\_
7. \_\_\_\_\_
8. \_\_\_\_\_
9. \_\_\_\_\_
10. \_\_\_\_\_
11. \_\_\_\_\_
12. \_\_\_\_\_
13. \_\_\_\_\_
14. \_\_\_\_\_
15. \_\_\_\_\_



Xác định chữ cái nào trong dãy số thể hiện tốt nhất câu trả lời cho mỗi vấn đề.

**Câu trả lời**



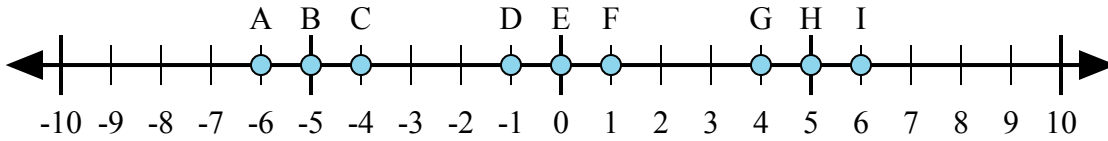
1)  $2 + (-5) =$

2)  $(-5) + (-2) =$

3)  $(-5) + 2 =$

4)  $5 + (-2) =$

5)  $(-2) + 5 =$



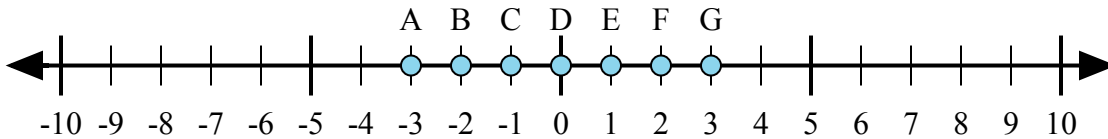
6)  $1 + 5 =$

7)  $(-1) + 5 =$

8)  $5 + (-1) =$

9)  $(-1) + (-5) =$

10)  $(-5) + 1 =$



11)  $(-1) + 2 =$

12)  $1 + (-2) =$

13)  $2 + 1 =$

14)  $2 + (-1) =$

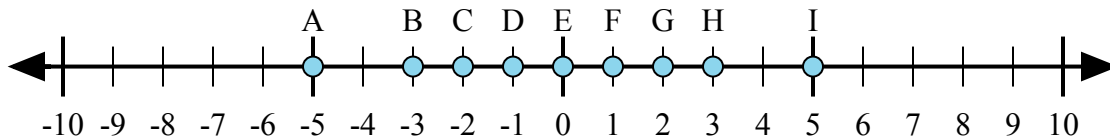
15)  $(-2) + 1 =$

- 1.           **C**
- 2.           **A**
- 3.           **C**
- 4.           **G**
- 5.           **G**
- 6.           **I**
- 7.           **G**
- 8.           **G**
- 9.           **A**
- 10.           **C**
- 11.           **E**
- 12.           **C**
- 13.           **G**
- 14.           **E**
- 15.           **C**



Xác định chữ cái nào trong dãy số thể hiện tốt nhất câu trả lời cho mỗi vấn đề.

**Câu trả lời**



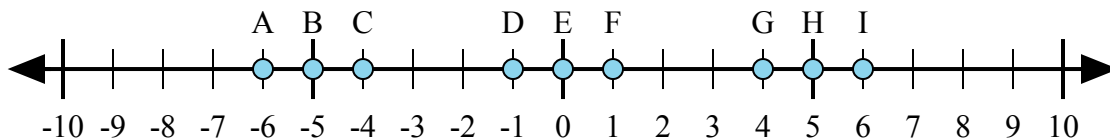
1)  $2 + (-3) =$

2)  $(-3) + (-2) =$

3)  $3 + (-2) =$

4)  $3 + 2 =$

5)  $(-2) + 3 =$



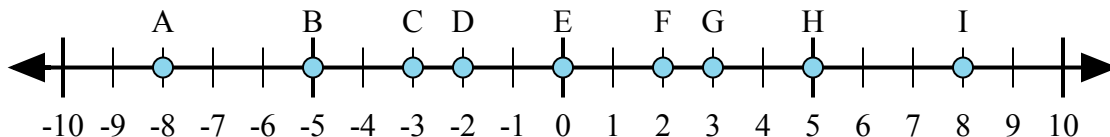
6)  $(-1) + 5 =$

7)  $(-5) + (-1) =$

8)  $5 + (-1) =$

9)  $1 + (-5) =$

10)  $5 + 1 =$



11)  $5 + 3 =$

12)  $(-5) + 3 =$

13)  $5 + (-3) =$

14)  $3 + (-5) =$

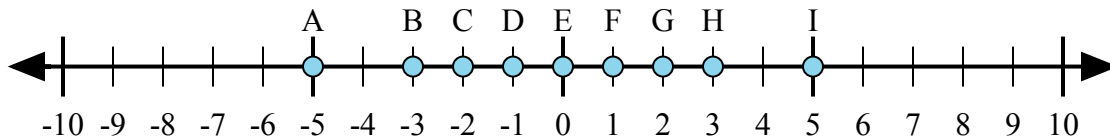
15)  $(-3) + 5 =$

1. \_\_\_\_\_
2. \_\_\_\_\_
3. \_\_\_\_\_
4. \_\_\_\_\_
5. \_\_\_\_\_
6. \_\_\_\_\_
7. \_\_\_\_\_
8. \_\_\_\_\_
9. \_\_\_\_\_
10. \_\_\_\_\_
11. \_\_\_\_\_
12. \_\_\_\_\_
13. \_\_\_\_\_
14. \_\_\_\_\_
15. \_\_\_\_\_



Xác định chữ cái nào trong dãy số thể hiện tốt nhất câu trả lời cho mỗi vấn đề.

**Câu trả lời**



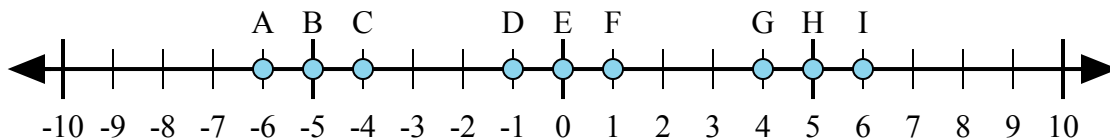
1)  $2 + (-3) =$

2)  $(-3) + (-2) =$

3)  $3 + (-2) =$

4)  $3 + 2 =$

5)  $(-2) + 3 =$



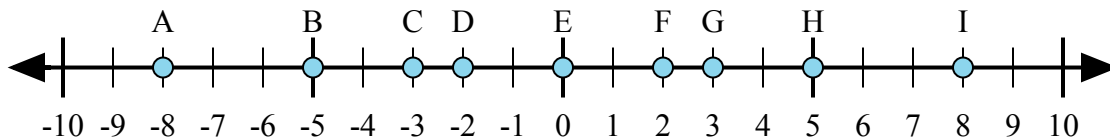
6)  $(-1) + 5 =$

7)  $(-5) + (-1) =$

8)  $5 + (-1) =$

9)  $1 + (-5) =$

10)  $5 + 1 =$



11)  $5 + 3 =$

12)  $(-5) + 3 =$

13)  $5 + (-3) =$

14)  $3 + (-5) =$

15)  $(-3) + 5 =$

1. **D**

2. **A**

3. **F**

4. **I**

5. **F**

6. **G**

7. **A**

8. **G**

9. **C**

10. **I**

11. **I**

12. **D**

13. **F**

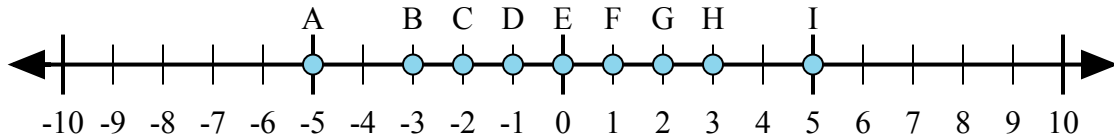
14. **D**

15. **F**



Xác định chữ cái nào trong dãy số thể hiện tốt nhất câu trả lời cho mỗi vấn đề.

**Câu trả lời**



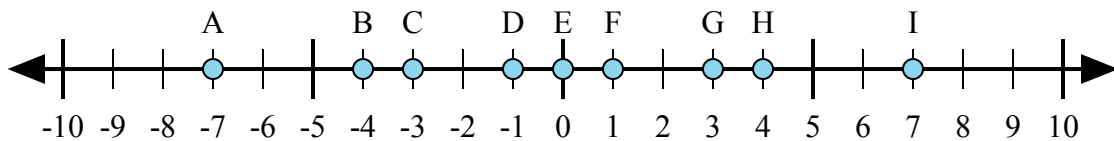
1)  $3 + (-2) =$

2)  $(-2) + 3 =$

3)  $2 + 3 =$

4)  $(-2) + (-3) =$

5)  $2 + (-3) =$



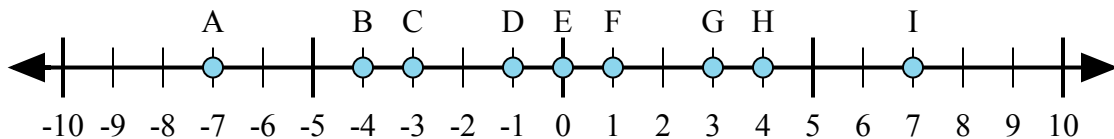
6)  $4 + (-3) =$

7)  $3 + 4 =$

8)  $(-4) + 3 =$

9)  $(-3) + 4 =$

10)  $(-3) + (-4) =$



11)  $4 + 3 =$

12)  $4 + (-3) =$

13)  $(-4) + 3 =$

14)  $(-3) + 4 =$

15)  $(-4) + (-3) =$

1. \_\_\_\_\_

2. \_\_\_\_\_

3. \_\_\_\_\_

4. \_\_\_\_\_

5. \_\_\_\_\_

6. \_\_\_\_\_

7. \_\_\_\_\_

8. \_\_\_\_\_

9. \_\_\_\_\_

10. \_\_\_\_\_

11. \_\_\_\_\_

12. \_\_\_\_\_

13. \_\_\_\_\_

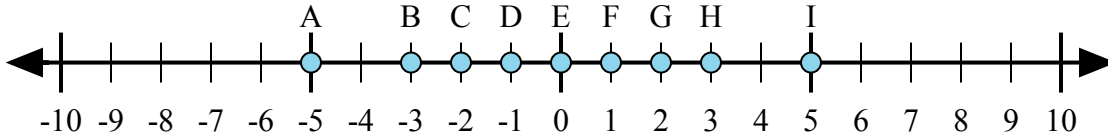
14. \_\_\_\_\_

15. \_\_\_\_\_



Xác định chữ cái nào trong dãy số thể hiện tốt nhất câu trả lời cho mỗi vấn đề.

**Câu trả lời**



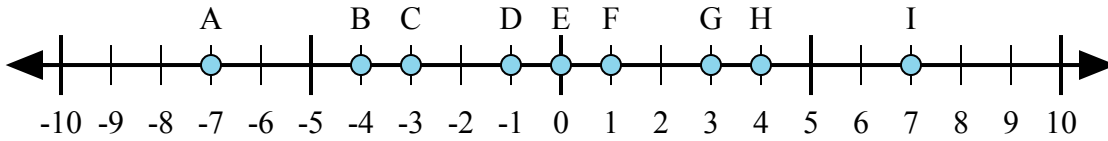
1)  $3 + (-2) =$

2)  $(-2) + 3 =$

3)  $2 + 3 =$

4)  $(-2) + (-3) =$

5)  $2 + (-3) =$



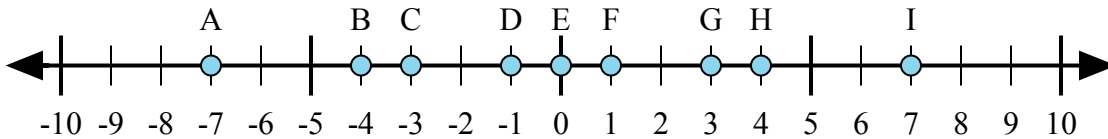
6)  $4 + (-3) =$

7)  $3 + 4 =$

8)  $(-4) + 3 =$

9)  $(-3) + 4 =$

10)  $(-3) + (-4) =$



11)  $4 + 3 =$

12)  $4 + (-3) =$

13)  $(-4) + 3 =$

14)  $(-3) + 4 =$

15)  $(-4) + (-3) =$

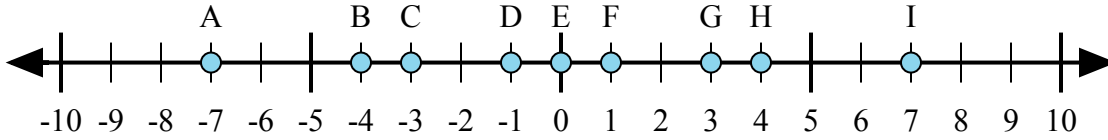
- 1. **F**
- 2. **F**
- 3. **I**
- 4. **A**
- 5. **D**
- 6. **F**
- 7. **I**
- 8. **D**
- 9. **F**
- 10. **A**
- 11. **I**
- 12. **F**
- 13. **D**
- 14. **F**
- 15. **A**





Xác định chữ cái nào trong dãy số thể hiện tốt nhất câu trả lời cho mỗi vấn đề.

**Câu trả lời**



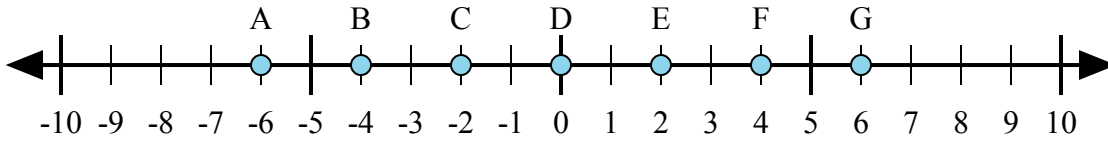
1)  $4 + (-3) =$

2)  $3 + (-4) =$

3)  $(-3) + (-4) =$

4)  $(-4) + 3 =$

5)  $3 + 4 =$



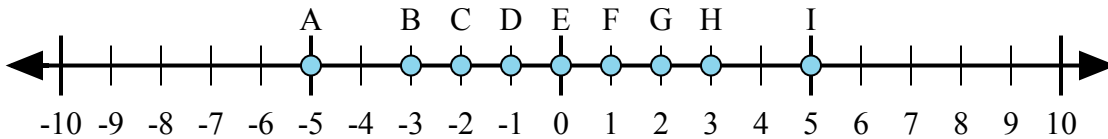
6)  $(-4) + 2 =$

7)  $(-2) + 4 =$

8)  $4 + 2 =$

9)  $(-4) + (-2) =$

10)  $2 + (-4) =$



11)  $(-3) + 2 =$

12)  $2 + (-3) =$

13)  $(-2) + 3 =$

14)  $(-3) + (-2) =$

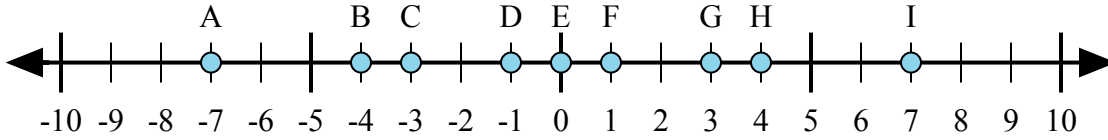
15)  $3 + (-2) =$

1. \_\_\_\_\_
2. \_\_\_\_\_
3. \_\_\_\_\_
4. \_\_\_\_\_
5. \_\_\_\_\_
6. \_\_\_\_\_
7. \_\_\_\_\_
8. \_\_\_\_\_
9. \_\_\_\_\_
10. \_\_\_\_\_
11. \_\_\_\_\_
12. \_\_\_\_\_
13. \_\_\_\_\_
14. \_\_\_\_\_
15. \_\_\_\_\_



Xác định chữ cái nào trong dãy số thể hiện tốt nhất câu trả lời cho mỗi vấn đề.

**Câu trả lời**



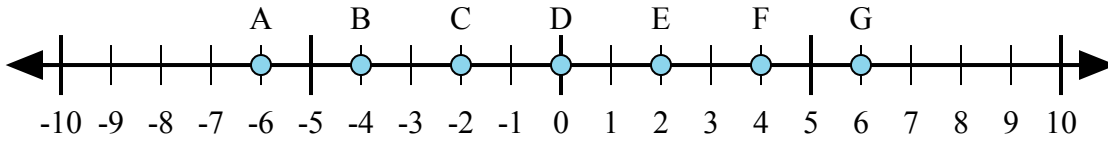
1)  $4 + (-3) =$

2)  $3 + (-4) =$

3)  $(-3) + (-4) =$

4)  $(-4) + 3 =$

5)  $3 + 4 =$



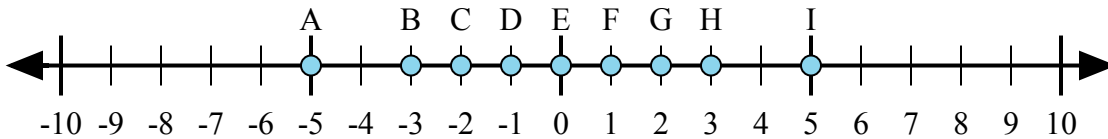
6)  $(-4) + 2 =$

7)  $(-2) + 4 =$

8)  $4 + 2 =$

9)  $(-4) + (-2) =$

10)  $2 + (-4) =$



11)  $(-3) + 2 =$

12)  $2 + (-3) =$

13)  $(-2) + 3 =$

14)  $(-3) + (-2) =$

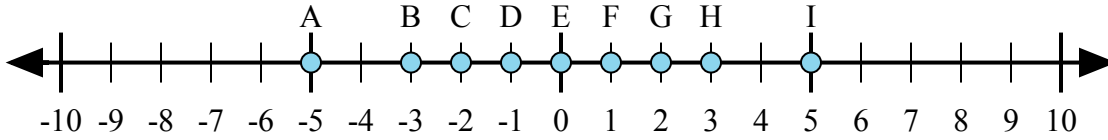
15)  $3 + (-2) =$

1. **F**
2. **D**
3. **A**
4. **D**
5. **I**
6. **C**
7. **E**
8. **G**
9. **A**
10. **C**
11. **D**
12. **D**
13. **F**
14. **A**
15. **F**

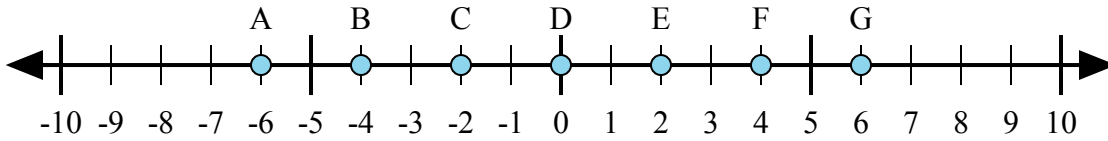


Xác định chữ cái nào trong dãy số thể hiện tốt nhất câu trả lời cho mỗi vấn đề.

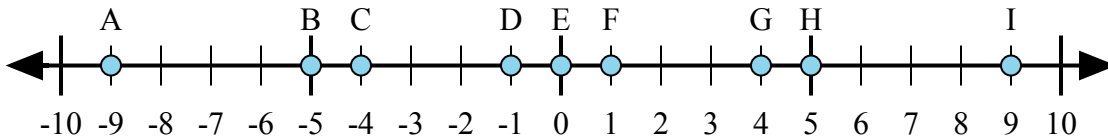
**Câu trả lời**



- 1)  $2 + 3 =$
- 2)  $2 + (-3) =$
- 3)  $3 + (-2) =$
- 4)  $(-2) + 3 =$
- 5)  $(-3) + 2 =$



- 6)  $4 + (-2) =$
- 7)  $2 + 4 =$
- 8)  $(-2) + 4 =$
- 9)  $(-4) + 2 =$
- 10)  $(-2) + (-4) =$



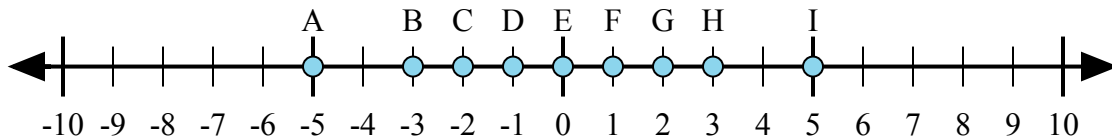
- 11)  $5 + (-4) =$
- 12)  $4 + (-5) =$
- 13)  $4 + 5 =$
- 14)  $(-5) + 4 =$
- 15)  $(-4) + 5 =$

1. \_\_\_\_\_
2. \_\_\_\_\_
3. \_\_\_\_\_
4. \_\_\_\_\_
5. \_\_\_\_\_
6. \_\_\_\_\_
7. \_\_\_\_\_
8. \_\_\_\_\_
9. \_\_\_\_\_
10. \_\_\_\_\_
11. \_\_\_\_\_
12. \_\_\_\_\_
13. \_\_\_\_\_
14. \_\_\_\_\_
15. \_\_\_\_\_

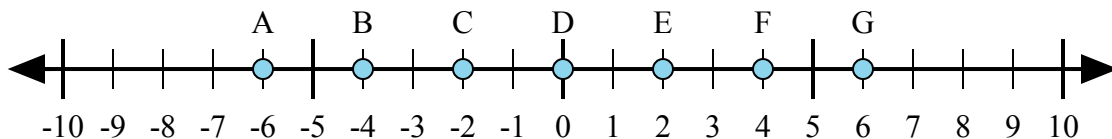


Xác định chữ cái nào trong dãy số thể hiện tốt nhất câu trả lời cho mỗi vấn đề.

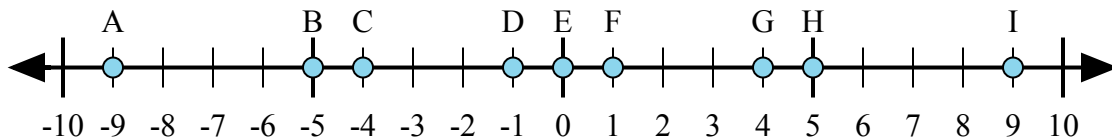
**Câu trả lời**



- 1)  $2 + 3 =$
- 2)  $2 + (-3) =$
- 3)  $3 + (-2) =$
- 4)  $(-2) + 3 =$
- 5)  $(-3) + 2 =$



- 6)  $4 + (-2) =$
- 7)  $2 + 4 =$
- 8)  $(-2) + 4 =$
- 9)  $(-4) + 2 =$
- 10)  $(-2) + (-4) =$



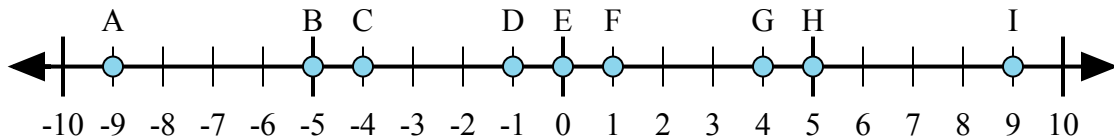
- 11)  $5 + (-4) =$
- 12)  $4 + (-5) =$
- 13)  $4 + 5 =$
- 14)  $(-5) + 4 =$
- 15)  $(-4) + 5 =$

1. **I**
2. **D**
3. **F**
4. **F**
5. **D**
6. **E**
7. **G**
8. **E**
9. **C**
10. **A**
11. **F**
12. **D**
13. **I**
14. **D**
15. **F**



Xác định chữ cái nào trong dãy số thể hiện tốt nhất câu trả lời cho mỗi vấn đề.

**Câu trả lời**



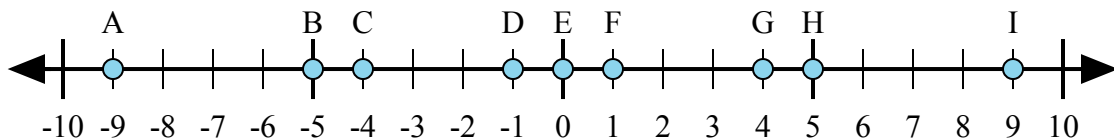
1)  $(-5) + 4 =$

2)  $(-4) + (-5) =$

3)  $4 + 5 =$

4)  $(-4) + 5 =$

5)  $5 + (-4) =$



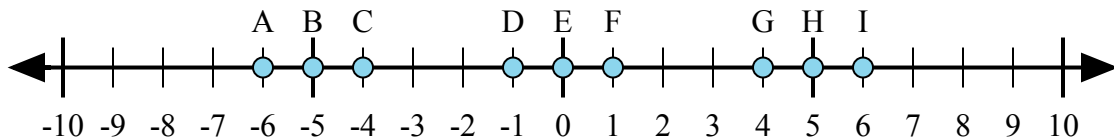
6)  $(-5) + (-4) =$

7)  $5 + (-4) =$

8)  $4 + (-5) =$

9)  $(-5) + 4 =$

10)  $5 + 4 =$



11)  $(-5) + (-1) =$

12)  $(-5) + 1 =$

13)  $5 + 1 =$

14)  $1 + (-5) =$

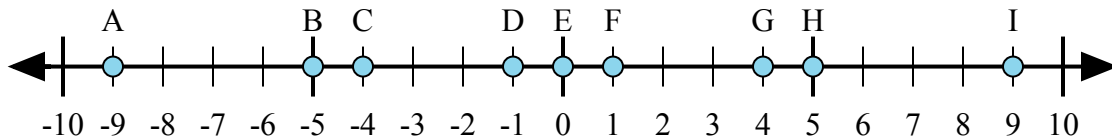
15)  $(-1) + 5 =$

1. \_\_\_\_\_
2. \_\_\_\_\_
3. \_\_\_\_\_
4. \_\_\_\_\_
5. \_\_\_\_\_
6. \_\_\_\_\_
7. \_\_\_\_\_
8. \_\_\_\_\_
9. \_\_\_\_\_
10. \_\_\_\_\_
11. \_\_\_\_\_
12. \_\_\_\_\_
13. \_\_\_\_\_
14. \_\_\_\_\_
15. \_\_\_\_\_



Xác định chữ cái nào trong dãy số thể hiện tốt nhất câu trả lời cho mỗi vấn đề.

**Câu trả lời**



1)  $(-5) + 4 =$

2)  $(-4) + (-5) =$

3)  $4 + 5 =$

4)  $(-4) + 5 =$

5)  $5 + (-4) =$

1.     **D**    

2.     **A**    

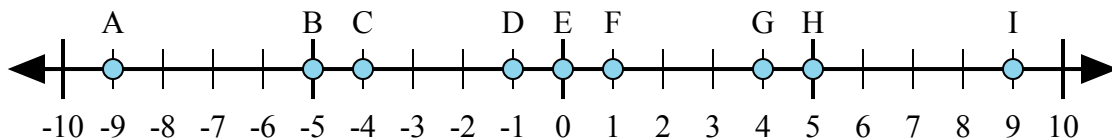
3.     **I**    

4.     **F**    

5.     **F**    

6.     **A**    

7.     **F**    



6)  $(-5) + (-4) =$

7)  $5 + (-4) =$

8)  $4 + (-5) =$

9)  $(-5) + 4 =$

10)  $5 + 4 =$

8.     **D**    

9.     **D**    

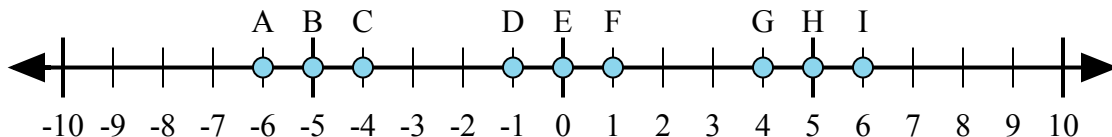
10.     **I**    

11.     **A**    

12.     **C**    

13.     **I**    

14.     **C**    



11)  $(-5) + (-1) =$

12)  $(-5) + 1 =$

13)  $5 + 1 =$

14)  $1 + (-5) =$

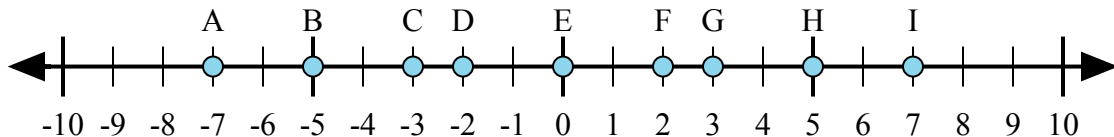
15)  $(-1) + 5 =$

15.     **G**



Xác định chữ cái nào trong dãy số thể hiện tốt nhất câu trả lời cho mỗi vấn đề.

**Câu trả lời**



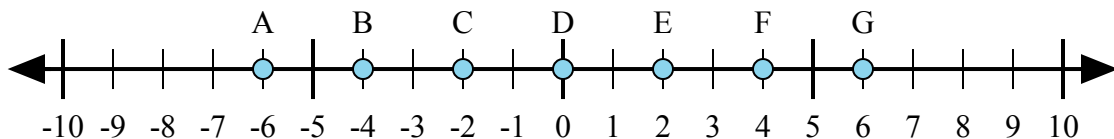
1)  $(-5) + 2 =$

2)  $(-2) + (-5) =$

3)  $2 + 5 =$

4)  $(-2) + 5 =$

5)  $2 + (-5) =$



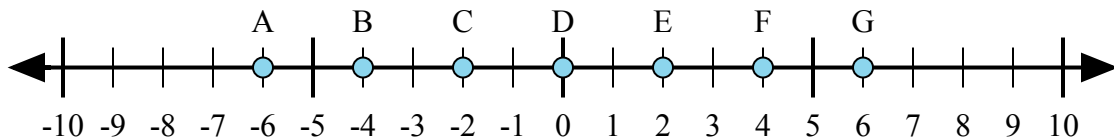
6)  $(-2) + 4 =$

7)  $(-4) + 2 =$

8)  $(-2) + (-4) =$

9)  $2 + (-4) =$

10)  $2 + 4 =$



11)  $4 + 2 =$

12)  $(-4) + (-2) =$

13)  $(-2) + 4 =$

14)  $(-4) + 2 =$

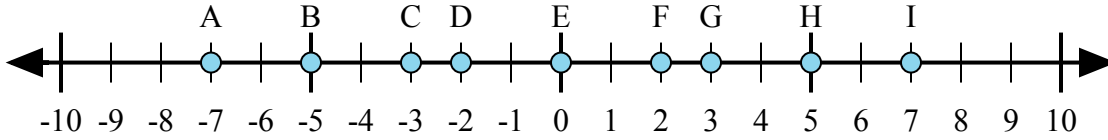
15)  $2 + (-4) =$

1. \_\_\_\_\_
2. \_\_\_\_\_
3. \_\_\_\_\_
4. \_\_\_\_\_
5. \_\_\_\_\_
6. \_\_\_\_\_
7. \_\_\_\_\_
8. \_\_\_\_\_
9. \_\_\_\_\_
10. \_\_\_\_\_
11. \_\_\_\_\_
12. \_\_\_\_\_
13. \_\_\_\_\_
14. \_\_\_\_\_
15. \_\_\_\_\_



Xác định chữ cái nào trong dãy số thể hiện tốt nhất câu trả lời cho mỗi vấn đề.

**Câu trả lời**



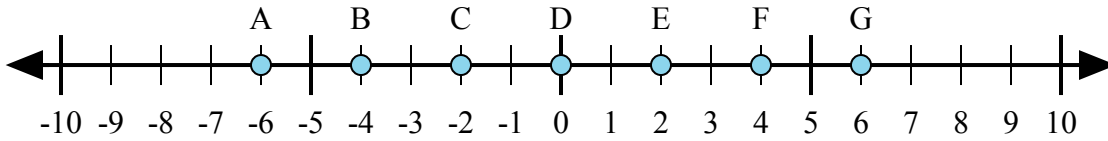
1)  $(-5) + 2 =$

2)  $(-2) + (-5) =$

3)  $2 + 5 =$

4)  $(-2) + 5 =$

5)  $2 + (-5) =$



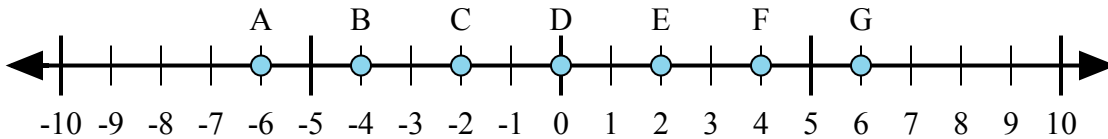
6)  $(-2) + 4 =$

7)  $(-4) + 2 =$

8)  $(-2) + (-4) =$

9)  $2 + (-4) =$

10)  $2 + 4 =$



11)  $4 + 2 =$

12)  $(-4) + (-2) =$

13)  $(-2) + 4 =$

14)  $(-4) + 2 =$

15)  $2 + (-4) =$

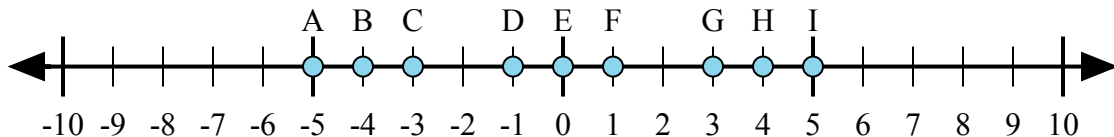
1.           **C**
2.           **A**
3.           **I**
4.           **G**
5.           **C**
6.           **E**
7.           **C**
8.           **A**
9.           **C**
10.          **G**
11.          **G**
12.          **A**
13.          **E**
14.          **C**
15.          **C**





Xác định chữ cái nào trong dãy số thể hiện tốt nhất câu trả lời cho mỗi vấn đề.

**Câu trả lời**



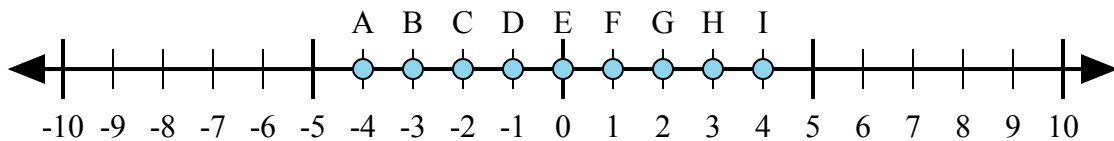
1)  $4 + (-1) =$

2)  $4 + 1 =$

3)  $1 + (-4) =$

4)  $(-4) + (-1) =$

5)  $(-4) + 1 =$



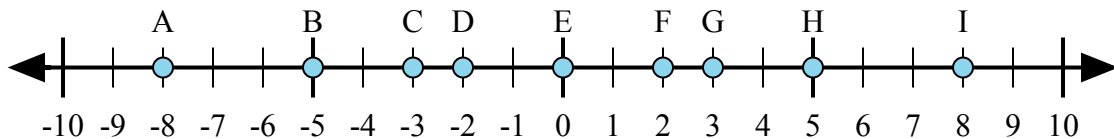
6)  $(-3) + (-1) =$

7)  $(-3) + 1 =$

8)  $3 + 1 =$

9)  $1 + (-3) =$

10)  $(-1) + 3 =$



11)  $3 + (-5) =$

12)  $(-5) + 3 =$

13)  $5 + 3 =$

14)  $(-3) + 5 =$

15)  $(-5) + (-3) =$

1. \_\_\_\_\_

2. \_\_\_\_\_

3. \_\_\_\_\_

4. \_\_\_\_\_

5. \_\_\_\_\_

6. \_\_\_\_\_

7. \_\_\_\_\_

8. \_\_\_\_\_

9. \_\_\_\_\_

10. \_\_\_\_\_

11. \_\_\_\_\_

12. \_\_\_\_\_

13. \_\_\_\_\_

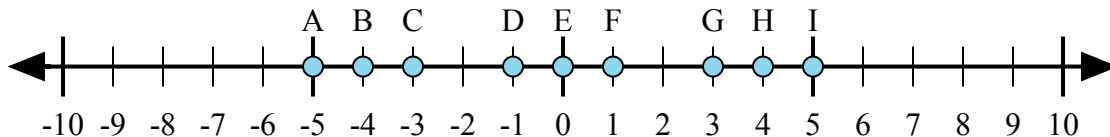
14. \_\_\_\_\_

15. \_\_\_\_\_



Xác định chữ cái nào trong dãy số thể hiện tốt nhất câu trả lời cho mỗi vấn đề.

**Câu trả lời**



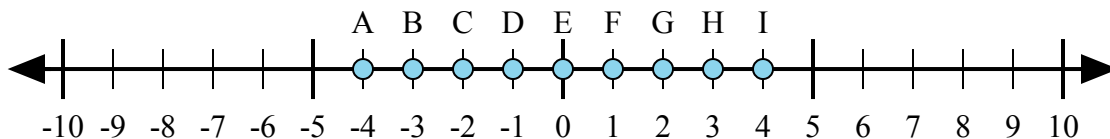
1)  $4 + (-1) =$

2)  $4 + 1 =$

3)  $1 + (-4) =$

4)  $(-4) + (-1) =$

5)  $(-4) + 1 =$



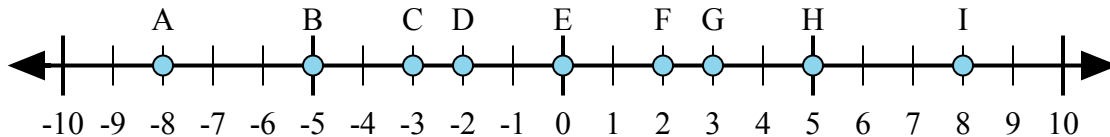
6)  $(-3) + (-1) =$

7)  $(-3) + 1 =$

8)  $3 + 1 =$

9)  $1 + (-3) =$

10)  $(-1) + 3 =$



11)  $3 + (-5) =$

12)  $(-5) + 3 =$

13)  $5 + 3 =$

14)  $(-3) + 5 =$

15)  $(-5) + (-3) =$

1.     **G**    

2.     **I**    

3.     **C**    

4.     **A**    

5.     **C**    

6.     **A**    

7.     **C**    

8.     **I**    

9.     **C**    

10.     **G**    

11.     **D**    

12.     **D**    

13.     **I**    

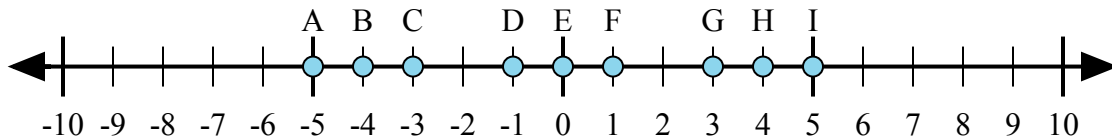
14.     **F**    

15.     **A**



Xác định chữ cái nào trong dãy số thể hiện tốt nhất câu trả lời cho mỗi vấn đề.

**Câu trả lời**



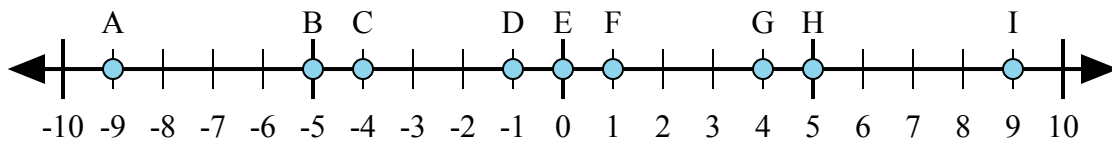
1)  $4 + 1 =$

2)  $4 + (-1) =$

3)  $1 + (-4) =$

4)  $(-4) + (-1) =$

5)  $(-1) + 4 =$



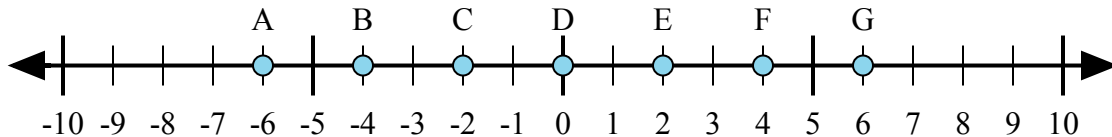
6)  $(-4) + 5 =$

7)  $4 + (-5) =$

8)  $4 + 5 =$

9)  $(-4) + (-5) =$

10)  $(-5) + 4 =$



11)  $(-4) + (-2) =$

12)  $2 + (-4) =$

13)  $4 + 2 =$

14)  $(-2) + 4 =$

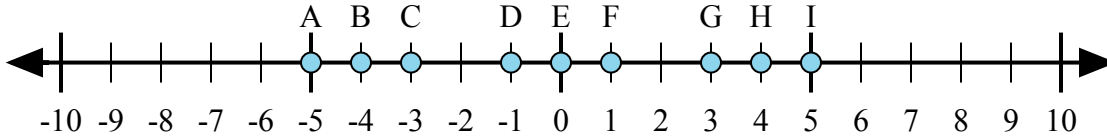
15)  $4 + (-2) =$

1. \_\_\_\_\_
2. \_\_\_\_\_
3. \_\_\_\_\_
4. \_\_\_\_\_
5. \_\_\_\_\_
6. \_\_\_\_\_
7. \_\_\_\_\_
8. \_\_\_\_\_
9. \_\_\_\_\_
10. \_\_\_\_\_
11. \_\_\_\_\_
12. \_\_\_\_\_
13. \_\_\_\_\_
14. \_\_\_\_\_
15. \_\_\_\_\_

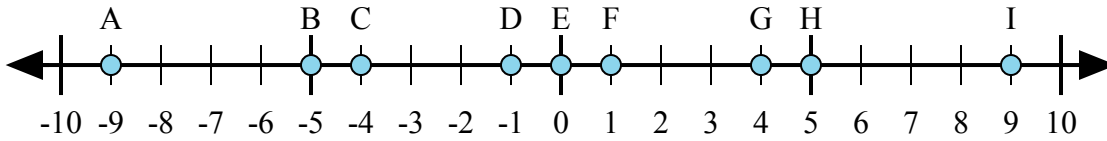


Xác định chữ cái nào trong dãy số thể hiện tốt nhất câu trả lời cho mỗi vấn đề.

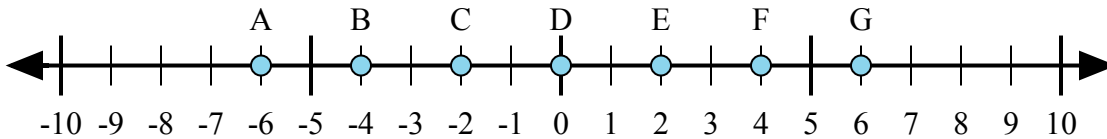
**Câu trả lời**



- 1)  $4 + 1 =$
- 2)  $4 + (-1) =$
- 3)  $1 + (-4) =$
- 4)  $(-4) + (-1) =$
- 5)  $(-1) + 4 =$



- 6)  $(-4) + 5 =$
- 7)  $4 + (-5) =$
- 8)  $4 + 5 =$
- 9)  $(-4) + (-5) =$
- 10)  $(-5) + 4 =$



- 11)  $(-4) + (-2) =$
- 12)  $2 + (-4) =$
- 13)  $4 + 2 =$
- 14)  $(-2) + 4 =$
- 15)  $4 + (-2) =$

1.     **I**
2.     **G**
3.     **C**
4.     **A**
5.     **G**
6.     **F**
7.     **D**
8.     **I**
9.     **A**
10.     **D**
11.     **A**
12.     **C**
13.     **G**
14.     **E**
15.     **E**