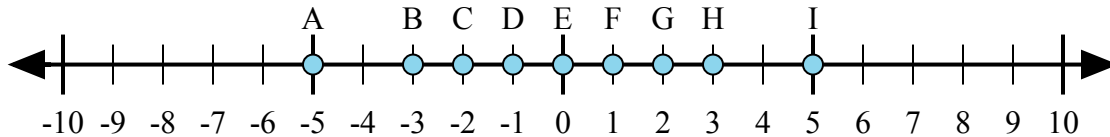




Xác định chữ cái nào trong dãy số thể hiện tốt nhất câu trả lời cho mỗi vấn đề.

**Câu trả lời**



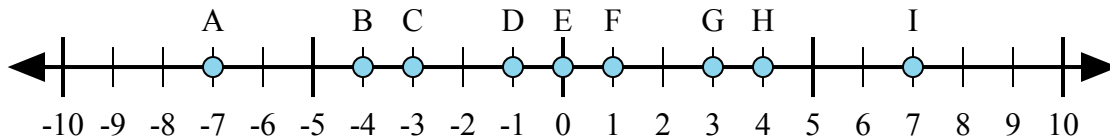
1)  $3 + (-2) =$

2)  $(-2) + 3 =$

3)  $2 + 3 =$

4)  $(-2) + (-3) =$

5)  $2 + (-3) =$



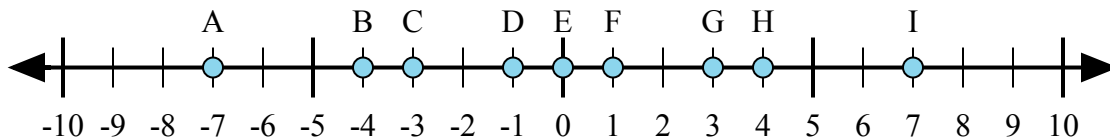
6)  $4 + (-3) =$

7)  $3 + 4 =$

8)  $(-4) + 3 =$

9)  $(-3) + 4 =$

10)  $(-3) + (-4) =$



11)  $4 + 3 =$

12)  $4 + (-3) =$

13)  $(-4) + 3 =$

14)  $(-3) + 4 =$

15)  $(-4) + (-3) =$

1. \_\_\_\_\_

2. \_\_\_\_\_

3. \_\_\_\_\_

4. \_\_\_\_\_

5. \_\_\_\_\_

6. \_\_\_\_\_

7. \_\_\_\_\_

8. \_\_\_\_\_

9. \_\_\_\_\_

10. \_\_\_\_\_

11. \_\_\_\_\_

12. \_\_\_\_\_

13. \_\_\_\_\_

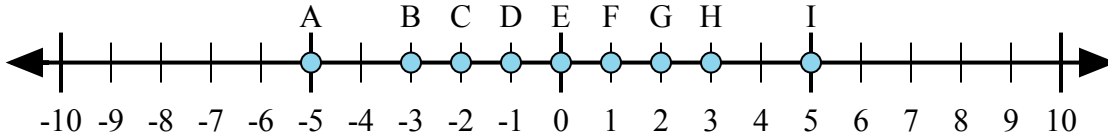
14. \_\_\_\_\_

15. \_\_\_\_\_



Xác định chữ cái nào trong dãy số thể hiện tốt nhất câu trả lời cho mỗi vấn đề.

**Câu trả lời**



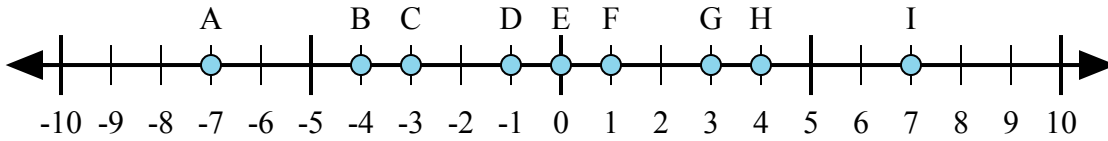
1)  $3 + (-2) =$

2)  $(-2) + 3 =$

3)  $2 + 3 =$

4)  $(-2) + (-3) =$

5)  $2 + (-3) =$



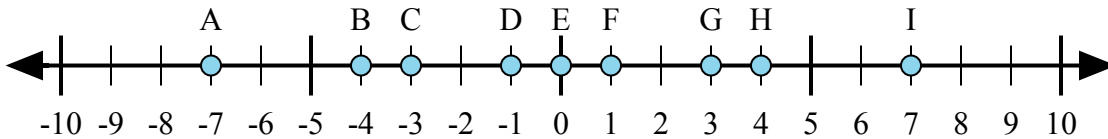
6)  $4 + (-3) =$

7)  $3 + 4 =$

8)  $(-4) + 3 =$

9)  $(-3) + 4 =$

10)  $(-3) + (-4) =$



11)  $4 + 3 =$

12)  $4 + (-3) =$

13)  $(-4) + 3 =$

14)  $(-3) + 4 =$

15)  $(-4) + (-3) =$

1. **F**
2. **F**
3. **I**
4. **A**
5. **D**
6. **F**
7. **I**
8. **D**
9. **F**
10. **A**
11. **I**
12. **F**
13. **D**
14. **F**
15. **A**