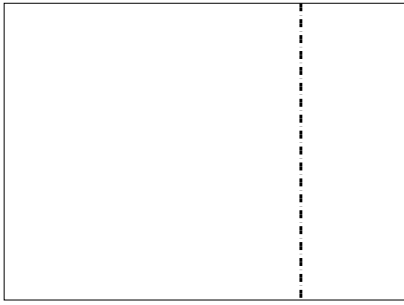





Dùng cách chia mảng để giải bài tính.


1) $20 \times 27 =$




2) $25 \times 20 =$



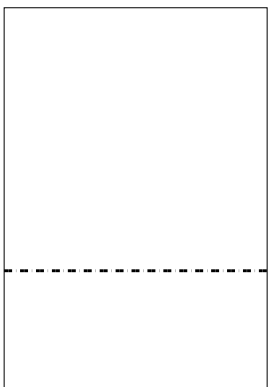
3) $28 \times 20 =$




4) $20 \times 29 =$



5) $29 \times 20 =$



6) $21 \times 20 =$



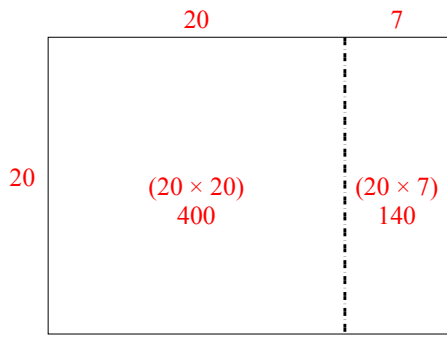
Câu trả lời

- 1. _____
- 2. _____
- 3. _____
- 4. _____
- 5. _____
- 6. _____

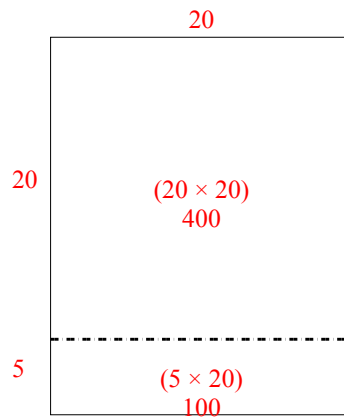


Dùng cách chia mảng để giải bài tính.

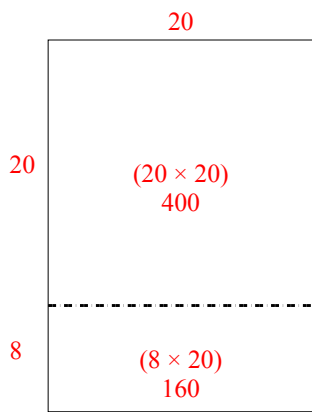
1) $20 \times 27 =$



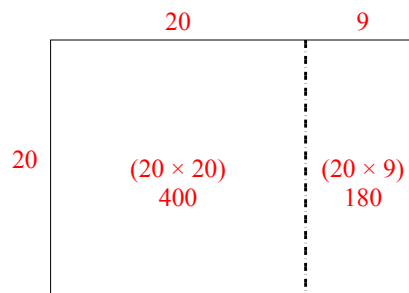
2) $25 \times 20 =$



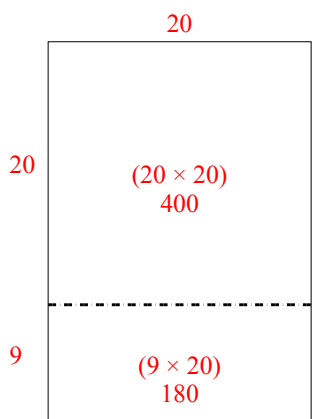
3) $28 \times 20 =$



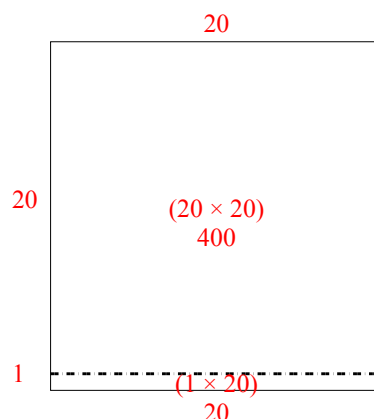
4) $20 \times 29 =$



5) $29 \times 20 =$



6) $21 \times 20 =$



Câu trả lời

1. 540
2. 500
3. 560
4. 580
5. 580
6. 420