





Dùng cách chia mảng để giải bài tính.


1) $39 \times 30 =$




2) $28 \times 20 =$




3) $21 \times 20 =$




4) $27 \times 20 =$



5) $20 \times 28 =$



6) $20 \times 21 =$



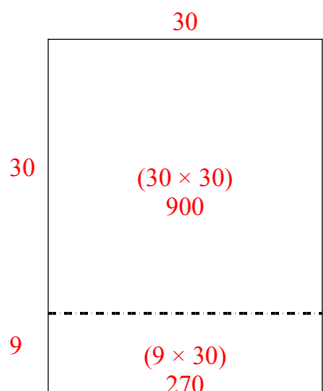
Câu trả lời

- 1. _____
- 2. _____
- 3. _____
- 4. _____
- 5. _____
- 6. _____

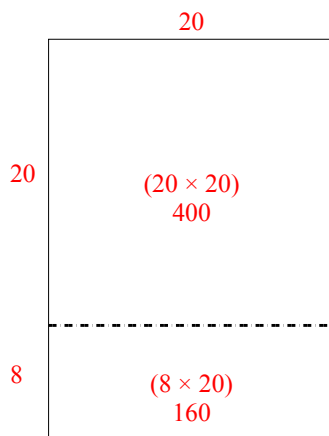


Dùng cách chia mảng để giải bài tính.

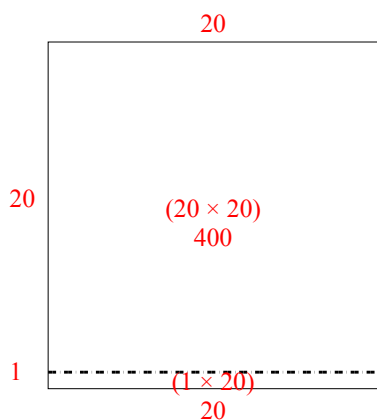
1) $39 \times 30 =$



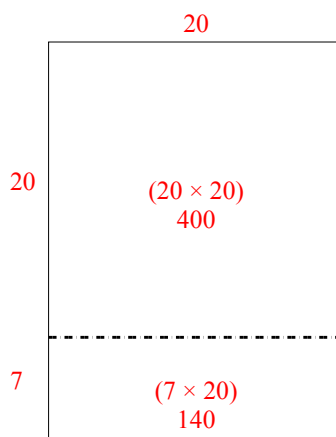
2) $28 \times 20 =$



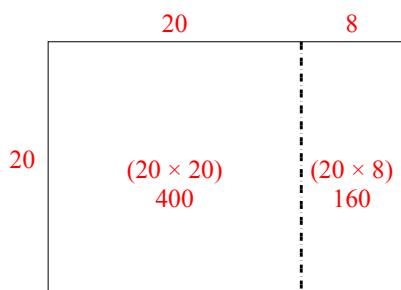
3) $21 \times 20 =$



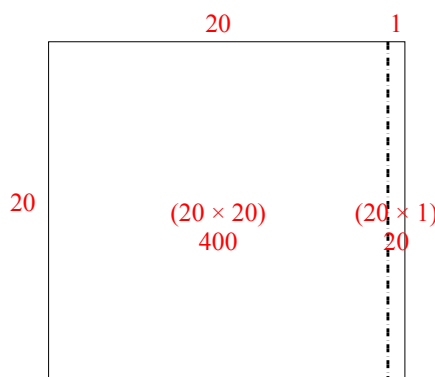
4) $27 \times 20 =$



5) $20 \times 28 =$



6) $20 \times 21 =$




Câu trả lời

1. **1.170**
2. **560**
3. **420**
4. **540**
5. **560**
6. **420**




Dùng cách chia mảng để giải bài tính.


1) $21 \times 20 =$




2) $27 \times 20 =$




3) $20 \times 23 =$




4) $20 \times 27 =$



5) $20 \times 29 =$



6) $20 \times 25 =$



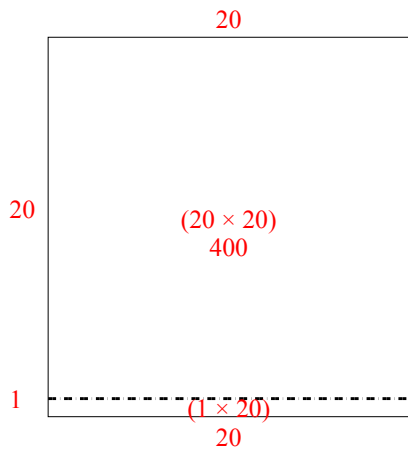
Câu trả lời

- 1. _____
- 2. _____
- 3. _____
- 4. _____
- 5. _____
- 6. _____

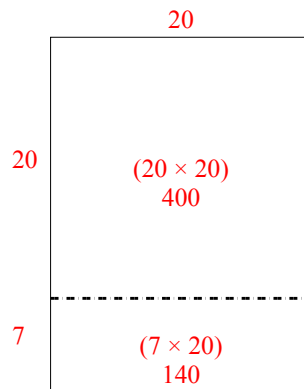


Dùng cách chia mảng để giải bài tính.

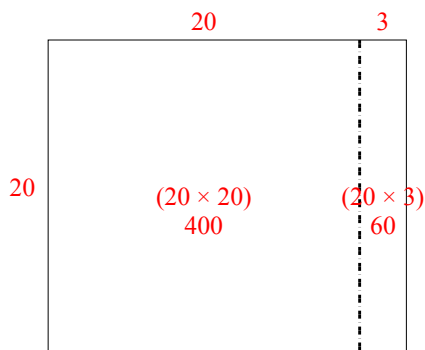
1) $21 \times 20 =$



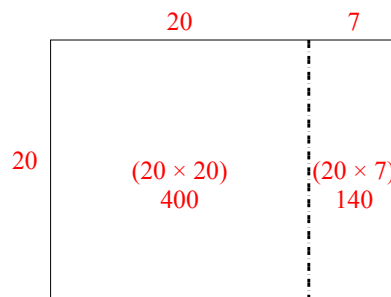
2) $27 \times 20 =$



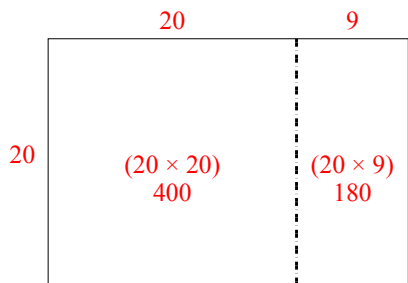
3) $20 \times 23 =$



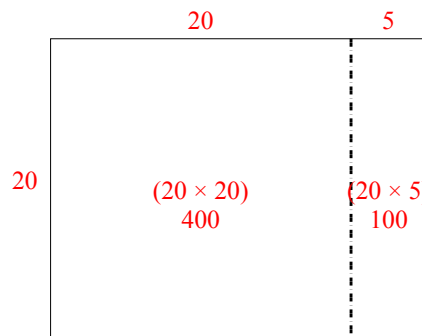
4) $20 \times 27 =$



5) $20 \times 29 =$



6) $20 \times 25 =$




Câu trả lời

1. 420
2. 540
3. 460
4. 540
5. 580
6. 500




Dùng cách chia mảng để giải bài tính.


1) $26 \times 20 =$




2) $20 \times 22 =$




3) $29 \times 20 =$




4) $20 \times 29 =$



5) $25 \times 20 =$



6) $20 \times 28 =$



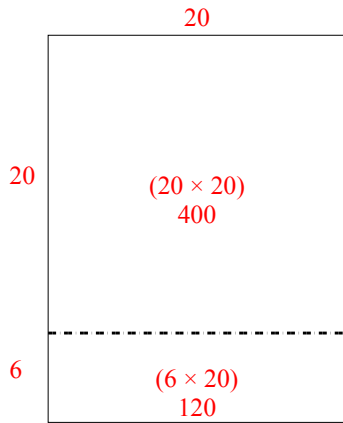
Câu trả lời

- 1. _____
- 2. _____
- 3. _____
- 4. _____
- 5. _____
- 6. _____

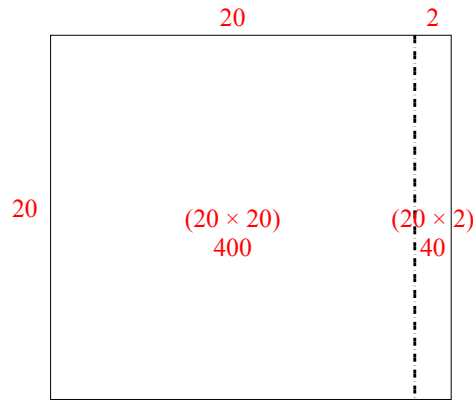


Dùng cách chia mảng để giải bài tính.

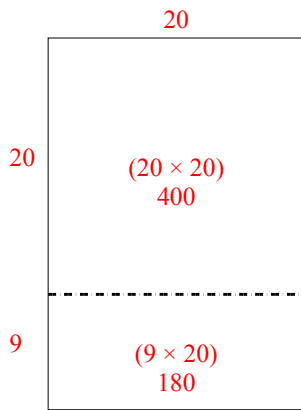
1) $26 \times 20 =$



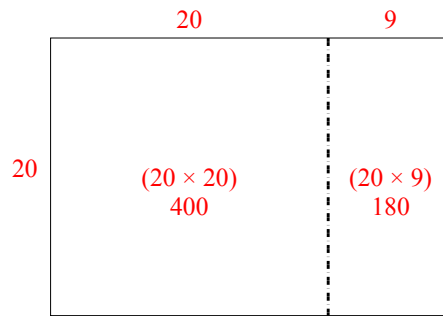
2) $20 \times 22 =$



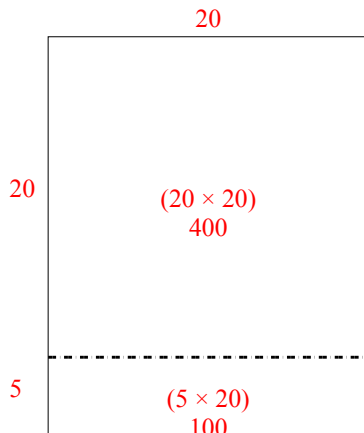
3) $29 \times 20 =$



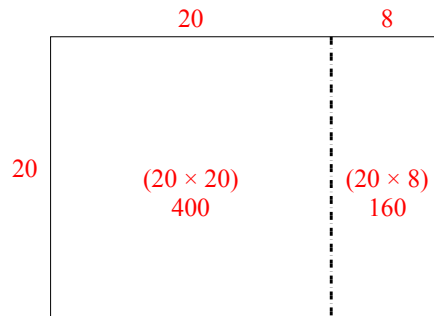
4) $20 \times 29 =$



5) $25 \times 20 =$



6) $20 \times 28 =$



Câu trả lời

1. **520**

2. **440**

3. **580**

4. **580**


5. **500**

6. **560**




Dùng cách chia mảng để giải bài tính.

1) $33 \times 30 =$




2) $20 \times 23 =$




3) $20 \times 21 =$




4) $20 \times 27 =$



5) $20 \times 26 =$



6) $29 \times 20 =$



Câu trả lời

1. _____

2. _____

3. _____

4. _____

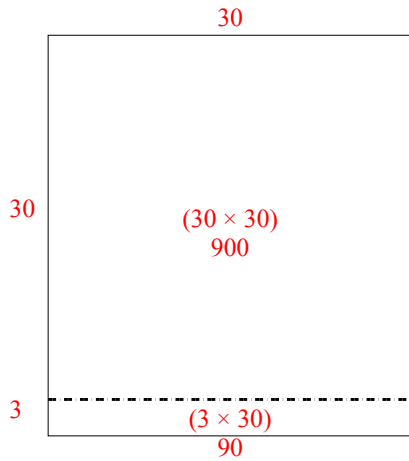
5. _____

6. _____

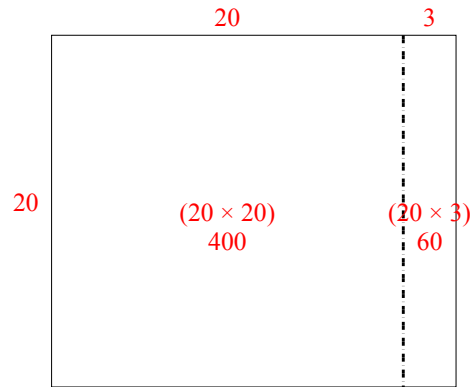


Dùng cách chia mảng để giải bài tính.

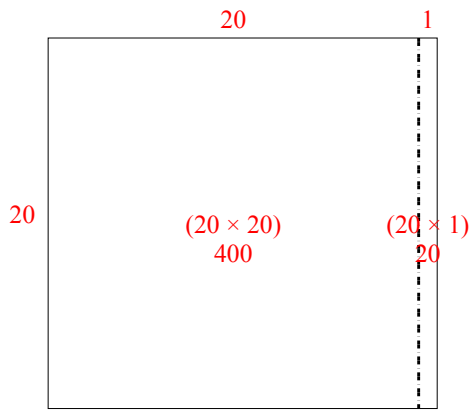
1) $33 \times 30 =$



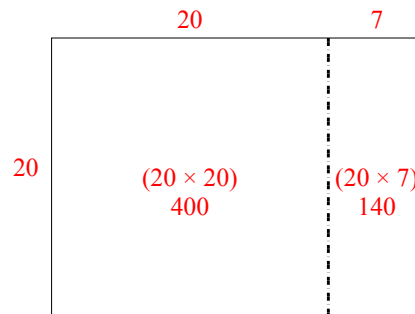
2) $20 \times 23 =$



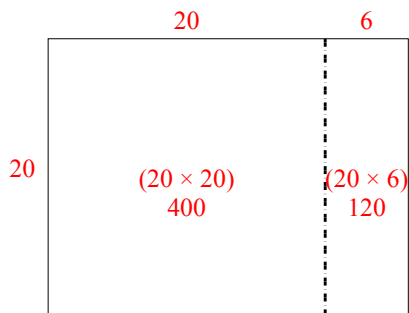
3) $20 \times 21 =$



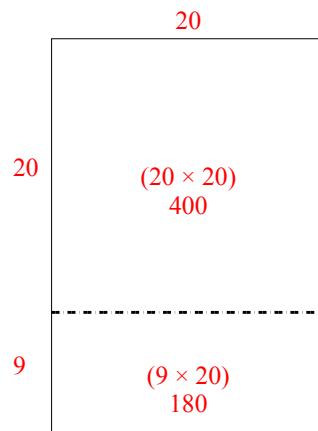
4) $20 \times 27 =$



5) $20 \times 26 =$



6) $29 \times 20 =$



Câu trả lời

1. **990**

2. **460**

3. **420**

4. **540**


5. **520**

6. **580**




Dùng cách chia mảng để giải bài tính.


1) $43 \times 30 =$




2) $32 \times 30 =$




3) $20 \times 23 =$




4) $25 \times 20 =$



5) $20 \times 24 =$



6) $22 \times 20 =$



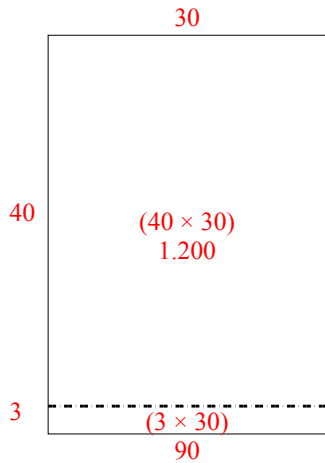
Câu trả lời

- 1. _____
- 2. _____
- 3. _____
- 4. _____
- 5. _____
- 6. _____

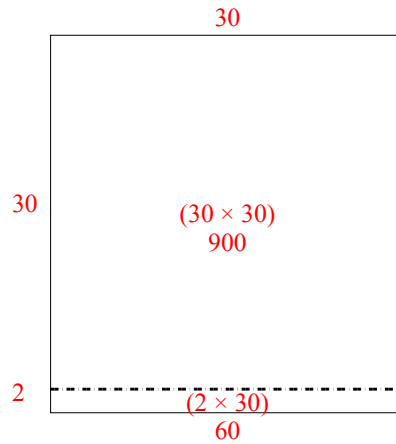


Dùng cách chia mảng để giải bài tính.

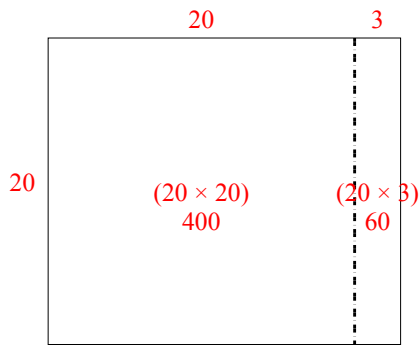
1) $43 \times 30 =$



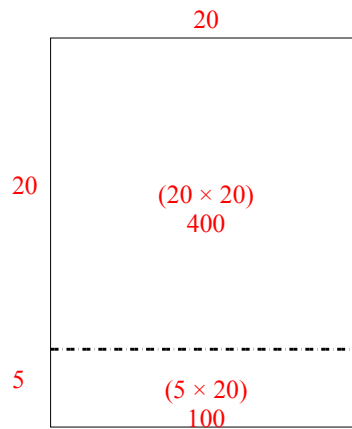
2) $32 \times 30 =$



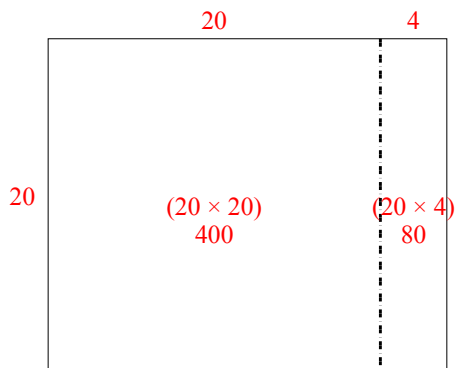
3) $20 \times 23 =$



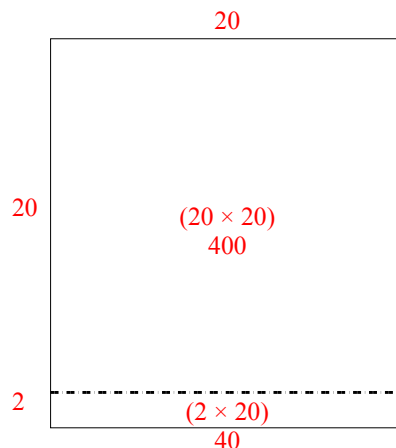
4) $25 \times 20 =$



5) $20 \times 24 =$



6) $22 \times 20 =$




Câu trả lời

1. 1.290
2. 960
3. 460
4. 500
5. 480
6. 440




Dùng cách chia mảng để giải bài tính.


1) $20 \times 23 =$




2) $28 \times 20 =$




3) $24 \times 20 =$




4) $26 \times 20 =$



5) $20 \times 25 =$



6) $20 \times 24 =$



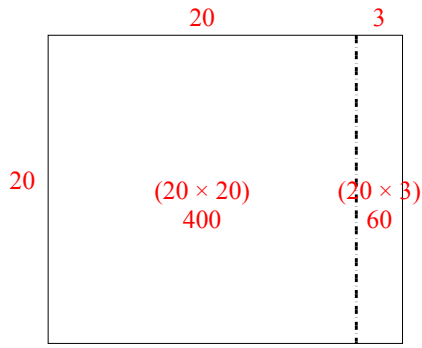
Câu trả lời

- 1. _____
- 2. _____
- 3. _____
- 4. _____
- 5. _____
- 6. _____

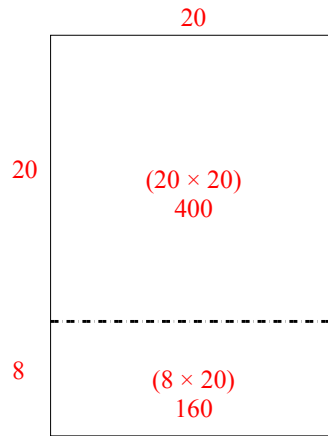


Dùng cách chia mảng để giải bài tính.

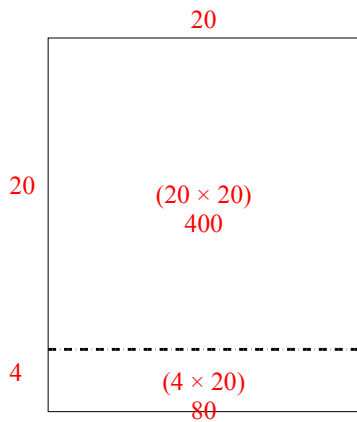
1) $20 \times 23 =$



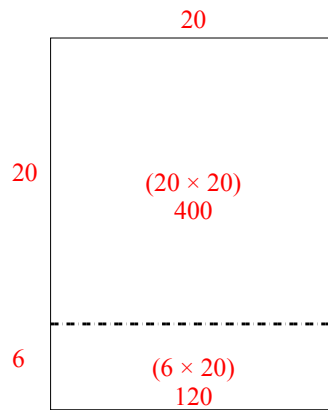
2) $28 \times 20 =$



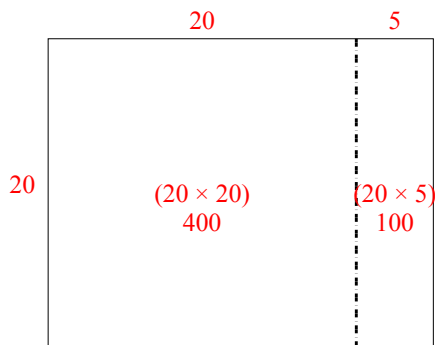
3) $24 \times 20 =$



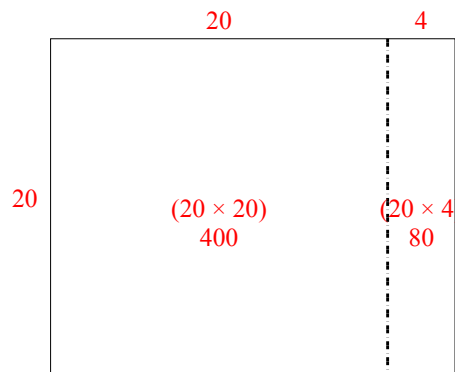
4) $26 \times 20 =$



5) $20 \times 25 =$



6) $20 \times 24 =$




Câu trả lời

1. 460
2. 560
3. 480
4. 520
5. 500
6. 480




Dùng cách chia mảng để giải bài tính.


1) $30 \times 32 =$




2) $20 \times 23 =$




3) $25 \times 20 =$




4) $26 \times 20 =$



5) $22 \times 20 =$



6) $20 \times 21 =$



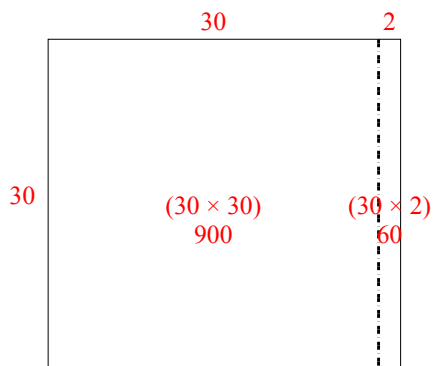
Câu trả lời

- 1. _____
- 2. _____
- 3. _____
- 4. _____
- 5. _____
- 6. _____

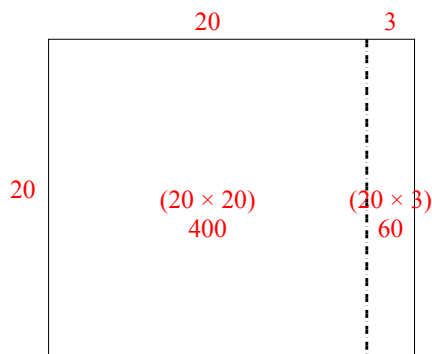


Dùng cách chia mảng để giải bài tính.

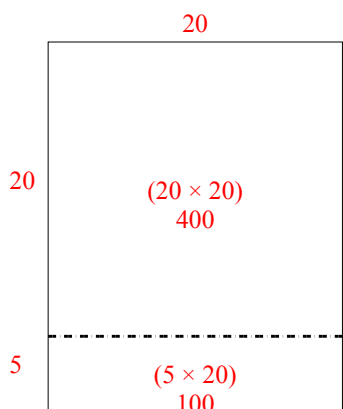
1) $30 \times 32 =$



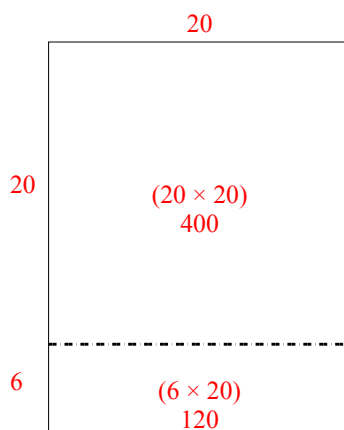
2) $20 \times 23 =$



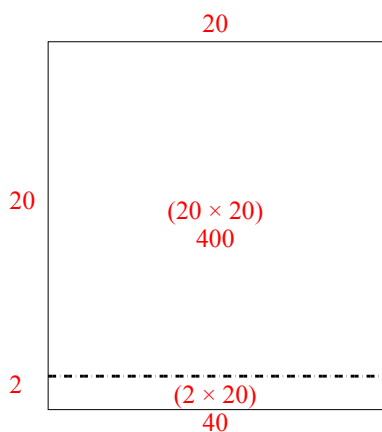
3) $25 \times 20 =$



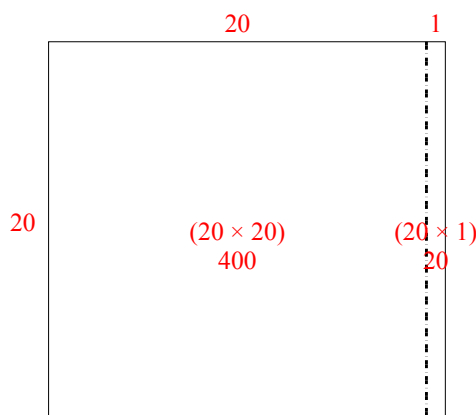
4) $26 \times 20 =$



5) $22 \times 20 =$



6) $20 \times 21 =$




Câu trả lời

1. 960
2. 460
3. 500
4. 520
5. 440
6. 420




Dùng cách chia mảng để giải bài tính.


1) $32 \times 20 =$




2) $30 \times 37 =$




3) $20 \times 22 =$




4) $20 \times 29 =$



5) $23 \times 20 =$



6) $28 \times 20 =$



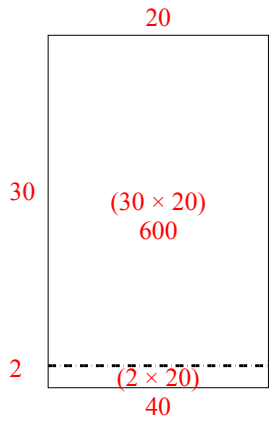
Câu trả lời

- 1. _____
- 2. _____
- 3. _____
- 4. _____
- 5. _____
- 6. _____

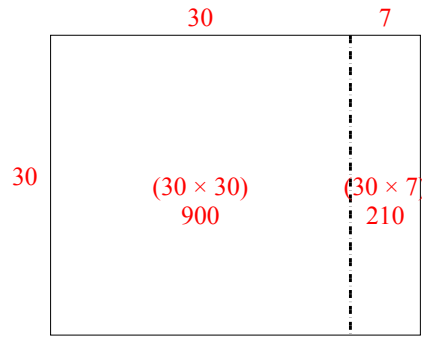


Dùng cách chia mảng để giải bài tính.

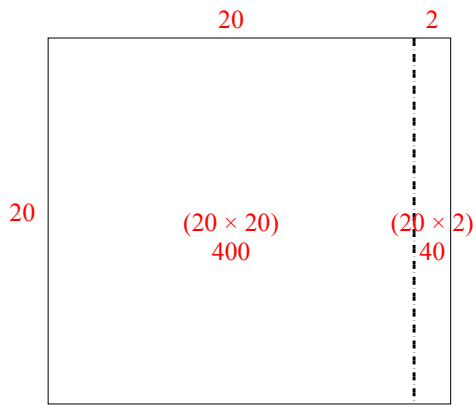
1) $32 \times 20 =$



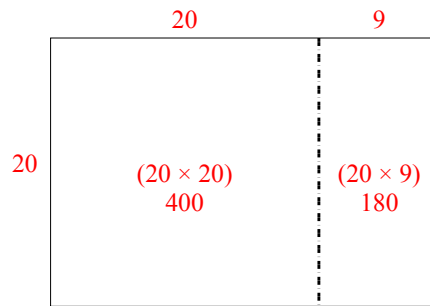
2) $30 \times 37 =$



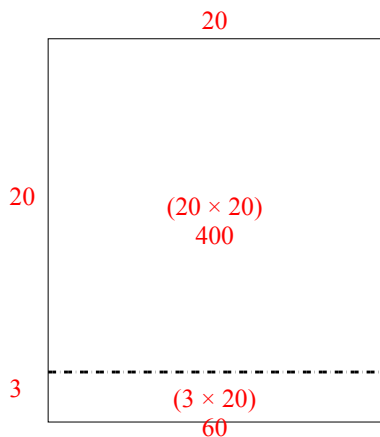
3) $20 \times 22 =$



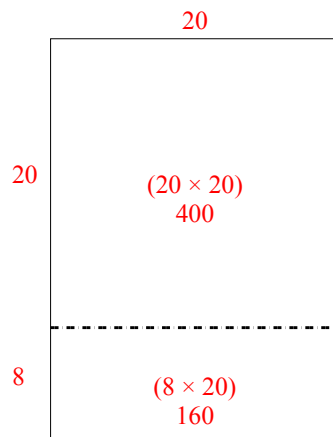
4) $20 \times 29 =$



5) $23 \times 20 =$



6) $28 \times 20 =$



Câu trả lời

1. **640**

2. **1.110**

3. **440**

4. **580**


5. **460**

6. **560**




Dùng cách chia mảng để giải bài tính.


1) $23 \times 20 =$




2) $20 \times 28 =$



3) $20 \times 21 =$




4) $26 \times 20 =$



5) $20 \times 22 =$



6) $25 \times 20 =$



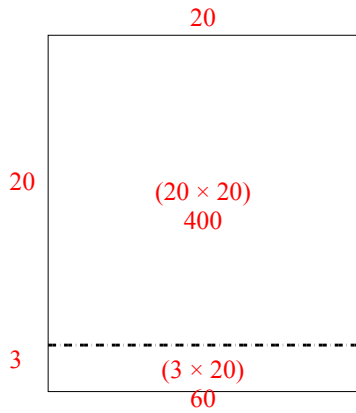
Câu trả lời

- 1. _____
- 2. _____
- 3. _____
- 4. _____
- 5. _____
- 6. _____

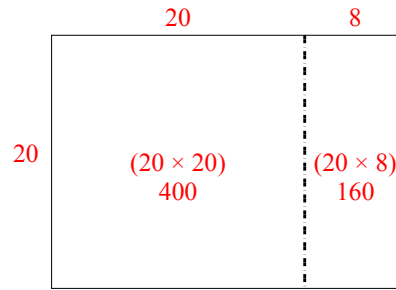


Dùng cách chia mảng để giải bài tính.

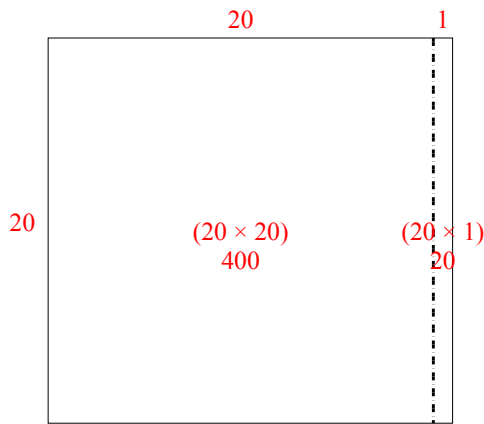
1) $23 \times 20 =$



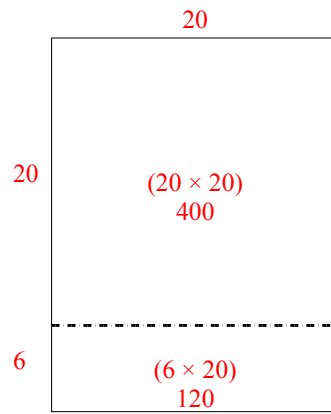
2) $20 \times 28 =$



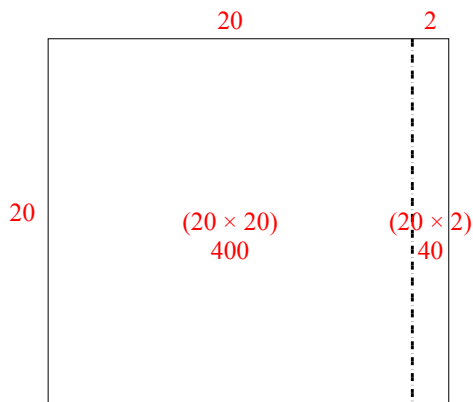
3) $20 \times 21 =$



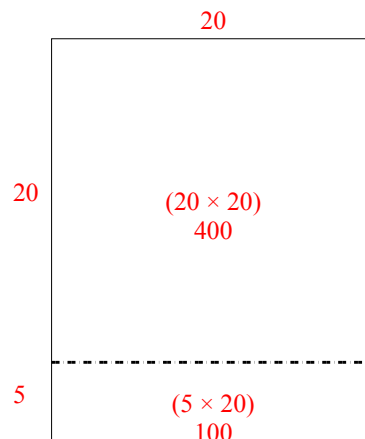
4) $26 \times 20 =$



5) $20 \times 22 =$



6) $25 \times 20 =$




Câu trả lời

1. 460
2. 560
3. 420
4. 520
5. 440
6. 500




Dùng cách chia mảng để giải bài tính.


1) $20 \times 26 =$




2) $21 \times 20 =$




3) $20 \times 22 =$




4) $20 \times 28 =$



5) $20 \times 29 =$



6) $20 \times 23 =$



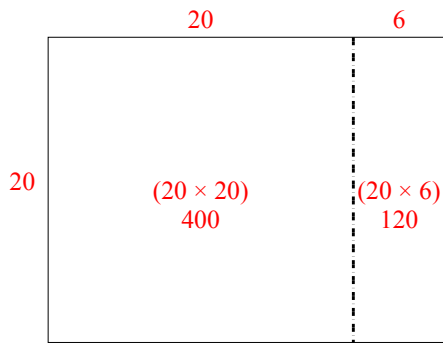
Câu trả lời

- 1. _____
- 2. _____
- 3. _____
- 4. _____
- 5. _____
- 6. _____

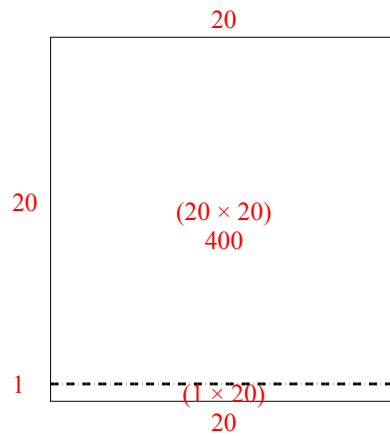


Dùng cách chia mảng để giải bài tính.

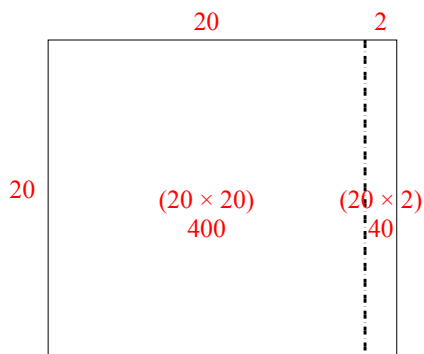
1) $20 \times 26 =$



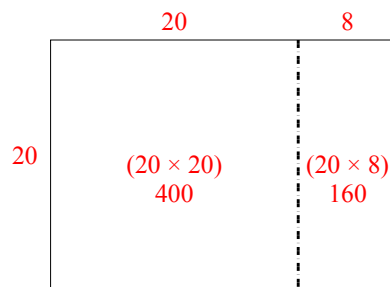
2) $21 \times 20 =$



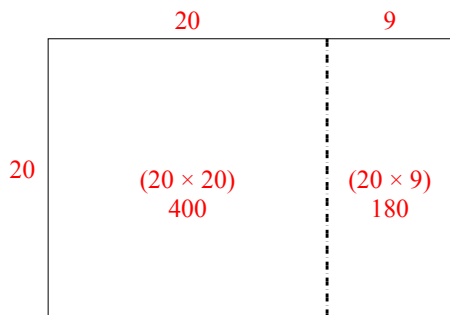
3) $20 \times 22 =$



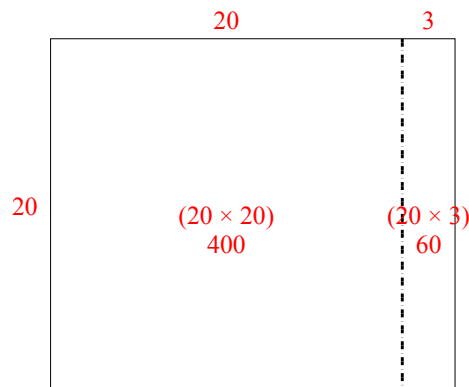
4) $20 \times 28 =$



5) $20 \times 29 =$



6) $20 \times 23 =$



Câu trả lời

1. **520**

2. **420**

3. **440**

4. **560**

5. **580**

6. **460**