





Dùng cách chia mảng để giải bài tính.


1) $23 \times 20 =$




2) $20 \times 28 =$




3) $20 \times 21 =$




4) $26 \times 20 =$



5) $20 \times 22 =$



6) $25 \times 20 =$



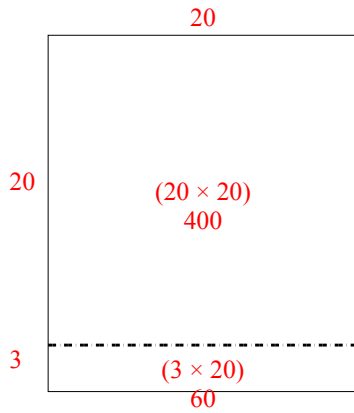
Câu trả lời

- 1. _____
- 2. _____
- 3. _____
- 4. _____
- 5. _____
- 6. _____

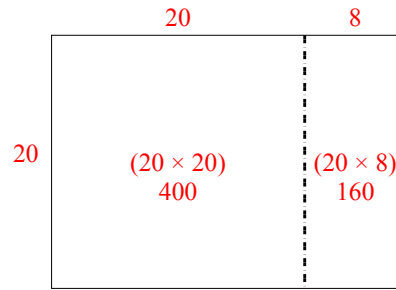


Dùng cách chia mảng để giải bài tính.

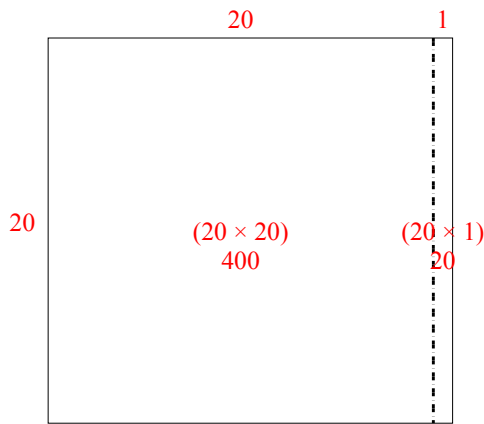
1) $23 \times 20 =$



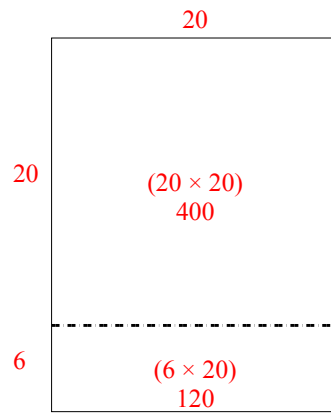
2) $20 \times 28 =$



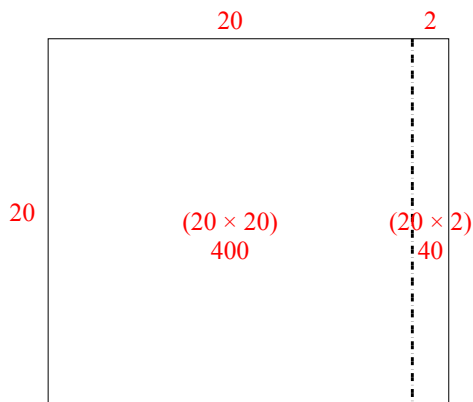
3) $20 \times 21 =$



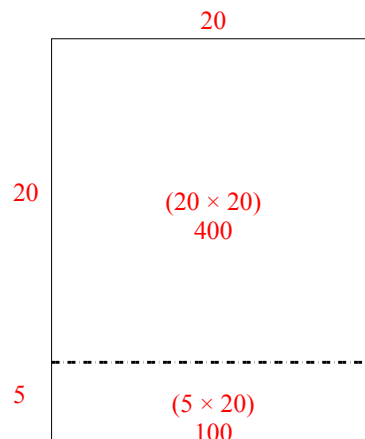
4) $26 \times 20 =$



5) $20 \times 22 =$



6) $25 \times 20 =$



Câu trả lời

1. 460
2. 560
3. 420
4. 520
5. 440
6. 500