





Dùng cách chia mảng để giải bài tính.


1) $26 \times 20 =$




2) $20 \times 22 =$




3) $29 \times 20 =$




4) $20 \times 29 =$



5) $25 \times 20 =$



6) $20 \times 28 =$



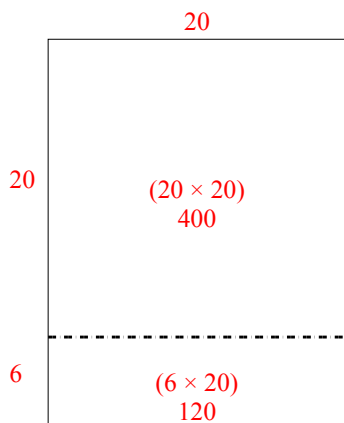
Câu trả lời

- 1. _____
- 2. _____
- 3. _____
- 4. _____
- 5. _____
- 6. _____

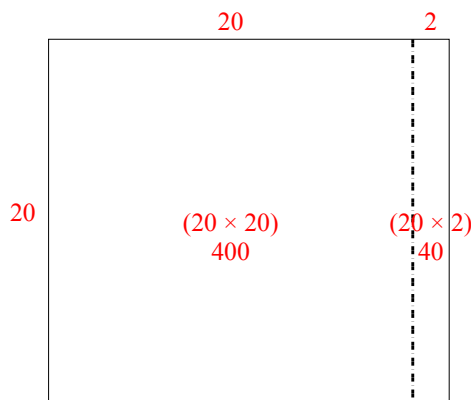


Dùng cách chia mảng để giải bài tính.

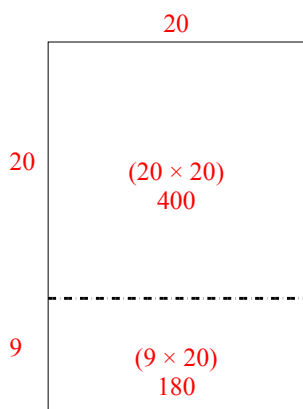
1) $26 \times 20 =$



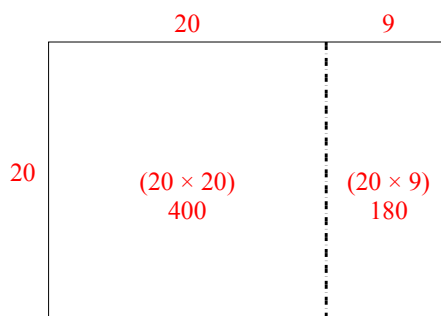
2) $20 \times 22 =$



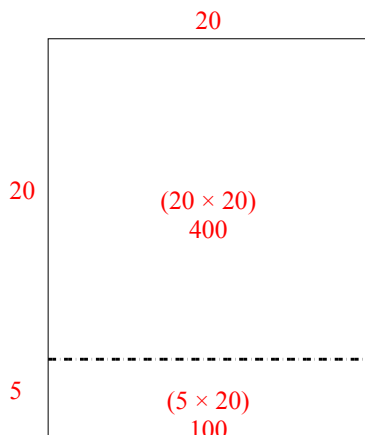
3) $29 \times 20 =$



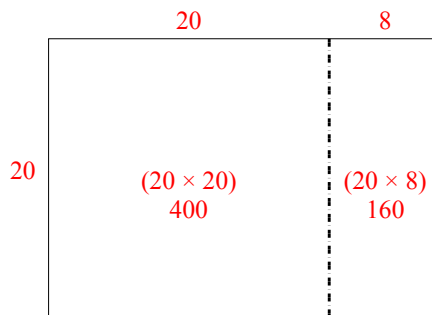
4) $20 \times 29 =$



5) $25 \times 20 =$



6) $20 \times 28 =$



Câu trả lời

1. **520**

2. **440**

3. **580**

4. **580**

5. **500**

6. **560**