





Dùng cách chia mảng để giải bài tính.


1) $21 \times 20 =$




2) $27 \times 20 =$




3) $20 \times 23 =$




4) $20 \times 27 =$



5) $20 \times 29 =$



6) $20 \times 25 =$



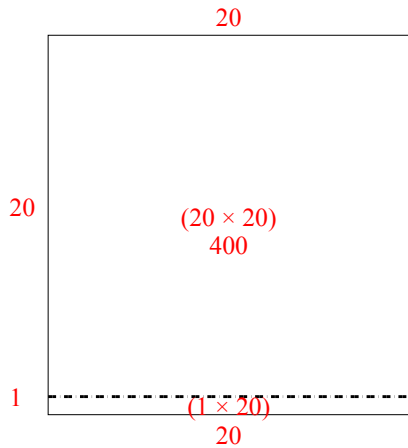
Câu trả lời

- 1. _____
- 2. _____
- 3. _____
- 4. _____
- 5. _____
- 6. _____

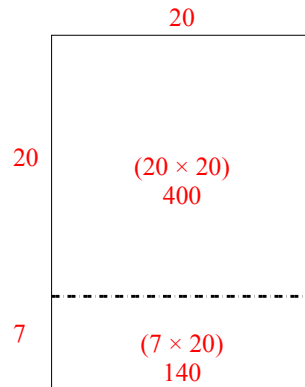


Dùng cách chia mảng để giải bài tính.

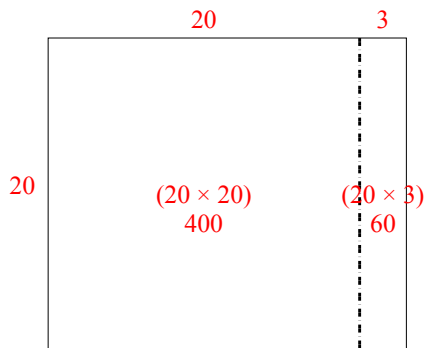
1) $21 \times 20 =$



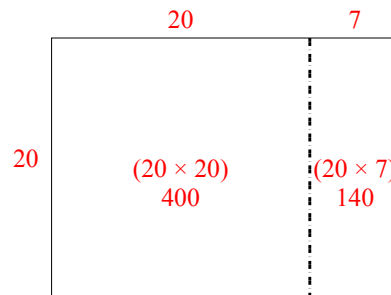
2) $27 \times 20 =$



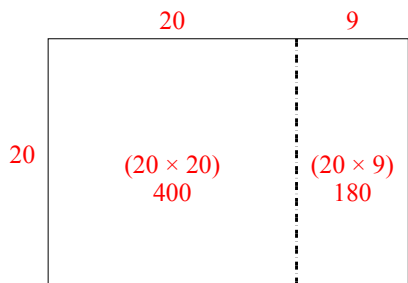
3) $20 \times 23 =$



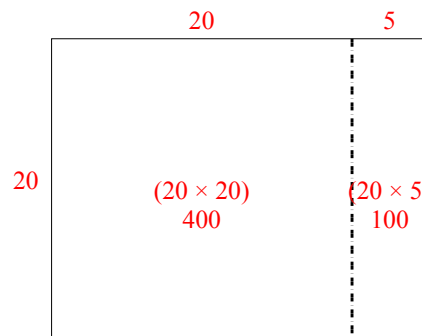
4) $20 \times 27 =$



5) $20 \times 29 =$



6) $20 \times 25 =$



Câu trả lời

1. 420
2. 540
3. 460
4. 540
5. 580
6. 500