





Dùng cách chia mảng để giải bài tính.


1) $20 \times 26 =$




2) $21 \times 20 =$




3) $20 \times 22 =$




4) $20 \times 28 =$



5) $20 \times 29 =$



6) $20 \times 23 =$



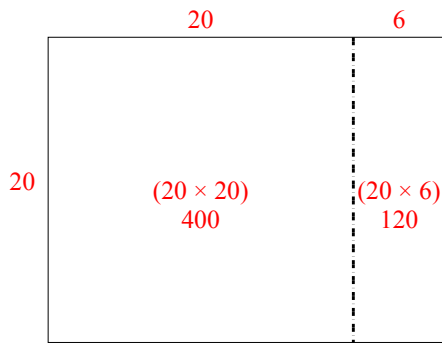
Câu trả lời

- 1. _____
- 2. _____
- 3. _____
- 4. _____
- 5. _____
- 6. _____

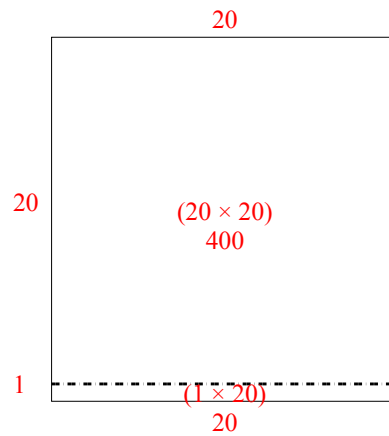


Dùng cách chia mảng để giải bài tính.

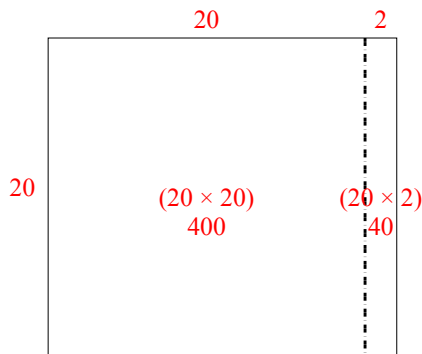
1) $20 \times 26 =$



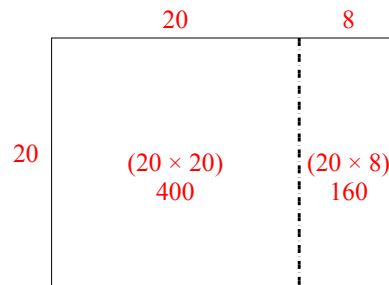
2) $21 \times 20 =$



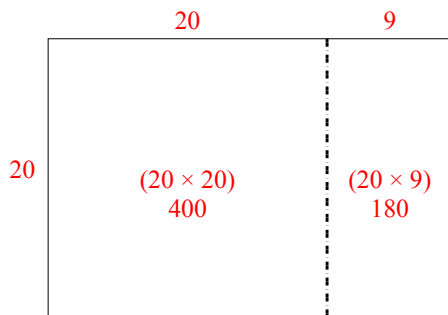
3) $20 \times 22 =$



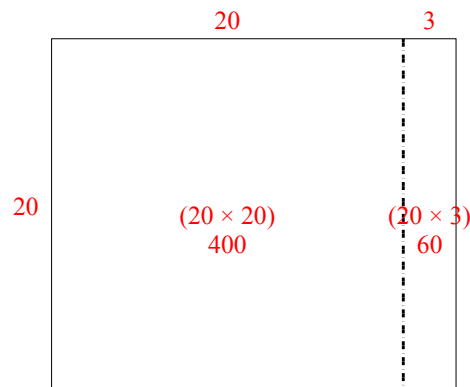
4) $20 \times 28 =$



5) $20 \times 29 =$



6) $20 \times 23 =$



Câu trả lời

1. 520
2. 420
3. 440
4. 560
5. 580
6. 460