





Dùng cách chia mảng để giải bài tính.


1)  $39 \times 30 =$




2)  $28 \times 20 =$




3)  $21 \times 20 =$




4)  $27 \times 20 =$



5)  $20 \times 28 =$



6)  $20 \times 21 =$



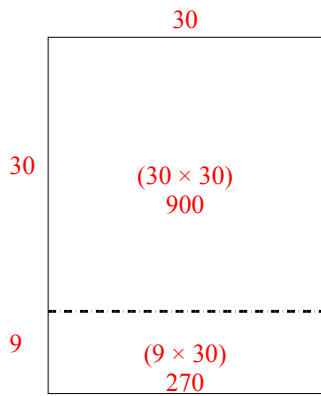
**Câu trả lời**

- 1. \_\_\_\_\_
- 2. \_\_\_\_\_
- 3. \_\_\_\_\_
- 4. \_\_\_\_\_
- 5. \_\_\_\_\_
- 6. \_\_\_\_\_

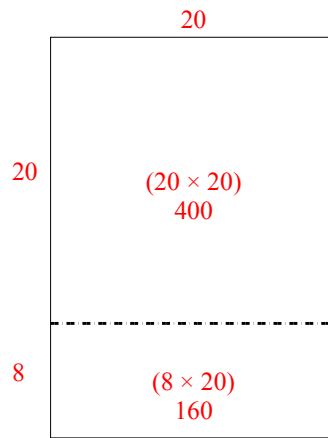


Dùng cách chia mảng để giải bài tính.

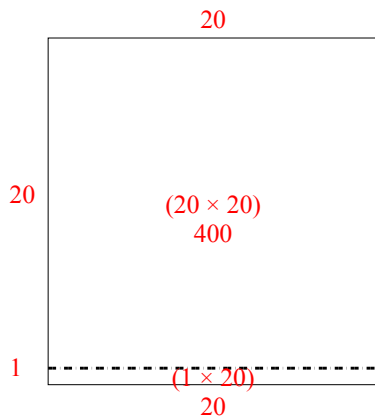
1)  $39 \times 30 =$



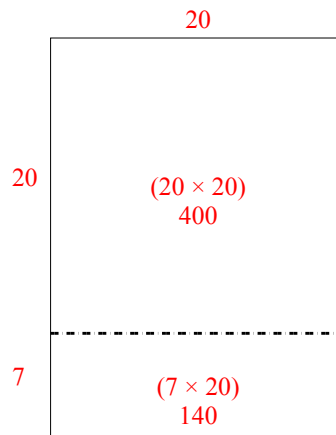
2)  $28 \times 20 =$



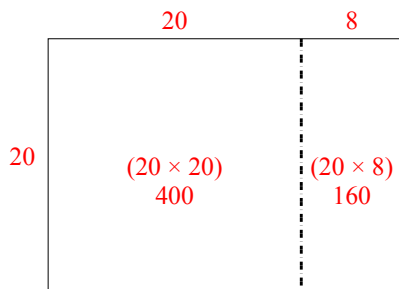
3)  $21 \times 20 =$



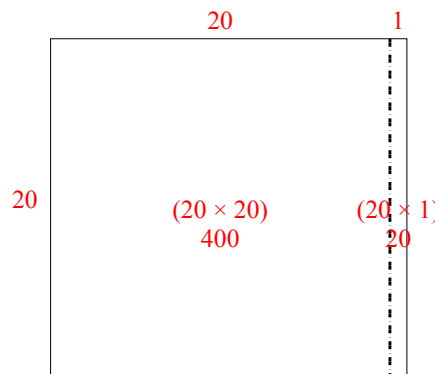
4)  $27 \times 20 =$



5)  $20 \times 28 =$



6)  $20 \times 21 =$



**Câu trả lời**

1. 1.170
2. 560
3. 420
4. 540
5. 560
6. 420