





Dùng cách chia mảng để giải bài tính.

Câu trả lời

1) $56 \times 39 =$



2) $37 \times 19 =$



1. _____

2. _____


3. _____

4. _____


5. _____

6. _____


3) $32 \times 37 =$




4) $32 \times 26 =$



5) $36 \times 16 =$



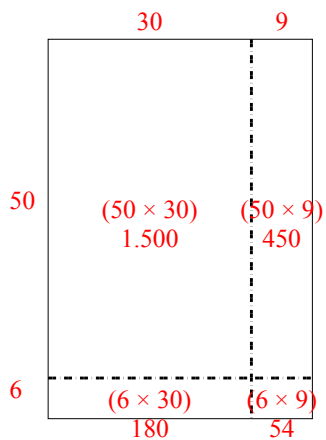
6) $37 \times 55 =$



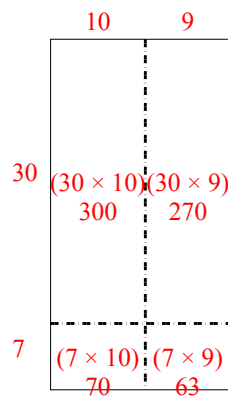


Dùng cách chia mảng để giải bài tính.

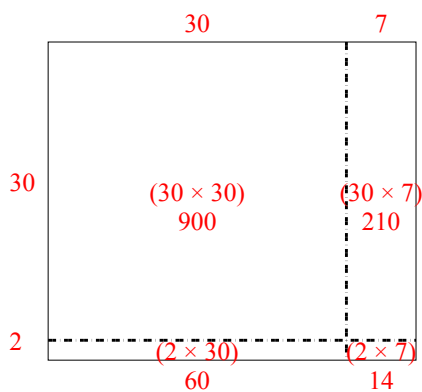
1) $56 \times 39 =$



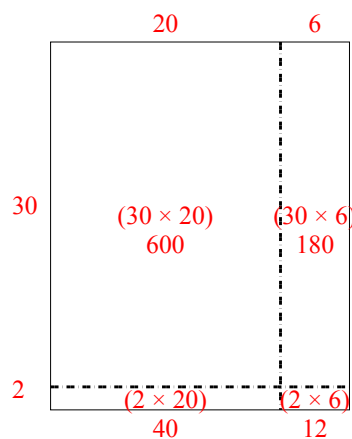
2) $37 \times 19 =$



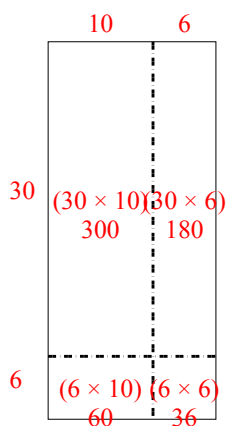
3) $32 \times 37 =$



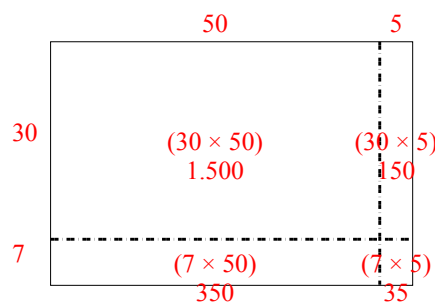
4) $32 \times 26 =$



5) $36 \times 16 =$



6) $37 \times 55 =$



Câu trả lời

1. 2.184
2. 703
3. 1.184
4. 832
5. 576
6. 2.035