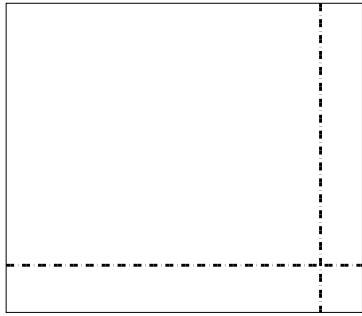


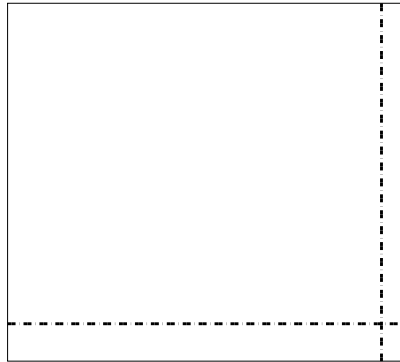


Dùng cách chia mảng để giải bài tính.


1) $59 \times 68 =$




2) $67 \times 75 =$




3) $53 \times 36 =$




4) $42 \times 55 =$



5) $43 \times 66 =$



6) $44 \times 28 =$



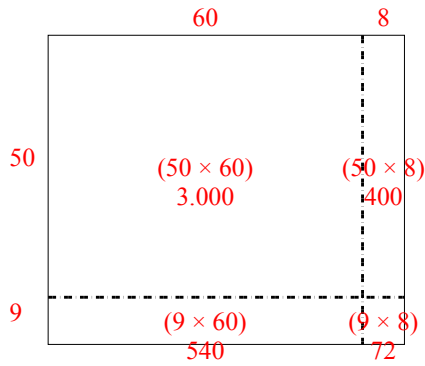
Câu trả lời

- 1. _____
- 2. _____
- 3. _____
- 4. _____
- 5. _____
- 6. _____

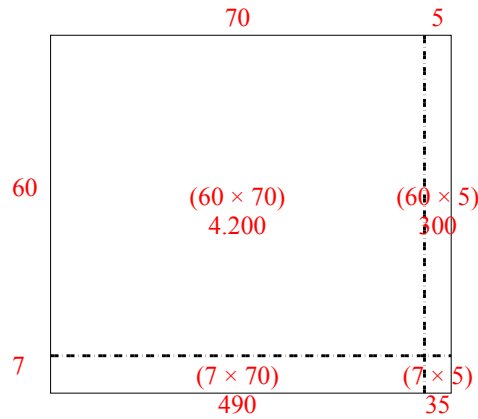


Dùng cách chia mảng để giải bài tính.

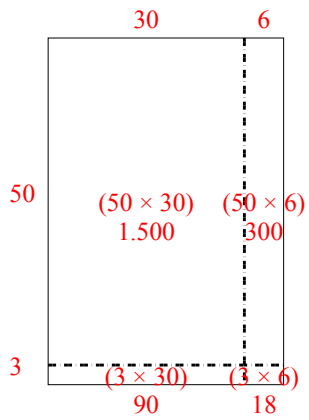
1) $59 \times 68 =$



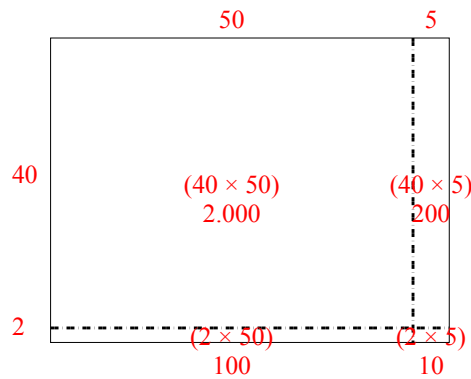
2) $67 \times 75 =$



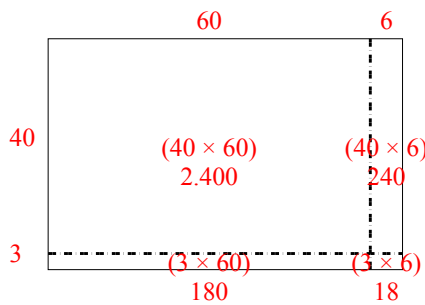
3) $53 \times 36 =$



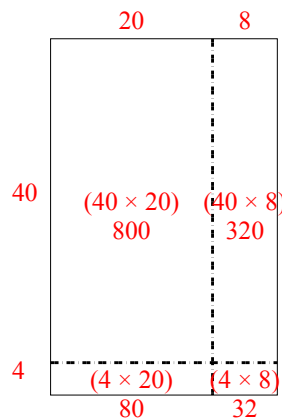
4) $42 \times 55 =$



5) $43 \times 66 =$



6) $44 \times 28 =$



Câu trả lời

1. **4.012**

2. **5.025**

3. **1.908**

4. **2.310**

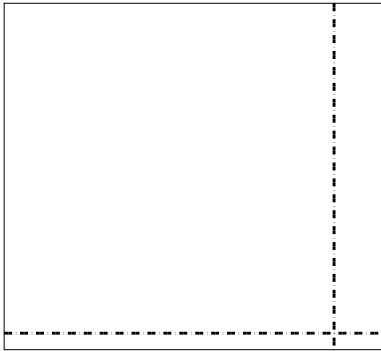
5. **2.838**

6. **1.232**




Dùng cách chia mảng để giải bài tính.


1) $63 \times 69 =$



2) $66 \times 53 =$




3) $42 \times 53 =$




4) $53 \times 72 =$



5) $62 \times 75 =$



6) $74 \times 88 =$



Câu trả lời

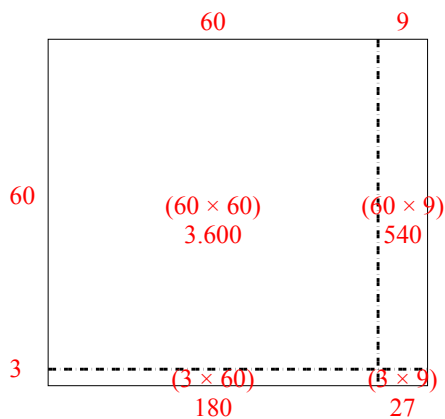
- 1. _____
- 2. _____
- 3. _____
- 4. _____
- 5. _____
- 6. _____



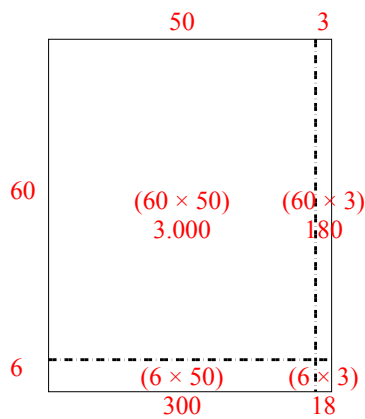
Dùng cách chia mảng để giải bài tính.

Câu trả lời

1) $63 \times 69 =$

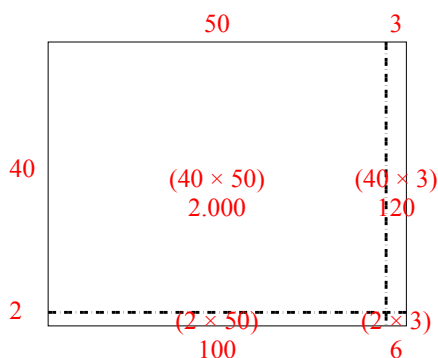


2) $66 \times 53 =$

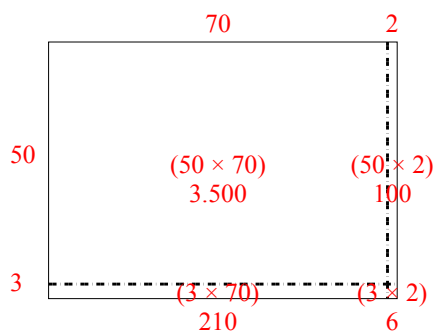


1. 4.347
2. 3.498
3. 2.226
4. 3.816
5. 4.650
6. 6.512

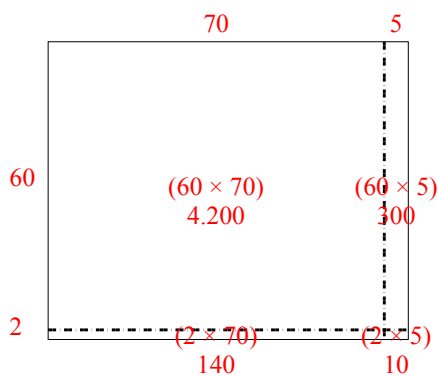
3) $42 \times 53 =$



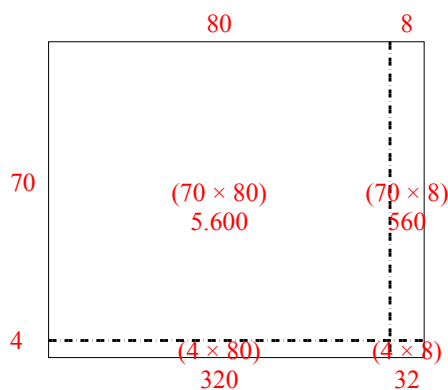
4) $53 \times 72 =$



5) $62 \times 75 =$



6) $74 \times 88 =$

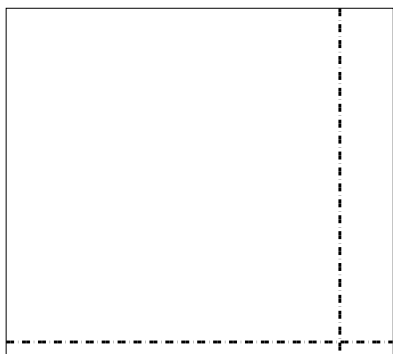





Dùng cách chia mảng để giải bài tính.

Câu trả lời

1) $52 \times 58 =$



2) $36 \times 33 =$



1. _____

2. _____


3. _____

4. _____


5. _____

6. _____


3) $33 \times 46 =$




4) $45 \times 68 =$



5) $52 \times 57 =$



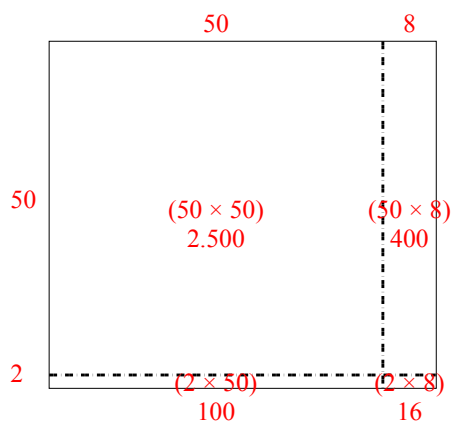
6) $42 \times 37 =$



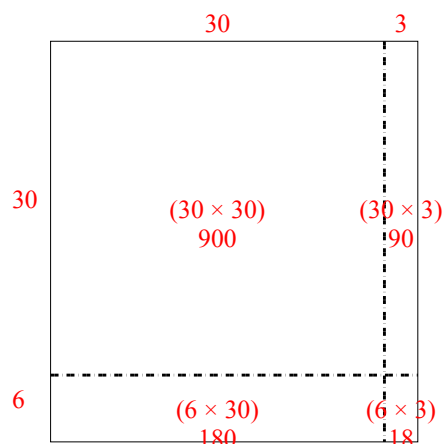


Dùng cách chia mảng để giải bài tính.

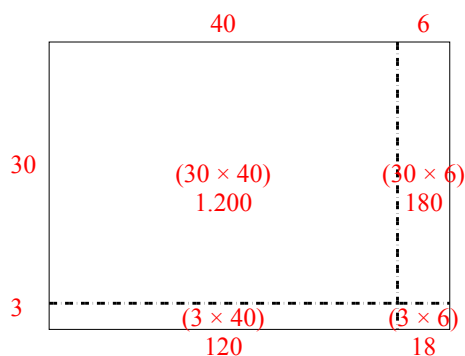
1) $52 \times 58 =$



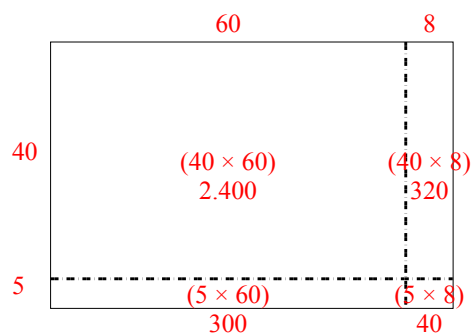
2) $36 \times 33 =$



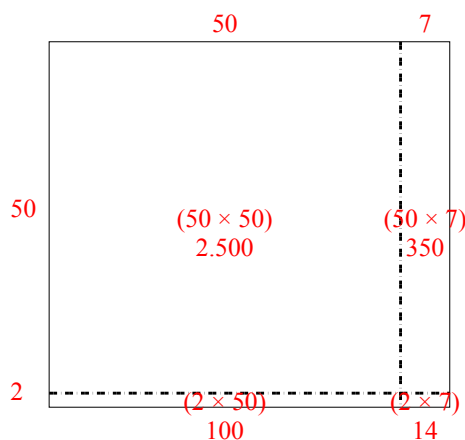
3) $33 \times 46 =$



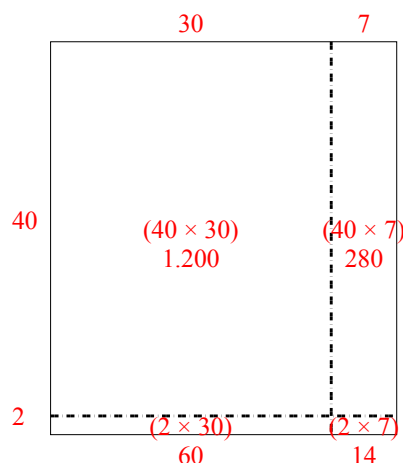
4) $45 \times 68 =$



5) $52 \times 57 =$



6) $42 \times 37 =$



Câu trả lời

1. **3.016**

2. **1.188**

3. **1.518**

4. **3.060**


5. **2.964**

6. **1.554**




Dùng cách chia mảng để giải bài tính.

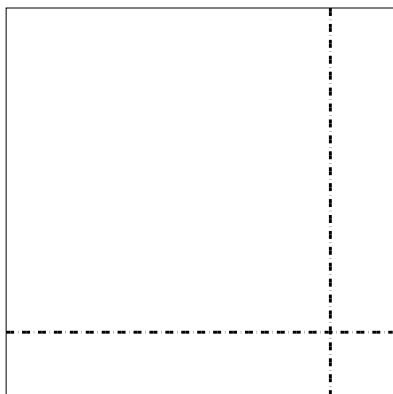
1) $43 \times 28 =$



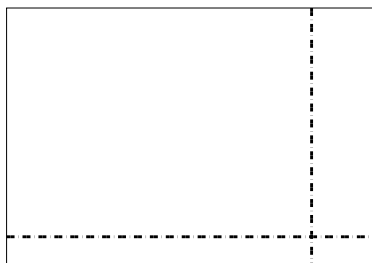
2) $37 \times 18 =$




3) $36 \times 36 =$




4) $34 \times 49 =$



5) $46 \times 54 =$



6) $44 \times 52 =$



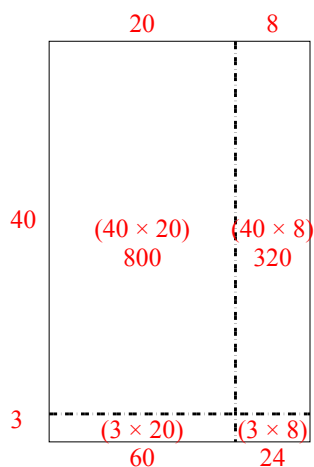
Câu trả lời

- 1. _____
- 2. _____
- 3. _____
- 4. _____
- 5. _____
- 6. _____

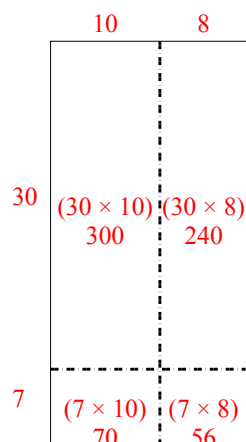


Dùng cách chia mảng để giải bài tính.

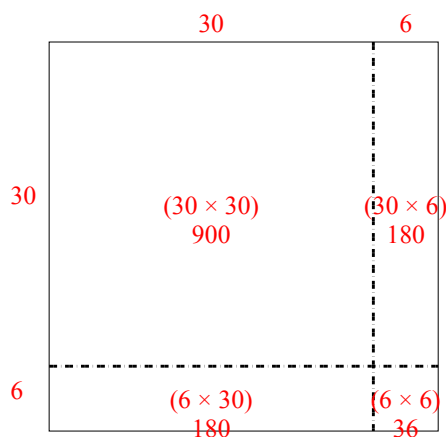
1) $43 \times 28 =$



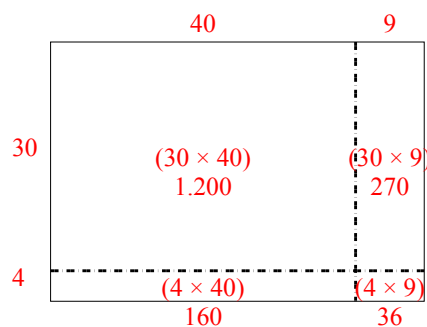
2) $37 \times 18 =$



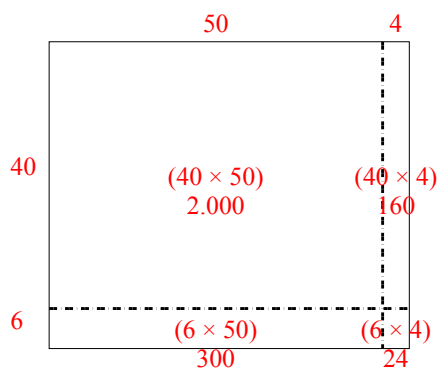
3) $36 \times 36 =$



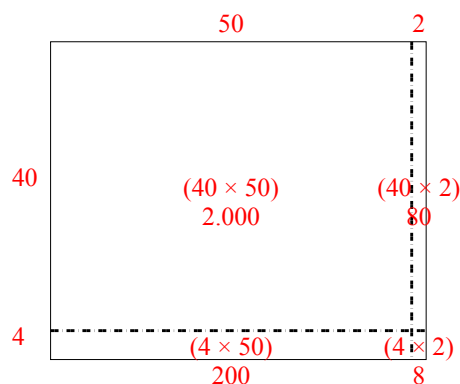
4) $34 \times 49 =$



5) $46 \times 54 =$



6) $44 \times 52 =$



Câu trả lời

1. **1.204**

2. **666**

3. **1.296**

4. **1.666**

5. **2.484**

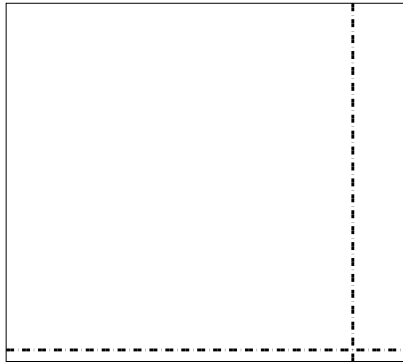
6. **2.288**




Dùng cách chia mảng để giải bài tính.

Câu trả lời

1) $62 \times 69 =$

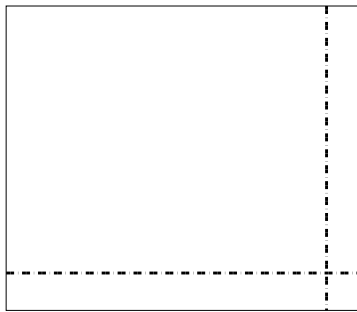


2) $53 \times 39 =$

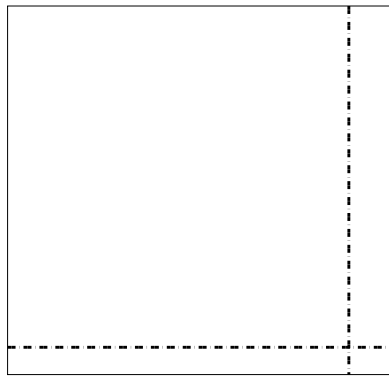


- 1. _____
- 2. _____
- 3. _____
- 4. _____
- 5. _____
- 6. _____


3) $57 \times 66 =$




4) $54 \times 57 =$



5) $46 \times 42 =$



6) $34 \times 27 =$

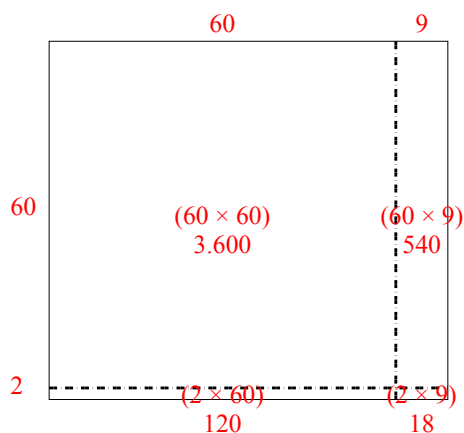




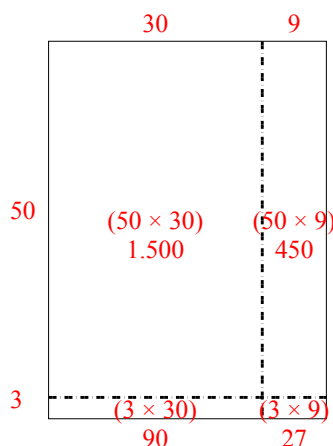
Dùng cách chia mảng để giải bài tính.

Câu trả lời

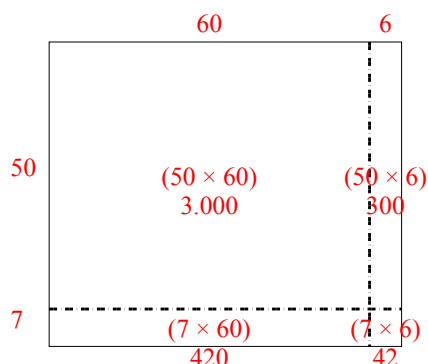
1) $62 \times 69 =$



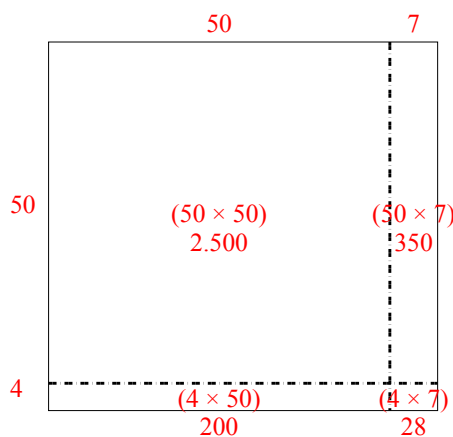
2) $53 \times 39 =$



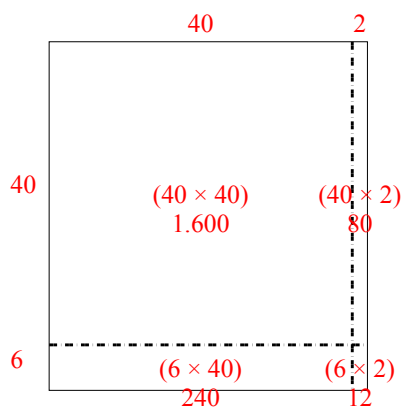
3) $57 \times 66 =$



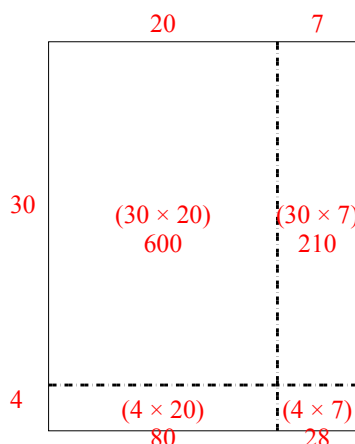
4) $54 \times 57 =$



5) $46 \times 42 =$



6) $34 \times 27 =$




1. 4.278
2. 2.067
3. 3.762
4. 3.078
5. 1.932
6. 918




Dùng cách chia mảng để giải bài tính.

Câu trả lời

1) $38 \times 22 =$




2) $36 \times 44 =$




- 1. _____
- 2. _____
- 3. _____
- 4. _____
- 5. _____
- 6. _____


3) $48 \times 45 =$




4) $49 \times 54 =$



5) $43 \times 29 =$



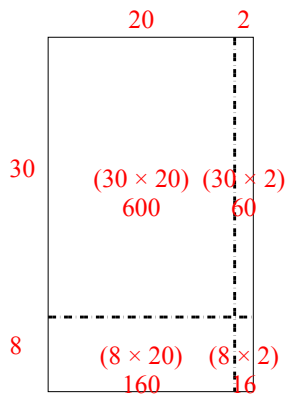
6) $39 \times 23 =$



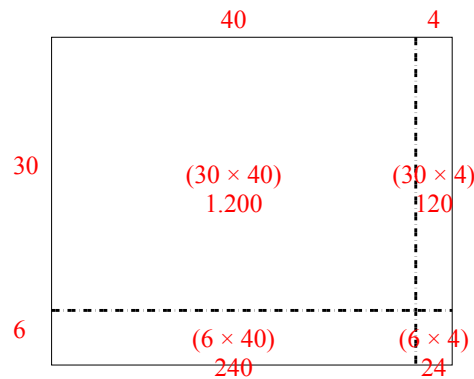


Dùng cách chia mảng để giải bài tính.

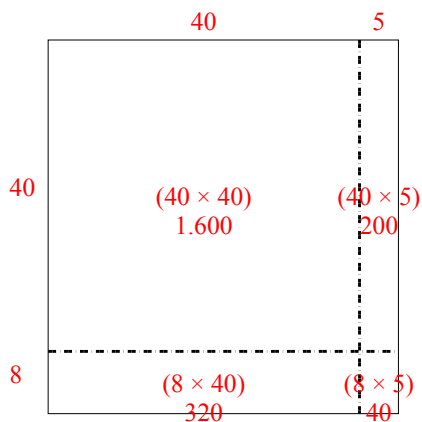
1) $38 \times 22 =$



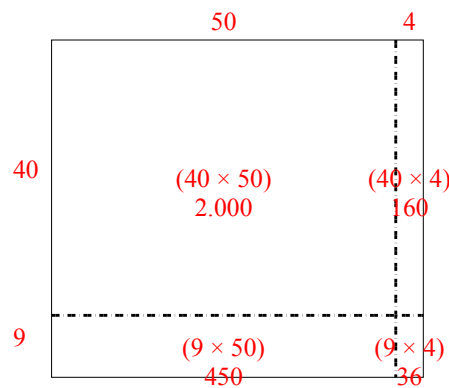
2) $36 \times 44 =$



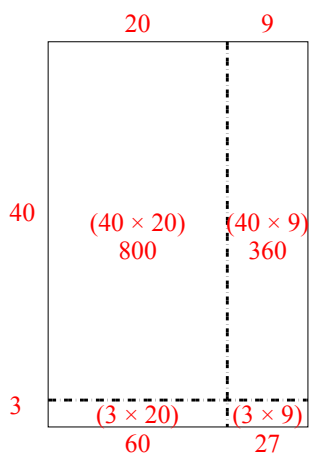
3) $48 \times 45 =$



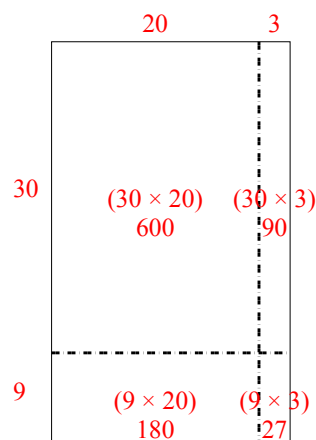
4) $49 \times 54 =$



5) $43 \times 29 =$



6) $39 \times 23 =$



Câu trả lời

1. **836**

2. **1.584**

3. **2.160**

4. **2.646**

5. **1.247**


6. **897**




Dùng cách chia mảng để giải bài tính.

Câu trả lời

1) $36 \times 55 =$



2) $42 \times 26 =$



1. _____

2. _____


3. _____

4. _____


5. _____

6. _____


3) $37 \times 48 =$




4) $44 \times 59 =$



5) $46 \times 39 =$



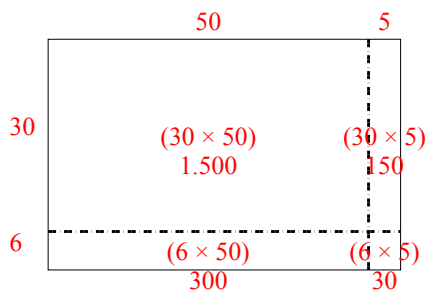
6) $47 \times 59 =$



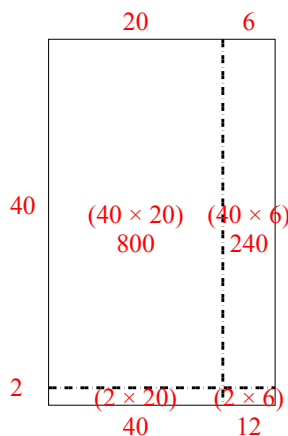


Dùng cách chia mảng để giải bài tính.

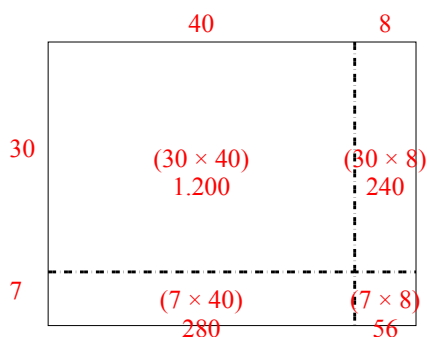
1) $36 \times 55 =$



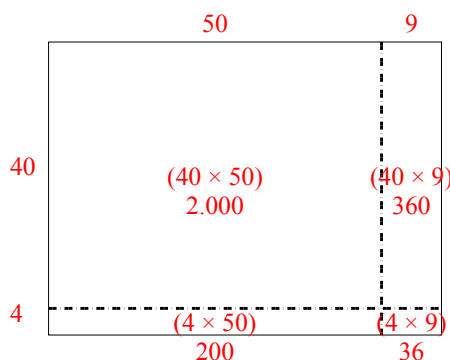
2) $42 \times 26 =$



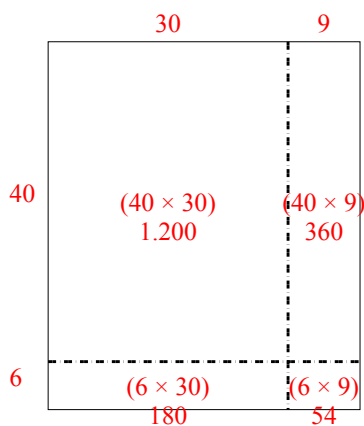
3) $37 \times 48 =$



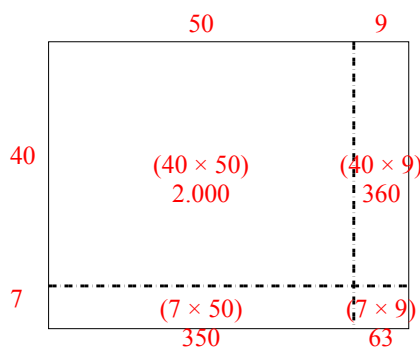
4) $44 \times 59 =$



5) $46 \times 39 =$



6) $47 \times 59 =$



Câu trả lời

1. **1.980**

2. **1.092**

3. **1.776**

4. **2.596**


5. **1.794**

6. **2.773**




Dùng cách chia mảng để giải bài tính.


1) $48 \times 23 =$




2) $45 \times 44 =$



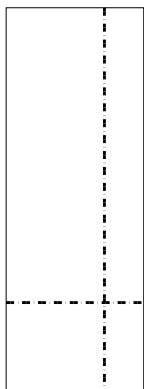
3) $33 \times 36 =$




4) $37 \times 24 =$



5) $39 \times 14 =$



6) $35 \times 12 =$



Câu trả lời

1. _____

2. _____

3. _____

4. _____

5. _____

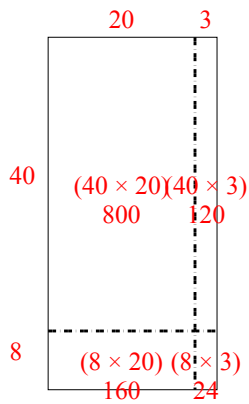
6. _____



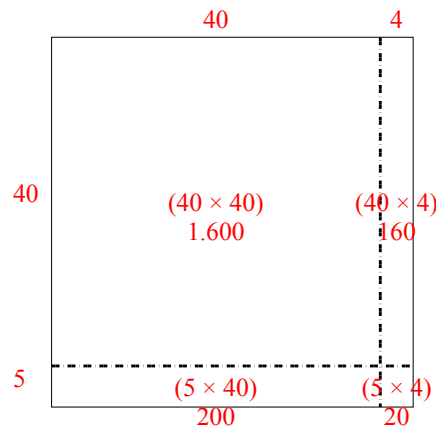
Dùng cách chia mảng để giải bài tính.

Câu trả lời

1) $48 \times 23 =$



2) $45 \times 44 =$



1. **1.104**

2. **1.980**

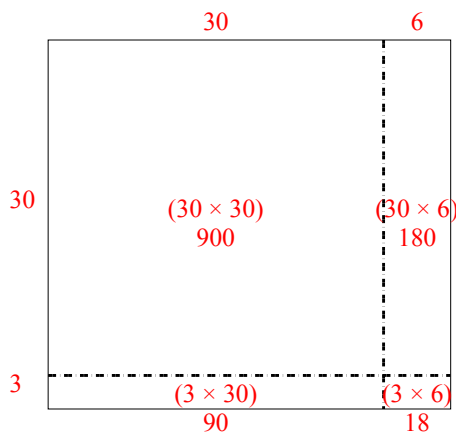
3. **1.188**

4. **888**

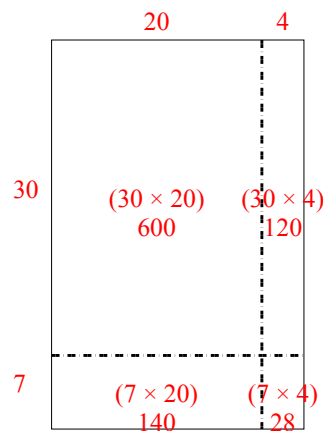
5. **546**

6. **420**

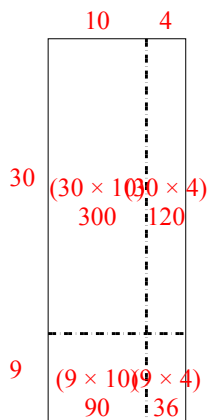
3) $33 \times 36 =$



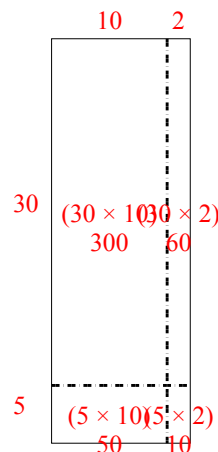
4) $37 \times 24 =$



5) $39 \times 14 =$




6) $35 \times 12 =$



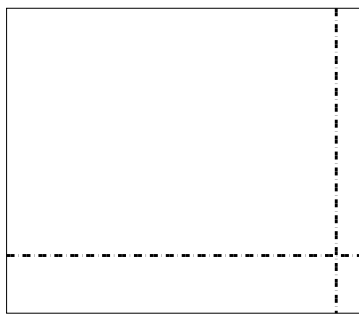


Dùng cách chia mảng để giải bài tính.


1) $43 \times 36 =$




2) $37 \times 43 =$




3) $33 \times 22 =$




4) $34 \times 45 =$



5) $39 \times 46 =$



6) $36 \times 35 =$



Câu trả lời

1. _____

2. _____

3. _____

4. _____

5. _____

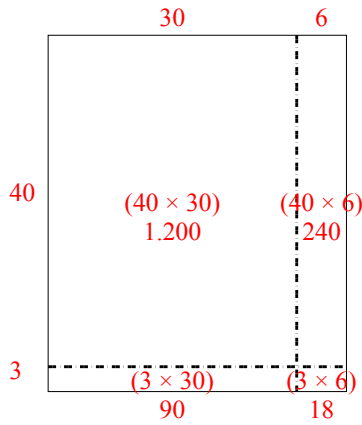
6. _____



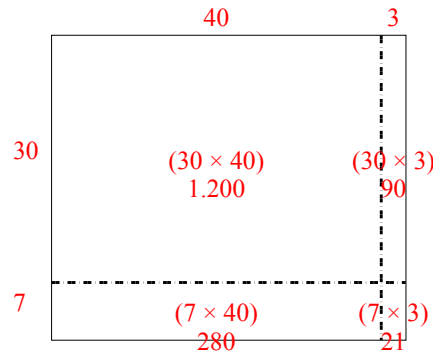
Dùng cách chia mảng để giải bài tính.

Câu trả lời

1) $43 \times 36 =$



2) $37 \times 43 =$



1. **1.548**

2. **1.591**

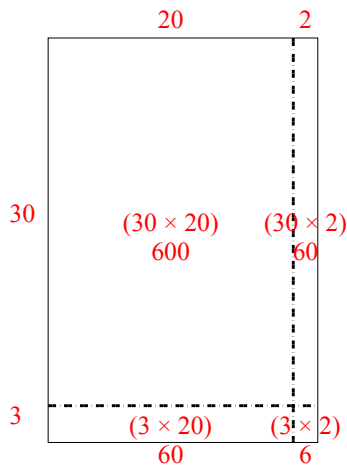
3. **726**

4. **1.530**

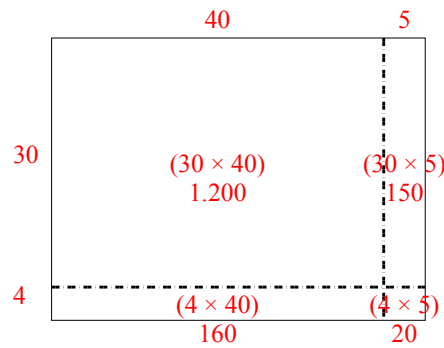
5. **1.794**

6. **1.260**

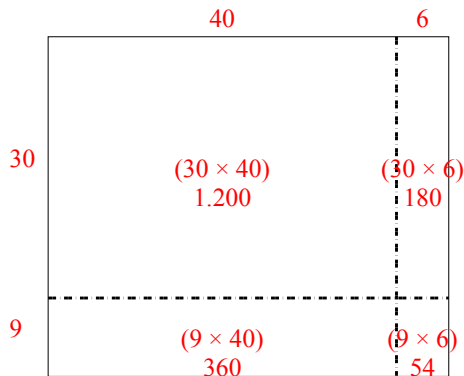
3) $33 \times 22 =$



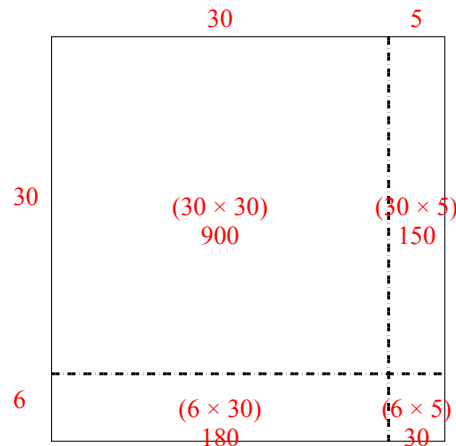
4) $34 \times 45 =$



5) $39 \times 46 =$




6) $36 \times 35 =$






Dùng cách chia mảng để giải bài tính.


1) $45 \times 59 =$




2) $49 \times 59 =$




3) $39 \times 16 =$




4) $37 \times 13 =$



5) $37 \times 48 =$



6) $37 \times 14 =$



Câu trả lời

1. _____

2. _____

3. _____

4. _____

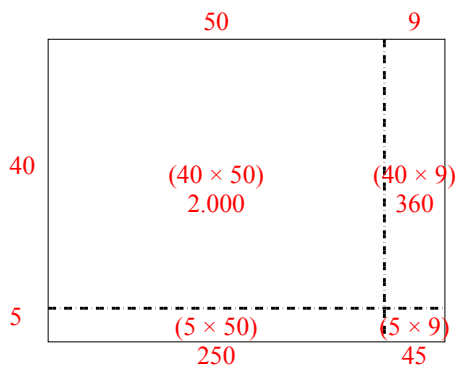
5. _____

6. _____

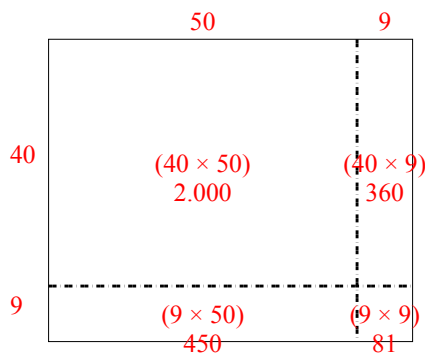


Dùng cách chia mảng để giải bài tính.

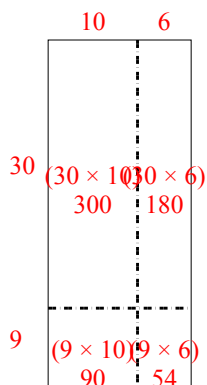
1) $45 \times 59 =$



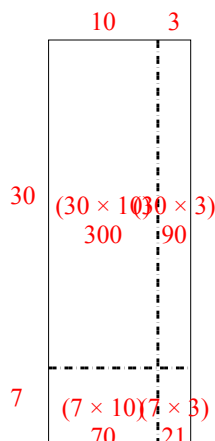
2) $49 \times 59 =$



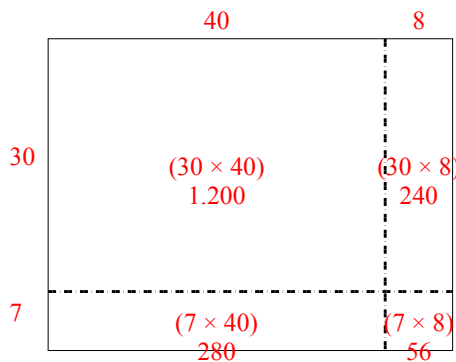
3) $39 \times 16 =$



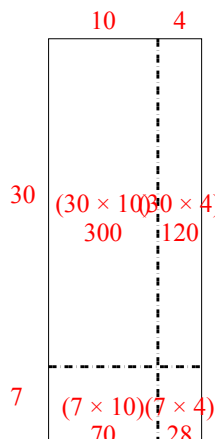
4) $37 \times 13 =$



5) $37 \times 48 =$



6) $37 \times 14 =$



Câu trả lời

1. 2.655
2. 2.891
3. 624
4. 481
5. 1.776
6. 518