





Dùng cách chia mảng để giải bài tính.


1) $43 \times 36 =$




2) $37 \times 43 =$




3) $33 \times 22 =$




4) $34 \times 45 =$



5) $39 \times 46 =$



6) $36 \times 35 =$



Câu trả lời

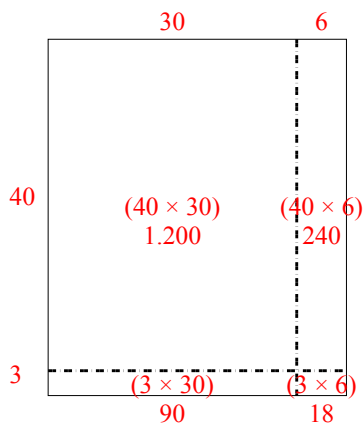
- 1. _____
- 2. _____
- 3. _____
- 4. _____
- 5. _____
- 6. _____



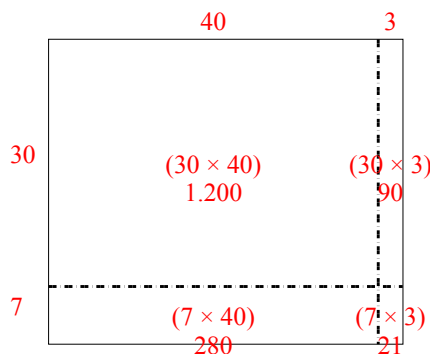
Dùng cách chia mảng để giải bài tính.

Câu trả lời

1) $43 \times 36 =$



2) $37 \times 43 =$



1. **1.548**

2. **1.591**

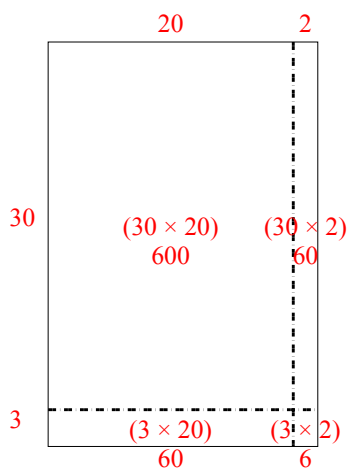
3. **726**

4. **1.530**

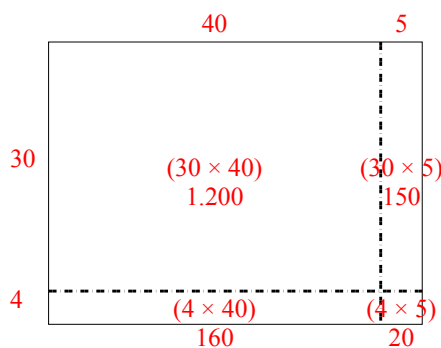
5. **1.794**

6. **1.260**

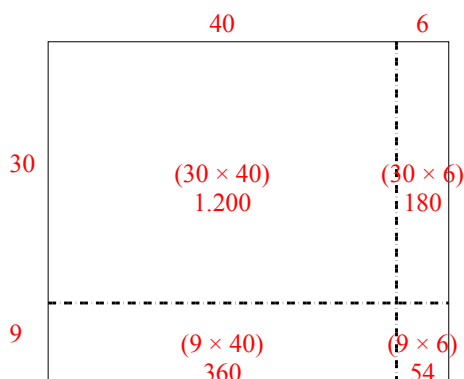
3) $33 \times 22 =$



4) $34 \times 45 =$



5) $39 \times 46 =$



6) $36 \times 35 =$

