





Dùng cách chia mảng để giải bài tính.


1)  $48 \times 23 =$




2)  $45 \times 44 =$



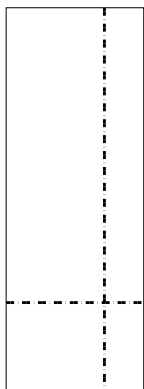
3)  $33 \times 36 =$




4)  $37 \times 24 =$



5)  $39 \times 14 =$



6)  $35 \times 12 =$



**Câu trả lời**

1. \_\_\_\_\_

2. \_\_\_\_\_

3. \_\_\_\_\_

4. \_\_\_\_\_

5. \_\_\_\_\_

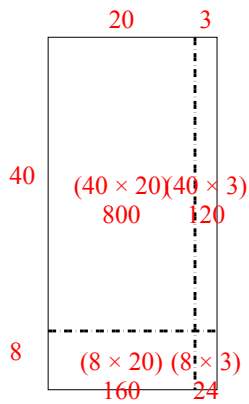
6. \_\_\_\_\_



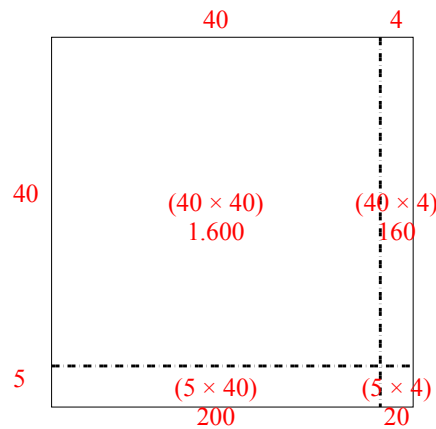
Dùng cách chia mảng để giải bài tính.

**Câu trả lời**

1)  $48 \times 23 =$



2)  $45 \times 44 =$



1. **1.104**

2. **1.980**

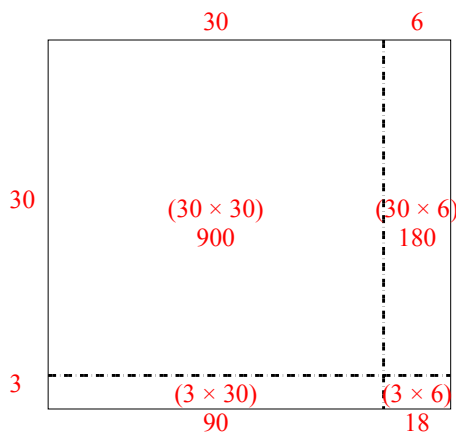
3. **1.188**

4. **888**

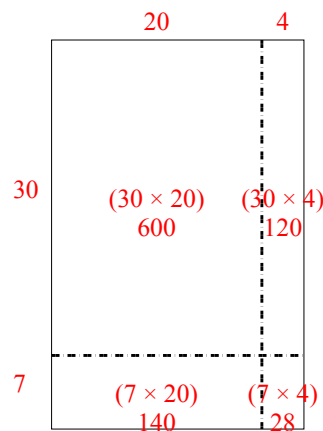
5. **546**

6. **420**

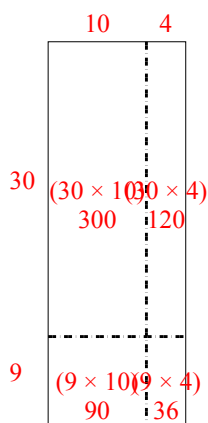
3)  $33 \times 36 =$



4)  $37 \times 24 =$



5)  $39 \times 14 =$



6)  $35 \times 12 =$

