





Dùng cách chia mảng để giải bài tính.

**Câu trả lời**

1)  $36 \times 55 =$



2)  $42 \times 26 =$



1. \_\_\_\_\_

2. \_\_\_\_\_


3. \_\_\_\_\_

4. \_\_\_\_\_


5. \_\_\_\_\_

6. \_\_\_\_\_


3)  $37 \times 48 =$




4)  $44 \times 59 =$



5)  $46 \times 39 =$



6)  $47 \times 59 =$

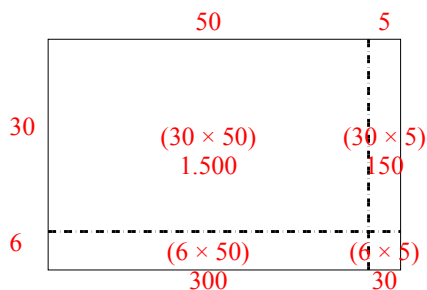




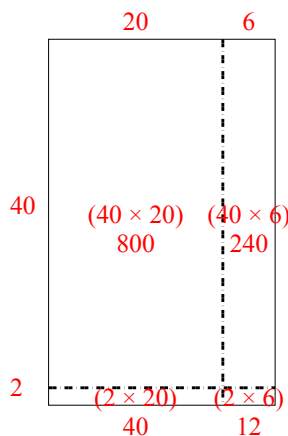
Dùng cách chia mảng để giải bài tính.

**Câu trả lời**

1)  $36 \times 55 =$



2)  $42 \times 26 =$



1. **1.980**

2. **1.092**

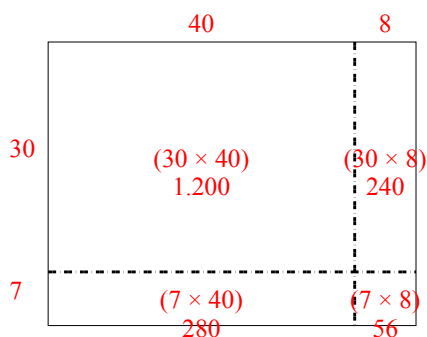
3. **1.776**

4. **2.596**

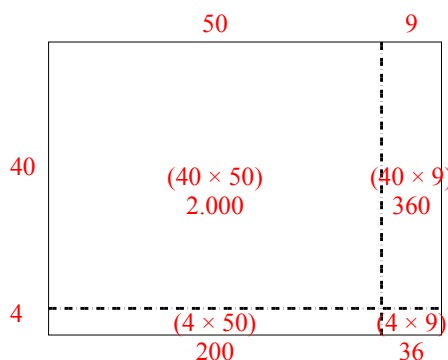
5. **1.794**

6. **2.773**

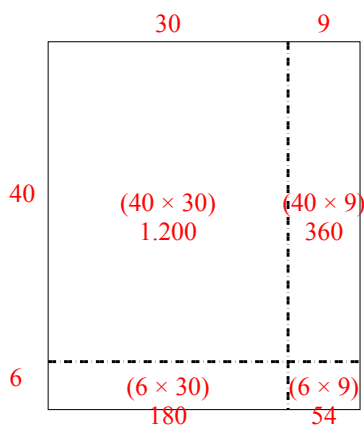
3)  $37 \times 48 =$



4)  $44 \times 59 =$



5)  $46 \times 39 =$



6)  $47 \times 59 =$

