





Dùng cách chia mảng để giải bài tính.

**Câu trả lời**

1)  $38 \times 22 =$



2)  $36 \times 44 =$



1. \_\_\_\_\_

2. \_\_\_\_\_


3. \_\_\_\_\_

4. \_\_\_\_\_


5. \_\_\_\_\_

6. \_\_\_\_\_


3)  $48 \times 45 =$




4)  $49 \times 54 =$



5)  $43 \times 29 =$



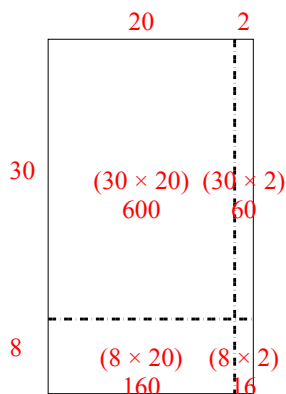
6)  $39 \times 23 =$



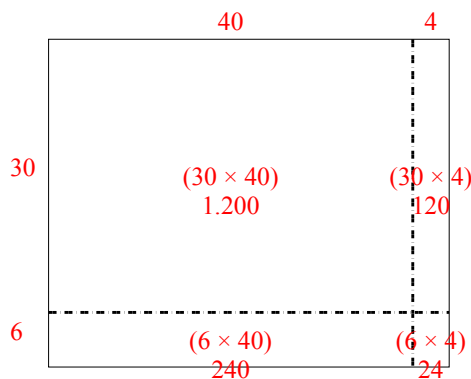


Dùng cách chia mảng để giải bài tính.

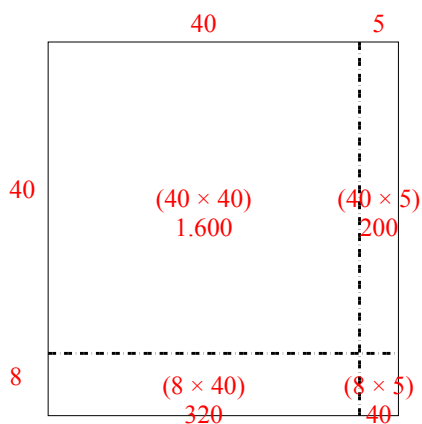
1)  $38 \times 22 =$



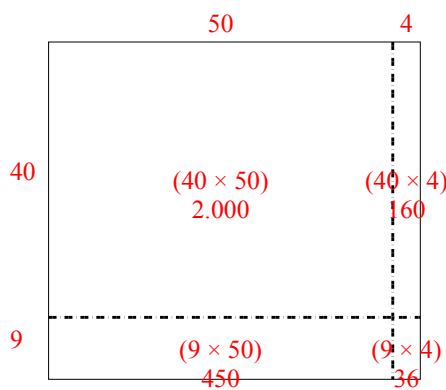
2)  $36 \times 44 =$



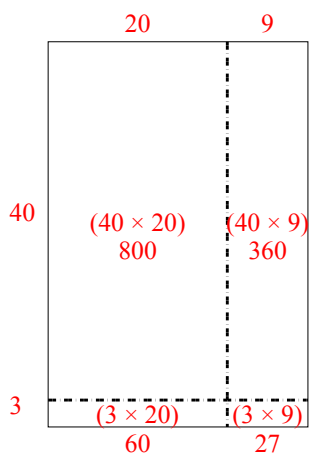
3)  $48 \times 45 =$



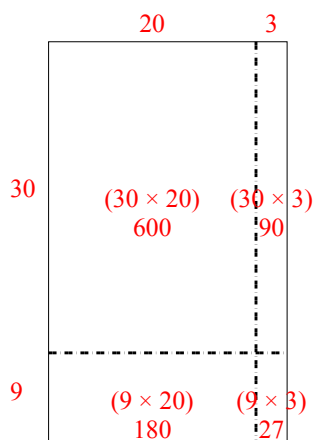
4)  $49 \times 54 =$



5)  $43 \times 29 =$



6)  $39 \times 23 =$



**Câu trả lời**

1. **836**

2. **1.584**

3. **2.160**

4. **2.646**

5. **1.247**

6. **897**